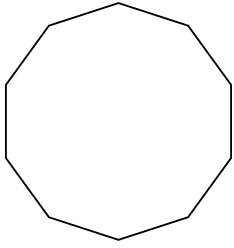


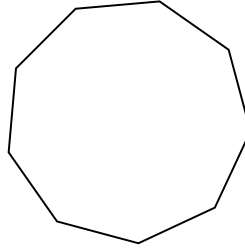


Identifiziere die Art der gezeigten Form.

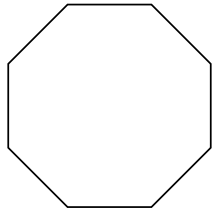
1)



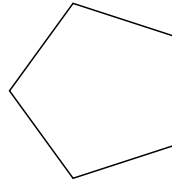
2)



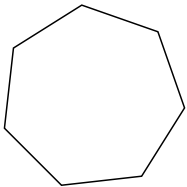
3)



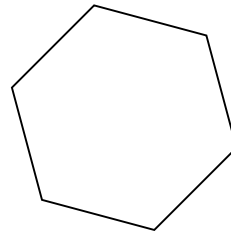
4)




5)




6)



7)



8)



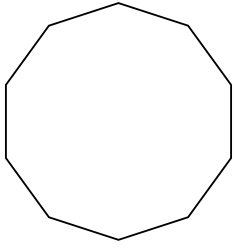
Antworten

- 1. _____
- 2. _____
- 3. _____
- 4. _____
- 5. _____
- 6. _____
- 7. _____
- 8. _____

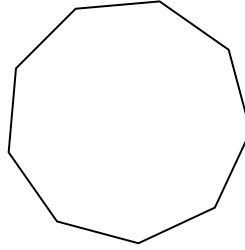


Identifiziere die Art der gezeigten Form.

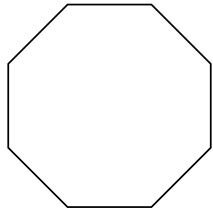
1)



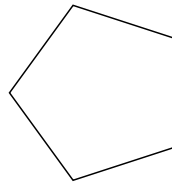
2)



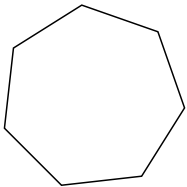
3)



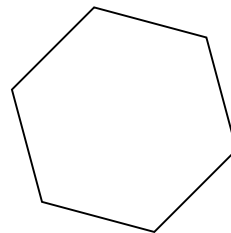
4)




5)




6)



7)



8)

**Antworten**1. Zehneck2. Neuneck3. Achteck4. Fünfeck5. Siebeneck6. Sechseck7. triangle8. Viereck