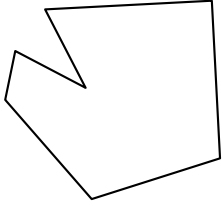




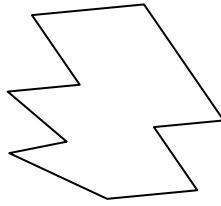
Identifiziere jede gezeigte Form.

Antworten

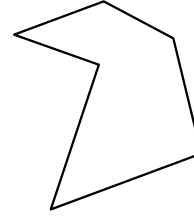
1)



2)

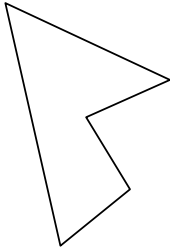


3)

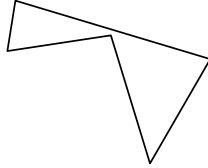


1. _____

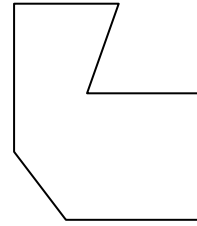
4)



5)



6)



2. _____


3. _____

4. _____

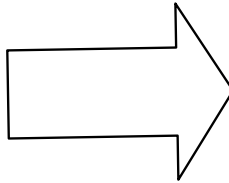
5. _____

6. _____


7)



8)



9)



7. _____

8. _____

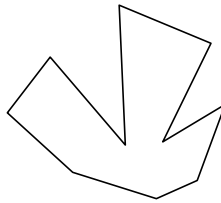
9. _____

10. _____

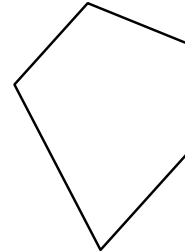
10)



11)



12)



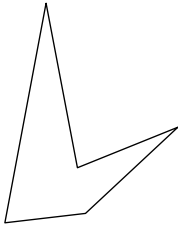
11. _____

12. _____

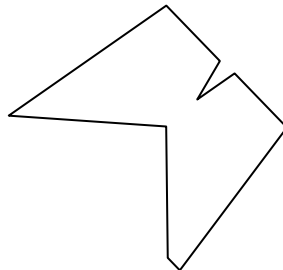
13. _____

14. _____


13)



14)



15)

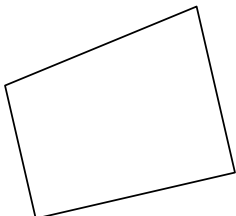


15. _____

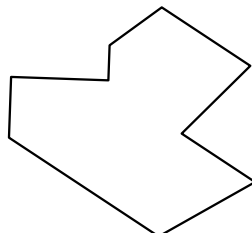
16. _____

17. _____


16)



17)



18)



18. _____

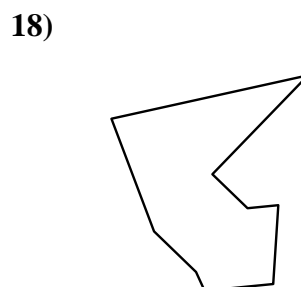
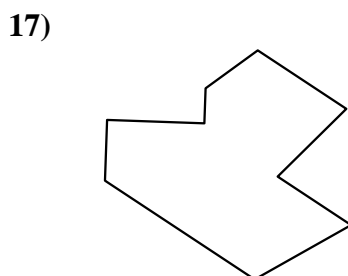
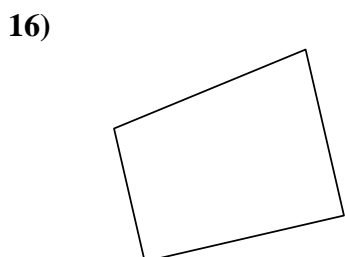

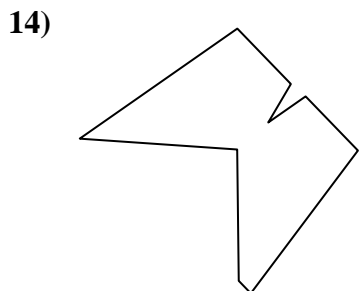
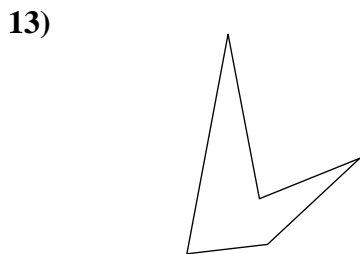
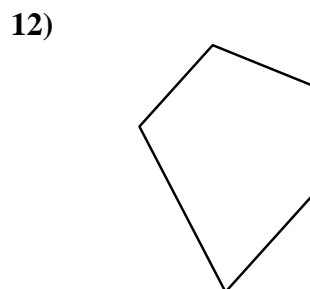
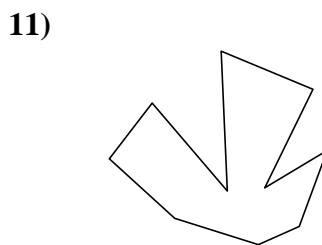
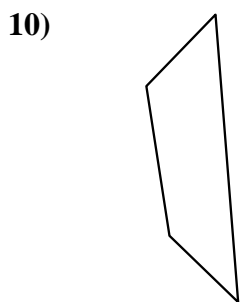
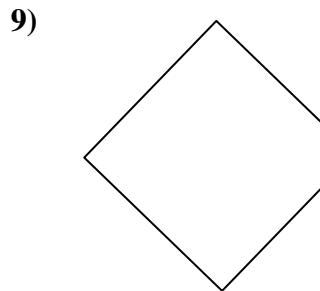
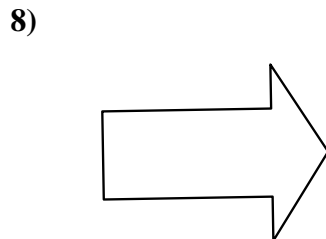
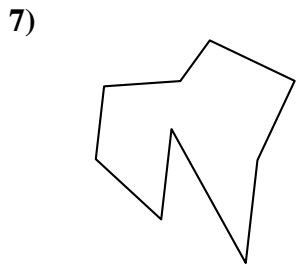
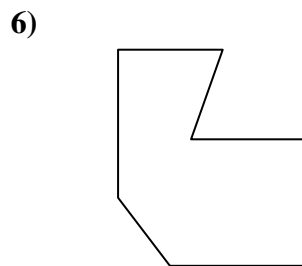
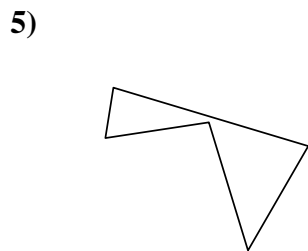
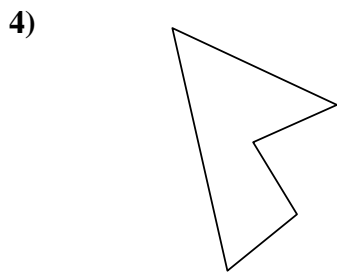
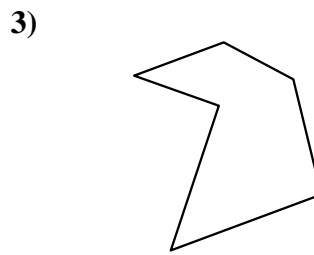
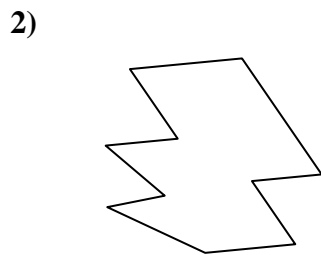
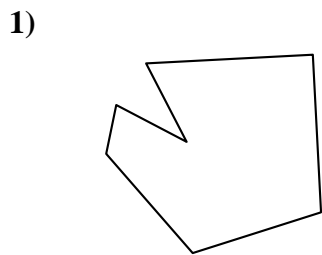
19. _____

20. _____

21. _____



Identifiziere jede gezeigte Form.



Antworten

1. Siebeneck

2. Zehneck

3. Sechseck

4. Fünfeck

5. Fünfeck

6. Siebeneck

7. Neuneck

8. Siebeneck

9. Fünfeck

10. Viereck

11. Zehneck

12. Fünfeck

13. Fünfeck

14. Neuneck

15. Achteck

16. Viereck

17. Neuneck

18. Neuneck

19. Achteck

20. Viereck

21. Achteck