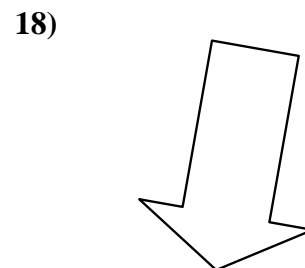
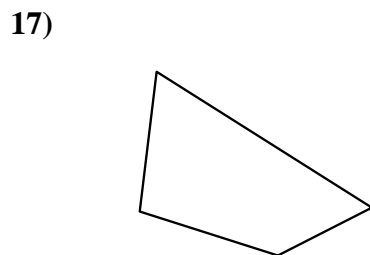
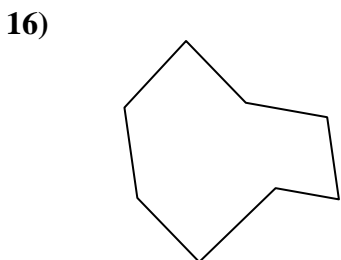
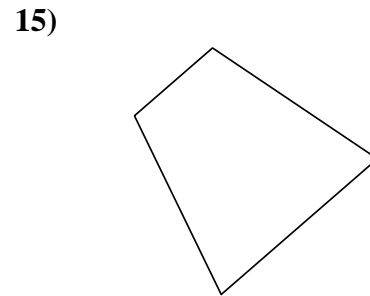
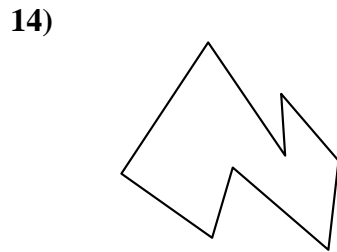
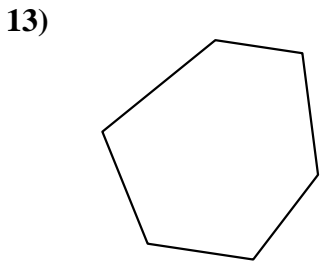
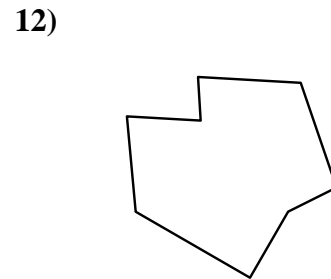
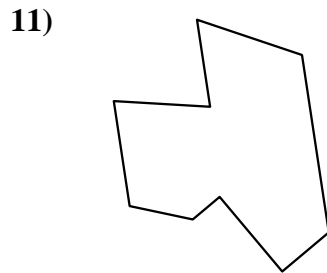
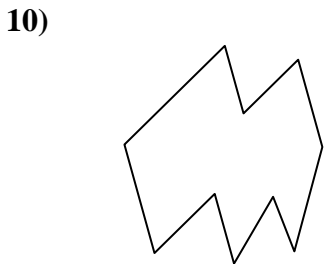
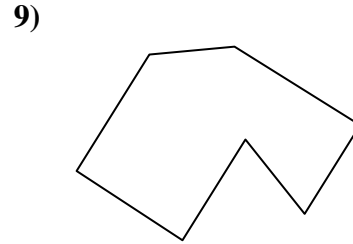

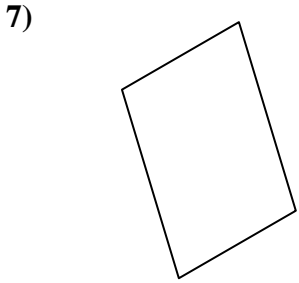
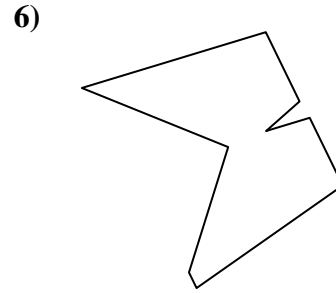
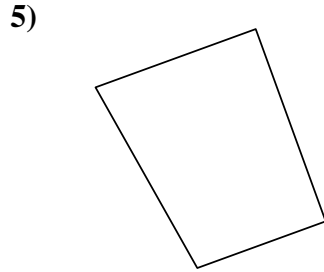
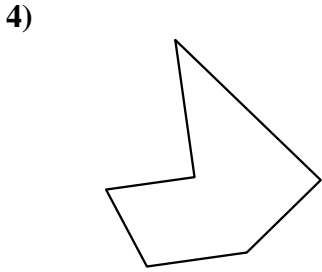
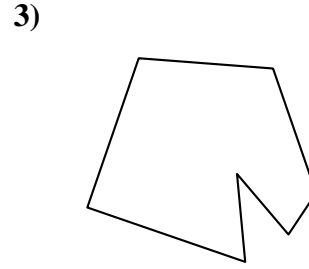
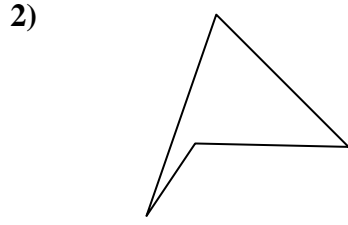
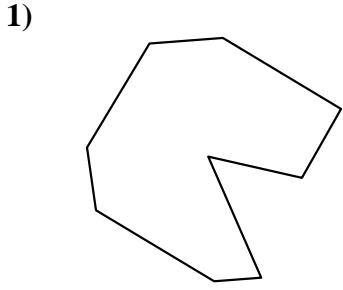




Identifiziere jede gezeigte Form.

**Antworten**

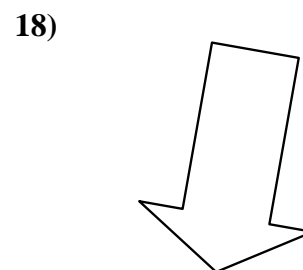
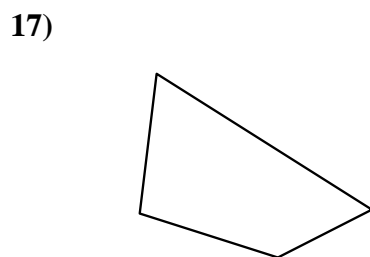
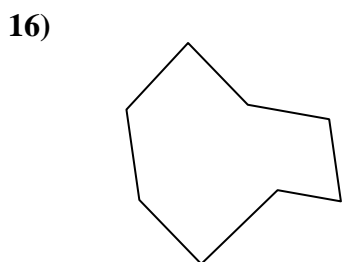
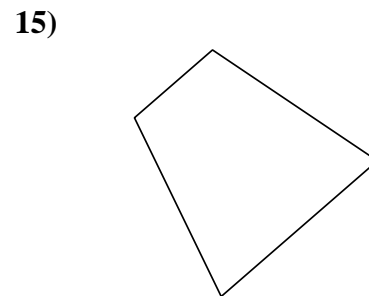
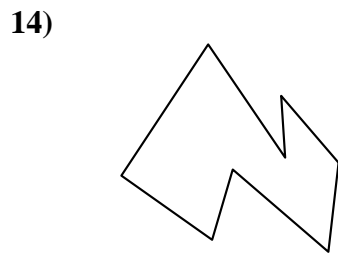
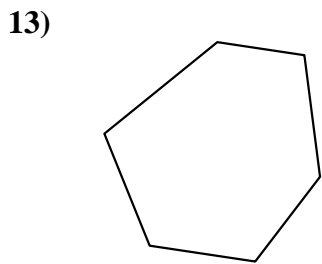
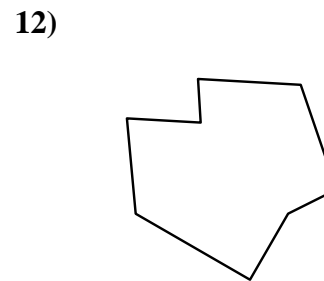
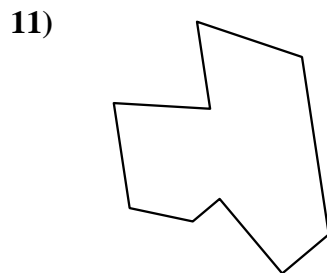
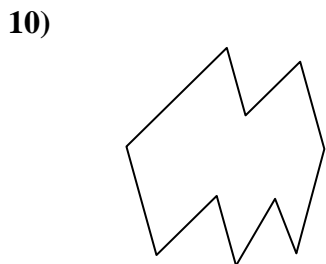
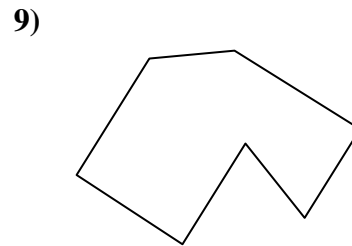

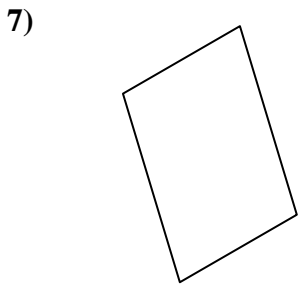
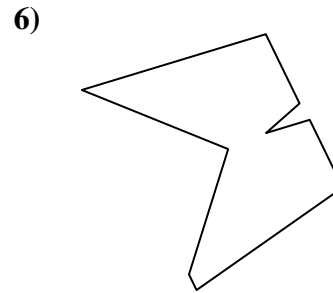
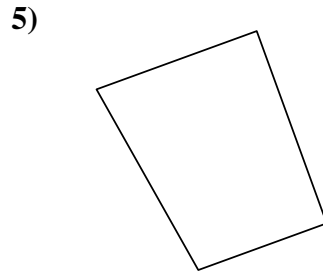
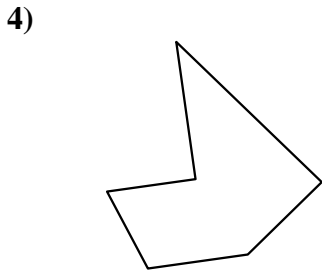
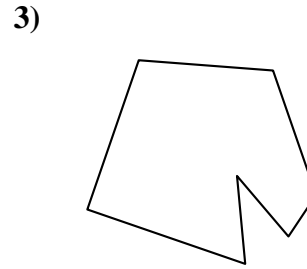
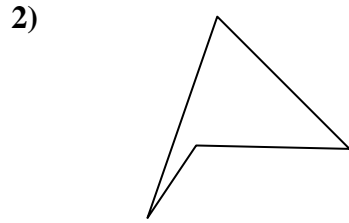
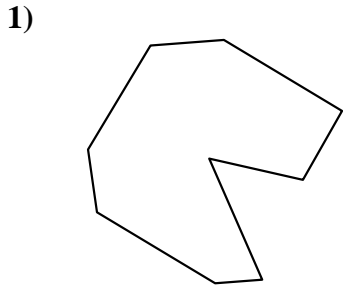


- 1. \_\_\_\_\_
- 2. \_\_\_\_\_
- 3. \_\_\_\_\_
- 4. \_\_\_\_\_
- 5. \_\_\_\_\_
- 6. \_\_\_\_\_
- 7. \_\_\_\_\_
- 8. \_\_\_\_\_
- 9. \_\_\_\_\_
- 10. \_\_\_\_\_
- 11. \_\_\_\_\_
- 12. \_\_\_\_\_
- 13. \_\_\_\_\_
- 14. \_\_\_\_\_
- 15. \_\_\_\_\_
- 16. \_\_\_\_\_
- 17. \_\_\_\_\_
- 18. \_\_\_\_\_
- 19. \_\_\_\_\_
- 20. \_\_\_\_\_
- 21. \_\_\_\_\_



Identifiziere jede gezeigte Form.

**Antworten**



- 1. Neuneck
- 2. Viereck
- 3. Siebeneck
- 4. Sechseck
- 5. Viereck
- 6. Neuneck
- 7. Viereck
- 8. Neuneck
- 9. Siebeneck
- 10. Zehneck
- 11. Neuneck
- 12. Achteck
- 13. Sechseck
- 14. Achteck
- 15. Viereck
- 16. Achteck
- 17. Viereck
- 18. Siebeneck
- 19. Sechseck
- 20. Fünfeck
- 21. Zehneck