



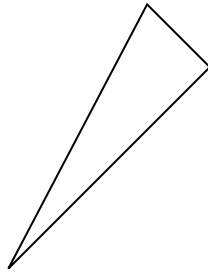
Stelle fest, was die gezeigten Formen sind: Dreieck, Quadrat, Rechteck, Sechseck oder eine andere Figur.

Antworten

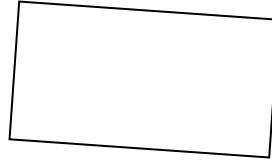
1)



2)



3)



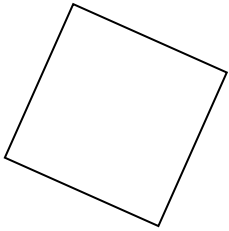
1. _____

2. _____

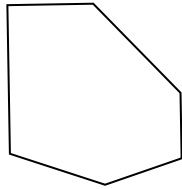
3. _____

4. _____

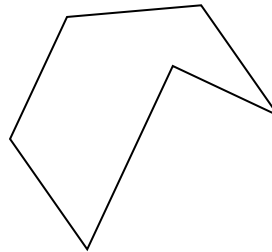
4)



5)



6)



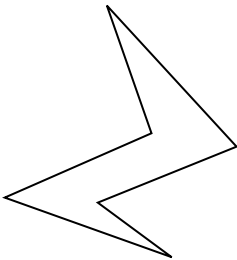
5. _____

6. _____

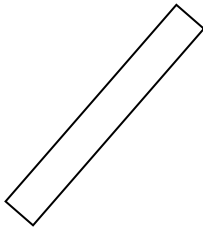
7. _____

8. _____

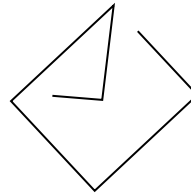
7)



8)



9)



9. _____

10. _____

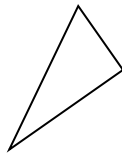
11. _____

12. _____

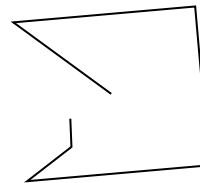
10)



11)



12)




13. _____


14. _____

15. _____

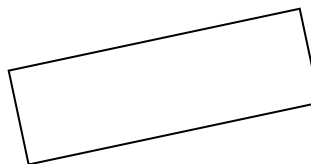
13)



14)



15)



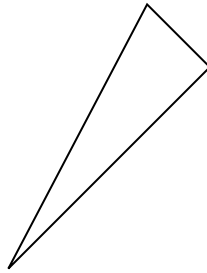


Stelle fest, was die gezeigten Formen sind: Dreieck, Quadrat, Rechteck, Sechseck oder eine andere Figur.

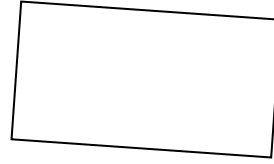
1)



2)

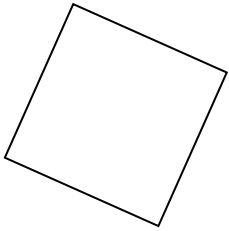


3)

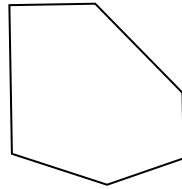


1. andere

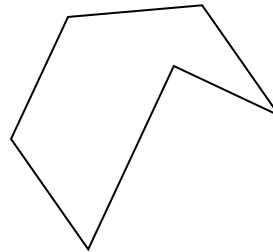
4)



5)



6)



2. triangle

3. rectangle

4. square

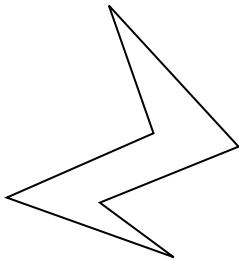
5. Sechseck

6. Sechseck

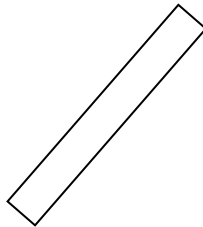
7. Sechseck

8. rectangle

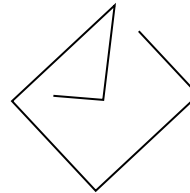
7)



8)



9)



9. andere

10. triangle

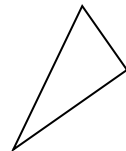
11. triangle

12. andere

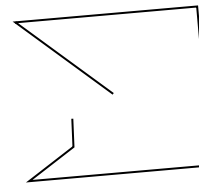
10)



11)



12)




13. andere


14. triangle

15. rectangle

13)



14)



15)

