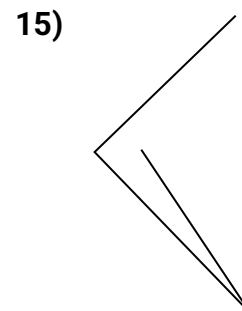
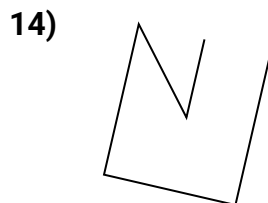
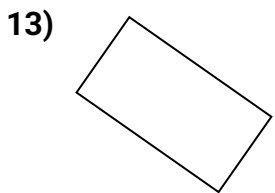
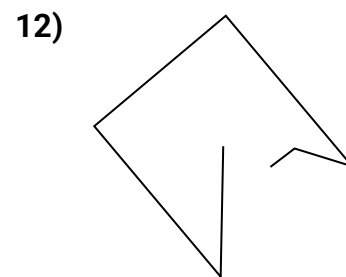
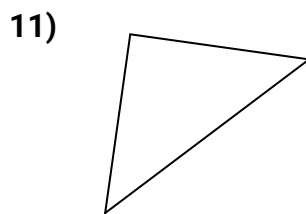
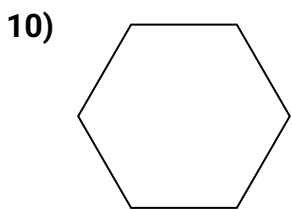
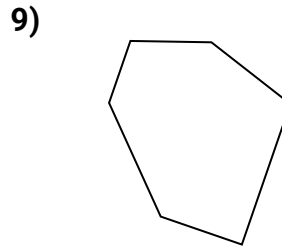
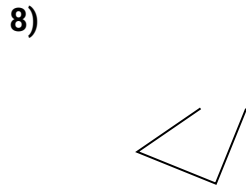
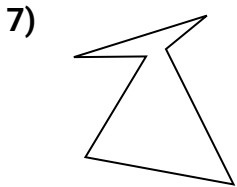

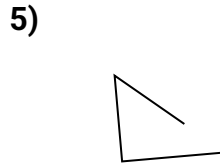
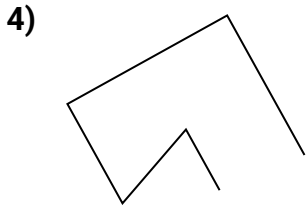
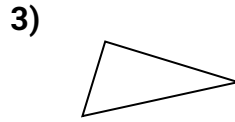
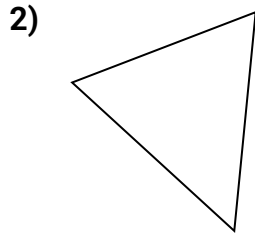
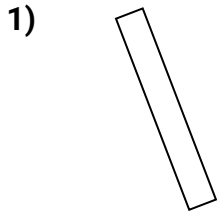




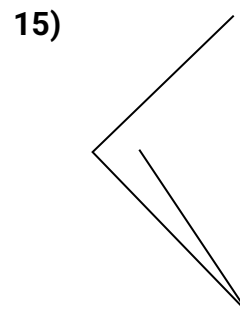
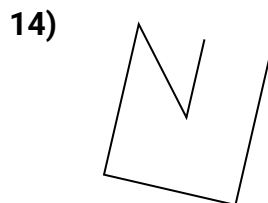
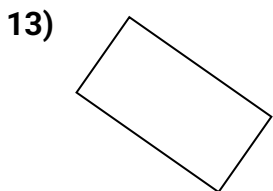
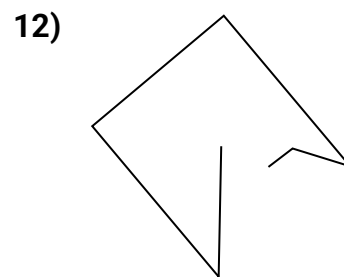
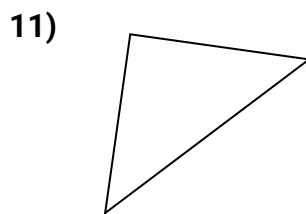
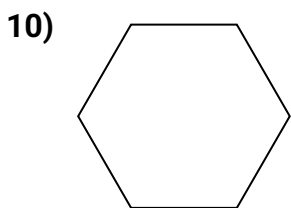
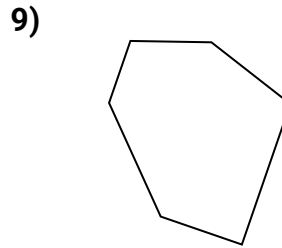
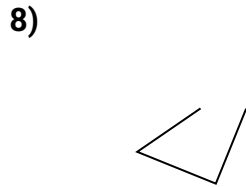
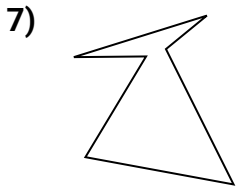
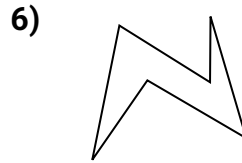
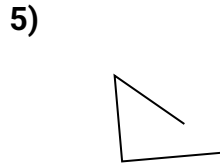
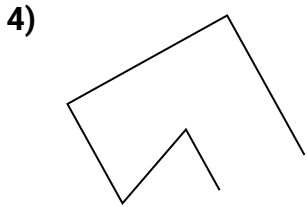
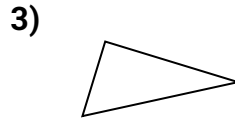
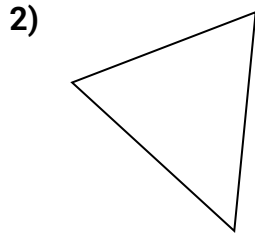
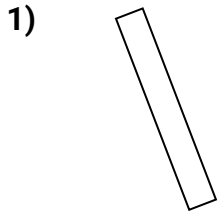
Stelle fest, was die gezeigten Formen sind: Dreieck, Quadrat, Rechteck, Sechseck oder eine andere Figur.

**Antworten**

1. _____
2. _____
3. _____
4. _____
5. _____
6. _____
7. _____
8. _____
9. _____
10. _____
11. _____
12. _____
13. _____
14. _____
15. _____



Stelle fest, was die gezeigten Formen sind: Dreieck, Quadrat, Rechteck, Sechseck oder eine andere Figur.

**Antworten**1. **rectangle**2. **triangle**3. **triangle**4. **andere**5. **andere**6. **Sechseck**7. **Sechseck**8. **andere**9. **Sechseck**10. **Sechseck**11. **triangle**12. **andere**13. **rectangle**14. **andere**15. **andere**