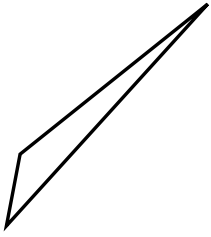




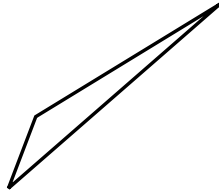
Stelle fest, ob die gezeigten Dreiecke rechtwinklig sind (ja) oder nicht (nein).

**Antworten**

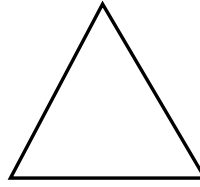
1)



2)



3)



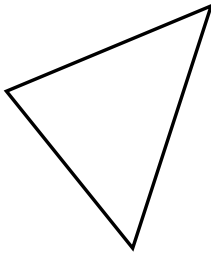
1. \_\_\_\_\_

2. \_\_\_\_\_

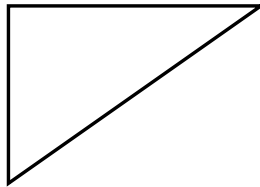
3. \_\_\_\_\_

4. \_\_\_\_\_


4)



5)



6)




5. \_\_\_\_\_

6. \_\_\_\_\_

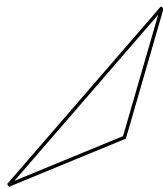
7. \_\_\_\_\_

8. \_\_\_\_\_


7)



8)



9)



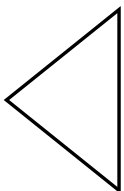
9. \_\_\_\_\_

10. \_\_\_\_\_

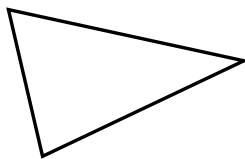
11. \_\_\_\_\_

12. \_\_\_\_\_

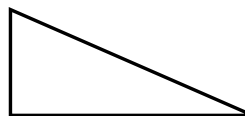
10)



11)



12)

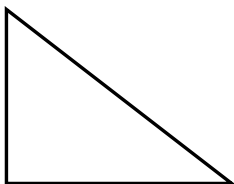


13. \_\_\_\_\_

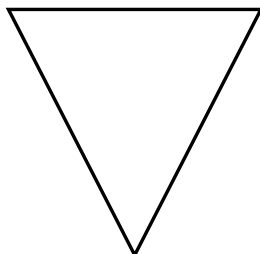
14. \_\_\_\_\_

15. \_\_\_\_\_

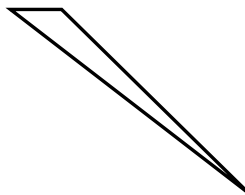
13)



14)



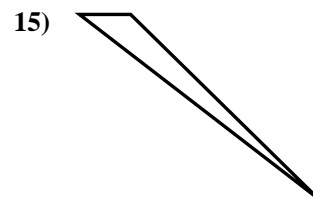
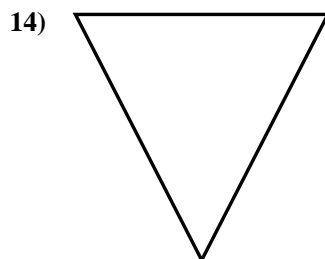
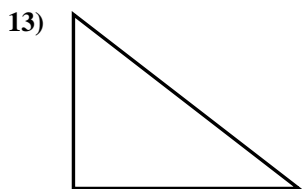
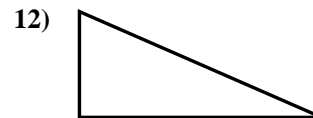
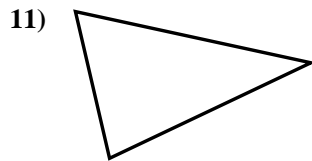
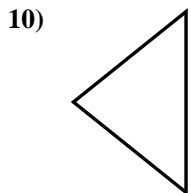
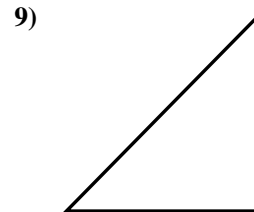
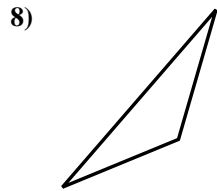
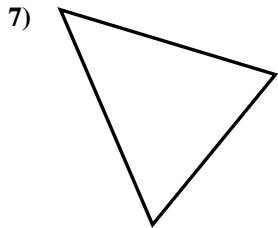
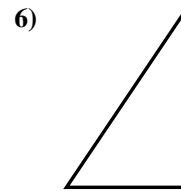
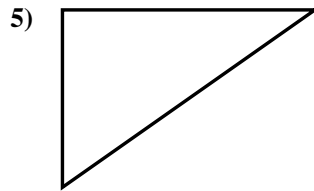
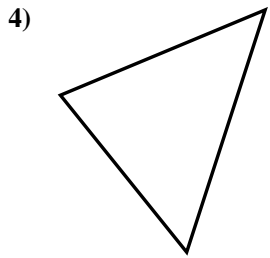
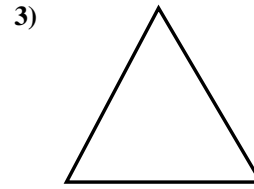
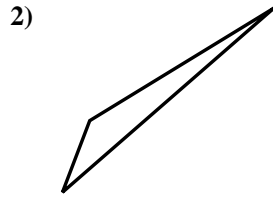
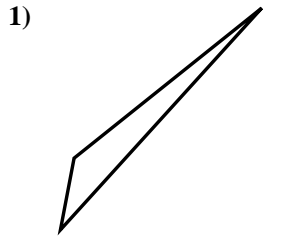
15)





Stelle fest, ob die gezeigten Dreiecke rechtwinklig sind (ja) oder nicht (nein).

**Antworten**



1. nein

2. nein

3. nein

4. nein

5. ja

6. ja

7. nein

8. nein

9. ja

10. nein

11. nein

12. ja

13. ja

14. nein

15. nein