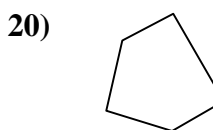
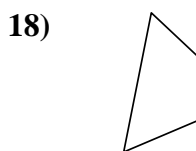
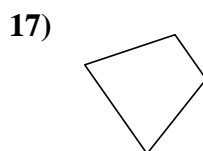
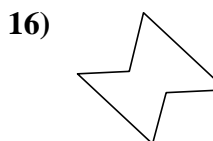
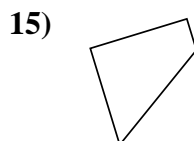
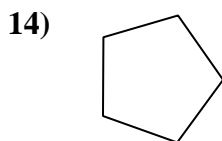
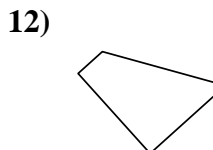
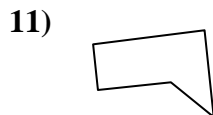
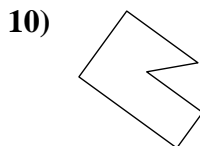
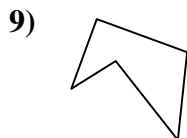
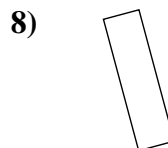
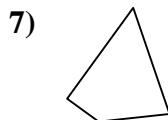
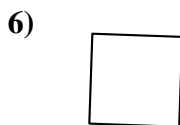
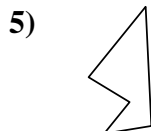
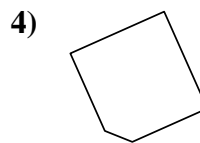
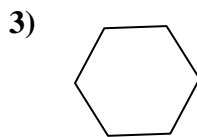
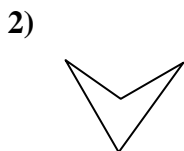
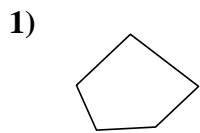




Stelle fest, ob die gezeigte Form viereckig ist (ja) oder nicht (nein).

Antworten



1. _____

2. _____

3. _____

4. _____

5. _____

6. _____

7. _____

8. _____

9. _____

10. _____

11. _____

12. _____

13. _____

14. _____

15. _____

16. _____

17. _____

18. _____

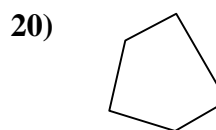
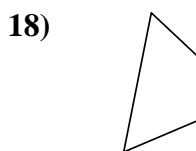
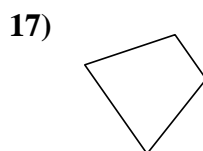
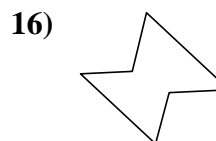
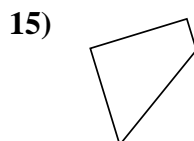
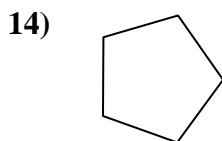
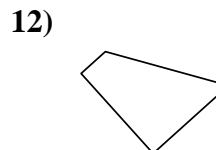
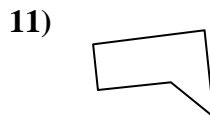
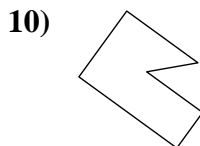
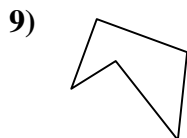
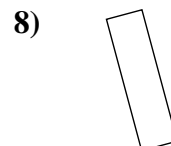
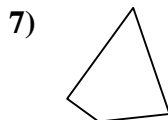
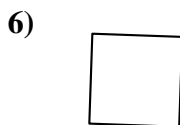
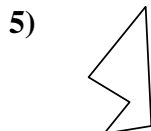
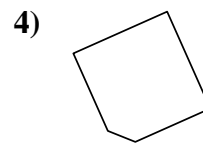
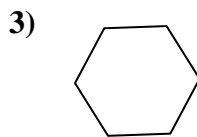
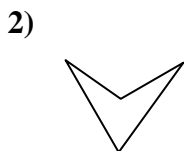
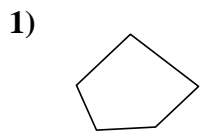
19. _____

20. _____



Stelle fest, ob die gezeigte Form viereckig ist (ja) oder nicht (nein).

Antworten



1. nein

2. ja

3. nein

4. nein

5. nein

6. ja

7. ja

8. ja

9. nein

10. nein

11. nein

12. ja

13. ja

14. nein

15. ja

16. nein

17. ja

18. ja

19. ja

20. nein