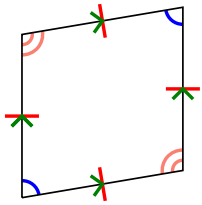


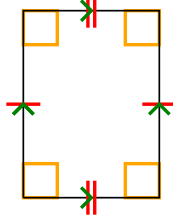


Stelle fest, um was es sich bei den gezeigten Formen handelt: Viereck, Drachenviereck, Trapez, Parallelogramm, Raute, Rechteck oder Quadrat (eine Figur kann mehrere Formen haben).

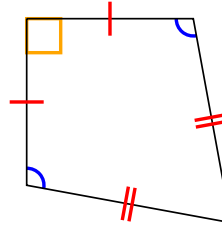
1)




2)




3)



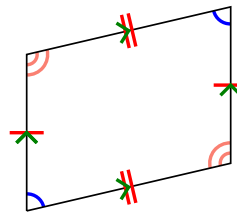
4)



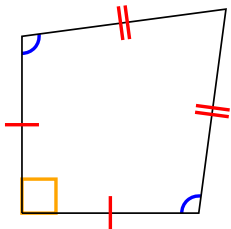
5)



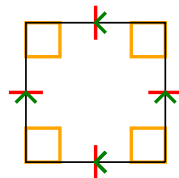
6)



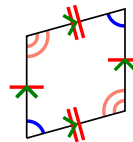
7)



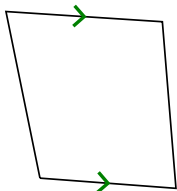
8)



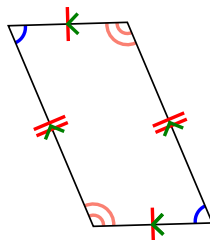
9)



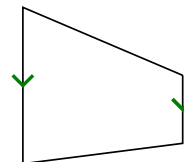
10)



11)



12)

**Antworten**

1. _____

2. _____

3. _____

4. _____

5. _____

6. _____

7. _____

8. _____

9. _____

10. _____

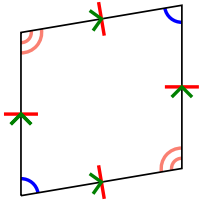
11. _____

12. _____

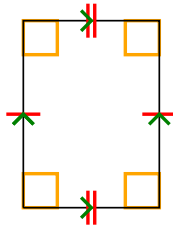


Stelle fest, um was es sich bei den gezeigten Formen handelt: Viereck, Drachenviereck, Trapez, Parallelogramm, Raute, Rechteck oder Quadrat (eine Figur kann mehrere Formen haben).

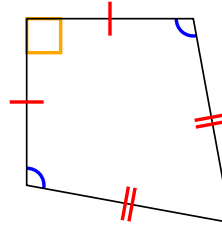
1)




2)




3)



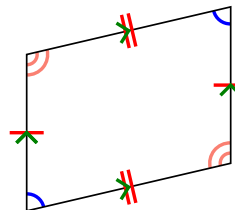
4)



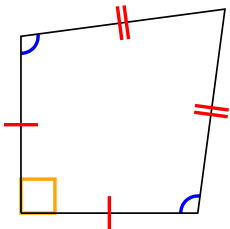
5)



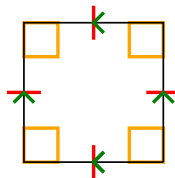
6)



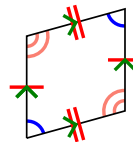
7)



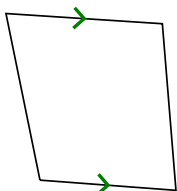
8)



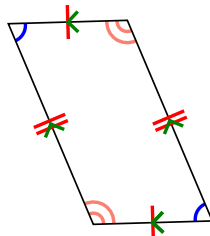
9)



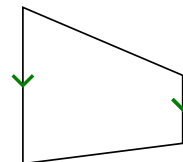
10)



11)



12)

**Antworten**1. **Q,P,H**2. **Q,P,R**3. **Q,K**4. **Q**5. **Q**6. **Q,P**7. **Q,K**8. **Q,P,H,R,S**9. **Q,P**10. **Q,T**11. **Q,P**12. **Q,T**