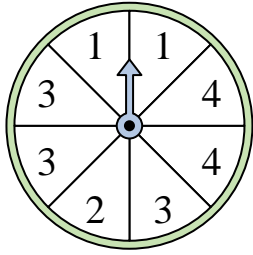
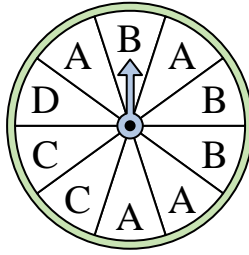


**Löse jede Aufgabe.****Antworten**

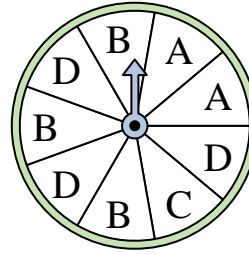
- 1) Which two numbers is the spinner equally likely to land on?



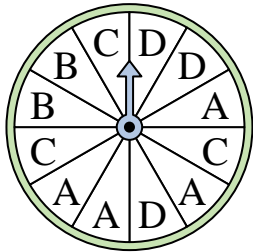
- 2) Which letter is the spinner least likely to land on?




- 3) Which two letters is the spinner equally likely to land on?



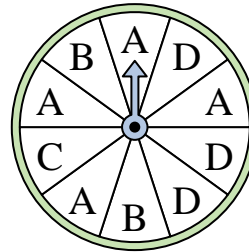
- 4) Which letter is the spinner least likely to land on?




- 5) Which number is the spinner least likely to land on?



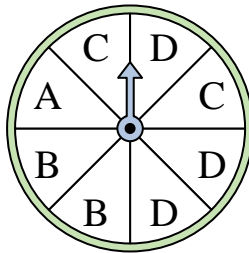
- 6) Which letter is the spinner most likely to land on?



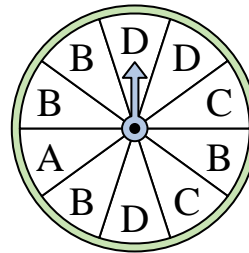
- 7) Which number is the spinner least likely to land on?



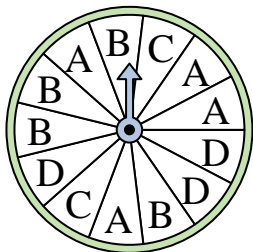
- 8) Which letter is the spinner most likely to land on?




- 9) Which letter is the spinner least likely to land on?



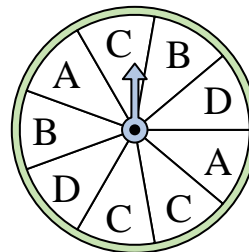
- 10) Which letter is the spinner least likely to land on?



- 11) Which two numbers is the spinner equally likely to land on?



- 12) Which letter is the spinner most likely to land on?

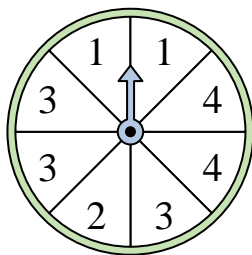


1. \_\_\_\_\_  
2. \_\_\_\_\_  
3. \_\_\_\_\_  
4. \_\_\_\_\_  
5. \_\_\_\_\_  
6. \_\_\_\_\_  
7. \_\_\_\_\_  
8. \_\_\_\_\_  
9. \_\_\_\_\_  
10. \_\_\_\_\_  
11. \_\_\_\_\_  
12. \_\_\_\_\_

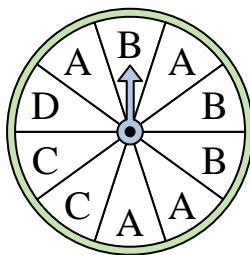


Löse jede Aufgabe.

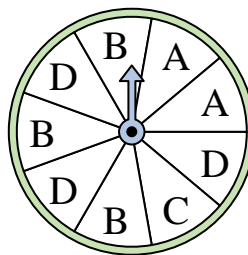
- 1) Which two numbers is the spinner equally likely to land on?



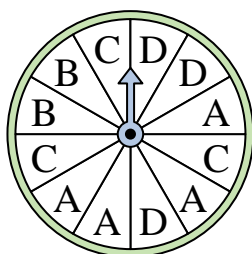
- 2) Which letter is the spinner least likely to land on?




- 3) Which two letters is the spinner equally likely to land on?



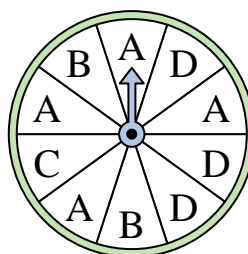
- 4) Which letter is the spinner least likely to land on?




- 5) Which number is the spinner least likely to land on?



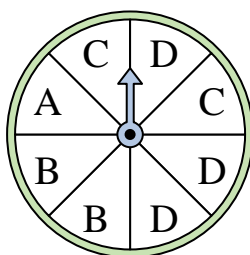
- 6) Which letter is the spinner most likely to land on?



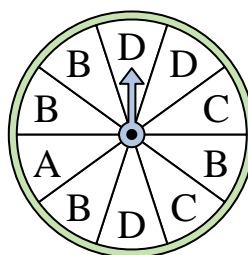
- 7) Which number is the spinner least likely to land on?



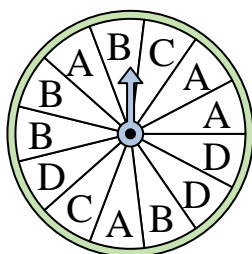
- 8) Which letter is the spinner most likely to land on?




- 9) Which letter is the spinner least likely to land on?



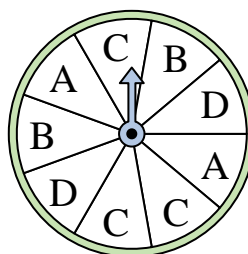
- 10) Which letter is the spinner least likely to land on?



- 11) Which two numbers is the spinner equally likely to land on?



- 12) Which letter is the spinner most likely to land on?

**Antworten**1. **1 & 4**2. **D**3. **B & D**4. **B**5. **4**6. **A**7. **1**8. **D**9. **A**10. **C**11. **2 & 3**12. **C**