
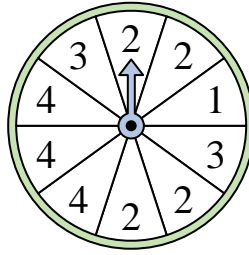


**Löse jede Aufgabe.****Antworten**

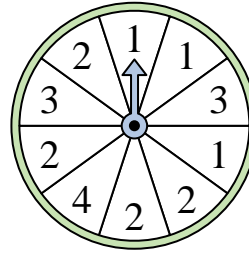
- 1) Which number is the spinner least likely to land on?



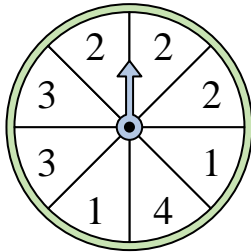
- 2) Which number is the spinner most likely to land on?



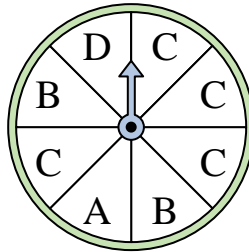
- 3) Which number is the spinner least likely to land on?



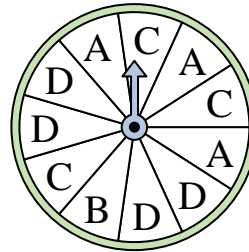
- 4) Which two numbers is the spinner equally likely to land on?



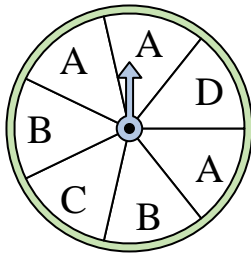
- 5) Which letter is the spinner most likely to land on?



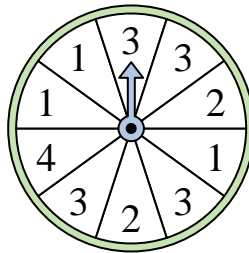
- 6) Which letter is the spinner least likely to land on?



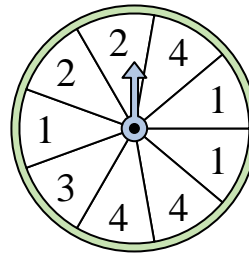
- 7) Which two letters is the spinner equally likely to land on?



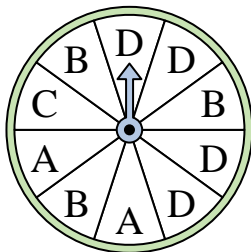
- 8) Which number is the spinner most likely to land on?



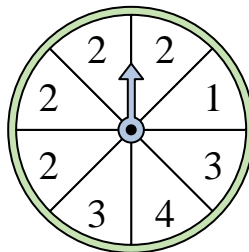
- 9) Which two numbers is the spinner equally likely to land on?



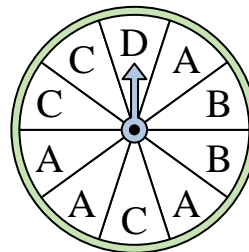
- 10) Which letter is the spinner least likely to land on?



- 11) Which number is the spinner most likely to land on?




- 12) Which letter is the spinner least likely to land on?




1. _____
2. _____
3. _____
4. _____
5. _____
6. _____
7. _____
8. _____
9. _____
10. _____
11. _____
12. _____

**Löse jede Aufgabe.****Antworten**

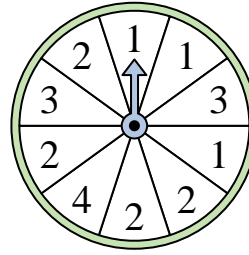
- 1) Which number is the spinner least likely to land on?



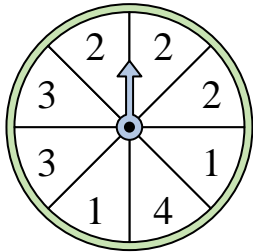
- 2) Which number is the spinner most likely to land on?



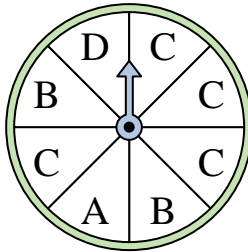
- 3) Which number is the spinner least likely to land on?



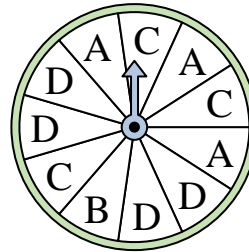
- 4) Which two numbers is the spinner equally likely to land on?



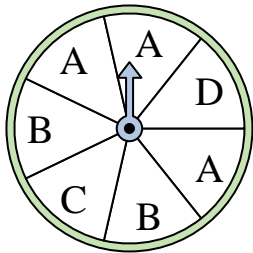
- 5) Which letter is the spinner most likely to land on?




- 6) Which letter is the spinner least likely to land on?



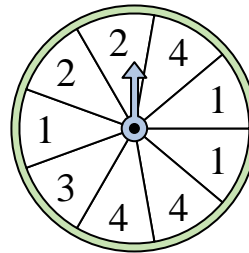
- 7) Which two letters is the spinner equally likely to land on?



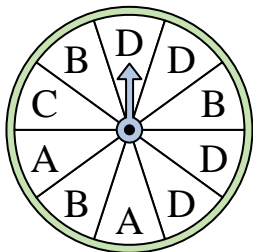
- 8) Which number is the spinner most likely to land on?



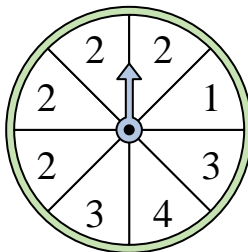
- 9) Which two numbers is the spinner equally likely to land on?



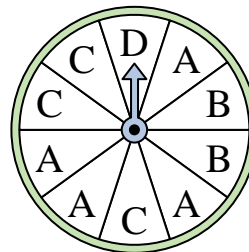
- 10) Which letter is the spinner least likely to land on?



- 11) Which number is the spinner most likely to land on?



- 12) Which letter is the spinner least likely to land on?



1. **2**
2. **2**
3. **4**
4. **1 & 3**
5. **C**
6. **B**
7. **C & D**
8. **3**
9. **1 & 4**
10. **C**
11. **2**
12. **D**