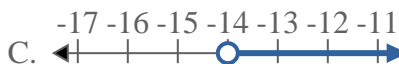
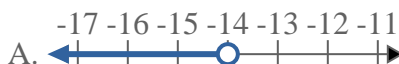
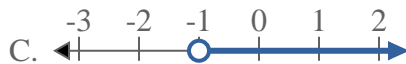
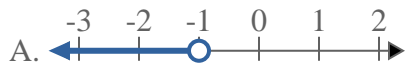




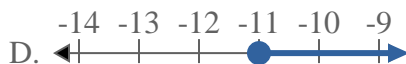
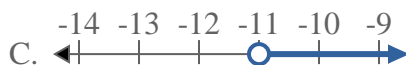
Löse jede Aufgabe.

Antworten

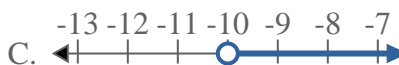
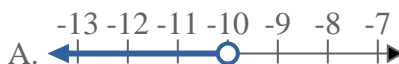
- 1) Bestimme, welche Möglichkeit $X > -1$ anzeigt. 2) Bestimme, welche Möglichkeit $X < -14$ anzeigt.



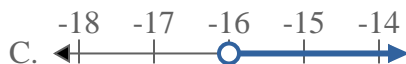
- 3) Bestimme, welche Möglichkeit $X \leq -11$ anzeigt.



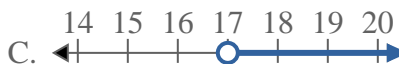
- 4) Bestimme, welche Möglichkeit $X < -10$ anzeigt.



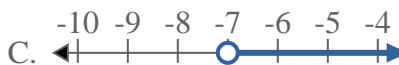
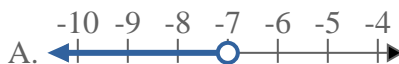
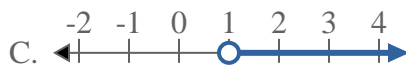
- 5) Bestimme, welche Möglichkeit $X \leq -16$ anzeigt.



- 6) Bestimme, welche Möglichkeit $X > 17$ anzeigt.



- 7) Bestimme, welche Möglichkeit $X > 1$ anzeigt. 8) Bestimme, welche Möglichkeit $X > -7$ anzeigt.



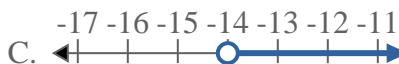
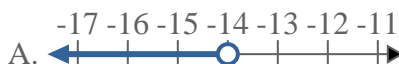
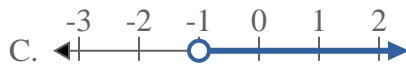
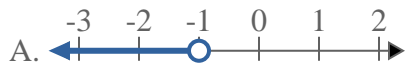
1. _____
 2. _____
 3. _____
 4. _____
 5. _____
 6. _____
 7. _____
 8. _____



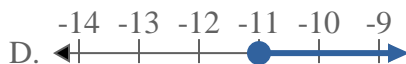
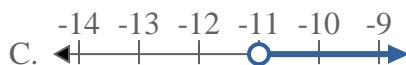
Löse jede Aufgabe.

Antworten

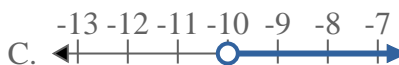
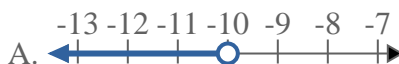
- 1) Bestimme, welche Möglichkeit $X > -1$ anzeigt. 2) Bestimme, welche Möglichkeit $X < -14$ anzeigt.



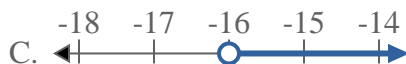
- 3) Bestimme, welche Möglichkeit $X \leq -11$ anzeigt.



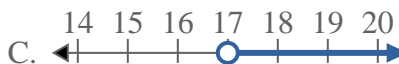
- 4) Bestimme, welche Möglichkeit $X < -10$ anzeigt.



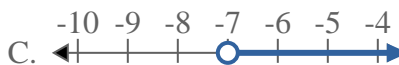
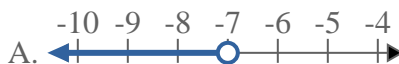
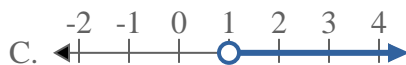
- 5) Bestimme, welche Möglichkeit $X \leq -16$ anzeigt.



- 6) Bestimme, welche Möglichkeit $X > 17$ anzeigt.



- 7) Bestimme, welche Möglichkeit $X > 1$ anzeigt. 8) Bestimme, welche Möglichkeit $X > -7$ anzeigt.



1. **C**

2. **A**

3. **B**

4. **A**

5. **B**

6. **C**

7. **C**

8. **C**