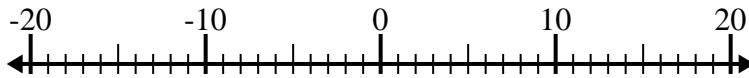




Löse jede Aufgabe. Benutze den Zahlenstrahl, falls du ihn brauchst.

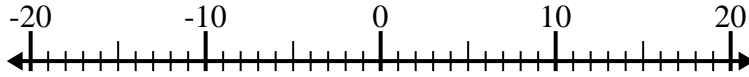
**Antworten**

1)  $(-4) - (-5) =$  \_\_\_\_\_



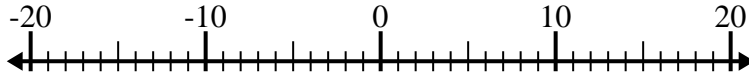
1. \_\_\_\_\_

2)  $5 - (-12) =$  \_\_\_\_\_



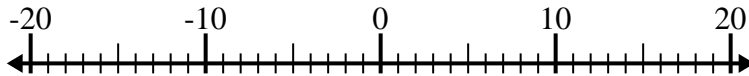
2. \_\_\_\_\_

3)  $(-4) - (-13) =$  \_\_\_\_\_



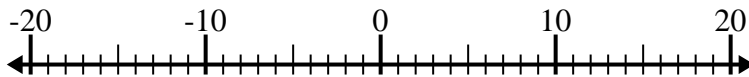
3. \_\_\_\_\_

4)  $12 + (-10) =$  \_\_\_\_\_



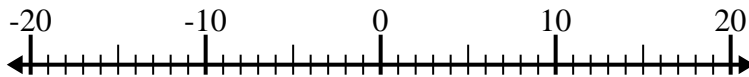
4. \_\_\_\_\_

5)  $(-1) - 13 =$  \_\_\_\_\_



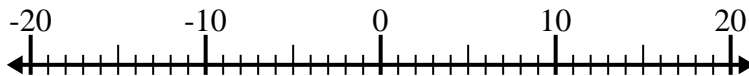
5. \_\_\_\_\_

6)  $(-5) + 15 =$  \_\_\_\_\_



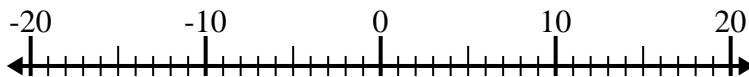
6. \_\_\_\_\_

7)  $(-11) + 1 =$  \_\_\_\_\_



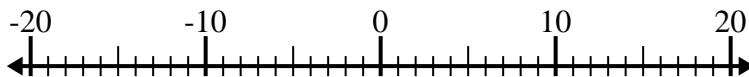
7. \_\_\_\_\_

8)  $14 - (-4) =$  \_\_\_\_\_



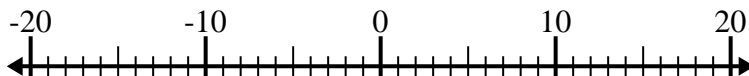
8. \_\_\_\_\_

9)  $(-2) - 14 =$  \_\_\_\_\_



9. \_\_\_\_\_

10)  $(-4) + (-1) =$  \_\_\_\_\_



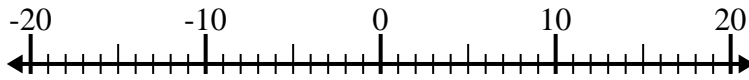
10. \_\_\_\_\_



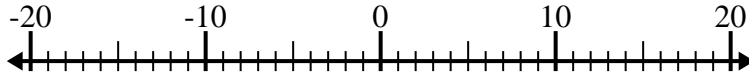
Löse jede Aufgabe. Benutze den Zahlenstrahl, falls du ihn brauchst.

**Antworten**

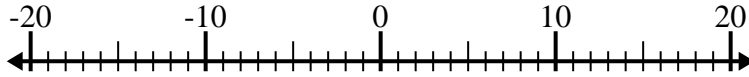
1)  $(-4) - (-5) = \underline{1}$

1. 1

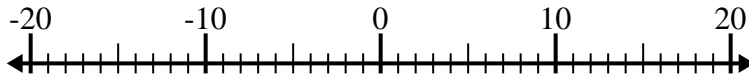
2)  $5 - (-12) = \underline{17}$

2. 17

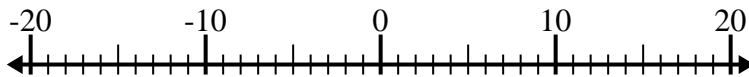
3)  $(-4) - (-13) = \underline{9}$

3. 9

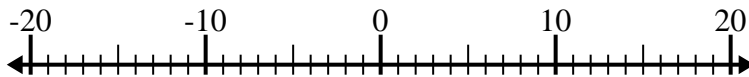
4)  $12 + (-10) = \underline{2}$

4. 2

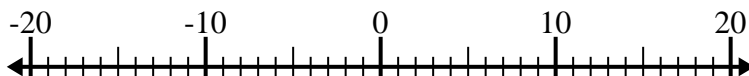
5)  $(-1) - 13 = \underline{-14}$

5. -14

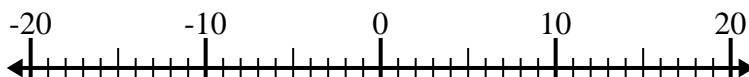
6)  $(-5) + 15 = \underline{10}$

6. 10

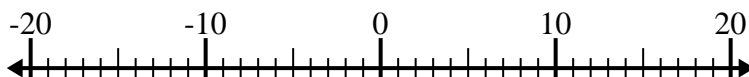
7)  $(-11) + 1 = \underline{-10}$

7. -10

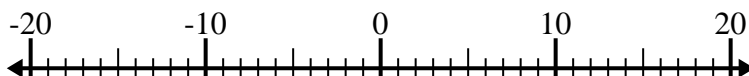
8)  $14 - (-4) = \underline{18}$

8. 18

9)  $(-2) - 14 = \underline{-16}$

9. -16

10)  $(-4) + (-1) = \underline{-5}$

10. -5