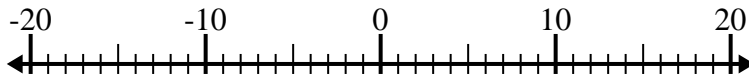




Löse jede Aufgabe. Benutze den Zahlenstrahl, falls du ihn brauchst.

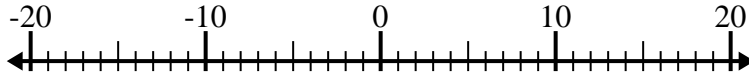
**Antworten**

1)  $(-2) + (-8) =$  \_\_\_\_\_



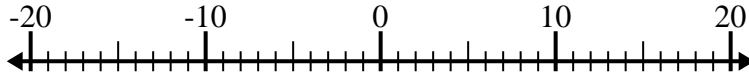
1. \_\_\_\_\_

2)  $9 - (-7) =$  \_\_\_\_\_



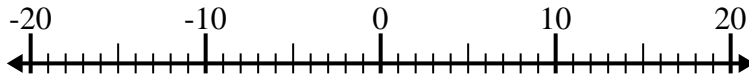
2. \_\_\_\_\_

3)  $(-7) + 13 =$  \_\_\_\_\_



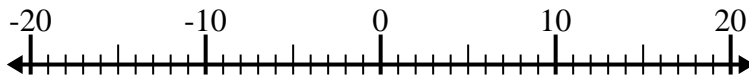
3. \_\_\_\_\_

4)  $(-11) - 3 =$  \_\_\_\_\_



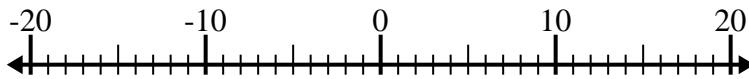
4. \_\_\_\_\_

5)  $1 + (-2) =$  \_\_\_\_\_



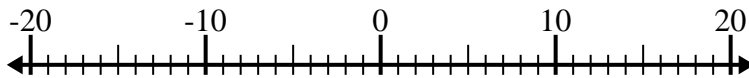
5. \_\_\_\_\_

6)  $(-8) - (-4) =$  \_\_\_\_\_



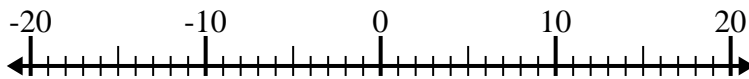
6. \_\_\_\_\_

7)  $(-4) - (-13) =$  \_\_\_\_\_



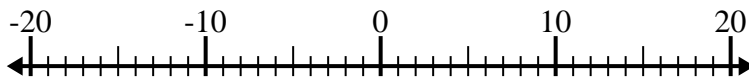
7. \_\_\_\_\_

8)  $1 - (-14) =$  \_\_\_\_\_



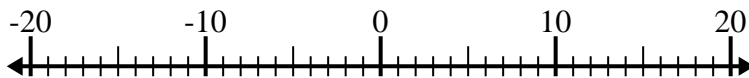
8. \_\_\_\_\_

9)  $(-7) + 15 =$  \_\_\_\_\_



9. \_\_\_\_\_

10)  $(-5) + (-4) =$  \_\_\_\_\_



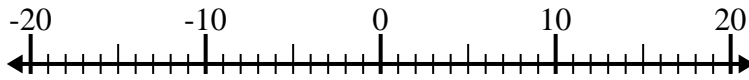
10. \_\_\_\_\_



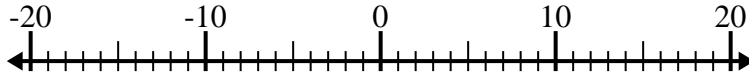
Löse jede Aufgabe. Benutze den Zahlenstrahl, falls du ihn brauchst.

**Antworten**

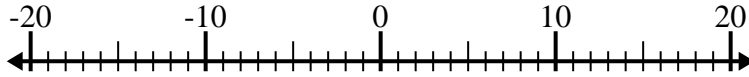
1)  $(-2) + (-8) = \underline{-10}$

1. **-10**

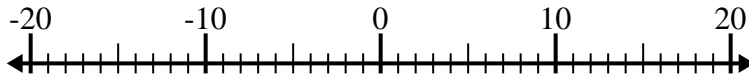
2)  $9 - (-7) = \underline{16}$

2. **16**

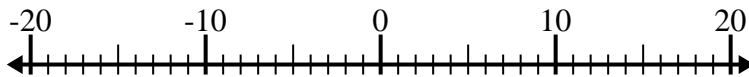
3)  $(-7) + 13 = \underline{6}$

3. **6**

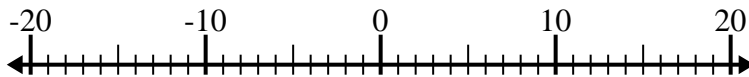
4)  $(-11) - 3 = \underline{-14}$

4. **-14**

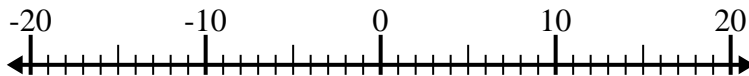
5)  $1 + (-2) = \underline{-1}$

5. **-1**

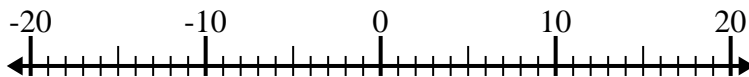
6)  $(-8) - (-4) = \underline{-4}$

6. **-4**

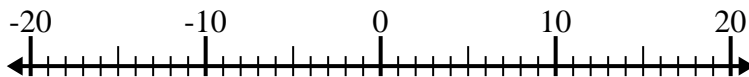
7)  $(-4) - (-13) = \underline{9}$

7. **9**

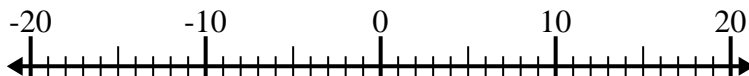
8)  $1 - (-14) = \underline{15}$

8. **15**

9)  $(-7) + 15 = \underline{8}$

9. **8**

10)  $(-5) + (-4) = \underline{-9}$

10. **-9**