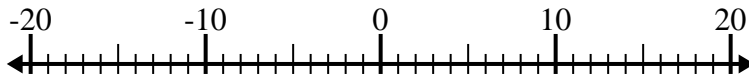




Löse jede Aufgabe. Benutze den Zahlenstrahl, falls du ihn brauchst.

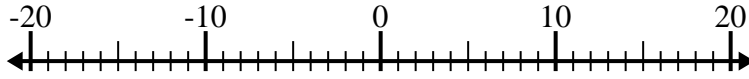
**Antworten**

1)  $(-9) - 11 =$  \_\_\_\_\_



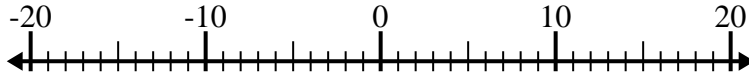
1. \_\_\_\_\_

2)  $(-14) - (-1) =$  \_\_\_\_\_



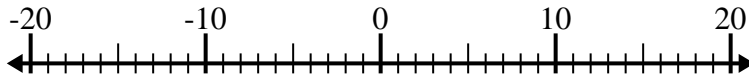
2. \_\_\_\_\_

3)  $7 + (-1) =$  \_\_\_\_\_



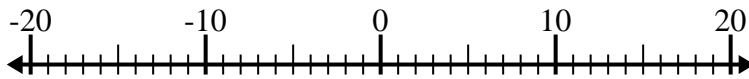
3. \_\_\_\_\_

4)  $(-13) + (-3) =$  \_\_\_\_\_



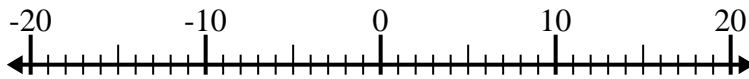
4. \_\_\_\_\_

5)  $11 + (-15) =$  \_\_\_\_\_



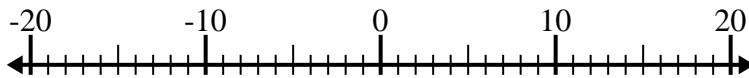
5. \_\_\_\_\_

6)  $10 - (-4) =$  \_\_\_\_\_



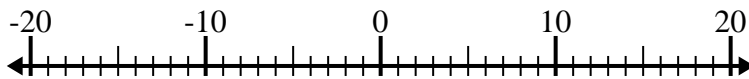
6. \_\_\_\_\_

7)  $(-4) - 9 =$  \_\_\_\_\_



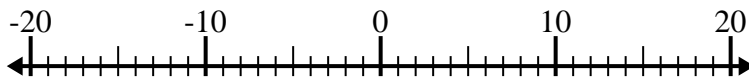
7. \_\_\_\_\_

8)  $3 - (-14) =$  \_\_\_\_\_



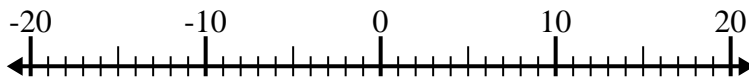
8. \_\_\_\_\_

9)  $(-3) + 6 =$  \_\_\_\_\_



9. \_\_\_\_\_

10)  $(-10) - (-7) =$  \_\_\_\_\_



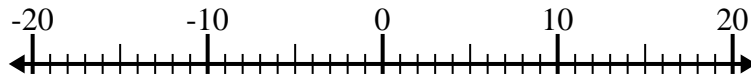
10. \_\_\_\_\_



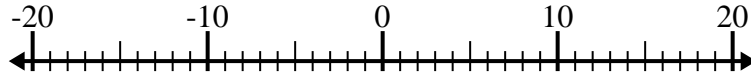
Löse jede Aufgabe. Benutze den Zahlenstrahl, falls du ihn brauchst.

**Antworten**

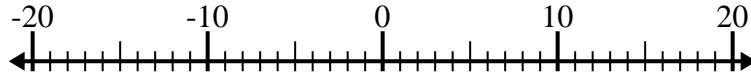
1)  $(-9) - 11 = \underline{-20}$

1. **-20**

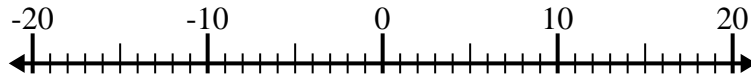
2)  $(-14) - (-1) = \underline{-13}$

2. **-13**

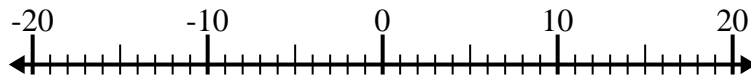
3)  $7 + (-1) = \underline{6}$

3. **6**

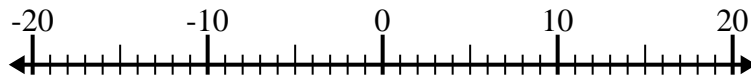
4)  $(-13) + (-3) = \underline{-16}$

4. **-16**

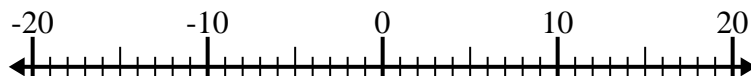
5)  $11 + (-15) = \underline{-4}$

5. **-4**

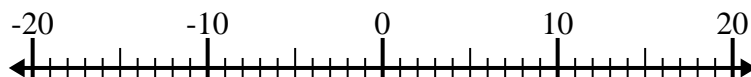
6)  $10 - (-4) = \underline{14}$

6. **14**

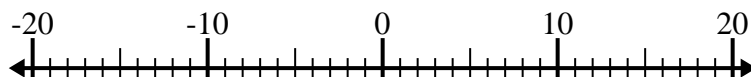
7)  $(-4) - 9 = \underline{-13}$

7. **-13**

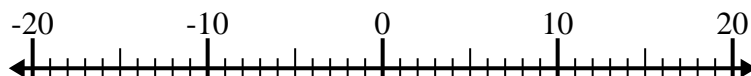
8)  $3 - (-14) = \underline{17}$

8. **17**

9)  $(-3) + 6 = \underline{3}$

9. **3**

10)  $(-10) - (-7) = \underline{-3}$

10. **-3**