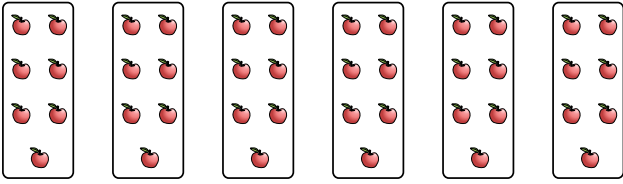




Stelle fest, wie man die gezeigten Gruppen als eine Multiplikationsaufgabe ausdrücken könnte.

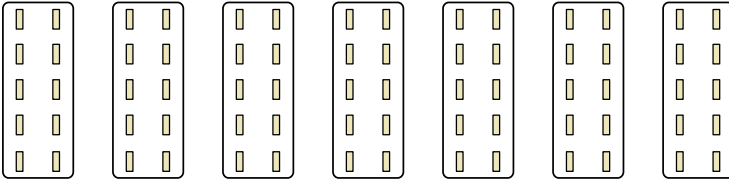
Antworten

Bsp)



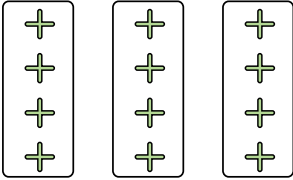
Bsp. $6 \cdot 7 = 42$

1)




1. _____

2)



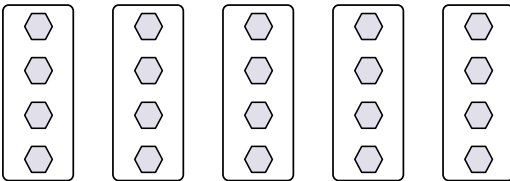
2. _____

3)



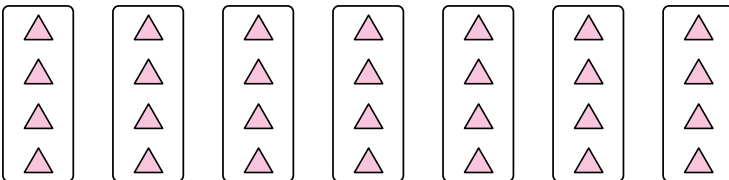
3. _____

4)



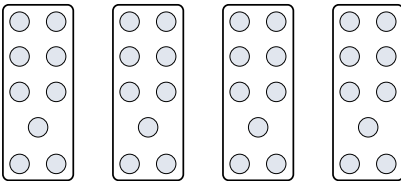
4. _____

5)




5. _____

6)



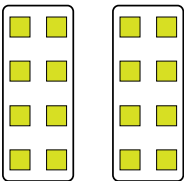
6. _____

7)



7. _____

8)




8. _____

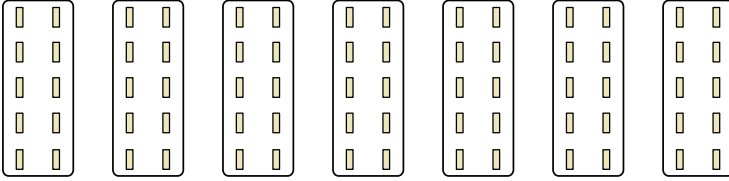


Stelle fest, wie man die gezeigten Gruppen als eine Multiplikationsaufgabe ausdrücken könnte.

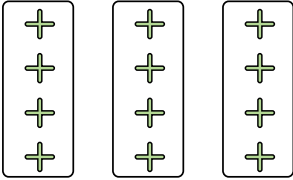
Bsp)




1)



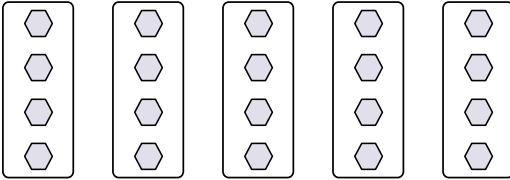
2)



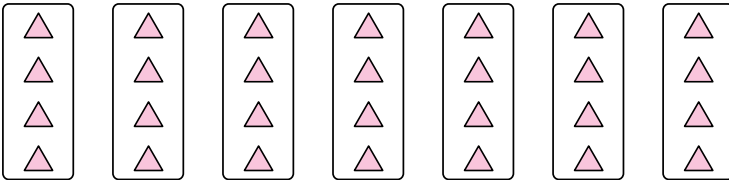
3)



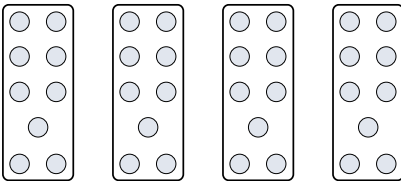
4)




5)



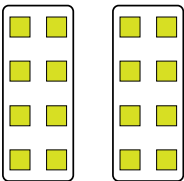
6)



7)



8)

**Antworten**Bsp. $6 \cdot 7 = 42$ 1. $7 \cdot 10 = 70$ 2. $3 \cdot 4 = 12$ 3. $3 \cdot 7 = 21$ 4. $5 \cdot 4 = 20$ 5. $7 \cdot 4 = 28$ 6. $4 \cdot 9 = 36$ 7. $4 \cdot 10 = 40$ 8. $2 \cdot 8 = 16$