



Stelle fest, wie man die gezeigten Gruppen als eine Multiplikationsaufgabe ausdrücken könnte.

Antworten

Bsp)

Bsp. **2•5=10**

1. _____

2. _____

3. _____


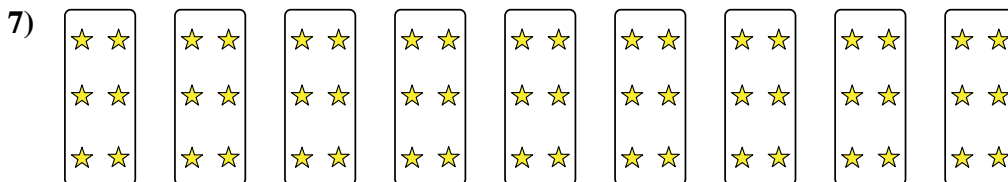
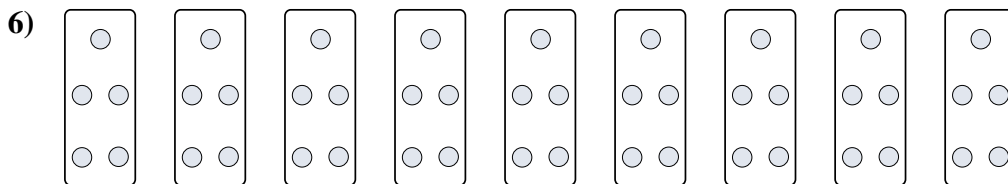
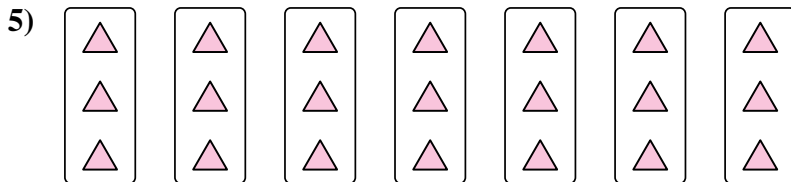
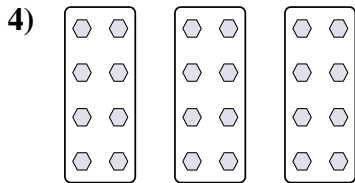

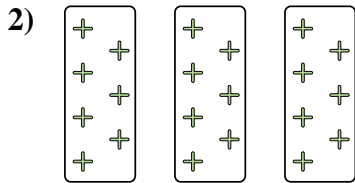
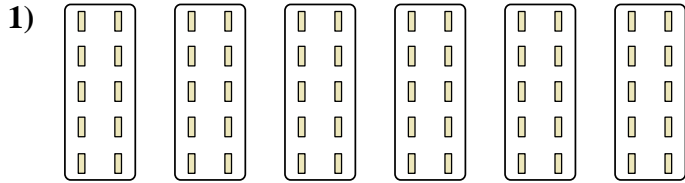
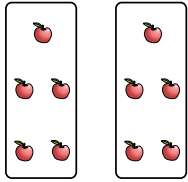
4. _____

5. _____

6. _____

7. _____

8. _____





Stelle fest, wie man die gezeigten Gruppen als eine Multiplikationsaufgabe ausdrücken könnte.

Antworten

Bsp)

Bsp. $2 \cdot 5 = 10$

1. $6 \cdot 10 = 60$

2. $3 \cdot 7 = 21$

3. $10 \cdot 3 = 30$

4. $3 \cdot 8 = 24$

5. $7 \cdot 3 = 21$

6. $9 \cdot 5 = 45$

7. $9 \cdot 6 = 54$

8. $4 \cdot 10 = 40$

