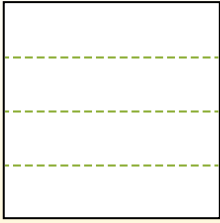


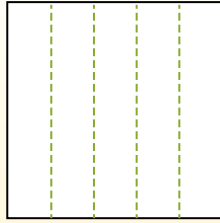


Teile die Form wie beschrieben auf und zähle dann die Anzahl der Felder.

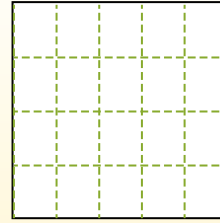
Las filas van de izquierda a derecha.



Las columnas van de arriba a abajo.




Aqui tem 4 linhas e 5 colunas .
Existem 20 caixas no total.




Antworten

- 1. _____
- 2. _____
- 3. _____
- 4. _____
- 5. _____
- 6. _____
- 7. _____
- 8. _____
- 9. _____


1) 3 Reihen
5 Spalten




2) 3 Reihen
3 Spalten




3) 2 Reihen
5 Spalten




4) 3 Reihen
2 Spalten




5) 4 Reihen
3 Spalten




6) 4 Reihen
4 Spalten




7) 4 Reihen
2 Spalten



8) 3 Reihen
4 Spalten



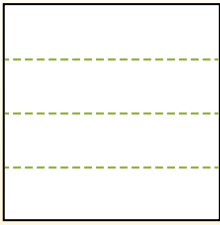
9) 5 Reihen
5 Spalten



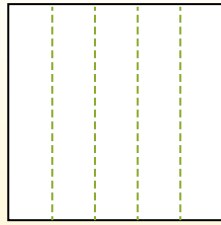


Teile die Form wie beschrieben auf und zähle dann die Anzahl der Felder.

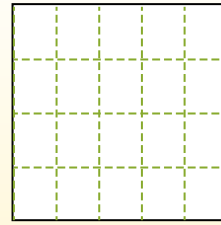
Las filas van de izquierda a derecha.



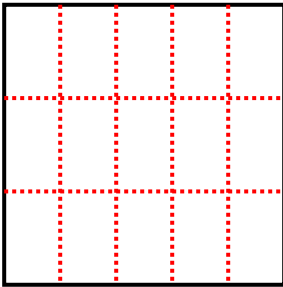
Las columnas van de arriba a abajo.



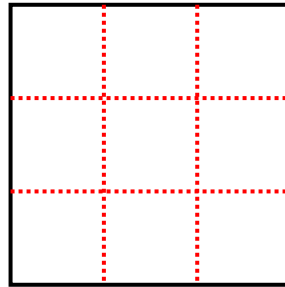
Aqui tem 4 linhas e 5 colunas .
Existem 20 caixas no total.



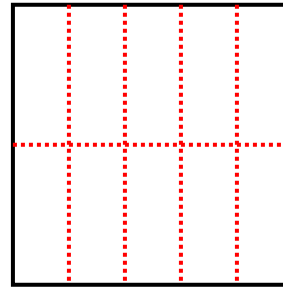
1) 3 Reihen
5 Spalten



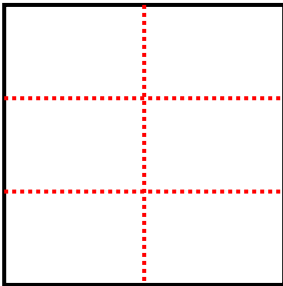
2) 3 Reihen
3 Spalten



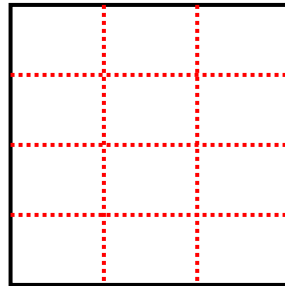
3) 2 Reihen
5 Spalten



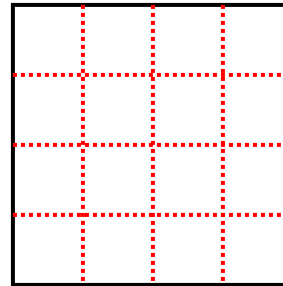
4) 3 Reihen
2 Spalten



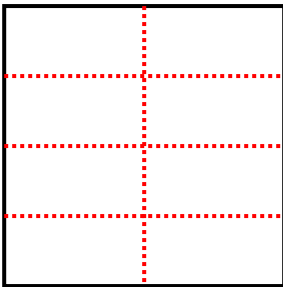
5) 4 Reihen
3 Spalten



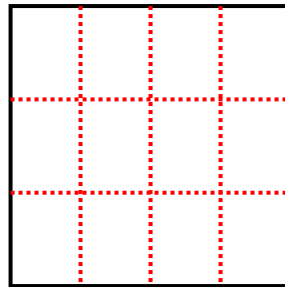
6) 4 Reihen
4 Spalten



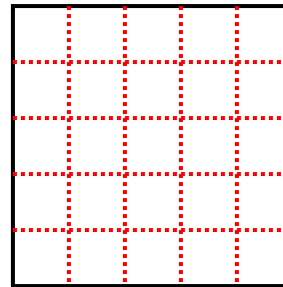
7) 4 Reihen
2 Spalten



8) 3 Reihen
4 Spalten



9) 5 Reihen
5 Spalten



Antworten

1. **15**

2. **9**

3. **10**

4. **6**

5. **12**

6. **16**

7. **8**

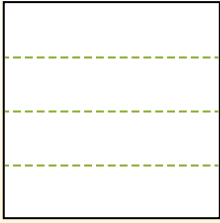
8. **12**

9. **25**

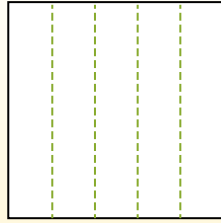


Teile die Form wie beschrieben auf und zähle dann die Anzahl der Felder.

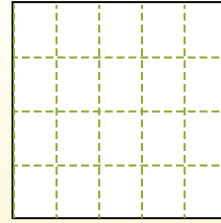
Las filas van de izquierda a derecha.




Las columnas van de arriba a abajo.



Aqui tem 4 linhas e 5 colunas .
Existem 20 caixas no total.




1) 3 Reihen
3 Spalten




2) 3 Reihen
2 Spalten



3) 2 Reihen
2 Spalten




4) 4 Reihen
3 Spalten




5) 4 Reihen
2 Spalten




6) 4 Reihen
4 Spalten




7) 3 Reihen
5 Spalten



8) 2 Reihen
5 Spalten



9) 2 Reihen
4 Spalten



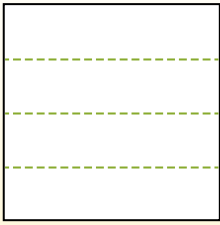
Antworten

- 1. _____
- 2. _____
- 3. _____
- 4. _____
- 5. _____
- 6. _____
- 7. _____
- 8. _____
- 9. _____

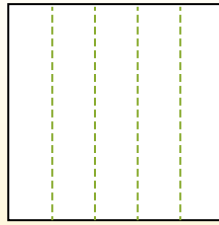


Teile die Form wie beschrieben auf und zähle dann die Anzahl der Felder.

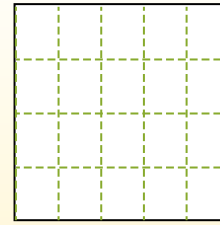
Las filas van de izquierda a derecha.



Las columnas van de arriba a abajo.

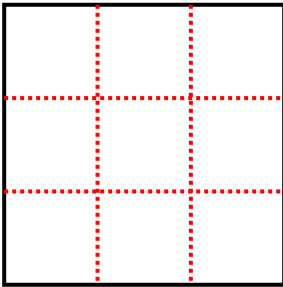


Aqui tem 4 linhas e 5 colunas .
Existem 20 caixas no total.

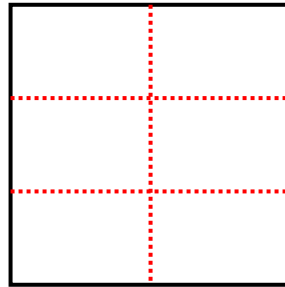


Antworten

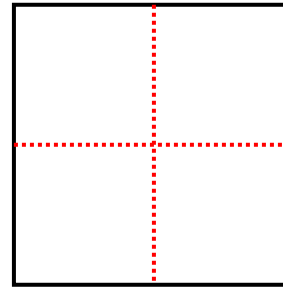
1) 3 Reihen
3 Spalten



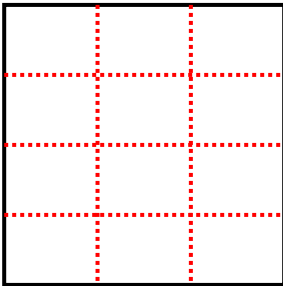
2) 3 Reihen
2 Spalten



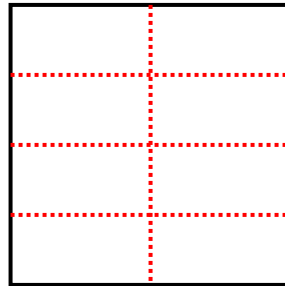
3) 2 Reihen
2 Spalten



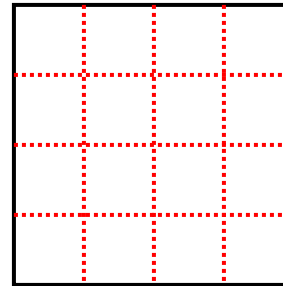
4) 4 Reihen
3 Spalten



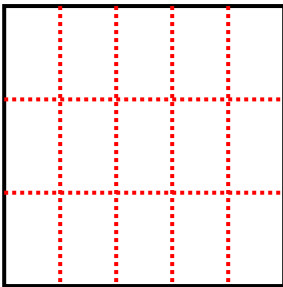
5) 4 Reihen
2 Spalten



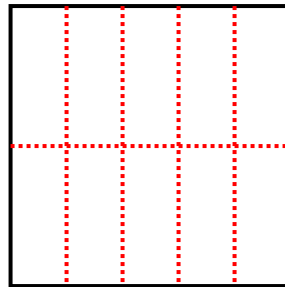
6) 4 Reihen
4 Spalten



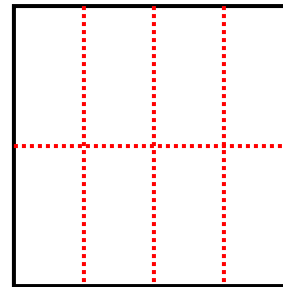
7) 3 Reihen
5 Spalten



8) 2 Reihen
5 Spalten



9) 2 Reihen
4 Spalten

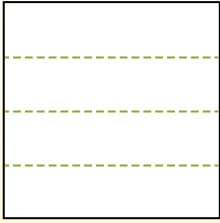


- 1. 9
- 2. 6
- 3. 4
- 4. 12
- 5. 8
- 6. 16
- 7. 15
- 8. 10
- 9. 8

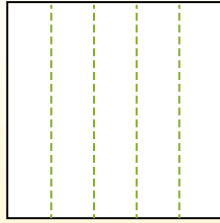


Teile die Form wie beschrieben auf und zähle dann die Anzahl der Felder.

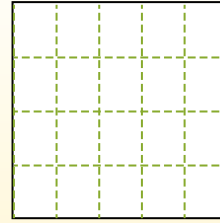
Las filas van de izquierda a derecha.




Las columnas van de arriba a abajo.



Aqui tem 4 linhas e 5 colunas .
Existem 20 caixas no total.



1) 3 Reihen
2 Spalten




2) 4 Reihen
2 Spalten




3) 2 Reihen
3 Spalten




4) 5 Reihen
4 Spalten




5) 5 Reihen
2 Spalten




6) 2 Reihen
2 Spalten




7) 3 Reihen
4 Spalten



8) 5 Reihen
5 Spalten



9) 4 Reihen
3 Spalten



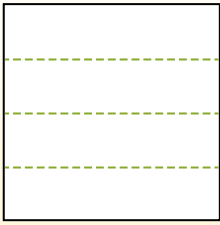
Antworten

- 1. _____
- 2. _____
- 3. _____
- 4. _____
- 5. _____
- 6. _____
- 7. _____
- 8. _____
- 9. _____

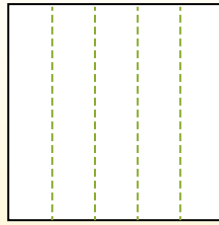


Teile die Form wie beschrieben auf und zähle dann die Anzahl der Felder.

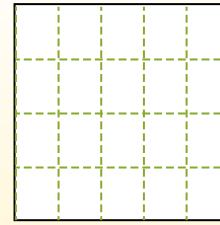
Las filas van de izquierda a derecha.



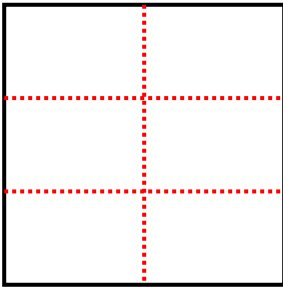
Las columnas van de arriba a abajo.



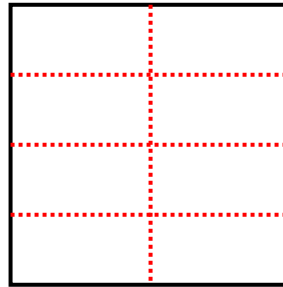
Aqui tem 4 linhas e 5 colunas. Existem 20 caixas no total.



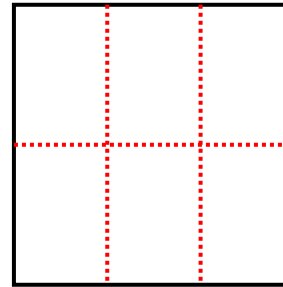
1) 3 Reihen
2 Spalten



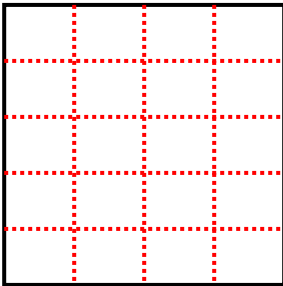
2) 4 Reihen
2 Spalten



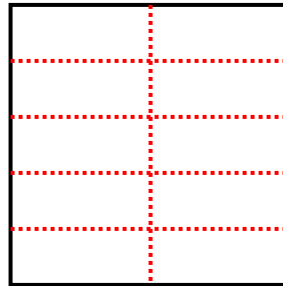
3) 2 Reihen
3 Spalten



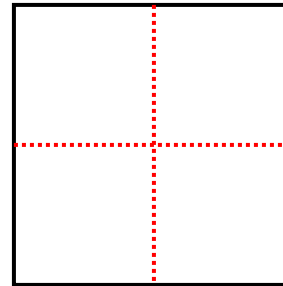
4) 5 Reihen
4 Spalten



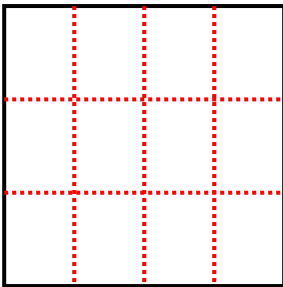
5) 5 Reihen
2 Spalten



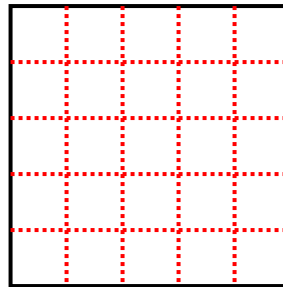
6) 2 Reihen
2 Spalten



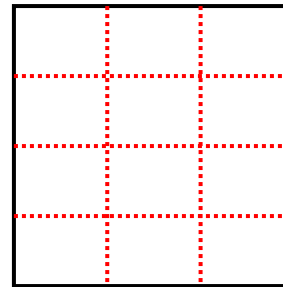
7) 3 Reihen
4 Spalten



8) 5 Reihen
5 Spalten



9) 4 Reihen
3 Spalten



Antworten

1. 6

2. 8

3. 6

4. 20

5. 10

6. 4

7. 12

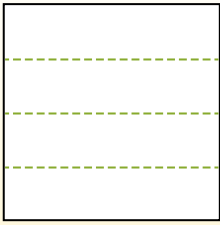
8. 25

9. 12

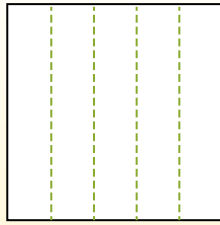


Teile die Form wie beschrieben auf und zähle dann die Anzahl der Felder.

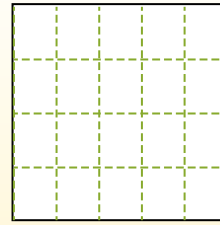
Las filas van de izquierda a derecha.




Las columnas van de arriba a abajo.




Aqui tem 4 linhas e 5 colunas .
Existem 20 caixas no total.




1) 3 Reihen
3 Spalten




2) 2 Reihen
3 Spalten



3) 4 Reihen
2 Spalten




4) 4 Reihen
4 Spalten




5) 2 Reihen
5 Spalten




6) 2 Reihen
4 Spalten




7) 4 Reihen
3 Spalten



8) 5 Reihen
4 Spalten



9) 5 Reihen
3 Spalten



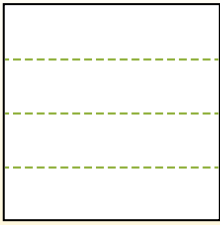
Antworten

- 1. _____
- 2. _____
- 3. _____
- 4. _____
- 5. _____
- 6. _____
- 7. _____
- 8. _____
- 9. _____

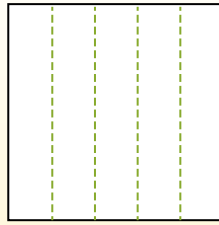


Teile die Form wie beschrieben auf und zähle dann die Anzahl der Felder.

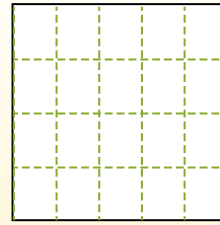
Las filas van de izquierda a derecha.



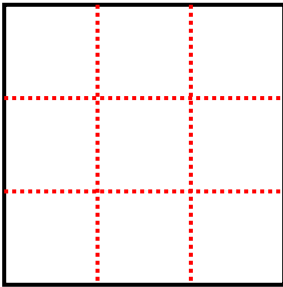
Las columnas van de arriba a abajo.



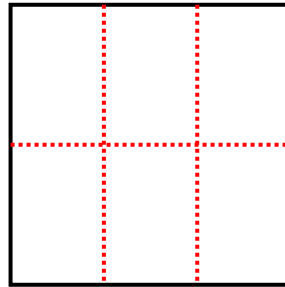
Aqui tem 4 linhas e 5 colunas. Existem 20 caixas no total.



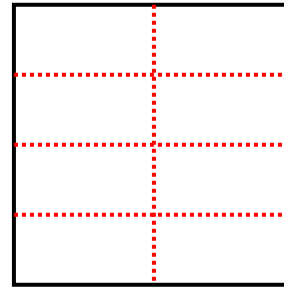
1) 3 Reihen
3 Spalten



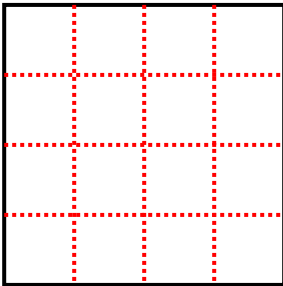
2) 2 Reihen
3 Spalten



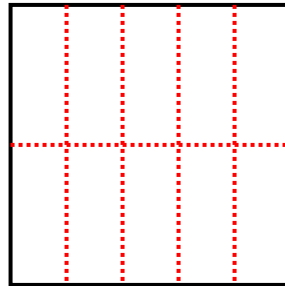
3) 4 Reihen
2 Spalten



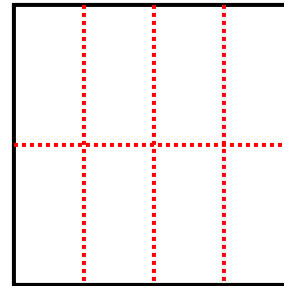
4) 4 Reihen
4 Spalten



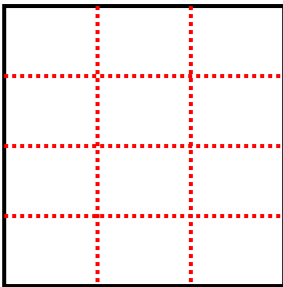
5) 2 Reihen
5 Spalten



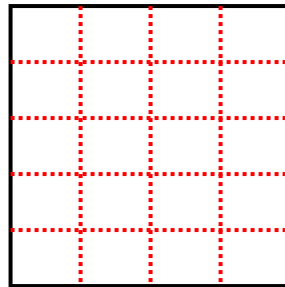
6) 2 Reihen
4 Spalten



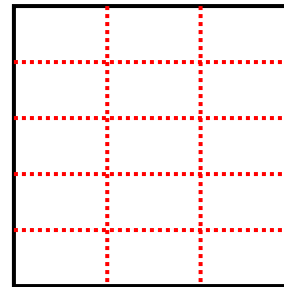
7) 4 Reihen
3 Spalten



8) 5 Reihen
4 Spalten



9) 5 Reihen
3 Spalten



Antworten

1. **9**

2. **6**

3. **8**

4. **16**

5. **10**

6. **8**

7. **12**

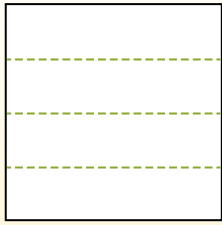
8. **20**

9. **15**

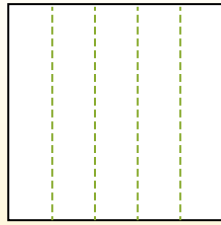


Teile die Form wie beschrieben auf und zähle dann die Anzahl der Felder.

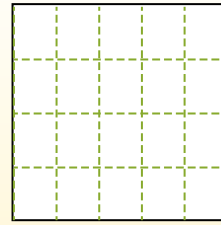
Las filas van de izquierda a derecha.




Las columnas van de arriba a abajo.



Aqui tem 4 linhas e 5 colunas .
Existem 20 caixas no total.




1) 5 Reihen
2 Spalten




2) 3 Reihen
3 Spalten



3) 2 Reihen
3 Spalten




4) 3 Reihen
4 Spalten




5) 2 Reihen
2 Spalten




6) 5 Reihen
4 Spalten




7) 3 Reihen
2 Spalten



8) 5 Reihen
3 Spalten



9) 2 Reihen
5 Spalten



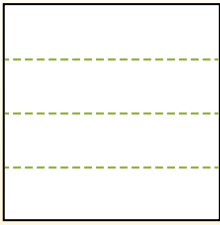
Antworten

- 1. _____
- 2. _____
- 3. _____
- 4. _____
- 5. _____
- 6. _____
- 7. _____
- 8. _____
- 9. _____

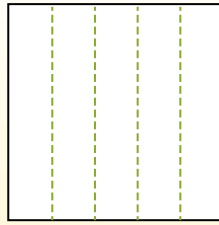


Teile die Form wie beschrieben auf und zähle dann die Anzahl der Felder.

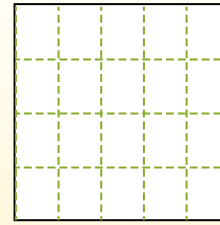
Las filas van de izquierda a derecha.



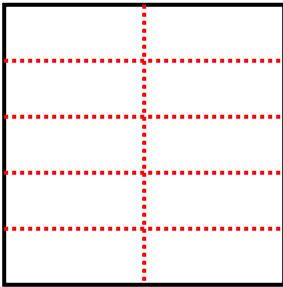
Las columnas van de arriba a abajo.



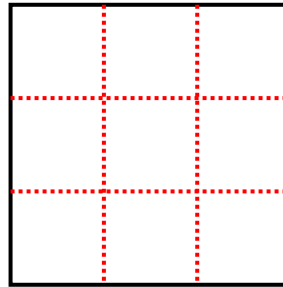
Aqui tem 4 linhas e 5 colunas . Existem 20 caixas no total.



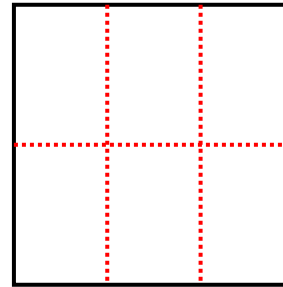
1) 5 Reihen
2 Spalten



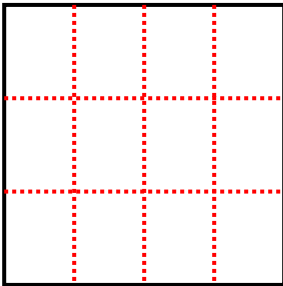
2) 3 Reihen
3 Spalten



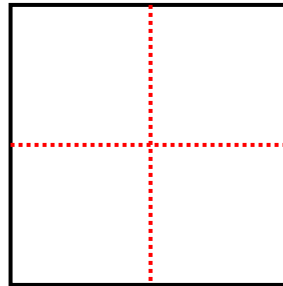
3) 2 Reihen
3 Spalten



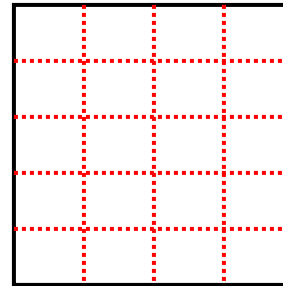
4) 3 Reihen
4 Spalten



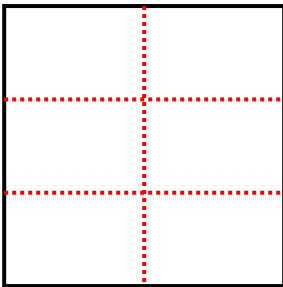
5) 2 Reihen
2 Spalten



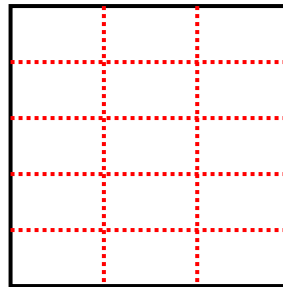
6) 5 Reihen
4 Spalten



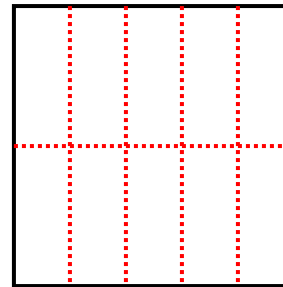
7) 3 Reihen
2 Spalten



8) 5 Reihen
3 Spalten



9) 2 Reihen
5 Spalten



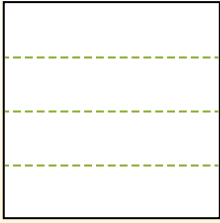
Antworten

- 1. 10
- 2. 9
- 3. 6
- 4. 12
- 5. 4
- 6. 20
- 7. 6
- 8. 15
- 9. 10

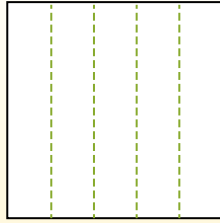


Teile die Form wie beschrieben auf und zähle dann die Anzahl der Felder.

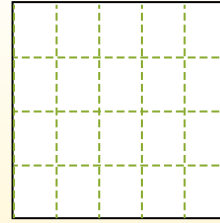
Las filas van de izquierda a derecha.




Las columnas van de arriba a abajo.



Aqui tem 4 linhas e 5 colunas .
Existem 20 caixas no total.




1) 2 Reihen
4 Spalten




2) 5 Reihen
2 Spalten



3) 3 Reihen
4 Spalten




4) 3 Reihen
5 Spalten




5) 2 Reihen
3 Spalten




6) 4 Reihen
3 Spalten




7) 5 Reihen
3 Spalten



8) 3 Reihen
2 Spalten



9) 3 Reihen
3 Spalten



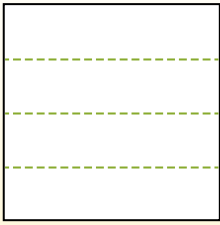
Antworten

- 1. _____
- 2. _____
- 3. _____
- 4. _____
- 5. _____
- 6. _____
- 7. _____
- 8. _____
- 9. _____

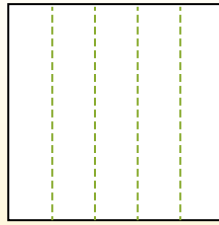


Teile die Form wie beschrieben auf und zähle dann die Anzahl der Felder.

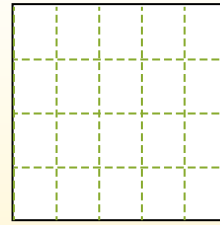
Las filas van de izquierda a derecha.



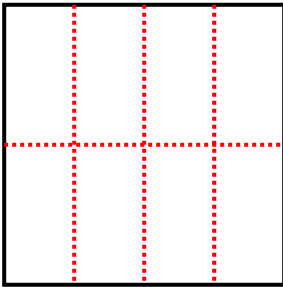
Las columnas van de arriba a abajo.



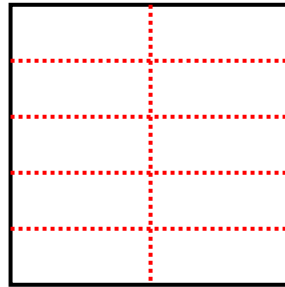
Aqui tem 4 linhas e 5 colunas. Existem 20 caixas no total.



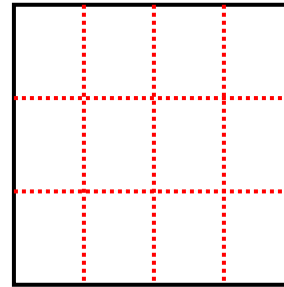
1) 2 Reihen
4 Spalten



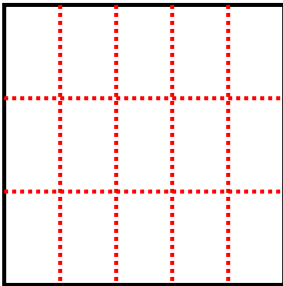
2) 5 Reihen
2 Spalten



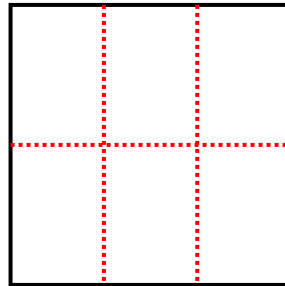
3) 3 Reihen
4 Spalten



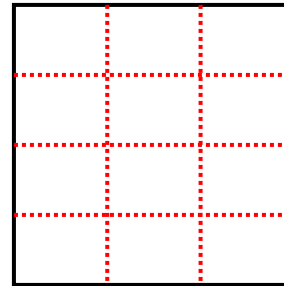
4) 3 Reihen
5 Spalten



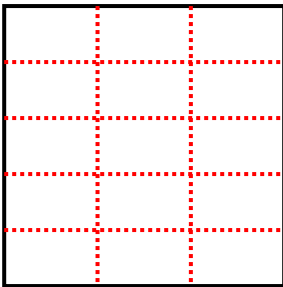
5) 2 Reihen
3 Spalten



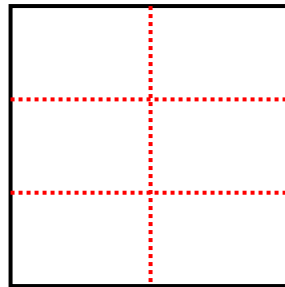
6) 4 Reihen
3 Spalten



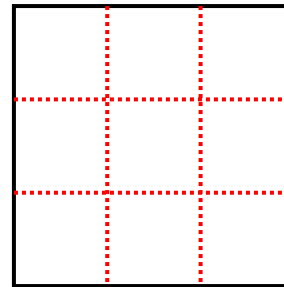
7) 5 Reihen
3 Spalten



8) 3 Reihen
2 Spalten



9) 3 Reihen
3 Spalten



Antworten

1. 8

2. 10

3. 12

4. 15

5. 6

6. 12

7. 15

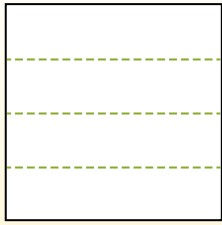
8. 6

9. 9

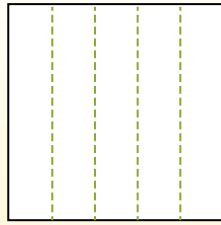


Teile die Form wie beschrieben auf und zähle dann die Anzahl der Felder.

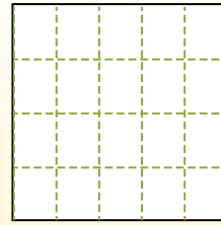
Las filas van de izquierda a derecha.




Las columnas van de arriba a abajo.



Aqui tem 4 linhas e 5 colunas. Existem 20 caixas no total.




1) 4 Reihen
2 Spalten




2) 2 Reihen
2 Spalten



3) 5 Reihen
3 Spalten




4) 5 Reihen
4 Spalten




5) 3 Reihen
2 Spalten




6) 4 Reihen
3 Spalten




7) 5 Reihen
2 Spalten



8) 4 Reihen
4 Spalten



9) 3 Reihen
3 Spalten



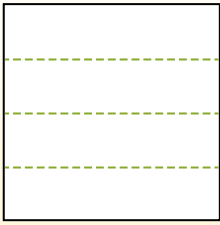
Antworten

- 1. _____
- 2. _____
- 3. _____
- 4. _____
- 5. _____
- 6. _____
- 7. _____
- 8. _____
- 9. _____

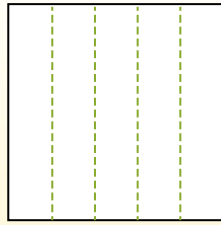


Teile die Form wie beschrieben auf und zähle dann die Anzahl der Felder.

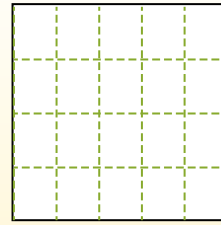
Las filas van de izquierda a derecha.



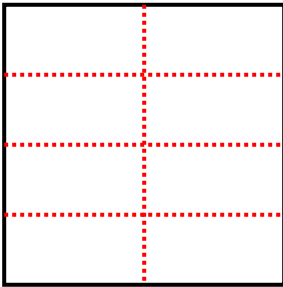
Las columnas van de arriba a abajo.



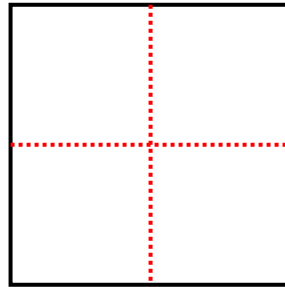
Aqui tem 4 linhas e 5 colunas. Existem 20 caixas no total.



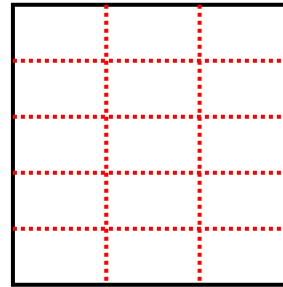
1) 4 Reihen
2 Spalten



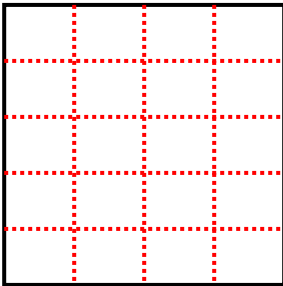
2) 2 Reihen
2 Spalten



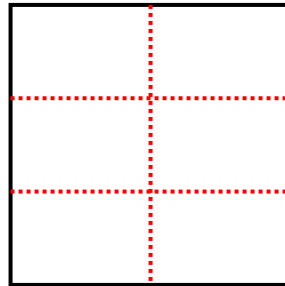
3) 5 Reihen
3 Spalten



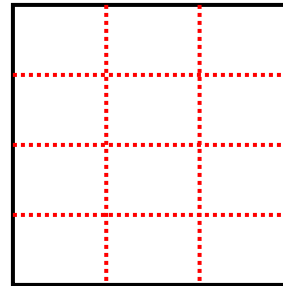
4) 5 Reihen
4 Spalten



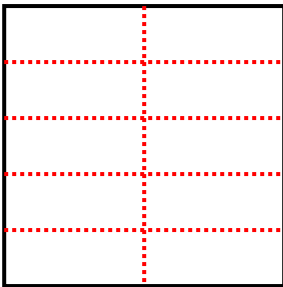
5) 3 Reihen
2 Spalten



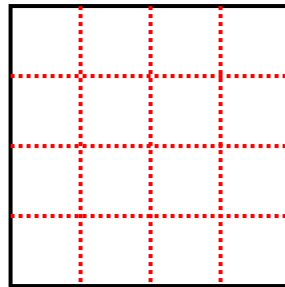
6) 4 Reihen
3 Spalten



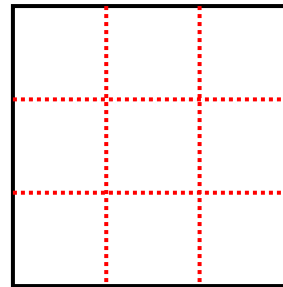
7) 5 Reihen
2 Spalten



8) 4 Reihen
4 Spalten



9) 3 Reihen
3 Spalten



Antworten

1. 8

2. 4

3. 15

4. 20

5. 6

6. 12

7. 10

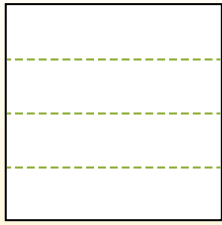
8. 16

9. 9

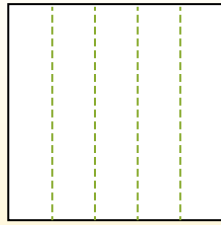


Teile die Form wie beschrieben auf und zähle dann die Anzahl der Felder.

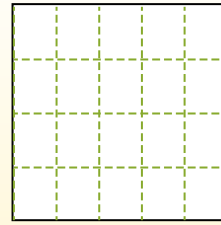
Las filas van de izquierda a derecha.




Las columnas van de arriba a abajo.



Aqui tem 4 linhas e 5 colunas .
Existem 20 caixas no total.




1) 5 Reihen
4 Spalten




2) 4 Reihen
4 Spalten



3) 2 Reihen
3 Spalten




4) 4 Reihen
3 Spalten




5) 5 Reihen
5 Spalten




6) 3 Reihen
5 Spalten




7) 5 Reihen
2 Spalten



8) 2 Reihen
5 Spalten



9) 3 Reihen
3 Spalten



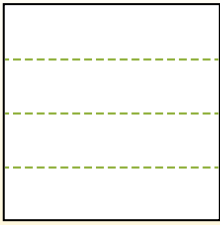
Antworten

- 1. _____
- 2. _____
- 3. _____
- 4. _____
- 5. _____
- 6. _____
- 7. _____
- 8. _____
- 9. _____

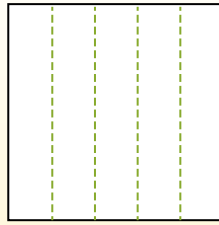


Teile die Form wie beschrieben auf und zähle dann die Anzahl der Felder.

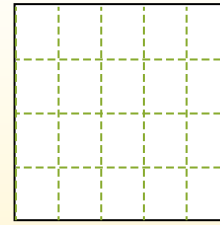
Las filas van de izquierda a derecha.




Las columnas van de arriba a abajo.



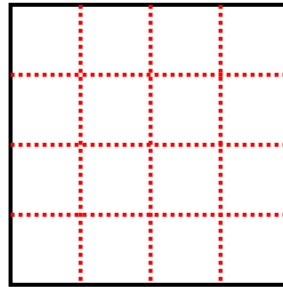
Aqui tem 4 linhas e 5 colunas .
Existem 20 caixas no total.



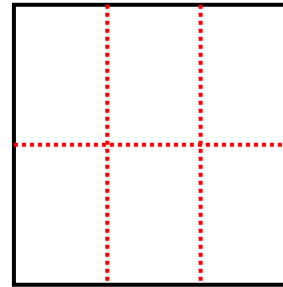
1) 5 Reihen
4 Spalten



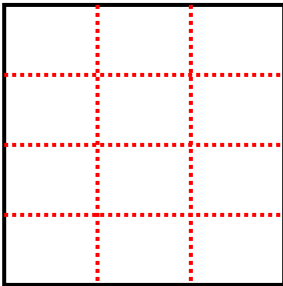
2) 4 Reihen
4 Spalten



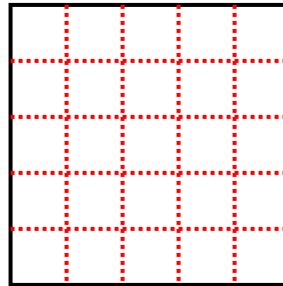
3) 2 Reihen
3 Spalten



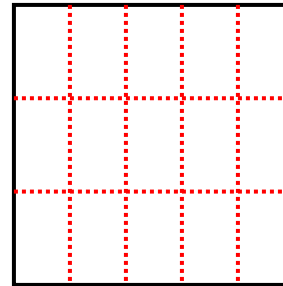
4) 4 Reihen
3 Spalten



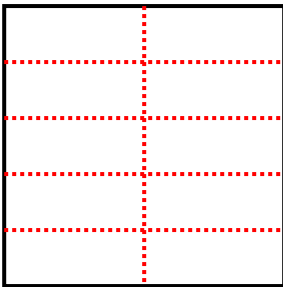
5) 5 Reihen
5 Spalten



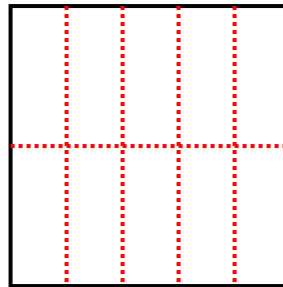
6) 3 Reihen
5 Spalten



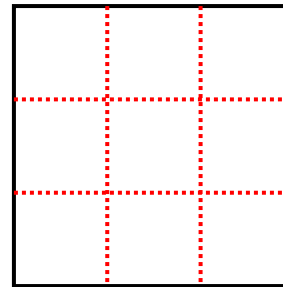
7) 5 Reihen
2 Spalten



8) 2 Reihen
5 Spalten



9) 3 Reihen
3 Spalten



Antworten

1. **20**

2. **16**

3. **6**

4. **12**

5. **25**

6. **15**

7. **10**

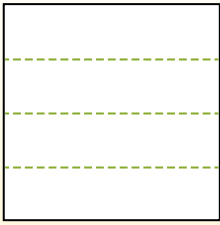
8. **10**

9. **9**

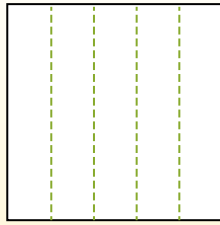


Teile die Form wie beschrieben auf und zähle dann die Anzahl der Felder.

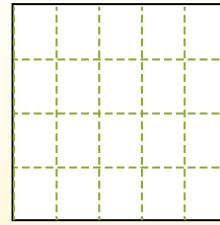
Las filas van de izquierda a derecha.




Las columnas van de arriba a abajo.



Aqui tem 4 linhas e 5 colunas .
Existem 20 caixas no total.




1) 3 Reihen
3 Spalten




2) 2 Reihen
3 Spalten



3) 4 Reihen
3 Spalten




4) 5 Reihen
4 Spalten




5) 2 Reihen
5 Spalten




6) 3 Reihen
2 Spalten




7) 2 Reihen
4 Spalten



8) 4 Reihen
4 Spalten



9) 5 Reihen
3 Spalten



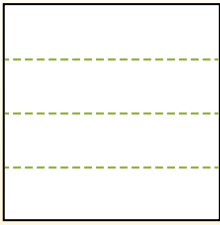
Antworten

- 1. _____
- 2. _____
- 3. _____
- 4. _____
- 5. _____
- 6. _____
- 7. _____
- 8. _____
- 9. _____

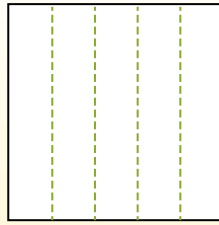


Teile die Form wie beschrieben auf und zähle dann die Anzahl der Felder.

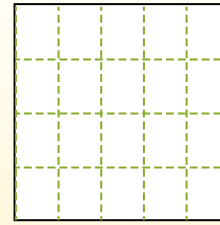
Las filas van de izquierda a derecha.



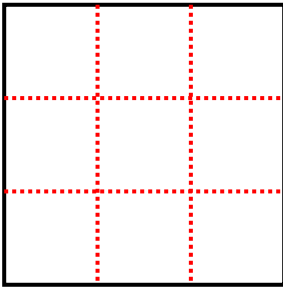
Las columnas van de arriba a abajo.



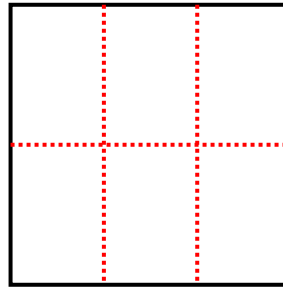
Aqui tem 4 linhas e 5 colunas. Existem 20 caixas no total.



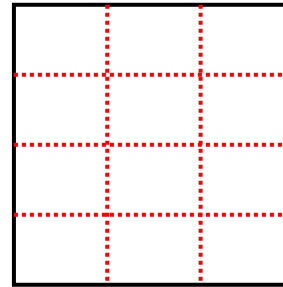
1) 3 Reihen
3 Spalten



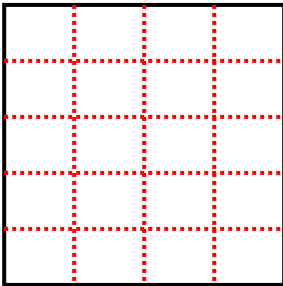
2) 2 Reihen
3 Spalten



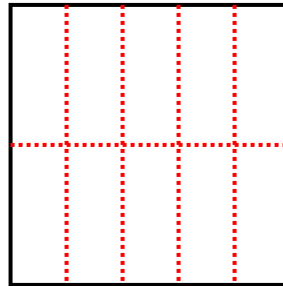
3) 4 Reihen
3 Spalten



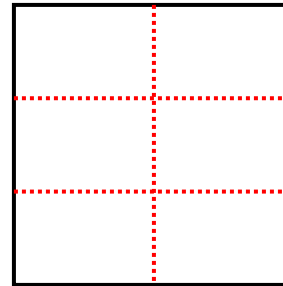
4) 5 Reihen
4 Spalten



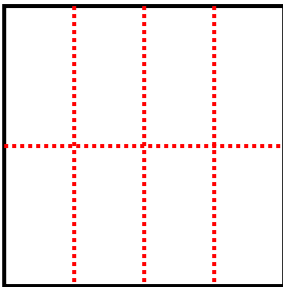
5) 2 Reihen
5 Spalten



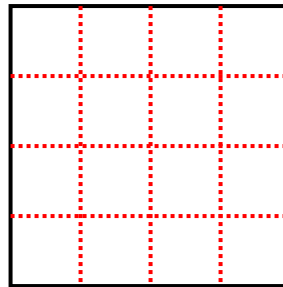
6) 3 Reihen
2 Spalten



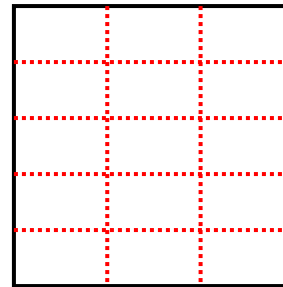
7) 2 Reihen
4 Spalten



8) 4 Reihen
4 Spalten



9) 5 Reihen
3 Spalten



Antworten

1. **9**

2. **6**

3. **12**

4. **20**

5. **10**

6. **6**

7. **8**

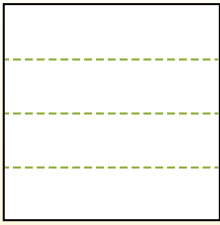
8. **16**

9. **15**

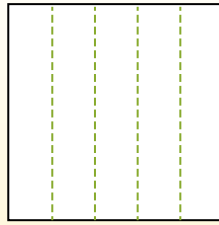


Teile die Form wie beschrieben auf und zähle dann die Anzahl der Felder.

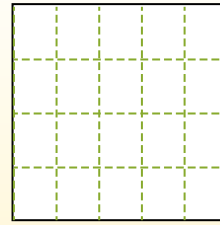
Las filas van de izquierda a derecha.




Las columnas van de arriba a abajo.



Aqui tem 4 linhas e 5 colunas .
Existem 20 caixas no total.




1) 2 Reihen
5 Spalten




2) 3 Reihen
5 Spalten



3) 5 Reihen
5 Spalten




4) 4 Reihen
3 Spalten




5) 5 Reihen
3 Spalten




6) 2 Reihen
3 Spalten




7) 5 Reihen
4 Spalten



8) 2 Reihen
2 Spalten



9) 4 Reihen
4 Spalten



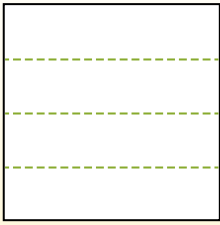
Antworten

- 1. _____
- 2. _____
- 3. _____
- 4. _____
- 5. _____
- 6. _____
- 7. _____
- 8. _____
- 9. _____

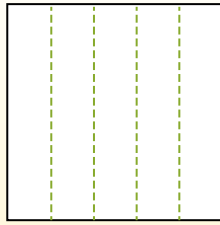


Teile die Form wie beschrieben auf und zähle dann die Anzahl der Felder.

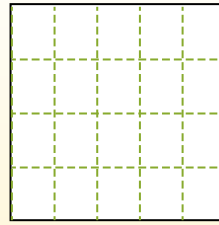
Las filas van de izquierda a derecha.



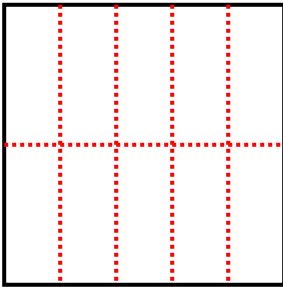
Las columnas van de arriba a abajo.



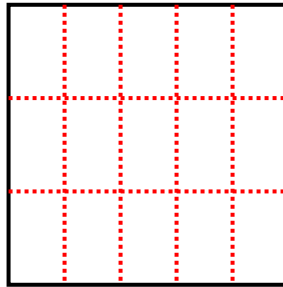
Aqui tem 4 linhas e 5 colunas .
Existem 20 caixas no total.



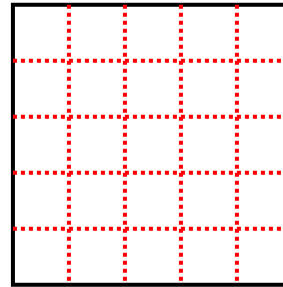
1) 2 Reihen
5 Spalten



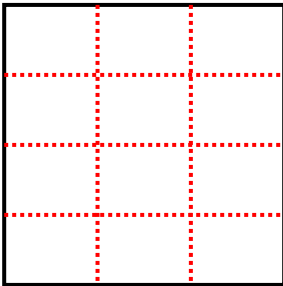
2) 3 Reihen
5 Spalten



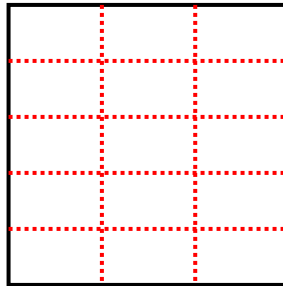
3) 5 Reihen
5 Spalten



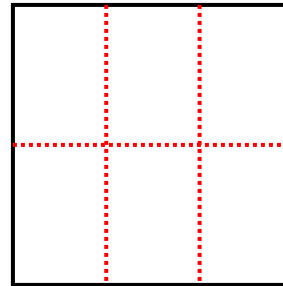
4) 4 Reihen
3 Spalten



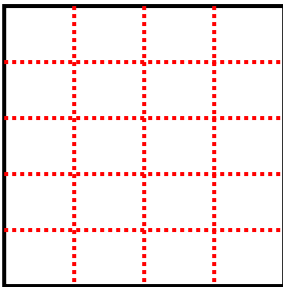
5) 5 Reihen
3 Spalten



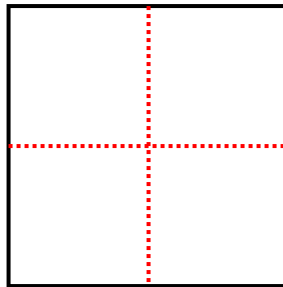
6) 2 Reihen
3 Spalten



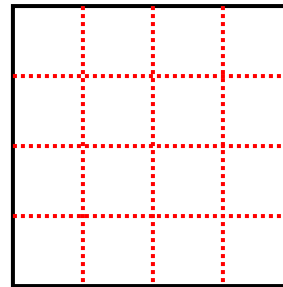
7) 5 Reihen
4 Spalten



8) 2 Reihen
2 Spalten



9) 4 Reihen
4 Spalten



Antworten

1. **10**

2. **15**

3. **25**

4. **12**

5. **15**

6. **6**

7. **20**

8. **4**

9. **16**