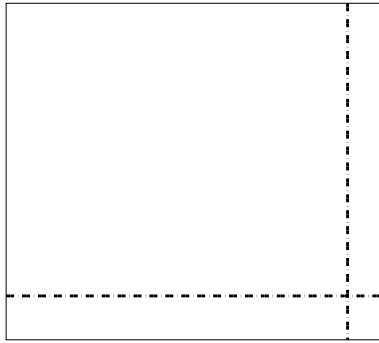





Benutze die vorgegebene Anordnung um jede Aufgabe zu lösen.

**Antworten**

1)  $69 \cdot 77 =$



2)  $54 \cdot 39 =$



1. \_\_\_\_\_

2. \_\_\_\_\_


3. \_\_\_\_\_

4. \_\_\_\_\_


5. \_\_\_\_\_

6. \_\_\_\_\_


3)  $43 \cdot 57 =$




4)  $47 \cdot 33 =$



5)  $42 \cdot 22 =$



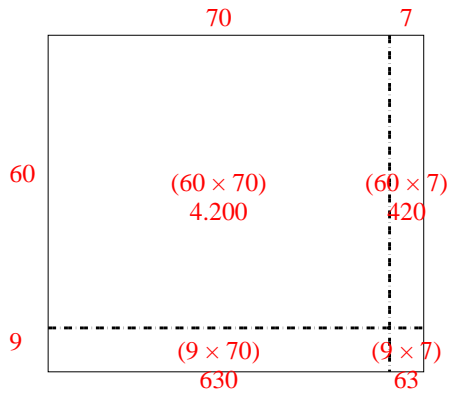
6)  $46 \cdot 46 =$



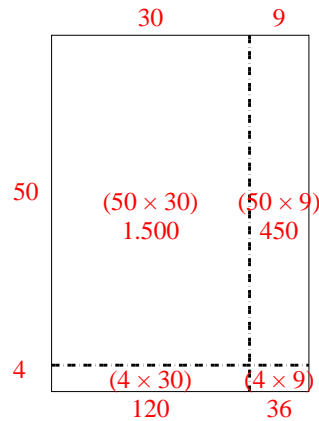


Benutze die vorgegebene Anordnung um jede Aufgabe zu lösen.

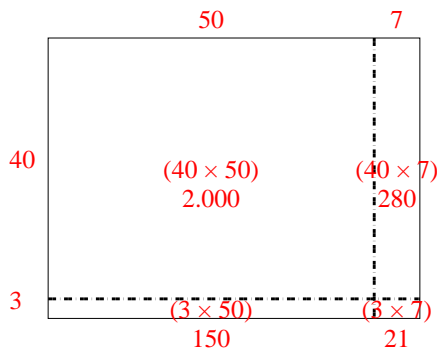
1)  $69 \cdot 77 =$



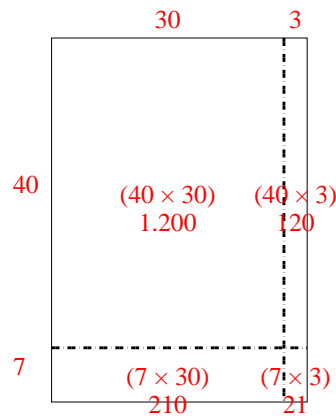
2)  $54 \cdot 39 =$



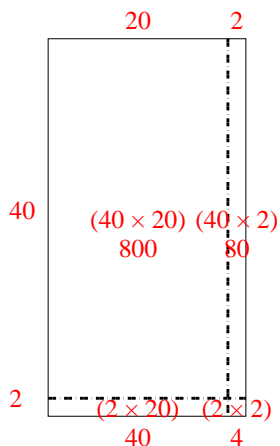
3)  $43 \cdot 57 =$



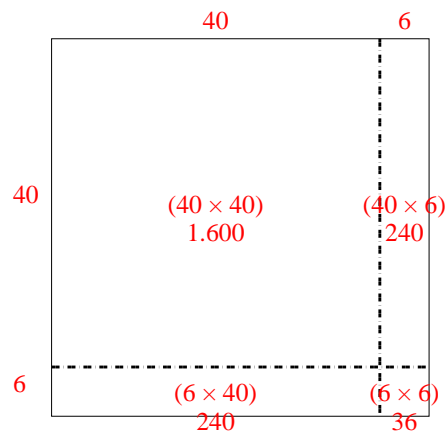
4)  $47 \cdot 33 =$



5)  $42 \cdot 22 =$



6)  $46 \cdot 46 =$

**Antworten**1. **5.313**2. **2.106**3. **2.451**4. **1.551**5. **924**6. **2.116**