





Benutze die vorgegebene Anordnung um jede Aufgabe zu lösen.

Antworten

1) $38 \cdot 22 =$



2) $36 \cdot 44 =$



1. _____

2. _____


3. _____

4. _____


5. _____

6. _____


3) $48 \cdot 45 =$




4) $49 \cdot 54 =$



5) $43 \cdot 29 =$



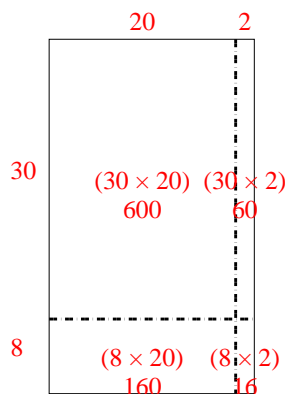
6) $39 \cdot 23 =$



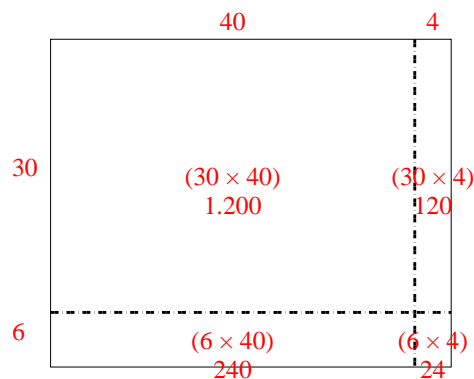


Benutze die vorgegebene Anordnung um jede Aufgabe zu lösen.

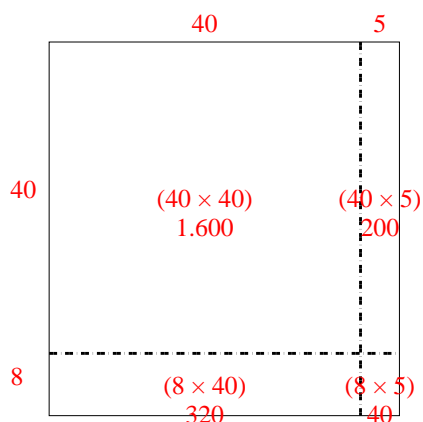
1) $38 \cdot 22 =$



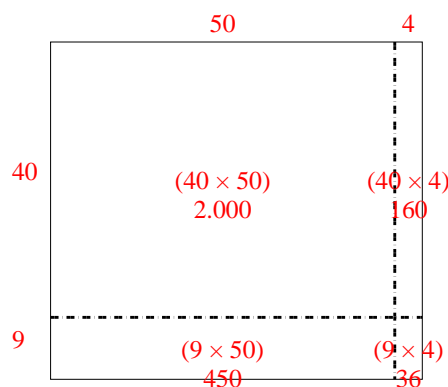
2) $36 \cdot 44 =$



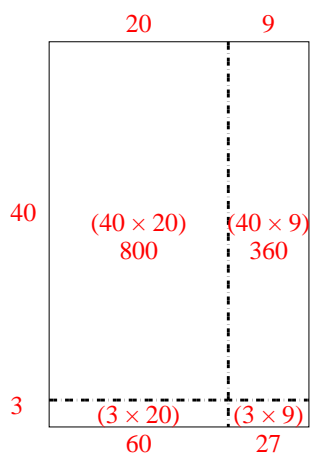
3) $48 \cdot 45 =$



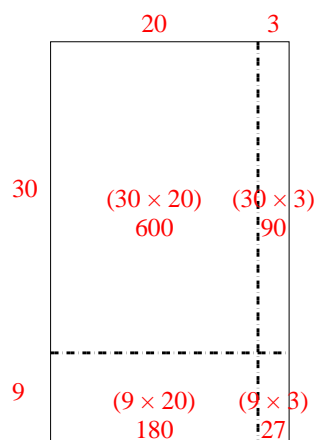
4) $49 \cdot 54 =$



5) $43 \cdot 29 =$



6) $39 \cdot 23 =$

**Antworten**1. **836**2. **1.584**3. **2.160**4. **2.646**5. **1.247**6. **897**