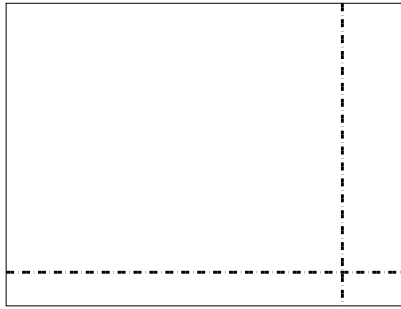


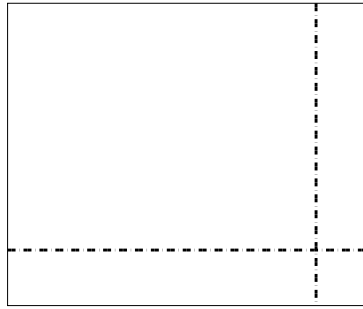


Benutze die vorgegebene Anordnung um jede Aufgabe zu lösen.


1)  $45 \cdot 59 =$




2)  $49 \cdot 59 =$




3)  $39 \cdot 16 =$




4)  $37 \cdot 13 =$



5)  $37 \cdot 48 =$



6)  $37 \cdot 14 =$



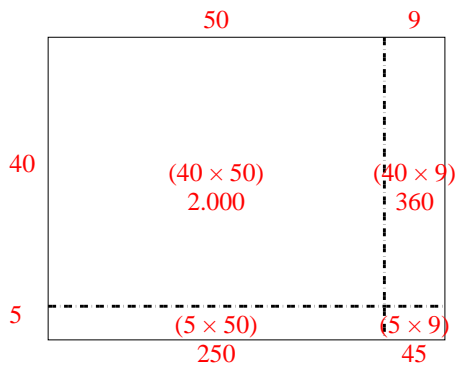
**Antworten**

- 1. \_\_\_\_\_
- 2. \_\_\_\_\_
- 3. \_\_\_\_\_
- 4. \_\_\_\_\_
- 5. \_\_\_\_\_
- 6. \_\_\_\_\_

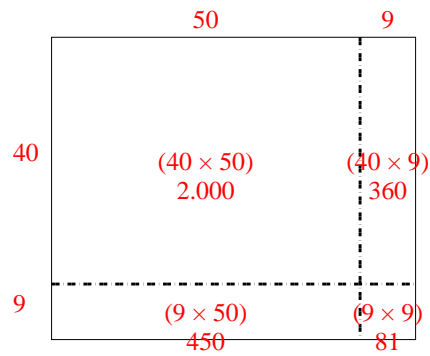


Benutze die vorgegebene Anordnung um jede Aufgabe zu lösen.

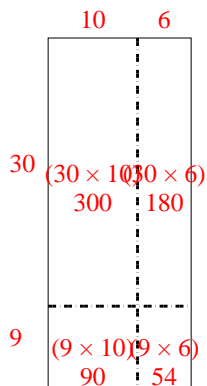
1)  $45 \cdot 59 =$



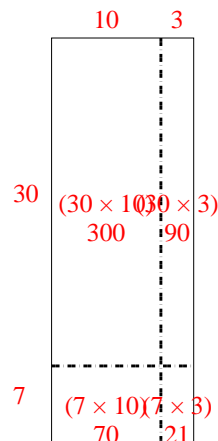
2)  $49 \cdot 59 =$



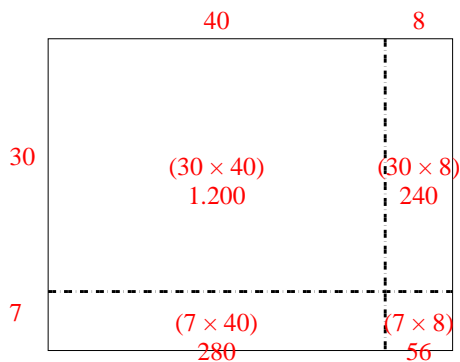
3)  $39 \cdot 16 =$



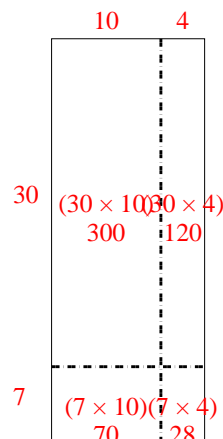
4)  $37 \cdot 13 =$



5)  $37 \cdot 48 =$



6)  $37 \cdot 14 =$

**Antworten**1. **2.655**2. **2.891**3. **624**4. **481**5. **1.776**6. **518**