





Benutze die vorgegebenen Anordnungen um jede Aufgabe zu lösen.


1)  $29 \cdot 20 =$




2)  $18 \cdot 10 =$




3)  $11 \cdot 10 =$




4)  $17 \cdot 10 =$



5)  $10 \cdot 18 =$



6)  $10 \cdot 11 =$



**Antworten**

1. \_\_\_\_\_

2. \_\_\_\_\_

3. \_\_\_\_\_

4. \_\_\_\_\_

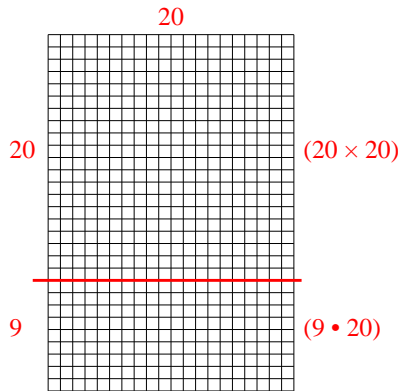
5. \_\_\_\_\_

6. \_\_\_\_\_

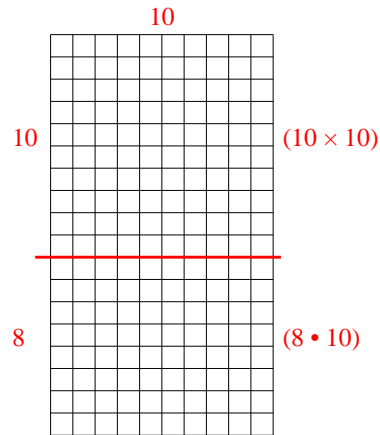


Benutze die vorgegebenen Anordnungen um jede Aufgabe zu lösen.

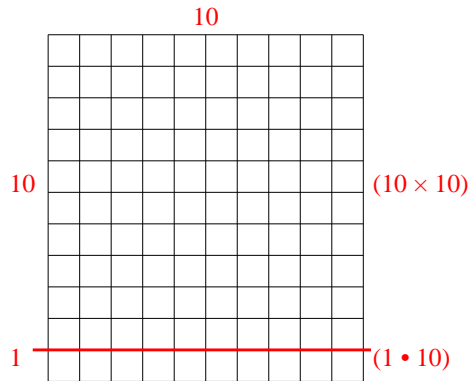
1)  $29 \cdot 20 =$



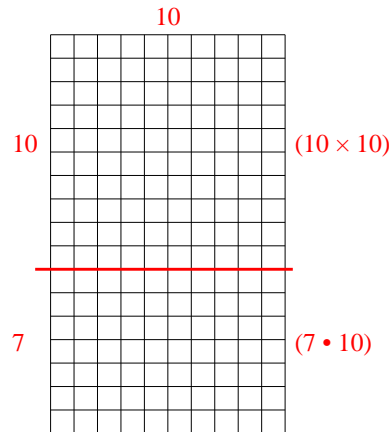
2)  $18 \cdot 10 =$



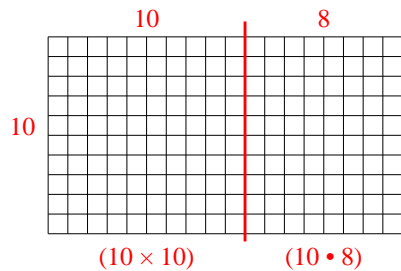
3)  $11 \cdot 10 =$



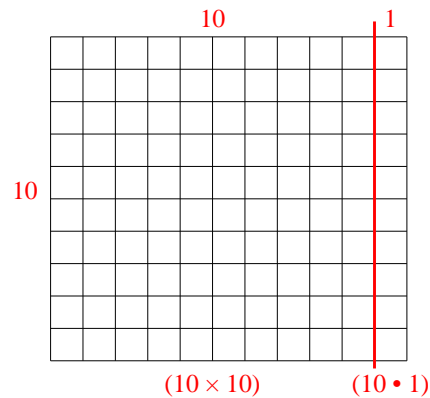
4)  $17 \cdot 10 =$



5)  $10 \cdot 18 =$




6)  $10 \cdot 11 =$

**Antworten**1. **580**2. **180**3. **110**4. **170**5. **180**6. **110**




Benutze die vorgegebenen Anordnungen um jede Aufgabe zu lösen.


1)  $11 \cdot 10 =$




2)  $17 \cdot 10 =$




3)  $10 \cdot 13 =$




4)  $10 \cdot 17 =$



5)  $10 \cdot 19 =$



6)  $10 \cdot 15 =$



**Antworten**

1. \_\_\_\_\_

2. \_\_\_\_\_

3. \_\_\_\_\_

4. \_\_\_\_\_

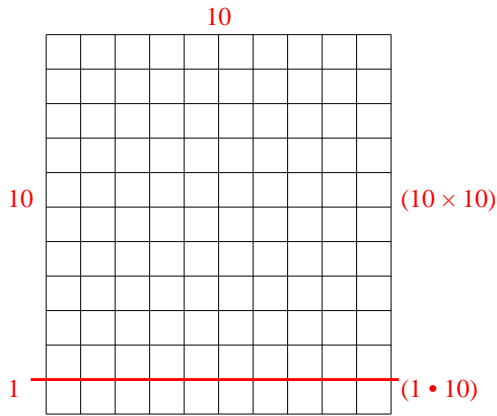
5. \_\_\_\_\_

6. \_\_\_\_\_

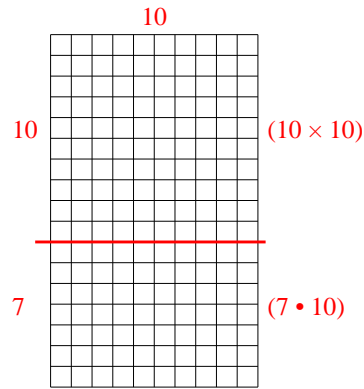


Benutze die vorgegebenen Anordnungen um jede Aufgabe zu lösen.

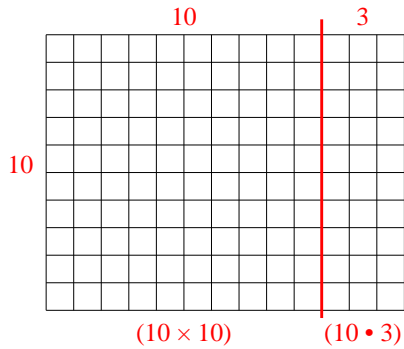
1)  $11 \cdot 10 =$



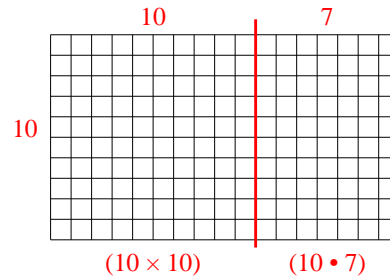
2)  $17 \cdot 10 =$



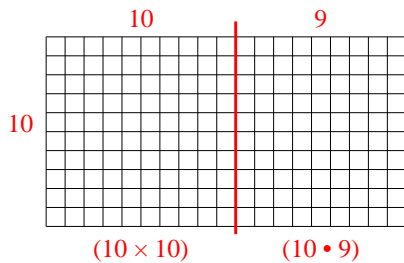
3)  $10 \cdot 13 =$



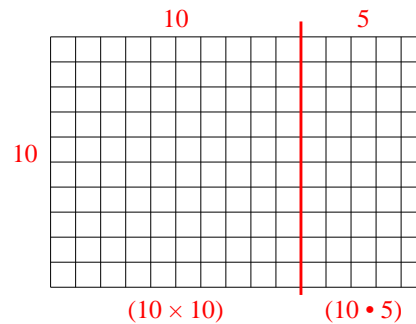
4)  $10 \cdot 17 =$



5)  $10 \cdot 19 =$



6)  $10 \cdot 15 =$



**Antworten**

1. **110**

2. **170**

3. **130**

4. **170**


5. **190**

6. **150**




Benutze die vorgegebenen Anordnungen um jede Aufgabe zu lösen.


1)  $16 \cdot 10 =$




2)  $10 \cdot 12 =$




3)  $19 \cdot 10 =$




4)  $10 \cdot 19 =$



5)  $15 \cdot 10 =$



6)  $10 \cdot 18 =$



**Antworten**

1. \_\_\_\_\_

2. \_\_\_\_\_

3. \_\_\_\_\_

4. \_\_\_\_\_

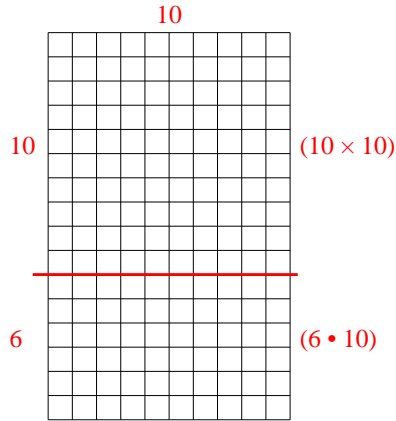
5. \_\_\_\_\_

6. \_\_\_\_\_

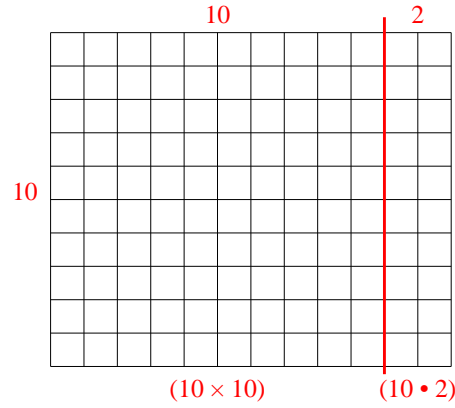


Benutze die vorgegebenen Anordnungen um jede Aufgabe zu lösen.

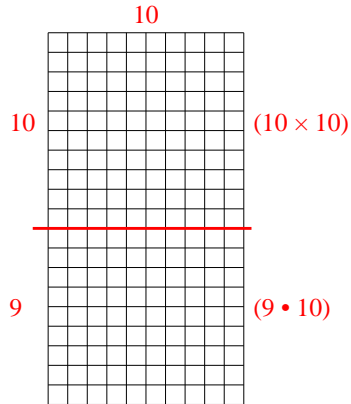
1)  $16 \cdot 10 =$



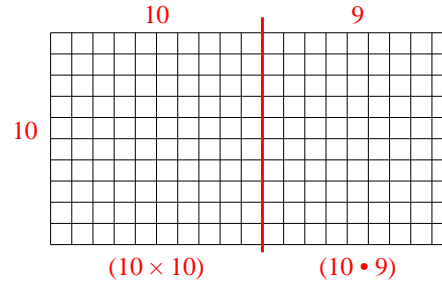
2)  $10 \cdot 12 =$



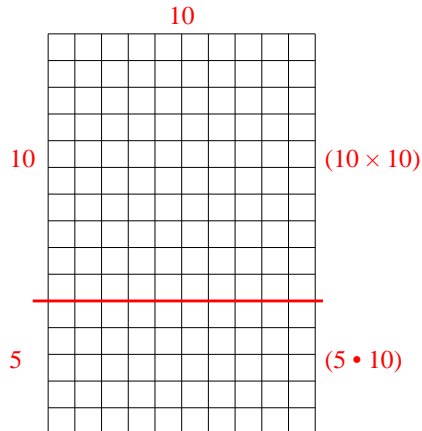
3)  $19 \cdot 10 =$



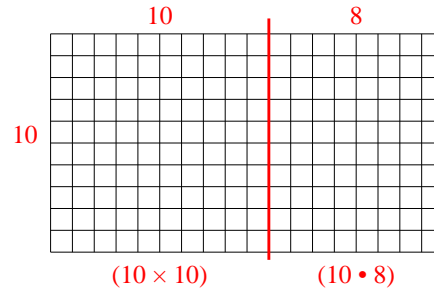
4)  $10 \cdot 19 =$



5)  $15 \cdot 10 =$



6)  $10 \cdot 18 =$



**Antworten**

1. 160

2. 120

3. 190

4. 190


5. 150

6. 180

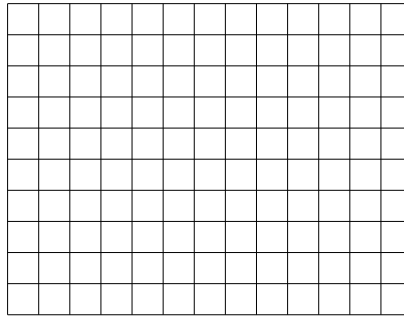


Benutze die vorgegebenen Anordnungen um jede Aufgabe zu lösen.


1)  $23 \cdot 20 =$




2)  $10 \cdot 13 =$




3)  $10 \cdot 11 =$




4)  $10 \cdot 17 =$



5)  $10 \cdot 16 =$



6)  $19 \cdot 10 =$



**Antworten**

1. \_\_\_\_\_

2. \_\_\_\_\_

3. \_\_\_\_\_

4. \_\_\_\_\_

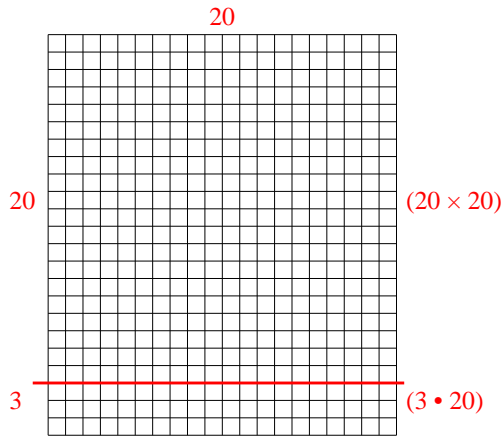
5. \_\_\_\_\_

6. \_\_\_\_\_

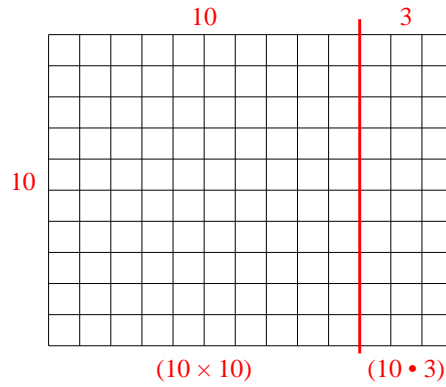


Benutze die vorgegebenen Anordnungen um jede Aufgabe zu lösen.

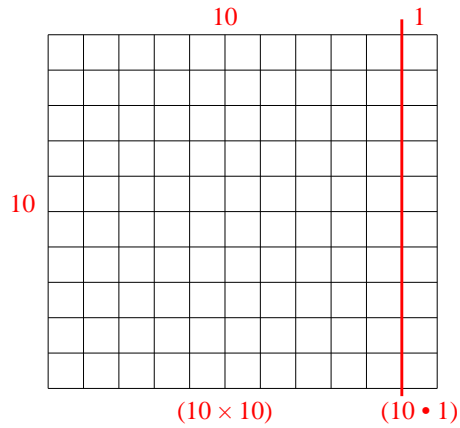
1)  $23 \cdot 20 =$



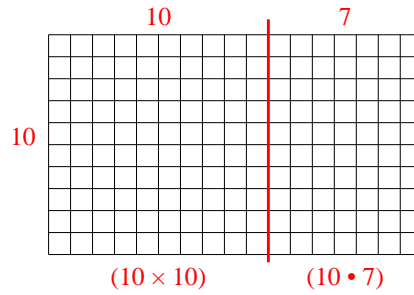
2)  $10 \cdot 13 =$



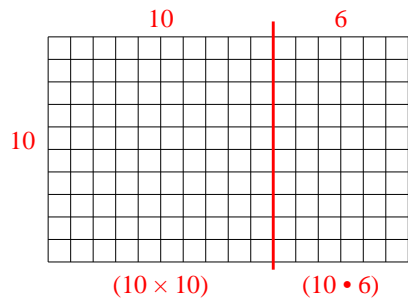
3)  $10 \cdot 11 =$



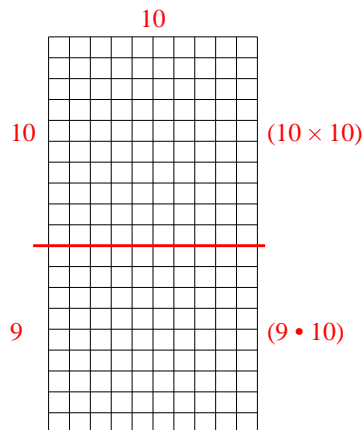
4)  $10 \cdot 17 =$



5)  $10 \cdot 16 =$



6)  $19 \cdot 10 =$



**Antworten**

1. **460**

2. **130**

3. **110**

4. **170**

5. **160**


6. **190**






Benutze die vorgegebenen Anordnungen um jede Aufgabe zu lösen.


1)  $33 \cdot 20 =$




2)  $22 \cdot 20 =$




3)  $10 \cdot 13 =$




4)  $15 \cdot 10 =$



5)  $10 \cdot 14 =$



6)  $12 \cdot 10 =$



**Antworten**

1. \_\_\_\_\_

2. \_\_\_\_\_

3. \_\_\_\_\_

4. \_\_\_\_\_

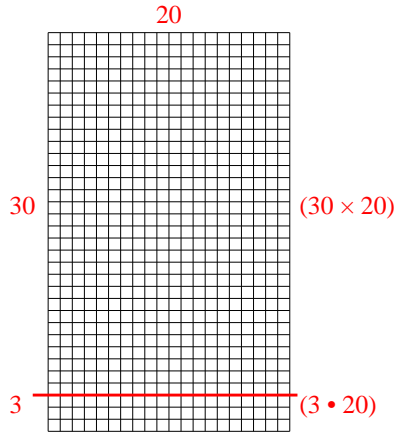
5. \_\_\_\_\_

6. \_\_\_\_\_

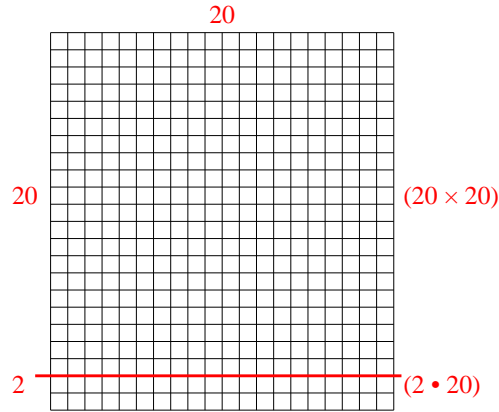


Benutze die vorgegebenen Anordnungen um jede Aufgabe zu lösen.

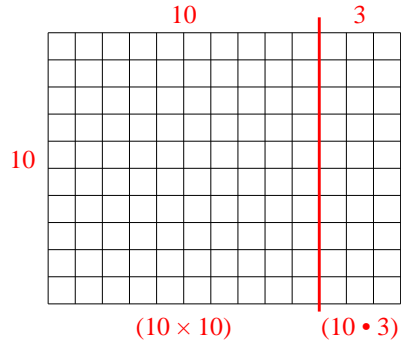
1)  $33 \cdot 20 =$



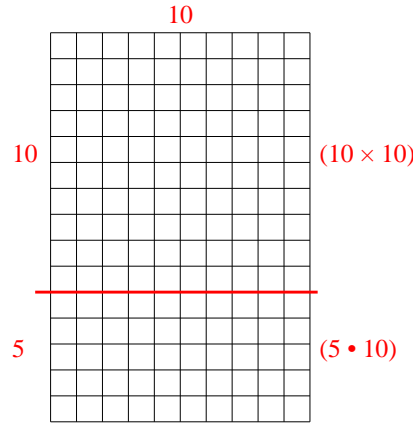
2)  $22 \cdot 20 =$



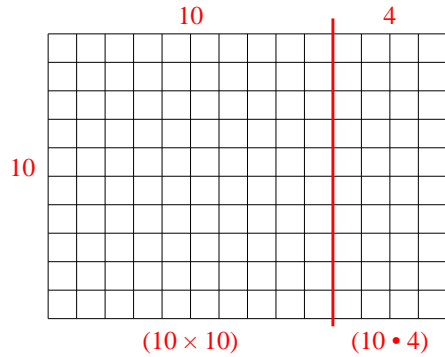
3)  $10 \cdot 13 =$



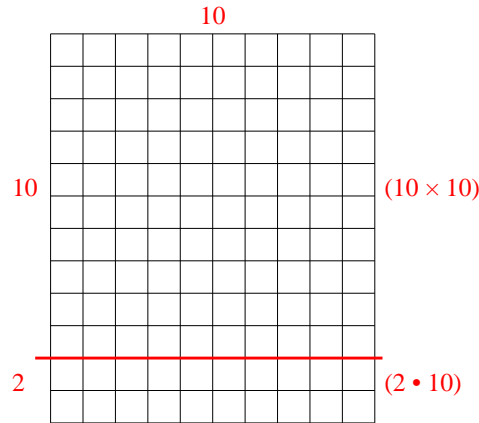
4)  $15 \cdot 10 =$



5)  $10 \cdot 14 =$



6)  $12 \cdot 10 =$



**Antworten**

1. 660

2. 440

3. 130

4. 150

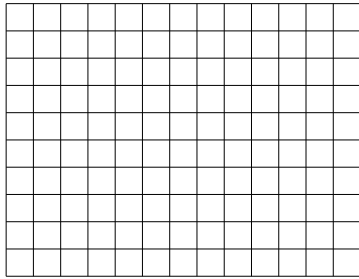
5. 140

6. 120




Benutze die vorgegebenen Anordnungen um jede Aufgabe zu lösen.

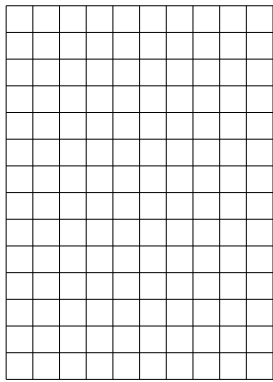
1)  $10 \cdot 13 =$




2)  $18 \cdot 10 =$




3)  $14 \cdot 10 =$




4)  $16 \cdot 10 =$



5)  $10 \cdot 15 =$



6)  $10 \cdot 14 =$



**Antworten**

1. \_\_\_\_\_

2. \_\_\_\_\_

3. \_\_\_\_\_

4. \_\_\_\_\_

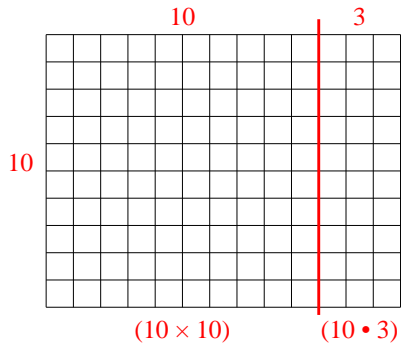
5. \_\_\_\_\_

6. \_\_\_\_\_

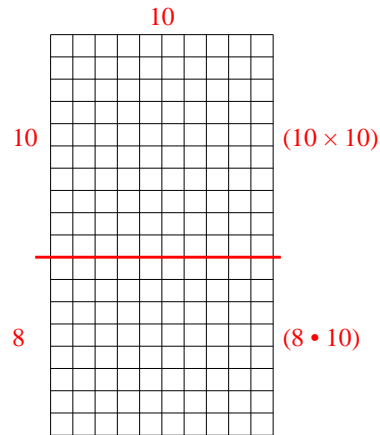


Benutze die vorgegebenen Anordnungen um jede Aufgabe zu lösen.

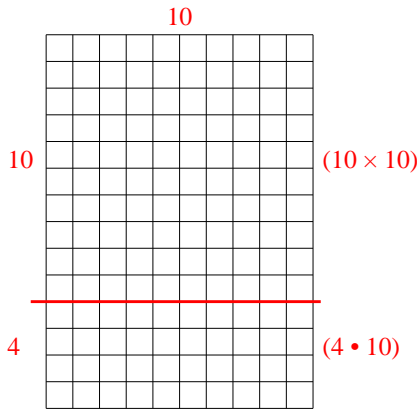
1)  $10 \cdot 13 =$



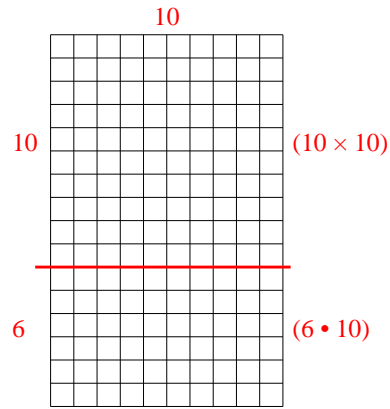
2)  $18 \cdot 10 =$



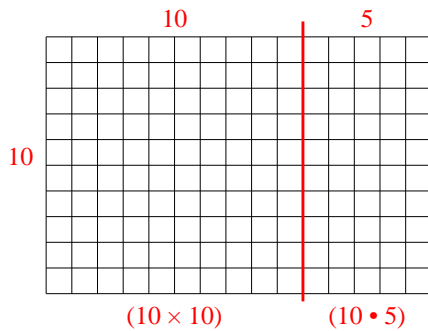
3)  $14 \cdot 10 =$



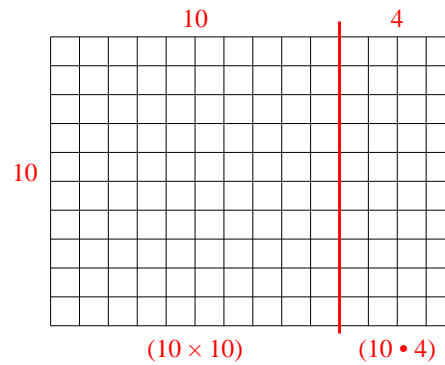
4)  $16 \cdot 10 =$



5)  $10 \cdot 15 =$



6)  $10 \cdot 14 =$


Antworten1. 1302. 1803. 1404. 1605. 1506. 140



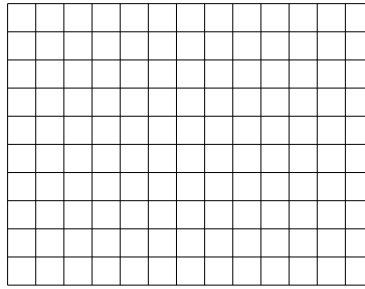
Benutze die vorgegebenen Anordnungen um jede Aufgabe zu lösen.

**Antworten**

1)  $20 \cdot 22 =$



2)  $10 \cdot 13 =$



1. \_\_\_\_\_

2. \_\_\_\_\_


3. \_\_\_\_\_

4. \_\_\_\_\_


5. \_\_\_\_\_

6. \_\_\_\_\_


3)  $15 \cdot 10 =$




4)  $16 \cdot 10 =$



5)  $12 \cdot 10 =$



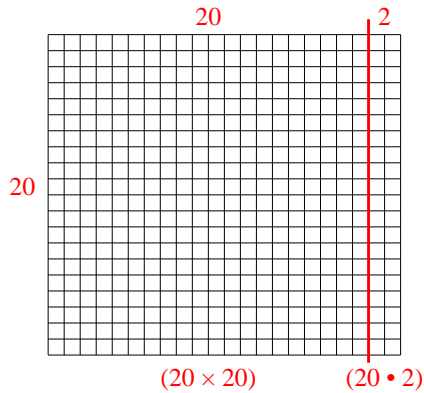
6)  $10 \cdot 11 =$



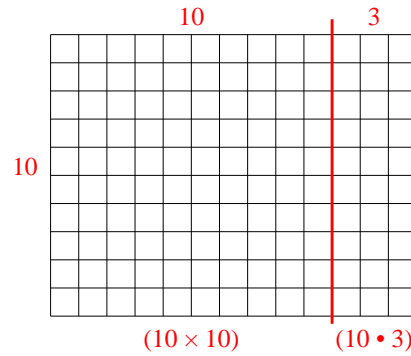


Benutze die vorgegebenen Anordnungen um jede Aufgabe zu lösen.

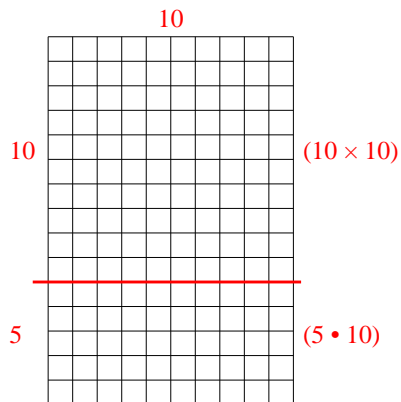
1)  $20 \cdot 22 =$



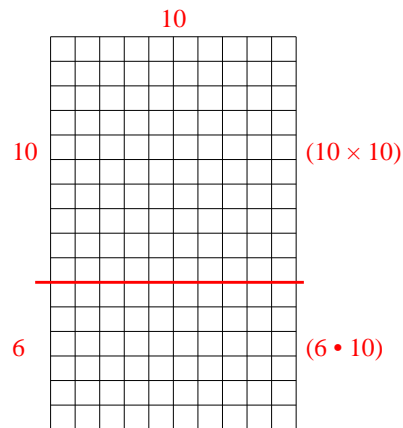
2)  $10 \cdot 13 =$



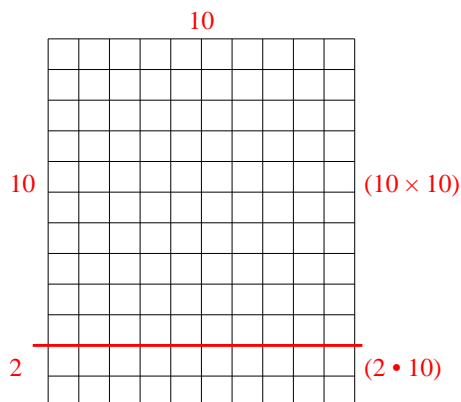
3)  $15 \cdot 10 =$



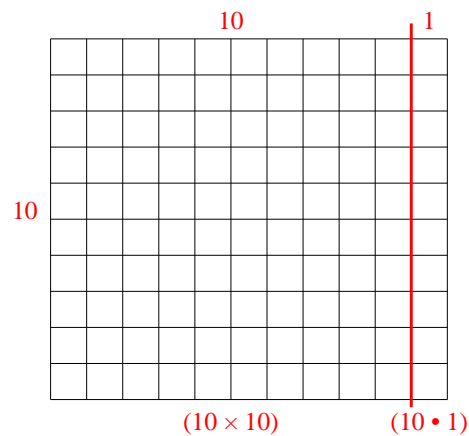
4)  $16 \cdot 10 =$



5)  $12 \cdot 10 =$



6)  $10 \cdot 11 =$



**Antworten**

1. **440**

2. **130**

3. **150**

4. **160**


5. **120**

6. **110**




Benutze die vorgegebenen Anordnungen um jede Aufgabe zu lösen.


1)  $22 \cdot 10 =$




2)  $20 \cdot 27 =$




3)  $10 \cdot 12 =$




4)  $10 \cdot 19 =$



5)  $13 \cdot 10 =$



6)  $18 \cdot 10 =$



**Antworten**

1. \_\_\_\_\_

2. \_\_\_\_\_

3. \_\_\_\_\_

4. \_\_\_\_\_

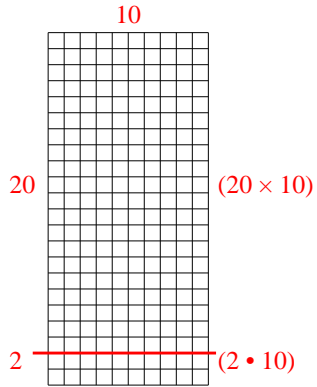
5. \_\_\_\_\_

6. \_\_\_\_\_

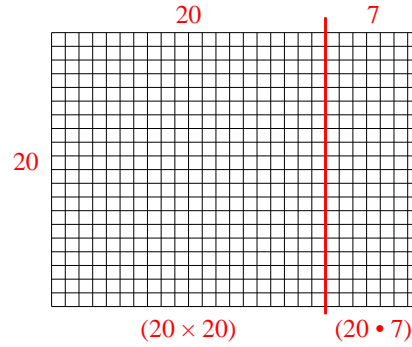


Benutze die vorgegebenen Anordnungen um jede Aufgabe zu lösen.

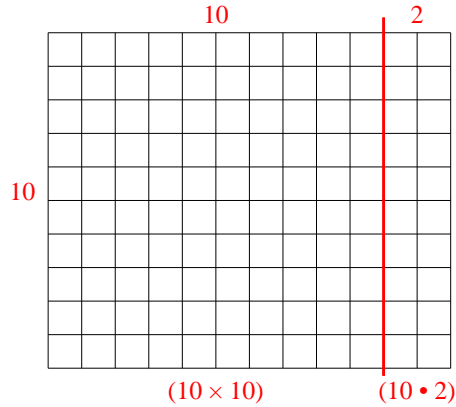
1)  $22 \cdot 10 =$



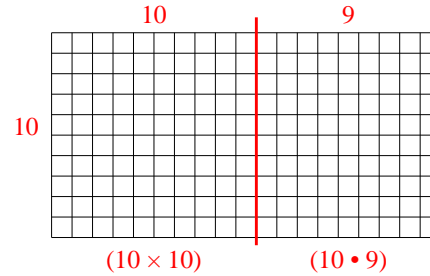
2)  $20 \cdot 27 =$



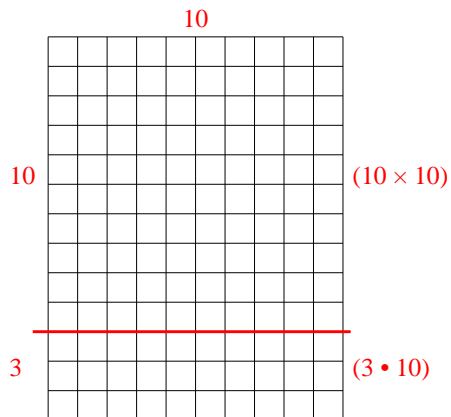
3)  $10 \cdot 12 =$



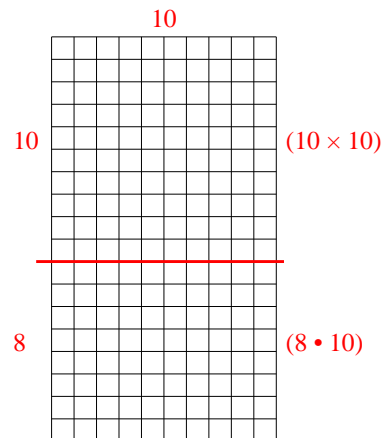
4)  $10 \cdot 19 =$



5)  $13 \cdot 10 =$



6)  $18 \cdot 10 =$



**Antworten**

1. **220**

2. **540**

3. **120**

4. **190**

5. **130**


6. **180**






Benutze die vorgegebenen Anordnungen um jede Aufgabe zu lösen.


1)  $13 \cdot 10 =$




2)  $10 \cdot 18 =$




3)  $10 \cdot 11 =$




4)  $16 \cdot 10 =$



5)  $10 \cdot 12 =$



6)  $15 \cdot 10 =$



**Antworten**

1. \_\_\_\_\_

2. \_\_\_\_\_

3. \_\_\_\_\_

4. \_\_\_\_\_

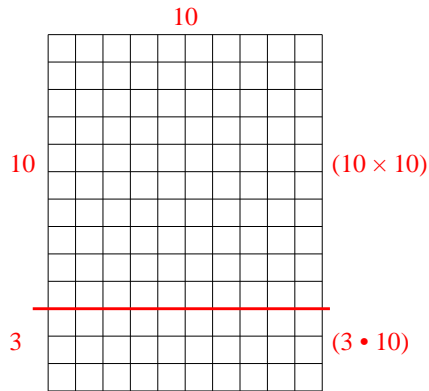
5. \_\_\_\_\_

6. \_\_\_\_\_

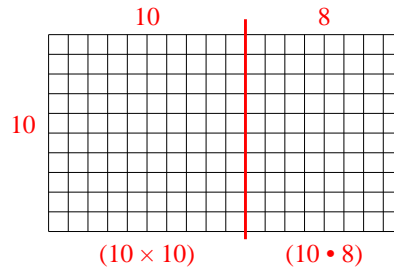


Benutze die vorgegebenen Anordnungen um jede Aufgabe zu lösen.

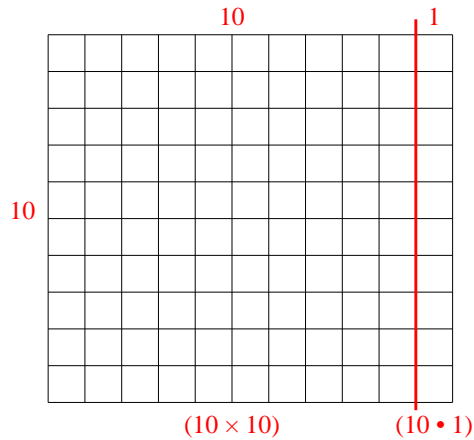
1)  $13 \cdot 10 =$



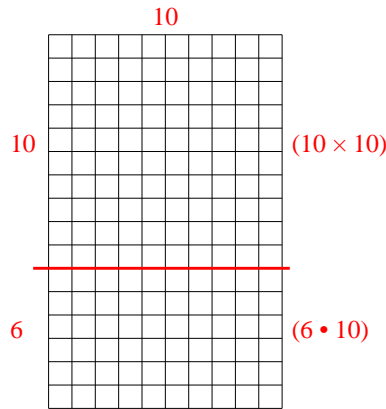
2)  $10 \cdot 18 =$



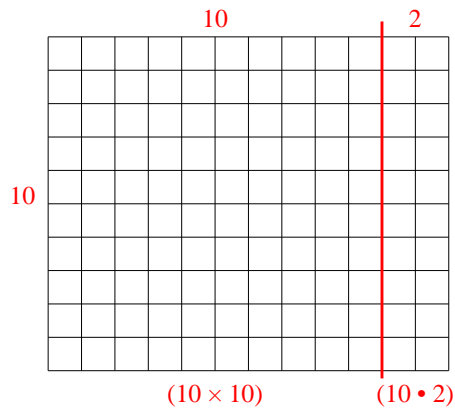
3)  $10 \cdot 11 =$



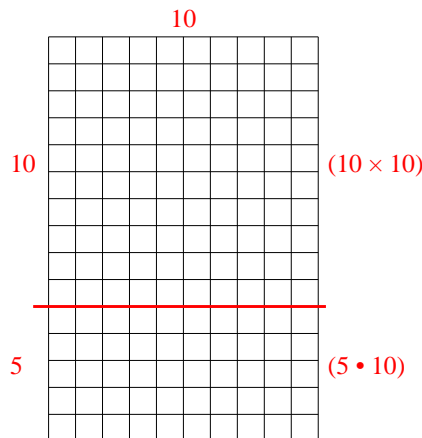
4)  $16 \cdot 10 =$



5)  $10 \cdot 12 =$



6)  $15 \cdot 10 =$



**Antworten**

1. **130**

2. **180**

3. **110**

4. **160**

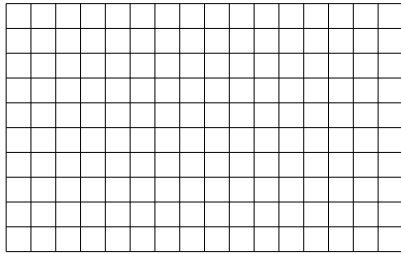
5. **120**

6. **150**




Benutze die vorgegebenen Anordnungen um jede Aufgabe zu lösen.


1)  $10 \cdot 16 =$




2)  $11 \cdot 10 =$




3)  $10 \cdot 12 =$




4)  $10 \cdot 18 =$



5)  $10 \cdot 19 =$



6)  $10 \cdot 13 =$



**Antworten**

1. \_\_\_\_\_

2. \_\_\_\_\_

3. \_\_\_\_\_

4. \_\_\_\_\_

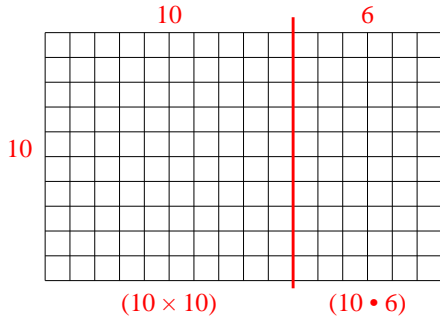
5. \_\_\_\_\_

6. \_\_\_\_\_

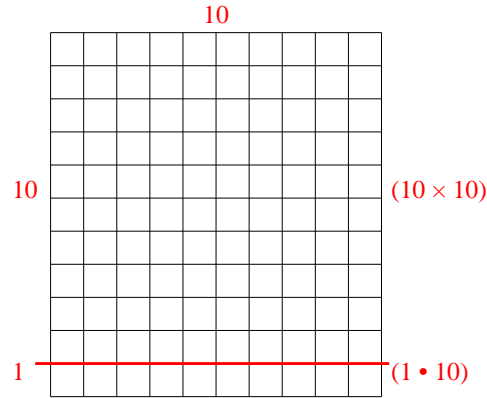


Benutze die vorgegebenen Anordnungen um jede Aufgabe zu lösen.

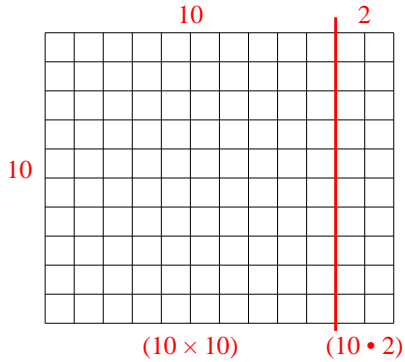
1)  $10 \cdot 16 =$



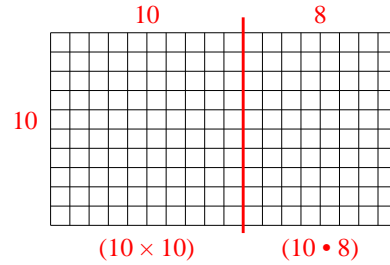
2)  $11 \cdot 10 =$



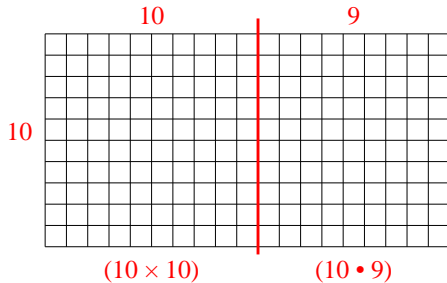
3)  $10 \cdot 12 =$



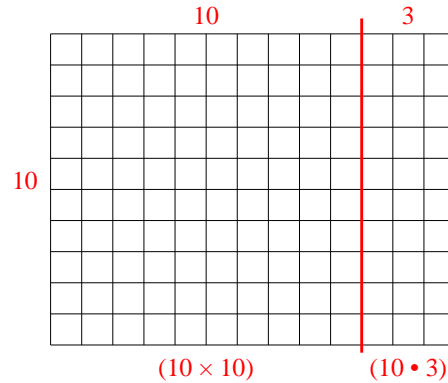
4)  $10 \cdot 18 =$



5)  $10 \cdot 19 =$



6)  $10 \cdot 13 =$



**Antworten**

1. **160**

2. **110**

3. **120**

4. **180**

5. **190**

6. **130**