




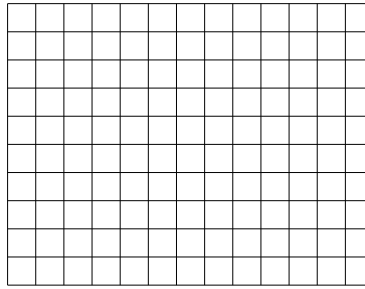
Benutze die vorgegebenen Anordnungen um jede Aufgabe zu lösen.

**Antworten**

1)  $20 \cdot 22 =$



2)  $10 \cdot 13 =$



1. \_\_\_\_\_

2. \_\_\_\_\_


3. \_\_\_\_\_

4. \_\_\_\_\_


5. \_\_\_\_\_

6. \_\_\_\_\_


3)  $15 \cdot 10 =$




4)  $16 \cdot 10 =$



5)  $12 \cdot 10 =$



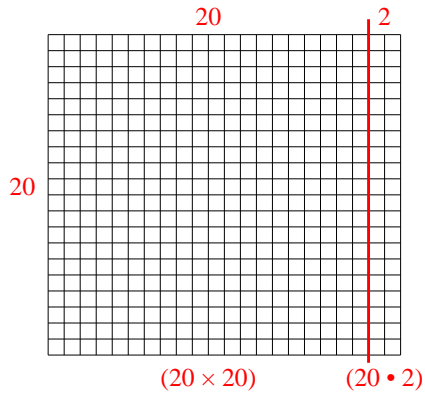
6)  $10 \cdot 11 =$



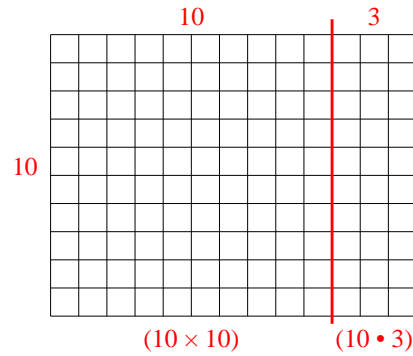


Benutze die vorgegebenen Anordnungen um jede Aufgabe zu lösen.

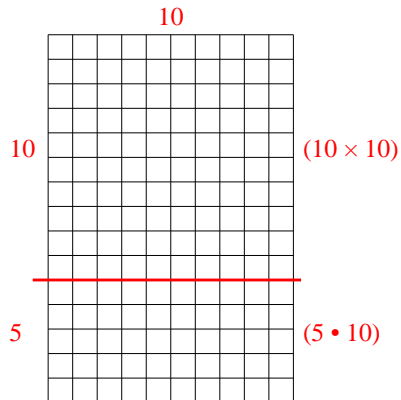
1)  $20 \cdot 22 =$



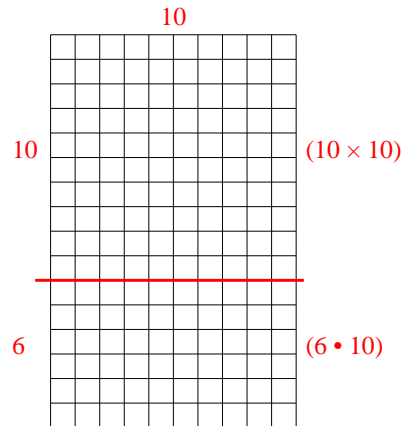
2)  $10 \cdot 13 =$



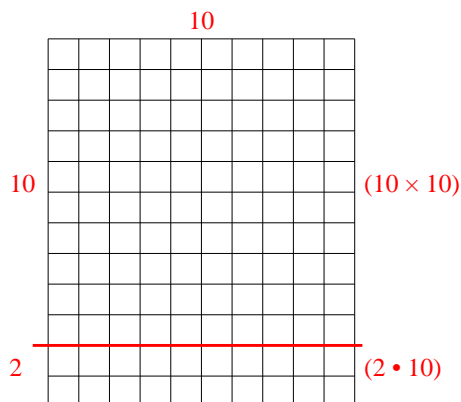
3)  $15 \cdot 10 =$



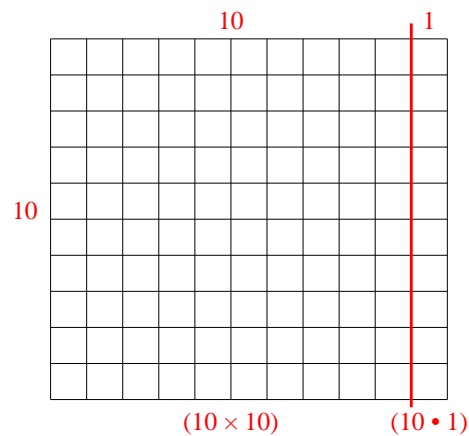
4)  $16 \cdot 10 =$



5)  $12 \cdot 10 =$



6)  $10 \cdot 11 =$

**Antworten**1. **440**2. **130**3. **150**4. **160**5. **120**6. **110**