





Benutze die vorgegebenen Anordnungen um jede Aufgabe zu lösen.


1) $33 \cdot 20 =$




2) $22 \cdot 20 =$




3) $10 \cdot 13 =$




4) $15 \cdot 10 =$



5) $10 \cdot 14 =$



6) $12 \cdot 10 =$



Antworten

1. _____

2. _____

3. _____

4. _____

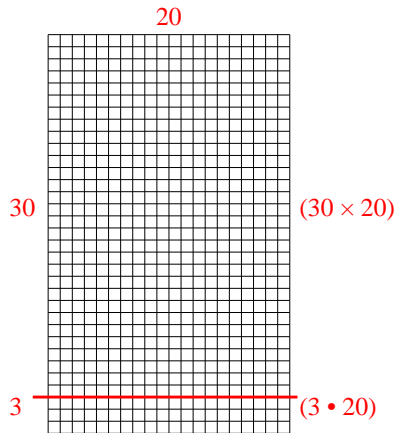
5. _____

6. _____

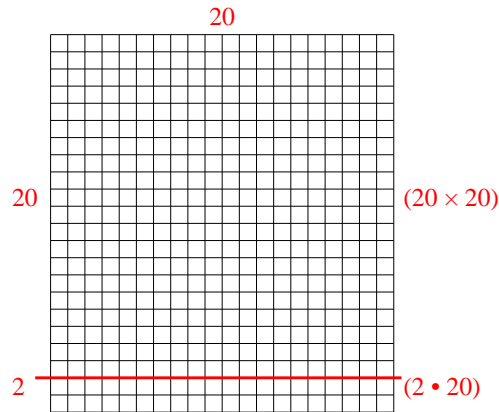


Benutze die vorgegebenen Anordnungen um jede Aufgabe zu lösen.

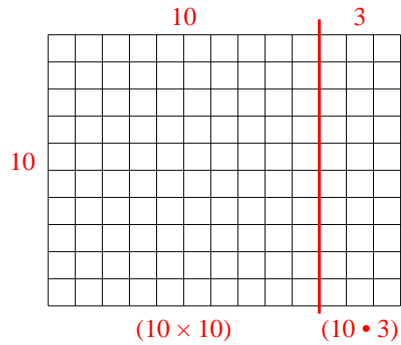
1) $33 \cdot 20 =$



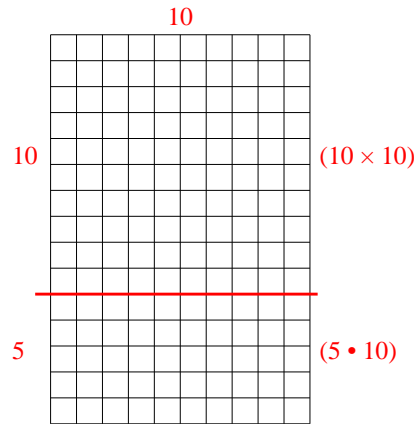
2) $22 \cdot 20 =$



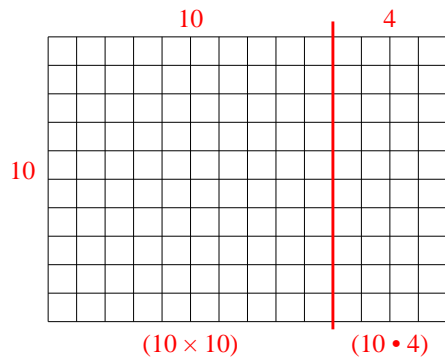
3) $10 \cdot 13 =$



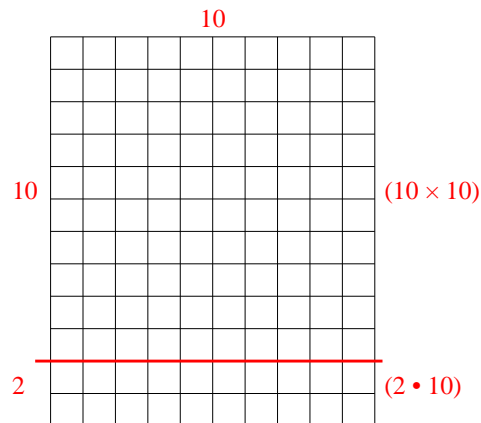
4) $15 \cdot 10 =$



5) $10 \cdot 14 =$



6) $12 \cdot 10 =$



Antworten

1. 660

2. 440

3. 130

4. 150

5. 140

6. 120