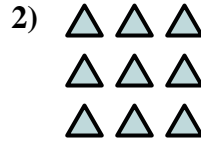





Schreibe eine Gleichung, die der Anordnung entspricht und finde die richtige Anzahl der Formen.

Antworten



Bsp. $2 \cdot 2 = 4$

1. _____

2. _____

3. _____

4. _____

5. _____

6. _____

7. _____

8. _____

9. _____

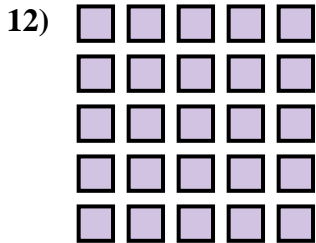
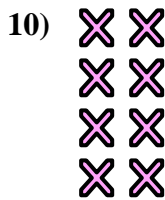

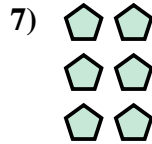

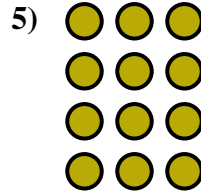

10. _____

11. _____

12. _____

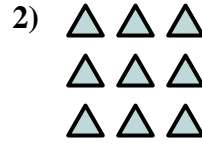

13. _____

14. _____





Schreibe eine Gleichung, die der Anordnung entspricht und finde die richtige Anzahl der Formen.



Bsp. $2 \cdot 2 = 4$

1. $5 \cdot 2 = 10$

2. $3 \cdot 3 = 9$

3. $2 \cdot 3 = 6$

4. $3 \cdot 4 = 12$

5. $4 \cdot 3 = 12$

6. $5 \cdot 4 = 20$

7. $3 \cdot 2 = 6$

8. $5 \cdot 3 = 15$

9. $2 \cdot 5 = 10$

10. $4 \cdot 2 = 8$

11. $3 \cdot 5 = 15$

12. $5 \cdot 5 = 25$

13. $2 \cdot 4 = 8$

14. $4 \cdot 4 = 16$

