



Stelle fest, welcher Buchstaben am besten die Länge / Höhe darstellt.

Antworten

Milímetro (mm)

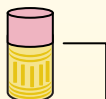
Un milímetro equivale al grosor de una tarjeta de crédito.



Centímetro (cm)

10 mm = 1 cm.

La parte metálica de un lápiz mide aproximadamente 1 cm. Una regla mide unos 30 centímetros.



Metro (m)

100 cm = 1 m

Desde el suelo hasta la perilla de una puerta hay aproximadamente 1 metro.



Kilómetro (km)


1,000 m = 1 km

La mayoría de las carreteras principales tienen al menos un kilómetro de largo.



1. _____
2. _____
3. _____
4. _____
5. _____
6. _____
7. _____
8. _____
9. _____

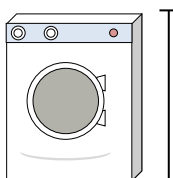
1)



Dose Soda

- A. 30 zentimeters
- B. 3 zentimeters
- C. 1 meter
- D. 10 zentimeters


2)



Waschmaschine

- A. 1 meter
- B. 30 zentimeters
- C. 2 meters
- D. 10 zentimeters

3)



Lutscher

- A. 30 millimeters
- B. 30 zentimeters
- C. 2 kilometers
- D. 10 zentimeters

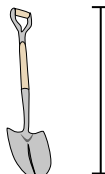
4)



Fahrrad

- A. 25 zentimeters
- B. 10 zentimeters
- C. 1 meter
- D. 3 meters


5)



Schaufel

- A. 30 zentimeters
- B. 60 zentimeters
- C. 1 meter
- D. 3 meters

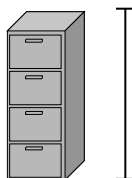
6)



Bowlingkugelhöhe

- A. 25 zentimeters
- B. 305 zentimeters
- C. 1 meter
- D. 10 zentimeters

7)



Aktenschrank

- A. 30 zentimeters
- B. 1.5 millimeters
- C. 30 millimeters
- D. 60 zentimeters

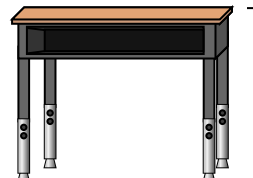
8)



Bleistift

- A. 30 millimeters
- B. 20 zentimeters
- C. 150 zentimeters
- D. 1 meter

9)



Schreibtisch

- A. 2 meters
- B. 15 zentimeters
- C. 30 zentimeters
- D. 70 zentimeters



Stelle fest, welcher Buchstaben am besten die Länge / Höhe darstellt.

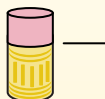
Antworten**Milímetro (mm)**

Un milímetro equivale al grosor de una tarjeta de crédito.

**Centímetro (cm)**

10 mm = 1 cm.

La parte metálica de un lápiz mide aproximadamente 1 cm. Una regla mide unos 30 centímetros.

**Metro (m)**

100 cm = 1 m

Desde el suelo hasta la perilla de una puerta hay aproximadamente 1 metro.


**Kilómetro (km)**

1,000 m = 1 km

La mayoría de las carreteras principales tienen al menos un kilómetro de largo.



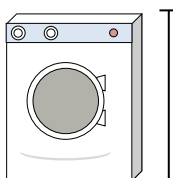
1)



Dose Soda

- A. 30 zentimeters
- B. 3 zentimeters
- C. 1 meter
- D. 10 zentimeters


2)



Waschmaschine

- A. 1 meter
- B. 30 zentimeters
- C. 2 meters
- D. 10 zentimeters

3)



Lutscher

- A. 30 millimeters
- B. 30 zentimeters
- C. 2 kilometers
- D. 10 zentimeters

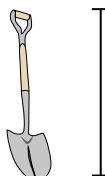
4)



Fahrrad

- A. 25 zentimeters
- B. 10 zentimeters
- C. 1 meter
- D. 3 meters


5)



Schaufel

- A. 30 zentimeters
- B. 60 zentimeters
- C. 1 meter
- D. 3 meters

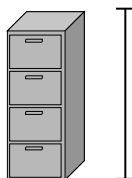
6)



Bowlingkugelhöhe

- A. 25 zentimeters
- B. 305 zentimeters
- C. 1 meter
- D. 10 zentimeters

7)



Aktenschrank

- A. 30 zentimeters
- B. 1.5 millimeters
- C. 30 millimeters
- D. 60 zentimeters

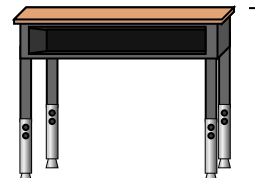
8)



Bleistift

- A. 30 millimeters
- B. 20 zentimeters
- C. 150 zentimeters
- D. 1 meter

9)



Schreibtisch

- A. 2 meters
- B. 15 zentimeters
- C. 30 zentimeters
- D. 70 zentimeters

1. **D**2. **A**3. **D**4. **C**5. **C**6. **A**7. **B**8. **B**9. **D**