



Stelle fest, welcher Buchstaben am besten die Länge / Höhe darstellt.

Antworten

Milímetro (mm)

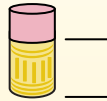
Un milímetro equivale al grosor de una tarjeta de crédito.



Centímetro (cm)

10 mm = 1 cm.

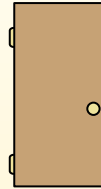
La parte metálica de un lápiz mide aproximadamente 1 cm. Una regla mide unos 30 centímetros.



Metro (m)

100 cm = 1 m

Desde el suelo hasta la perilla de una puerta hay aproximadamente 1 metro.



Kilómetro (km)

1,000 m = 1 km

La mayoría de las carreteras principales tienen al menos un kilómetro de largo.




1. _____
2. _____
3. _____
4. _____
5. _____
6. _____
7. _____
8. _____
9. _____

1)

DVD

- A. 10 zentimeters
- B. 1 meter
- C. 30 millimeters
- D. 30 zentimeters


2)



Berg

- A. 700 millimeters
- B. 3 kilometers
- C. 60 zentimeters
- D. 9 meters

3)



Brotscheibe

- A. 120 zentimeters
- B. 2 meters
- C. 10 zentimeters
- D. 25 zentimeters

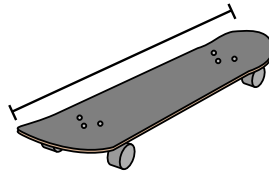
4)



Fahrrad

- A. 3 meters
- B. 25 zentimeters
- C. 10 zentimeters
- D. 1 meter

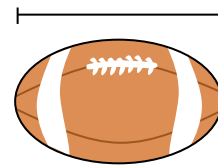
5)



Skateboard

- A. 80 zentimeters
- B. 2 meters
- C. 30 zentimeters
- D. 3 zentimeters

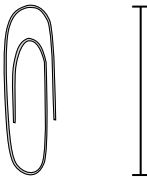
6)



Fußball

- A. 1 meter
- B. 25 zentimeters
- C. 3 zentimeters
- D. 60 zentimeters

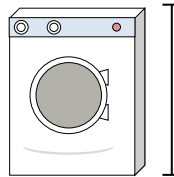
7)



Büroklammer

- A. 3 zentimeters
- B. 60 zentimeters
- C. 10 zentimeters
- D. 30 zentimeters

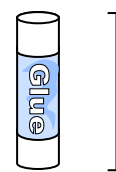
8)



Waschmaschine

- A. 30 zentimeters
- B. 1 meter
- C. 2 meters
- D. 10 zentimeters

9)



Klebestift

- A. 10 zentimeters
- B. 30 zentimeters
- C. 25 zentimeters
- D. 6 kilometers



Stelle fest, welcher Buchstaben am besten die Länge / Höhe darstellt.

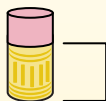
Antworten**Milímetro (mm)**

Un milímetro equivale al grosor de una tarjeta de crédito.

**Centímetro (cm)**

10 mm = 1 cm.

La parte metálica de un lápiz mide aproximadamente 1 cm. Una regla mide unos 30 centímetros.

**Metro (m)**

100 cm = 1 m

Desde el suelo hasta la perilla de una puerta hay aproximadamente 1 metro.

**Kilómetro (km)**

1,000 m = 1 km

La mayoría de las carreteras principales tienen al menos un kilómetro de largo.




1)

DVD

- A. 10 zentimeters
- B. 1 meter
- C. 30 millimeters
- D. 30 zentimeters


2)



Berg

- A. 700 millimeters
- B. 3 kilometers
- C. 60 zentimeters
- D. 9 meters

3)



Brotzscheibe

- A. 120 zentimeters
- B. 2 meters
- C. 10 zentimeters
- D. 25 zentimeters

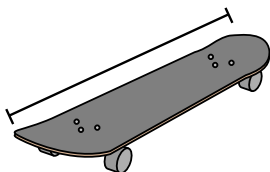
4)



Fahrrad

- A. 3 meters
- B. 25 zentimeters
- C. 10 zentimeters
- D. 1 meter

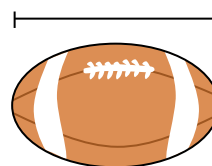
5)



Skateboard

- A. 80 zentimeters
- B. 2 meters
- C. 30 zentimeters
- D. 3 zentimeters

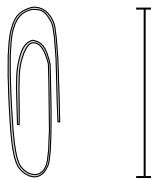
6)



Fußball

- A. 1 meter
- B. 25 zentimeters
- C. 3 zentimeters
- D. 60 zentimeters

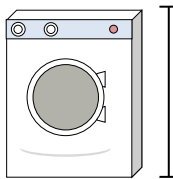
7)



Büroklammer

- A. 3 zentimeters
- B. 60 zentimeters
- C. 10 zentimeters
- D. 30 zentimeters

8)



Waschmaschine

- A. 30 zentimeters
- B. 1 meter
- C. 2 meters
- D. 10 zentimeters

9)



Klebestift

- A. 10 zentimeters
- B. 30 zentimeters
- C. 25 zentimeters
- D. 6 kilometers

1. **A**2. **B**3. **C**4. **D**5. **A**6. **B**7. **A**8. **B**9. **A**