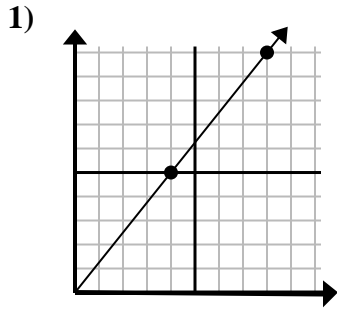
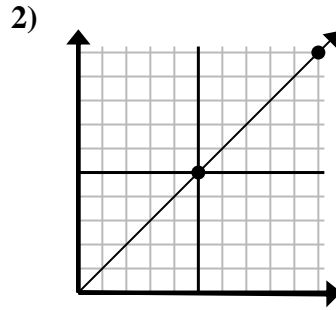




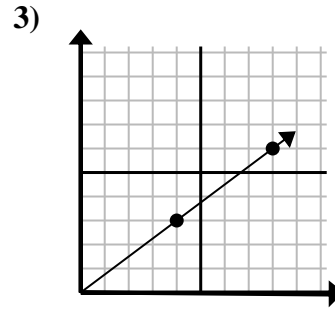
Bestimmen Sie, welche Auswahl einen Punkt auf der Linie darstellt, wenn diese fortgesetzt werden soll.

Antworten

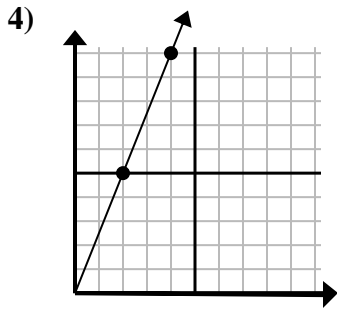
- A. (20 . 25)
 B. (12 . 15)
 C. (24 . 30)
 D. (11 . 10)



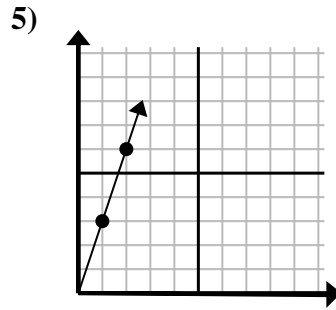
- A. (15 . 15)
 B. (12 . 10)
 C. (14 . 6)
 D. (25 . 25)



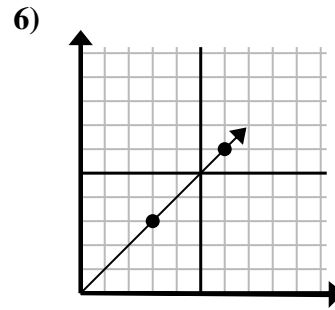
- A. (28 . 21)
 B. (12 . 9)
 C. (24 . 18)
 D. (16 . 12)



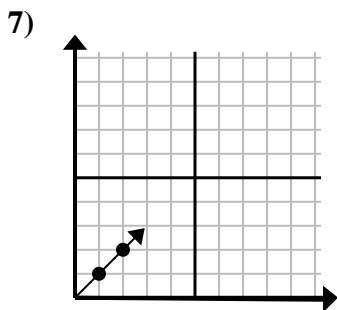
- A. (6 . 15)
 B. (5 . 9)
 C. (8 . 20)
 D. (12 . 30)



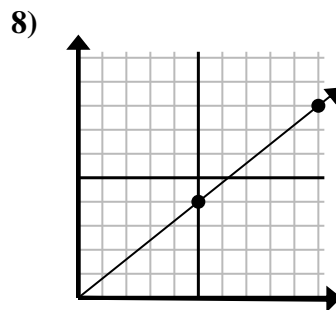
- A. (4 . 12)
 B. (3 . 9)
 C. (4 . 6)
 D. (7 . 6)



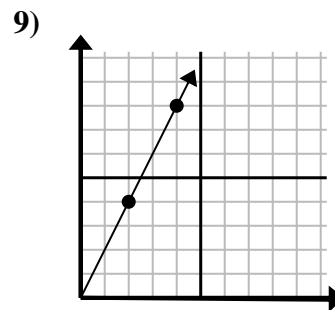
- A. (12 . 12)
 B. (9 . 9)
 C. (18 . 18)
 D. (9 . 5)



- A. (5 . 6)
 B. (3 . 3)
 C. (5 . 5)
 D. (7 . 3)



- A. (15 . 12)
 B. (35 . 28)
 C. (14 . 8)
 D. (14 . 5)

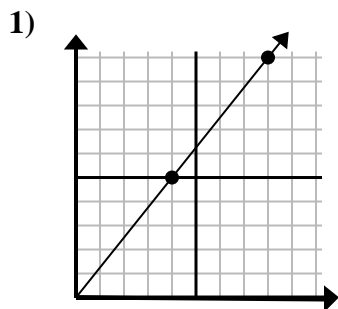


- A. (6 . 12)
 B. (7 . 9)
 C. (10 . 20)
 D. (8 . 16)

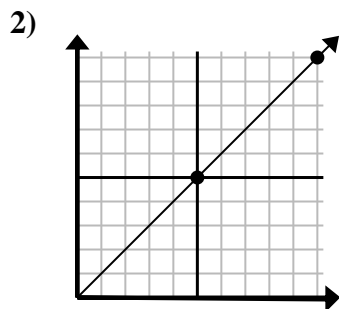
1. _____
 2. _____
 3. _____
 4. _____
 5. _____
 6. _____
 7. _____
 8. _____
 9. _____



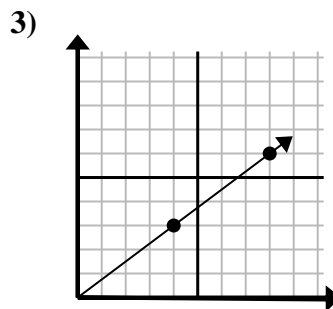
Bestimmen Sie, welche Auswahl einen Punkt auf der Linie darstellt, wenn diese fortgesetzt werden soll.

Antworten

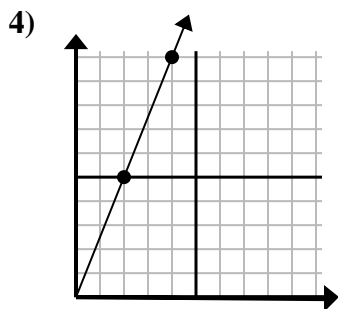
- A. (20 . 25)
 B. (12 . 15)
 C. (24 . 30)
 D. (11 . 10)



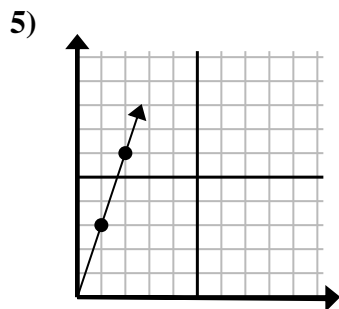
- A. (15 . 15)
 B. (12 . 10)
 C. (14 . 6)
 D. (25 . 25)



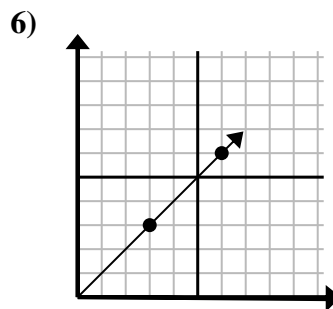
- A. (28 . 21)
 B. (12 . 9)
 C. (24 . 18)
 D. (16 . 12)



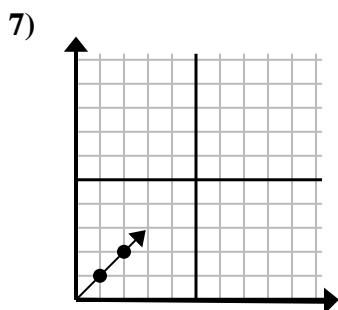
- A. (6 . 15)
 B. (5 . 9)
 C. (8 . 20)
 D. (12 . 30)



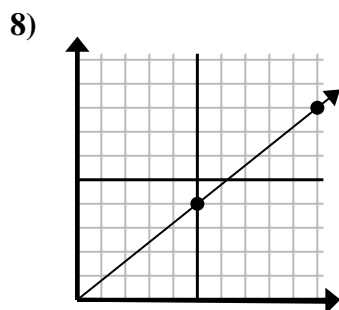
- A. (4 . 12)
 B. (3 . 9)
 C. (4 . 6)
 D. (7 . 6)



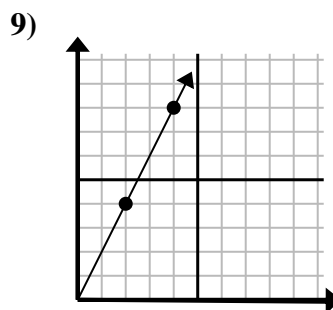
- A. (12 . 12)
 B. (9 . 9)
 C. (18 . 18)
 D. (9 . 5)



- A. (5 . 6)
 B. (3 . 3)
 C. (5 . 5)
 D. (7 . 3)



- A. (15 . 12)
 B. (35 . 28)
 C. (14 . 8)
 D. (14 . 5)



- A. (6 . 12)
 B. (7 . 9)
 C. (10 . 20)
 D. (8 . 16)

1. **B**
 2. **A**
 3. **B**
 4. **A**
 5. **B**
 6. **B**
 7. **B**
 8. **A**
 9. **A**