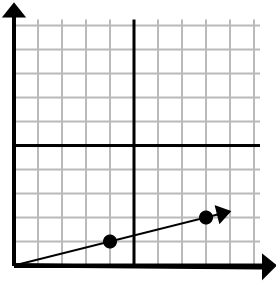




Bestimmen Sie, welche Auswahl einen Punkt auf der Linie darstellt, wenn diese fortgesetzt werden soll.

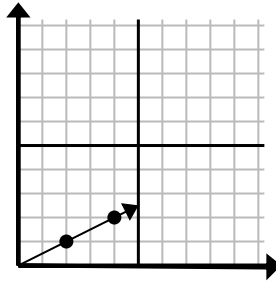
Antworten

1)



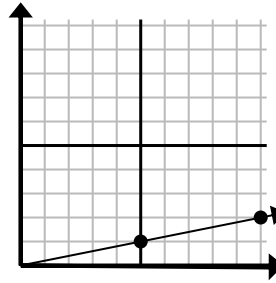
- A. (12 . 3)
 B. (28 . 7)
 C. (20 . 5)
 D. (10 . 2)

2)



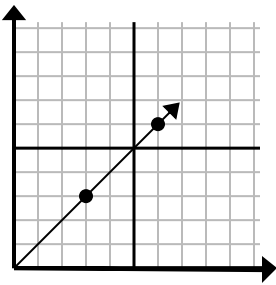
- A. (6 . 3)
 B. (10 . 5)
 C. (14 . 7)
 D. (7 . 3)

3)



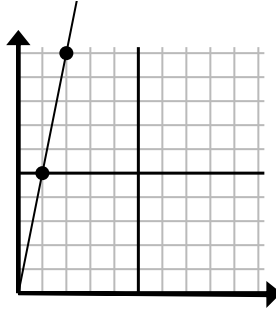
- A. (14 . 3)
 B. (13 . 5)
 C. (15 . 3)
 D. (35 . 7)

4)



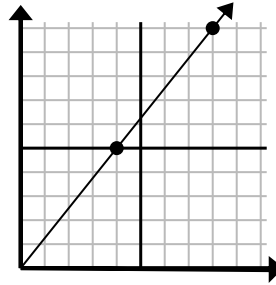
- A. (8 . 7)
 B. (15 . 15)
 C. (9 . 9)
 D. (21 . 21)

5)



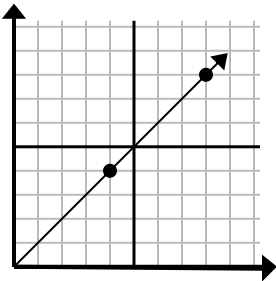
- A. (3 . 15)
 B. (3 . 7)
 C. (7 . 35)
 D. (5 . 25)

6)



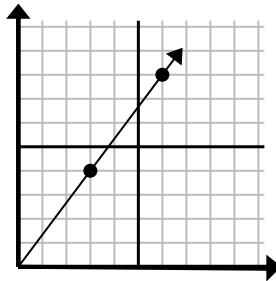
- A. (12 . 10)
 B. (24 . 30)
 C. (13 . 9)
 D. (12 . 15)

7)



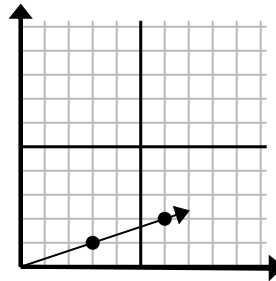
- A. (12 . 8)
 B. (12 . 12)
 C. (13 . 8)
 D. (20 . 20)

8)



- A. (21 . 28)
 B. (8 . 6)
 C. (9 . 12)
 D. (9 . 7)

9)

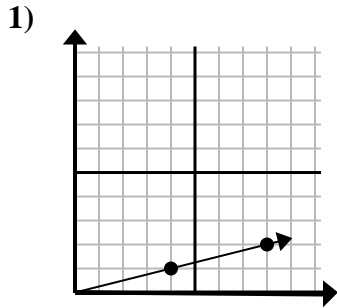


- A. (15 . 5)
 B. (9 . 3)
 C. (10 . 2)
 D. (12 . 4)

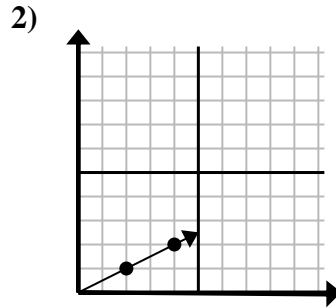
1. _____
 2. _____
 3. _____
 4. _____
 5. _____
 6. _____
 7. _____
 8. _____
 9. _____



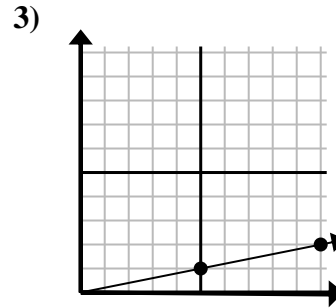
Bestimmen Sie, welche Auswahl einen Punkt auf der Linie darstellt, wenn diese fortgesetzt werden soll.

Antworten

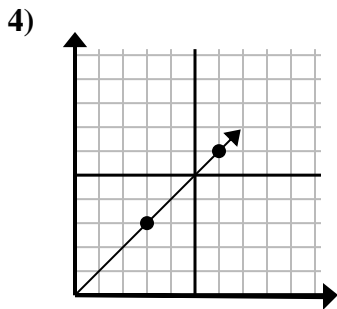
- A. (12 . 3)
 B. (28 . 7)
 C. (20 . 5)
 D. (10 . 2)



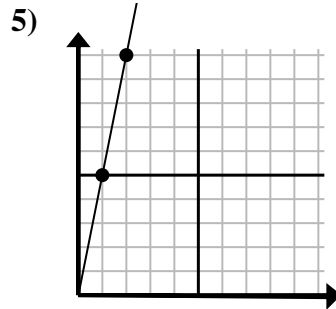
- A. (6 . 3)
 B. (10 . 5)
 C. (14 . 7)
 D. (7 . 3)



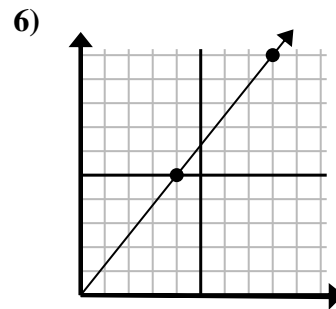
- A. (14 . 3)
 B. (13 . 5)
 C. (15 . 3)
 D. (35 . 7)



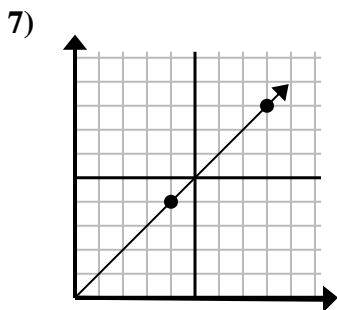
- A. (8 . 7)
 B. (15 . 15)
 C. (9 . 9)
 D. (21 . 21)



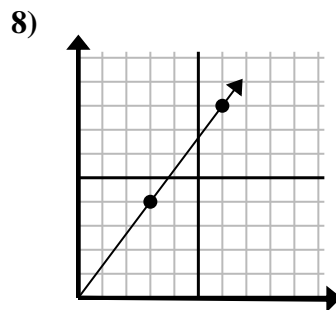
- A. (3 . 15)
 B. (3 . 7)
 C. (7 . 35)
 D. (5 . 25)



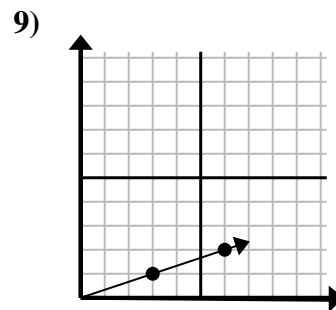
- A. (12 . 10)
 B. (24 . 30)
 C. (13 . 9)
 D. (12 . 15)



- A. (12 . 8)
 B. (12 . 12)
 C. (13 . 8)
 D. (20 . 20)



- A. (21 . 28)
 B. (8 . 6)
 C. (9 . 12)
 D. (9 . 7)



- A. (15 . 5)
 B. (9 . 3)
 C. (10 . 2)
 D. (12 . 4)

1. **A**
 2. **A**
 3. **C**
 4. **C**
 5. **A**
 6. **D**
 7. **B**
 8. **C**
 9. **B**