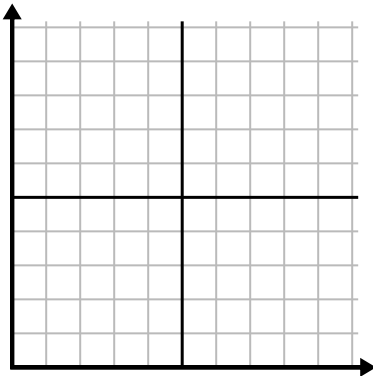




Füllen Sie das Raster mithilfe des Diagramms aus.

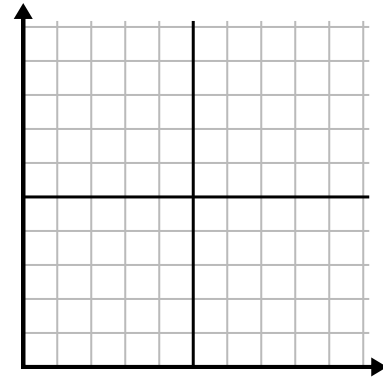
1)

Tag	1	2	3	4	5	6	7
Youtube-Videos angesehen	30	180	270	150	60	90	240



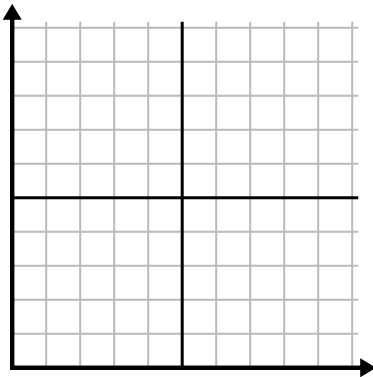
2)

Monat	1	2	3	4	5
Stromrechnungspreis	225	150	75	125	50



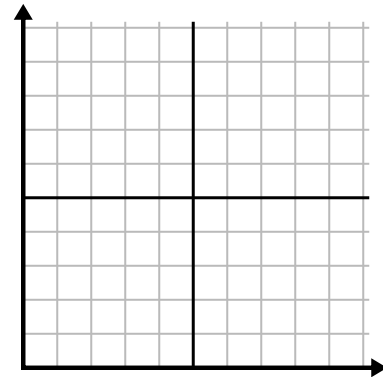
3)

Jahr	1	2	3	4	5
Verwendete Tintenpatronen	16	2	10	12	8



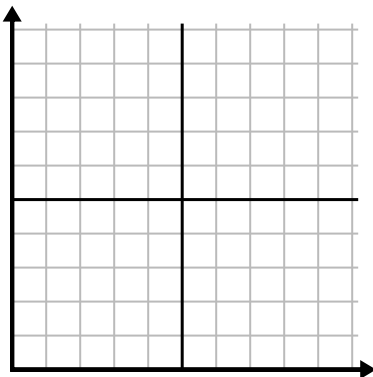
4)

Tag	1	2	3	4	5	6
Geld ausgegeben	2	7	9	8	5	1



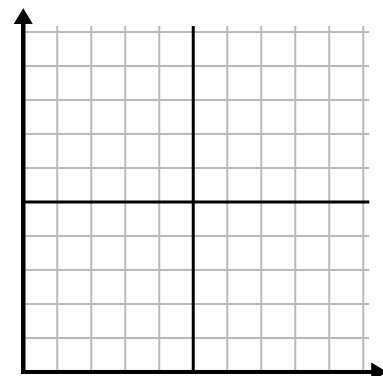
5)

Stunde	1	2	3	4	5	6	7
Verkaufte Menge	5	4	2	9	7	6	8



6)

Tag	1	2	3	4	5	6
Mahlzeiten verkauft	600	900	700	500	100	400

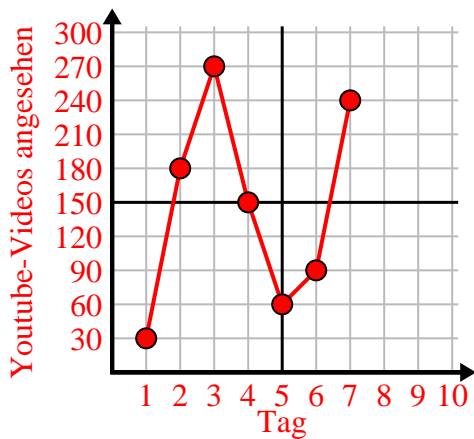




Füllen Sie das Raster mithilfe des Diagramms aus.

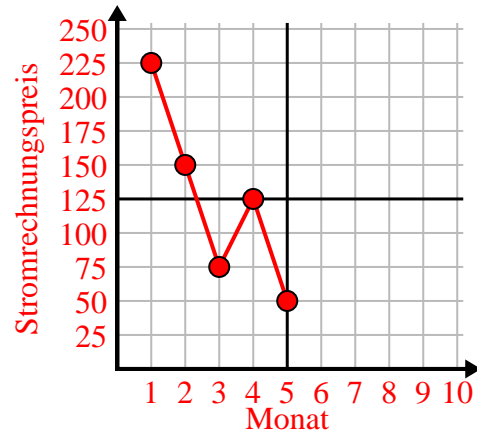
1)

Tag	1	2	3	4	5	6	7
Youtube-Videos angesehen	30	180	270	150	60	90	240



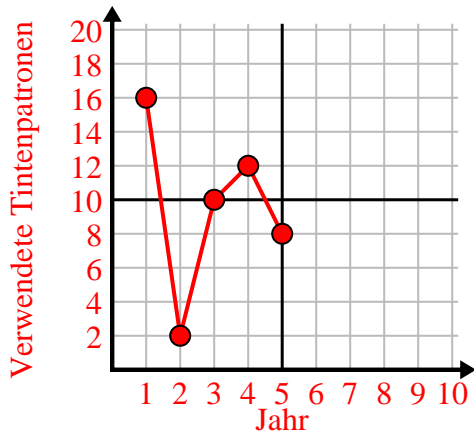
2)

Monat	1	2	3	4	5
Stromrechnungspreis	225	150	75	125	50



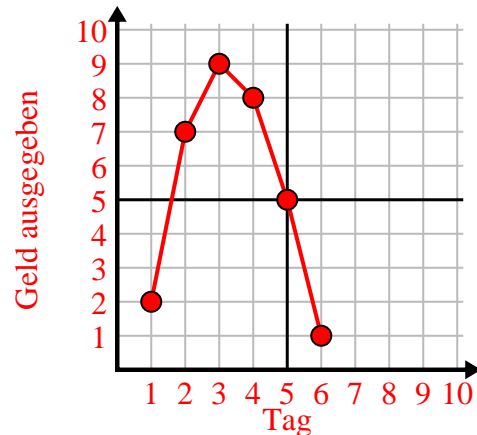
3)

Jahr	1	2	3	4	5
Verwendete Tintenpatronen	16	2	10	12	8



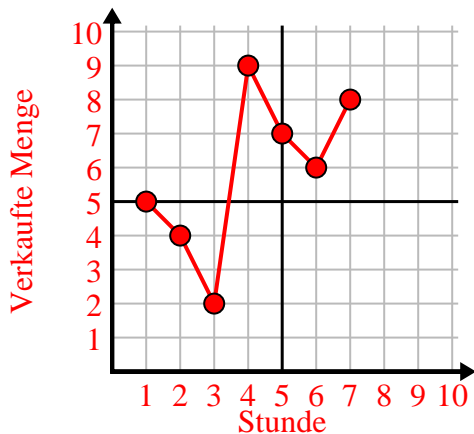
4)

Tag	1	2	3	4	5	6
Geld ausgegeben	2	7	9	8	5	1



5)

Stunde	1	2	3	4	5	6	7
Verkaufte Menge	5	4	2	9	7	6	8



6)

Tag	1	2	3	4	5	6
Mahlzeiten verkauft	600	900	700	500	100	400

