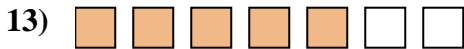
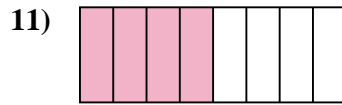
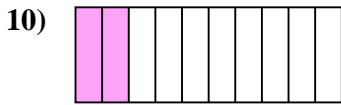
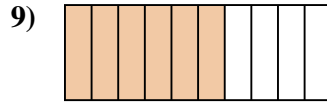
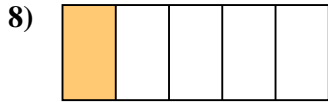
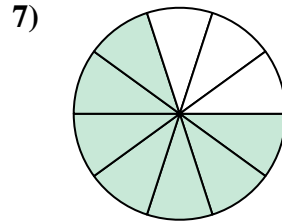
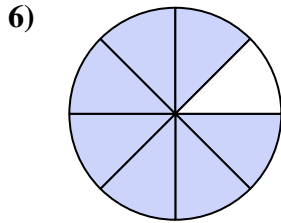
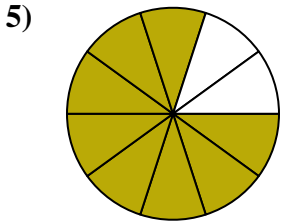


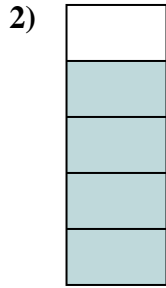




Stelle fest, ob die schraffierte Fläche 'mehr', 'weniger' oder 'gleich' zur Hälfte ist.

Antworten



1. _____

2. _____

3. _____

4. _____

5. _____

6. _____

7. _____

8. _____

9. _____

10. _____

11. _____

12. _____

13. _____

14. _____

15. _____

16. _____

17. _____

18. _____

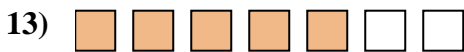

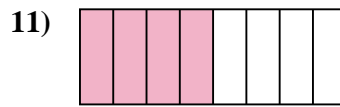
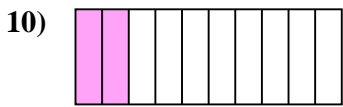
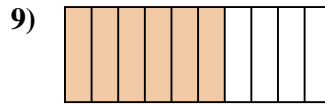
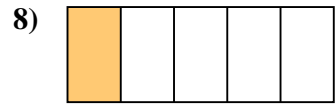
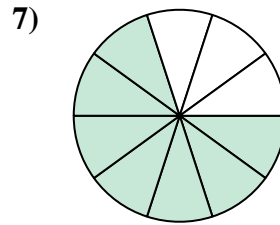
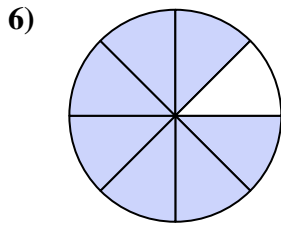
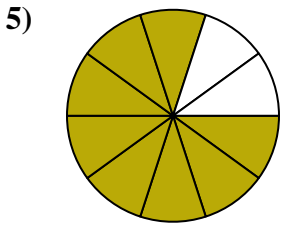


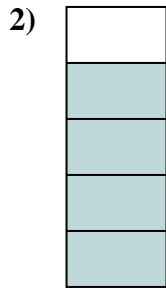
19. _____

20. _____



Stelle fest, ob die schraffierte Fläche 'mehr', 'weniger' oder 'gleich' zur Hälfte ist.

Antworten



1. weniger

2. mehr

3. weniger

4. weniger

5. mehr

6. mehr

7. mehr

8. weniger

9. mehr

10. weniger

11. gleich

12. mehr

13. mehr

14. gleich

15. gleich

16. weniger

17. weniger

18. mehr

19. weniger

20. weniger