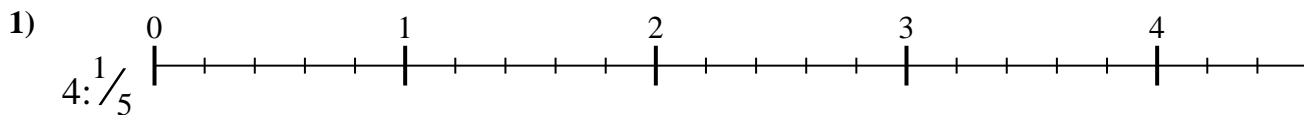




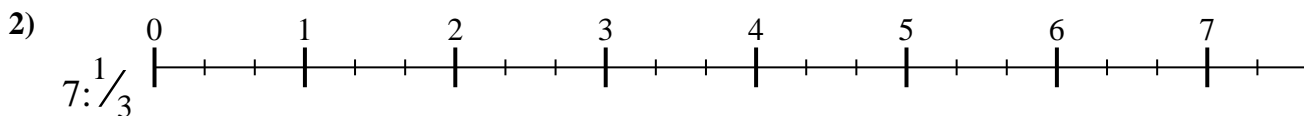
Benutze den Zahlenstrahl um jede Aufgabe zu lösen. Die erste Aufgabe ist bereits als Beispiel markiert.

Antworten



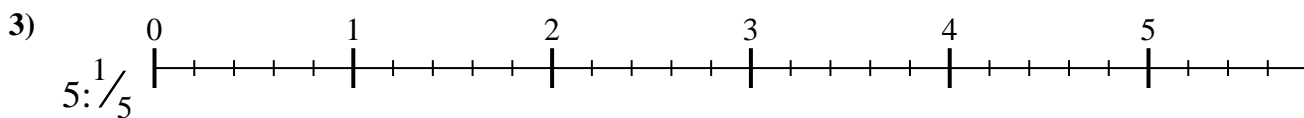
1. \_\_\_\_\_

2. \_\_\_\_\_



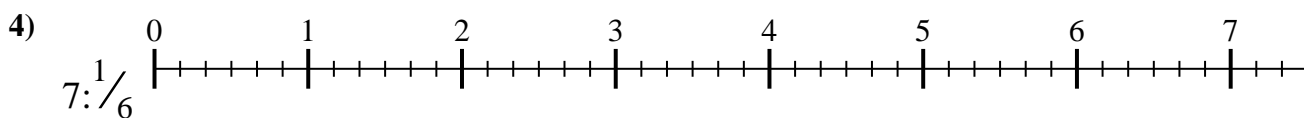
3. \_\_\_\_\_

4. \_\_\_\_\_



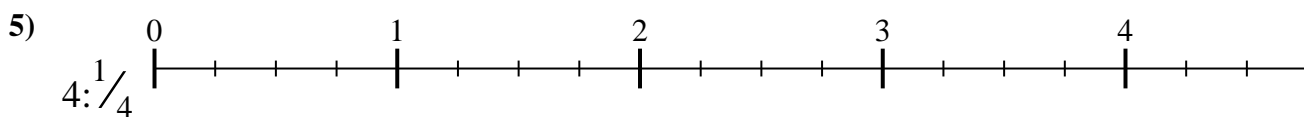
5. \_\_\_\_\_

6. \_\_\_\_\_

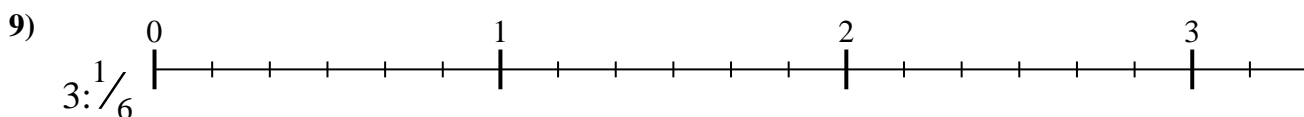
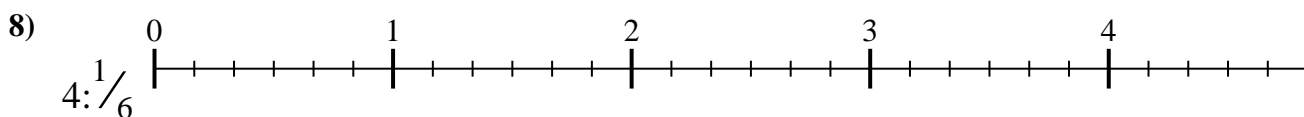
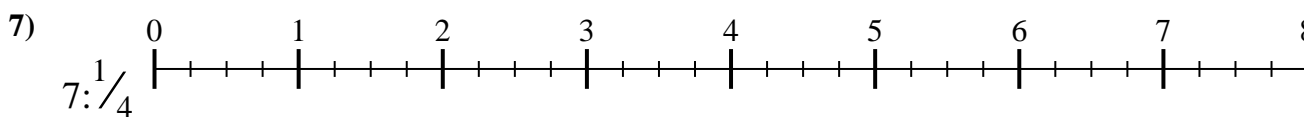
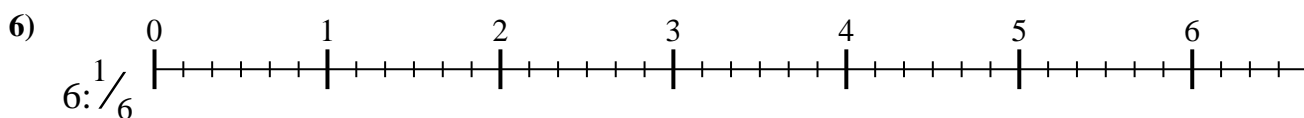


7. \_\_\_\_\_

8. \_\_\_\_\_



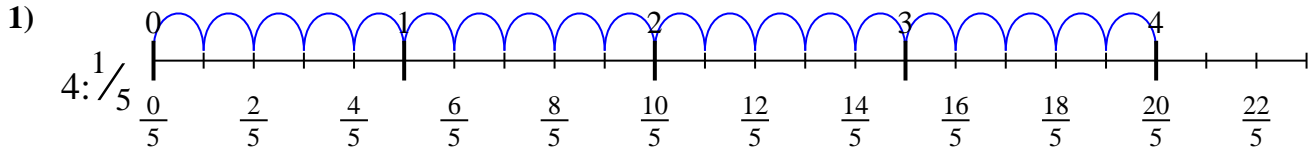
9. \_\_\_\_\_



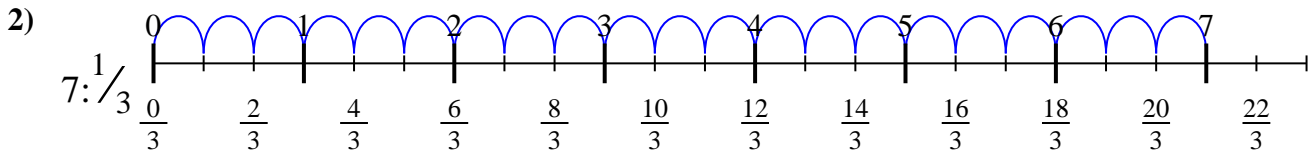


Benutze den Zahlenstrahl um jede Aufgabe zu lösen. Die erste Aufgabe ist bereits als Beispiel markiert.

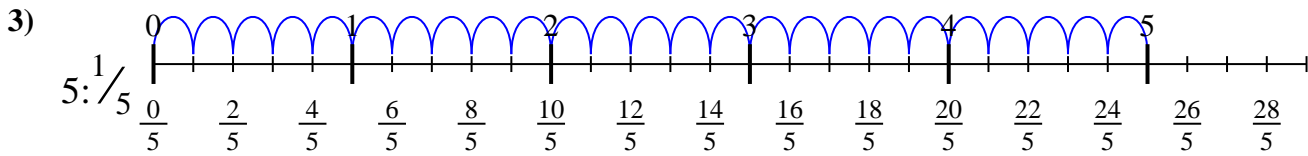
**Antworten**



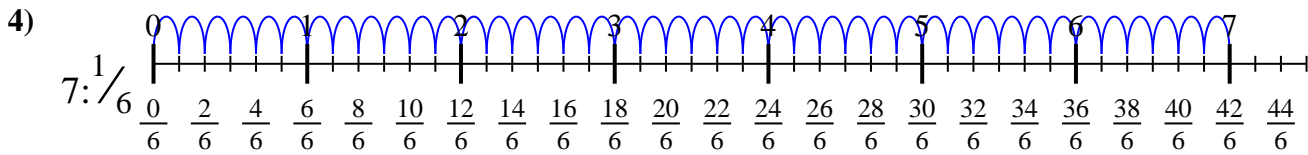
1.  $\frac{20}{1}$



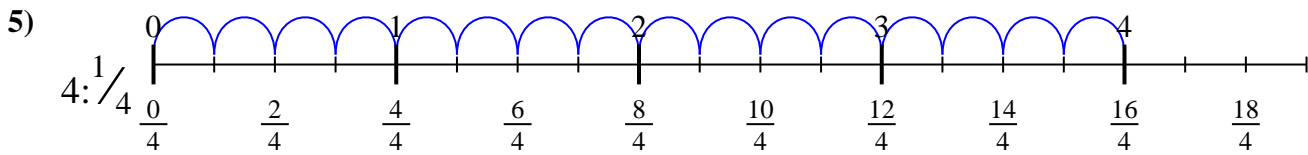
2.  $\frac{21}{1}$



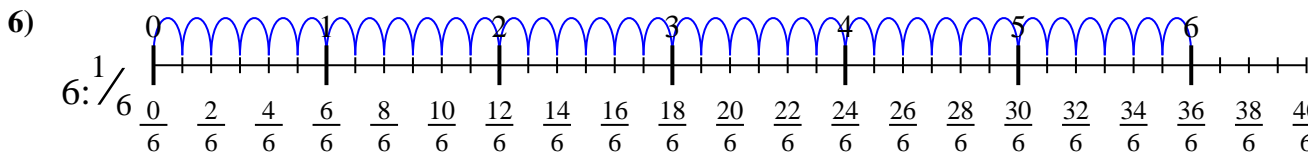
3.  $\frac{25}{1}$



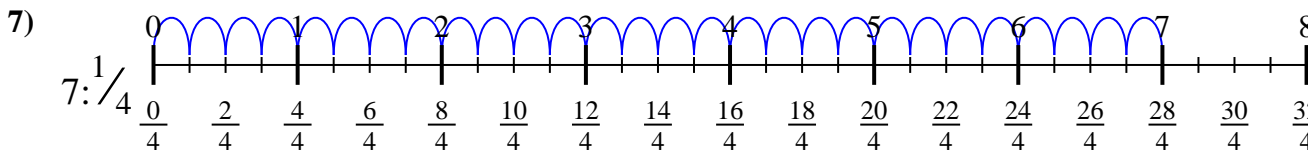
4.  $\frac{42}{1}$



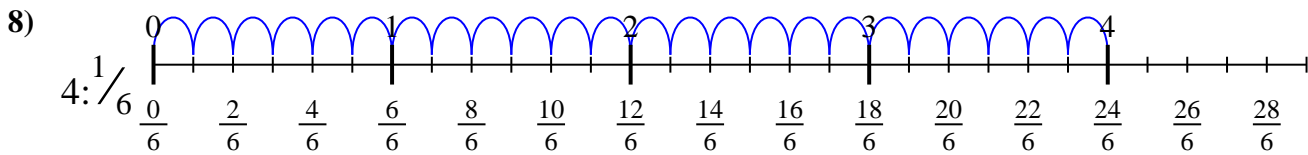
5.  $\frac{16}{1}$



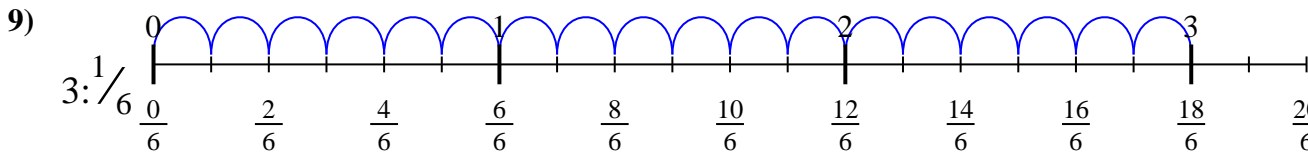
6.  $\frac{36}{1}$



7.  $\frac{28}{1}$



8.  $\frac{24}{1}$



9.  $\frac{18}{1}$



Benutze den Zahlenstrahl um jede Aufgabe zu lösen. Die erste Aufgabe ist bereits als Beispiel markiert.

**Antworten**

$25/1$

$20/1$

$24/1$

$42/1$

$28/1$

$16/1$

$21/1$

$18/1$

$36/1$

1. \_\_\_\_\_

2. \_\_\_\_\_

3. \_\_\_\_\_

4. \_\_\_\_\_

5. \_\_\_\_\_

6. \_\_\_\_\_

7. \_\_\_\_\_

8. \_\_\_\_\_

9. \_\_\_\_\_

