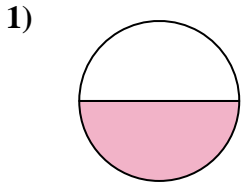


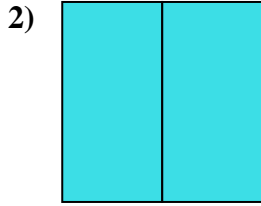


Stelle fest, welcher Buchstabe die schattierte Fläche darstellt.

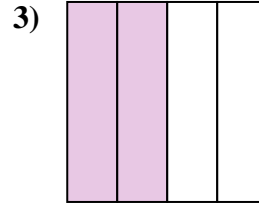
Antworten



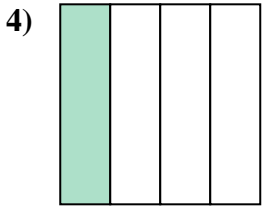
- A. one-half
- B. two-halves
- C. one-fourth



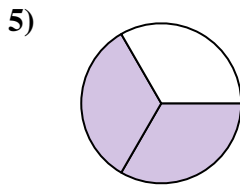
- A. three-fourths
- B. one-quarter
- C. two-halves



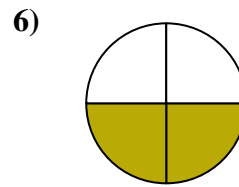
- A. two-quarters
- B. one-half
- C. three-fourths



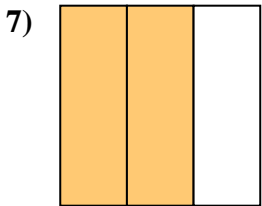
- A. three-fourths
- B. one-fourth
- C. two-halves



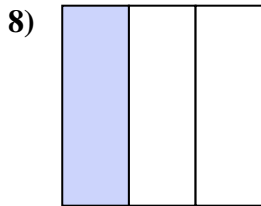
- A. three-fourths
- B. two-thirds
- C. two-quarters



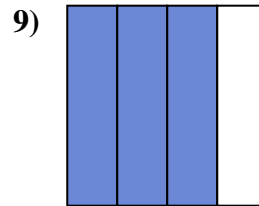
- A. three-fourths
- B. two-fourths
- C. three-fourths



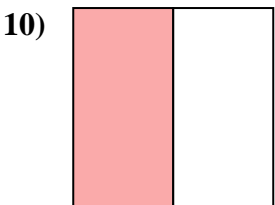
- A. one-quarter
- B. four-quarters
- C. two-thirds



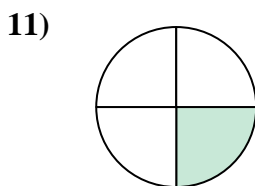
- A. three-fourths
- B. one-third
- C. two-halves



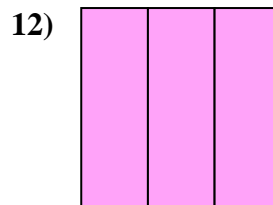
- A. three-fourths
- B. three-fourths
- C. two-quarters



- A. two-halves
- B. one-quarter
- C. one-half



- A. three-fourths
- B. one-half
- C. one-quarter



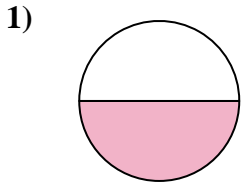
- A. three-thirds
- B. two-halves
- C. one-quarter

- 1. _____
- 2. _____
- 3. _____
- 4. _____
- 5. _____
- 6. _____
- 7. _____
- 8. _____
- 9. _____
- 10. _____
- 11. _____
- 12. _____

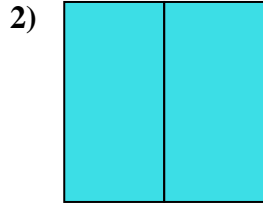


Stelle fest, welcher Buchstabe die schattierte Fläche darstellt.

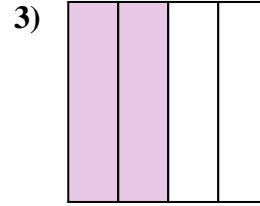
Antworten



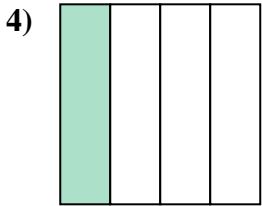
- A. one-half
- B. two-halves
- C. one-fourth



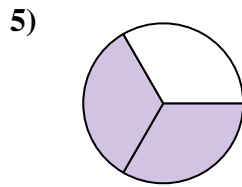
- A. three-fourths
- B. one-quarter
- C. two-halves



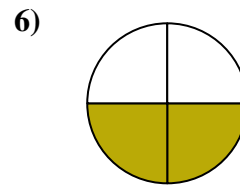
- A. two-quarters
- B. one-half
- C. three-fourths



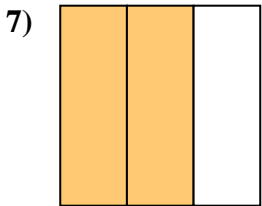
- A. three-fourths
- B. one-fourth
- C. two-halves



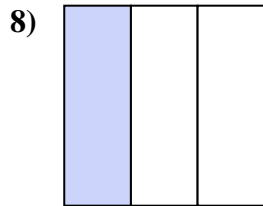
- A. three-fourths
- B. two-thirds
- C. two-quarters



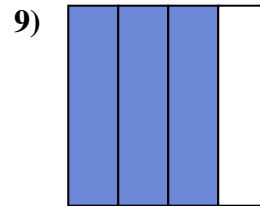
- A. three-fourths
- B. two-fourths
- C. three-fourths



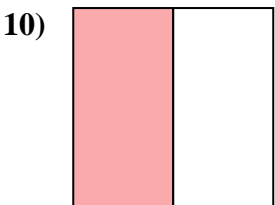
- A. one-quarter
- B. four-quarters
- C. two-thirds



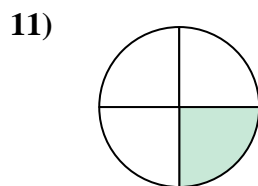
- A. three-fourths
- B. one-third
- C. two-halves



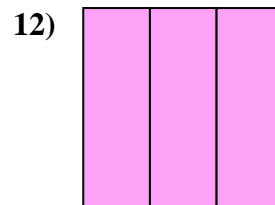
- A. three-fourths
- B. three-fourths
- C. two-quarters



- A. two-halves
- B. one-quarter
- C. one-half



- A. three-fourths
- B. one-half
- C. one-quarter



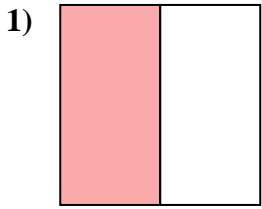
- A. three-thirds
- B. two-halves
- C. one-quarter

- 1. **A**
- 2. **C**
- 3. **A**
- 4. **B**
- 5. **B**
- 6. **B**
- 7. **C**
- 8. **B**
- 9. **B**
- 10. **C**
- 11. **C**
- 12. **A**

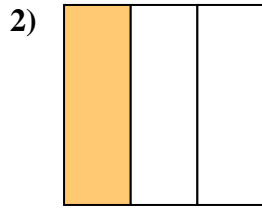


Stelle fest, welcher Buchstabe die schattierte Fläche darstellt.

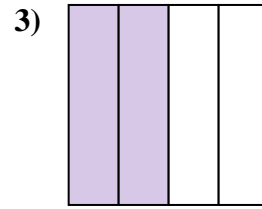
Antworten



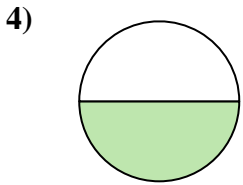
- A. one-half
- B. one-quarter
- C. two-quarters



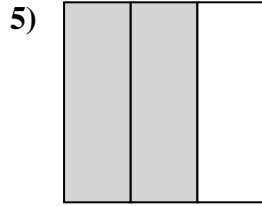
- A. one-fourth
- B. one-third
- C. two-halves



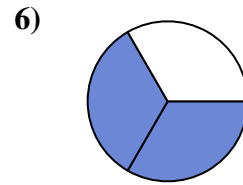
- A. two-halves
- B. two-quarters
- C. three-fourths



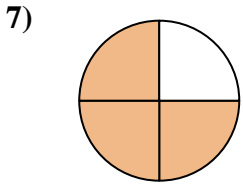
- A. one-half
- B. four-quarters
- C. three-fourths



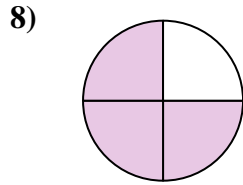
- A. two-thirds
- B. two-quarters
- C. four-quarters



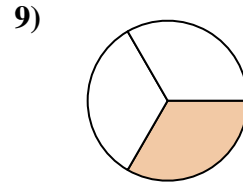
- A. two-thirds
- B. two-halves
- C. one-quarter



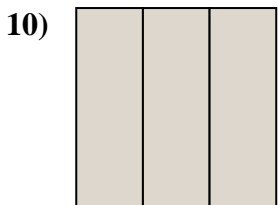
- A. three-fourths
- B. one-quarter
- C. three-fourths



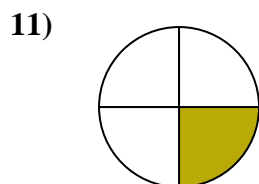
- A. three-quarters
- B. two-halves
- C. four-quarters



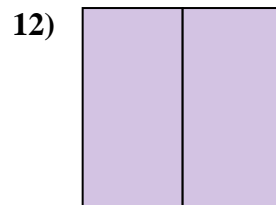
- A. one-third
- B. two-fourths
- C. three-fourths



- A. one-quarter
- B. three-thirds
- C. two-quarters



- A. one-fourth
- B. three-fourths
- C. two-halves



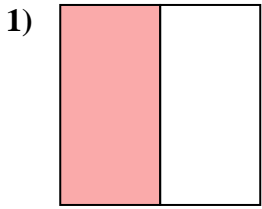
- A. three-quarters
- B. two-fourths
- C. two-halves

- 1. _____
- 2. _____
- 3. _____
- 4. _____
- 5. _____
- 6. _____
- 7. _____
- 8. _____
- 9. _____
- 10. _____
- 11. _____
- 12. _____

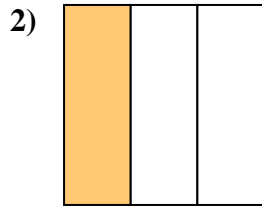


Stelle fest, welcher Buchstabe die schattierte Fläche darstellt.

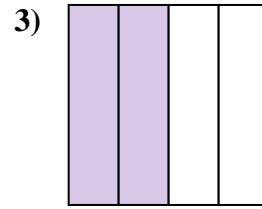
Antworten



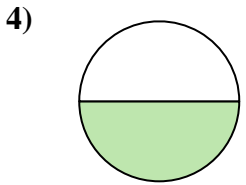
- A. one-half
- B. one-quarter
- C. two-quarters



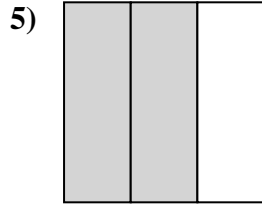
- A. one-fourth
- B. one-third
- C. two-halves



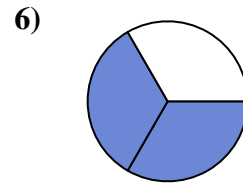
- A. two-halves
- B. two-quarters
- C. three-fourths



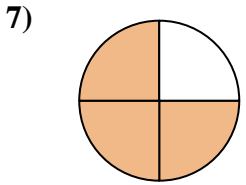
- A. one-half
- B. four-quarters
- C. three-fourths



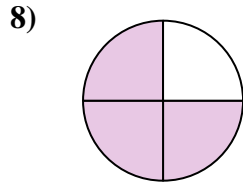
- A. two-thirds
- B. two-quarters
- C. four-quarters



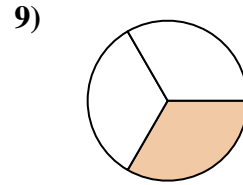
- A. two-thirds
- B. two-halves
- C. one-quarter



- A. three-fourths
- B. one-quarter
- C. three-fourths



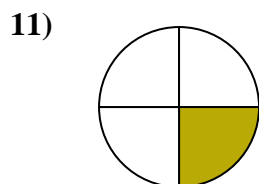
- A. three-quarters
- B. two-halves
- C. four-quarters



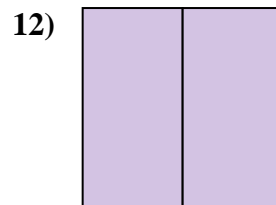
- A. one-third
- B. two-fourths
- C. three-fourths



- A. one-quarter
- B. three-thirds
- C. two-quarters



- A. one-fourth
- B. three-fourths
- C. two-halves



- A. three-quarters
- B. two-fourths
- C. two-halves

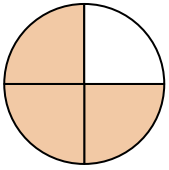
- 1. **A**
- 2. **B**
- 3. **B**
- 4. **A**
- 5. **A**
- 6. **A**
- 7. **C**
- 8. **A**
- 9. **A**
- 10. **B**
- 11. **A**
- 12. **C**



Stelle fest, welcher Buchstabe die schattierte Fläche darstellt.

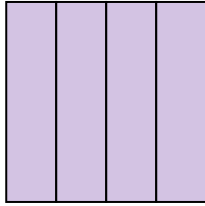
Antworten

1)



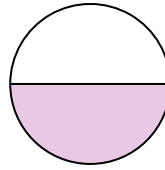
- A. three-fourths
- B. two-halves
- C. three-fourths

2)



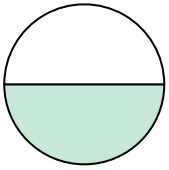
- A. one-half
- B. three-fourths
- C. one-quarter

3)



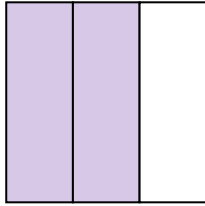
- A. one-half
- B. two-halves
- C. three-quarters

4)



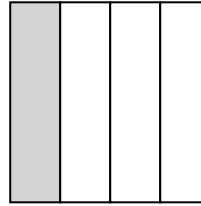
- A. one-half
- B. two-fourths
- C. two-halves

5)



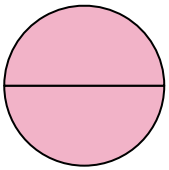
- A. two-quarters
- B. one-fourth
- C. two-thirds

6)



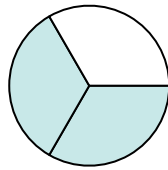
- A. four-quarters
- B. two-halves
- C. one-quarter

7)



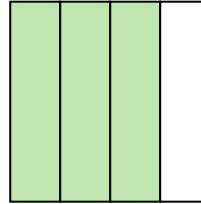
- A. one-fourth
- B. two-halves
- C. one-half

8)



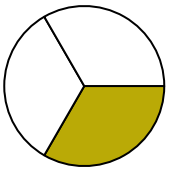
- A. one-half
- B. two-halves
- C. two-thirds

9)



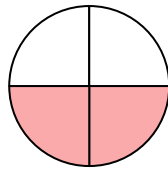
- A. three-fourths
- B. two-halves
- C. three-fourths

10)



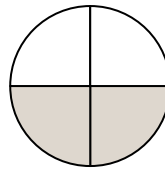
- A. one-fourth
- B. one-half
- C. one-third

11)



- A. three-fourths
- B. one-quarter
- C. two-quarters

12)



- A. two-fourths
- B. two-halves
- C. one-fourth

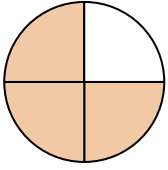
- 1. _____
- 2. _____
- 3. _____
- 4. _____
- 5. _____
- 6. _____
- 7. _____
- 8. _____
- 9. _____
- 10. _____
- 11. _____
- 12. _____



Stelle fest, welcher Buchstabe die schattierte Fläche darstellt.

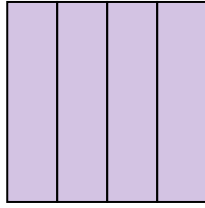
Antworten

1)



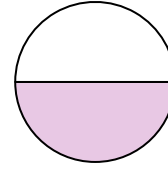
- A. three-fourths
B. two-halves
C. three-fourths

2)



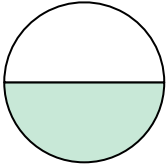
- A. one-half
B. three-fourths
C. one-quarter

3)



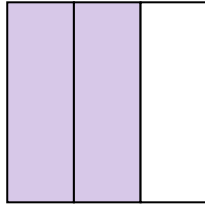
- A. one-half
B. two-halves
C. three-quarters

4)



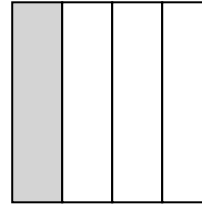
- A. one-half
B. two-fourths
C. two-halves

5)



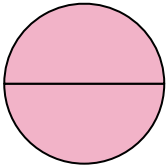
- A. two-quarters
B. one-fourth
C. two-thirds

6)



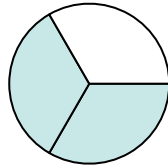
- A. four-quarters
B. two-halves
C. one-quarter

7)



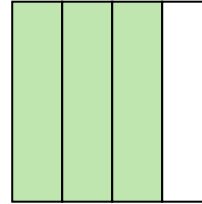
- A. one-fourth
B. two-halves
C. one-half

8)



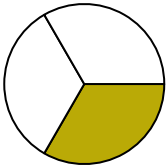
- A. one-half
B. two-halves
C. two-thirds

9)



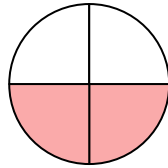
- A. three-fourths
B. two-halves
C. three-fourths

10)



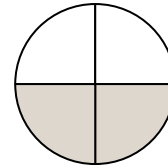
- A. one-fourth
B. one-half
C. one-third

11)



- A. three-fourths
B. one-quarter
C. two-quarters

12)



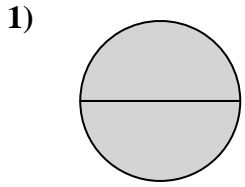
- A. two-fourths
B. two-halves
C. one-fourth

1. **C** 2. **B** 3. **A** 4. **A** 5. **C** 6. **C** 7. **B** 8. **C** 9. **C** 10. **C** 11. **C** 12. **A**

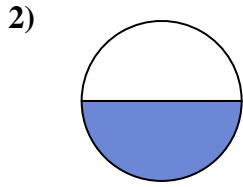


Stelle fest, welcher Buchstabe die schattierte Fläche darstellt.

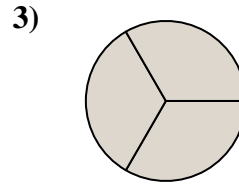
Antworten



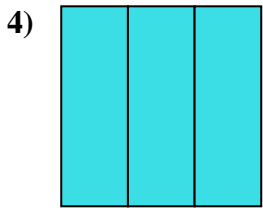
- A. two-halves
- B. one-fourth
- C. three-fourths



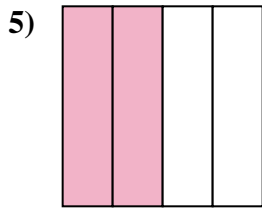
- A. two-halves
- B. one-half
- C. two-fourths



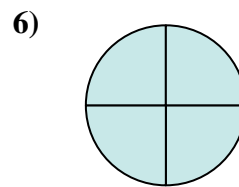
- A. two-fourths
- B. three-thirds
- C. one-half



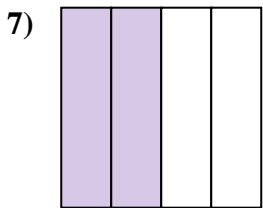
- A. three-thirds
- B. four-quarters
- C. one-half



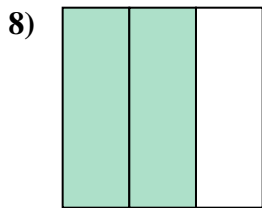
- A. two-fourths
- B. one-quarter
- C. four-quarters



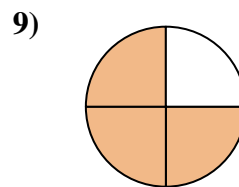
- A. one-fourth
- B. two-halves
- C. four-quarters



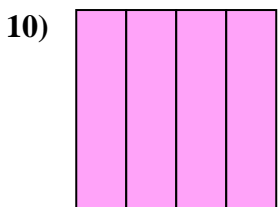
- A. three-fourths
- B. two-halves
- C. two-quarters



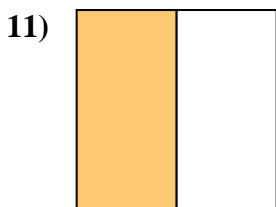
- A. three-quarters
- B. two-fourths
- C. two-thirds



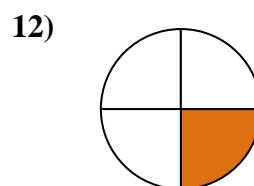
- A. three-fourths
- B. two-halves
- C. one-quarter



- A. three-fourths
- B. two-fourths
- C. one-fourth



- A. two-halves
- B. one-half
- C. three-fourths

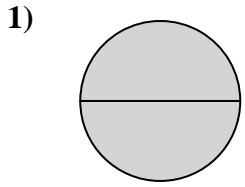


- A. two-halves
- B. one-half
- C. one-fourth

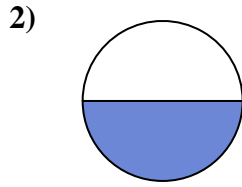
- 1. _____
- 2. _____
- 3. _____
- 4. _____
- 5. _____
- 6. _____
- 7. _____
- 8. _____
- 9. _____
- 10. _____
- 11. _____
- 12. _____



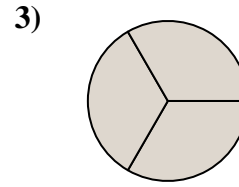
Stelle fest, welcher Buchstabe die schattierte Fläche darstellt.

Antworten

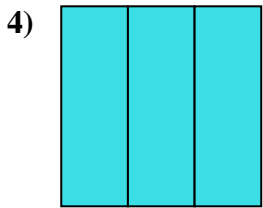
- A. two-halves
B. one-fourth
C. three-fourths



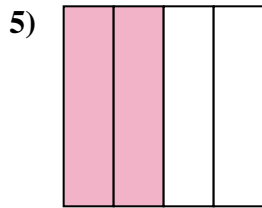
- A. two-halves
B. one-half
C. two-fourths



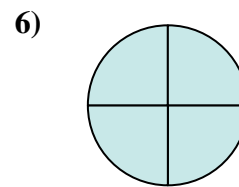
- A. two-fourths
B. three-thirds
C. one-half



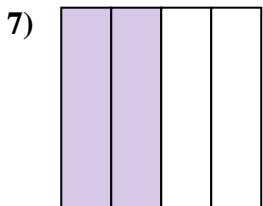
- A. three-thirds
B. four-quarters
C. one-half



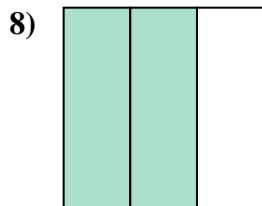
- A. two-fourths
B. one-quarter
C. four-quarters



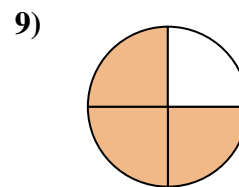
- A. one-fourth
B. two-halves
C. four-quarters



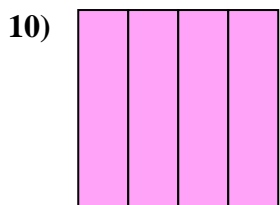
- A. three-fourths
B. two-halves
C. two-quarters



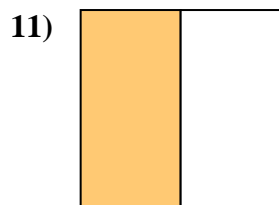
- A. three-quarters
B. two-fourths
C. two-thirds



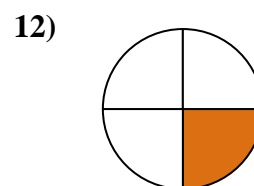
- A. three-fourths
B. two-halves
C. one-quarter



- A. three-fourths
B. two-fourths
C. one-fourth



- A. two-halves
B. one-half
C. three-fourths



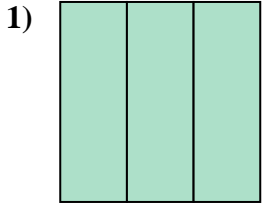
- A. two-halves
B. one-half
C. one-fourth

1. **A**
2. **B**
3. **B**
4. **A**
5. **A**
6. **C**
7. **C**
8. **C**
9. **A**
10. **A**
11. **B**
12. **C**

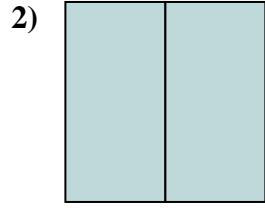


Stelle fest, welcher Buchstabe die schattierte Fläche darstellt.

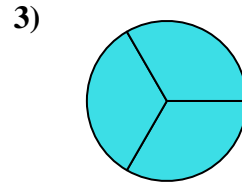
Antworten



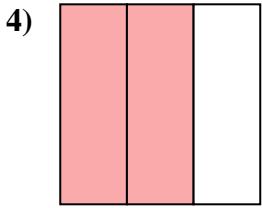
- A. three-quarters
- B. three-thirds
- C. two-halves



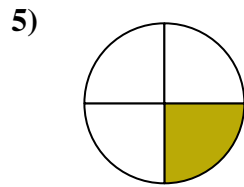
- A. three-fourths
- B. two-halves
- C. two-fourths



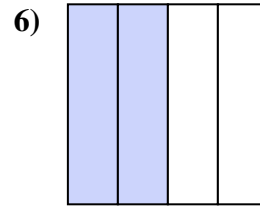
- A. three-fourths
- B. two-quarters
- C. three-thirds



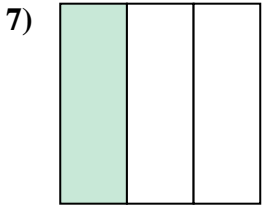
- A. two-thirds
- B. four-quarters
- C. one-fourth



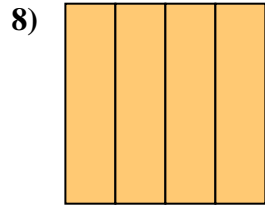
- A. two-fourths
- B. one-quarter
- C. two-halves



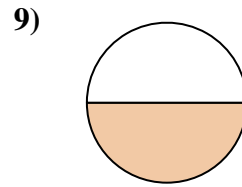
- A. one-quarter
- B. one-half
- C. two-fourths



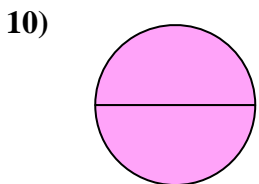
- A. four-quarters
- B. one-third
- C. one-quarter



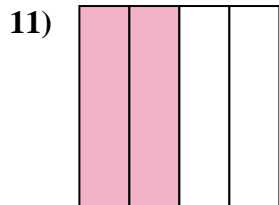
- A. four-quarters
- B. one-half
- C. two-halves



- A. one-fourth
- B. two-halves
- C. one-half



- A. four-quarters
- B. two-halves
- C. three-fourths



- A. two-quarters
- B. one-quarter
- C. three-fourths




- A. three-fourths
- B. one-half
- C. three-quarters

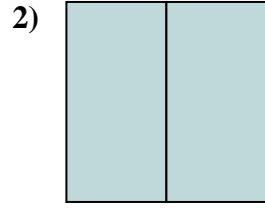
- 1. _____
- 2. _____
- 3. _____
- 4. _____
- 5. _____
- 6. _____
- 7. _____
- 8. _____
- 9. _____
- 10. _____
- 11. _____
- 12. _____



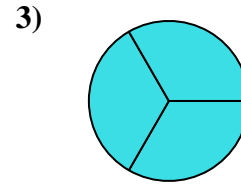
Stelle fest, welcher Buchstabe die schattierte Fläche darstellt.

Antworten

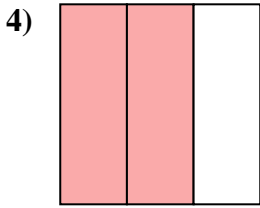
- A. three-quarters
B. three-thirds
C. two-halves



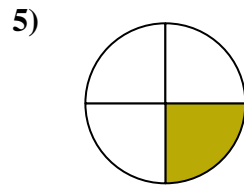
- A. three-fourths
B. two-halves
C. two-fourths



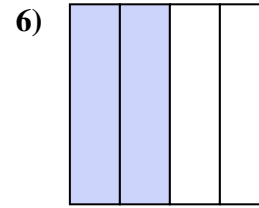
- A. three-fourths
B. two-quarters
C. three-thirds



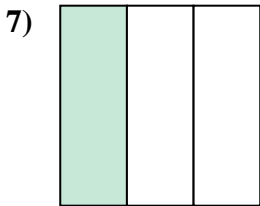
- A. two-thirds
B. four-quarters
C. one-fourth



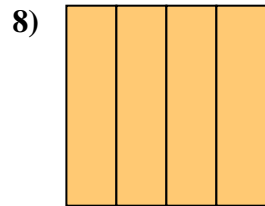
- A. two-fourths
B. one-quarter
C. two-halves



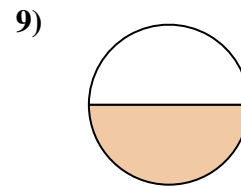
- A. one-quarter
B. one-half
C. two-fourths



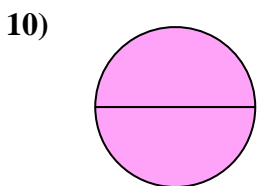
- A. four-quarters
B. one-third
C. one-quarter



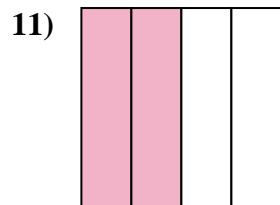
- A. four-quarters
B. one-half
C. two-halves



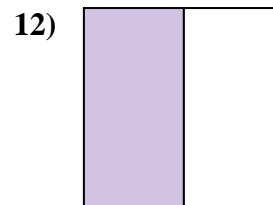
- A. one-fourth
B. two-halves
C. one-half



- A. four-quarters
B. two-halves
C. three-fourths



- A. two-quarters
B. one-quarter
C. three-fourths



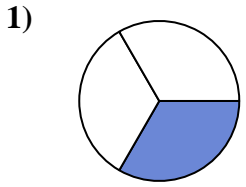
- A. three-fourths
B. one-half
C. three-quarters

1. **B**
2. **B**
3. **C**
4. **A**
5. **B**
6. **C**
7. **B**
8. **A**
9. **C**
10. **B**
11. **A**
12. **B**

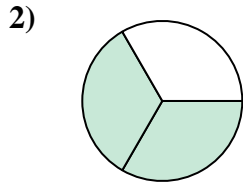


Stelle fest, welcher Buchstabe die schattierte Fläche darstellt.

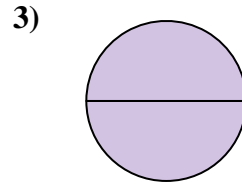
Antworten



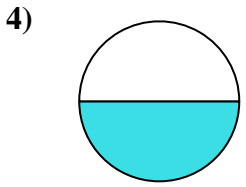
- A. four-quarters
- B. one-quarter
- C. one-third



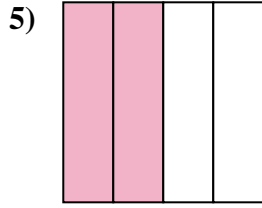
- A. two-thirds
- B. one-half
- C. one-quarter



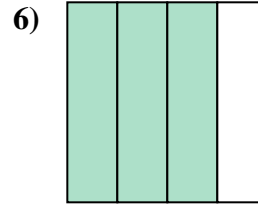
- A. one-fourth
- B. two-quarters
- C. two-halves



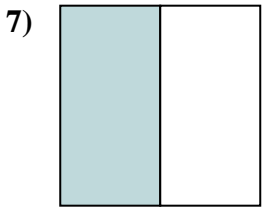
- A. one-half
- B. four-quarters
- C. three-fourths



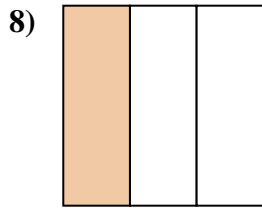
- A. four-quarters
- B. two-halves
- C. two-fourths



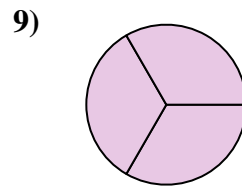
- A. one-fourth
- B. four-quarters
- C. three-quarters



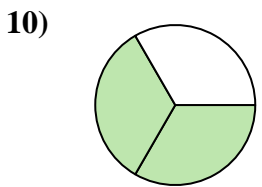
- A. two-fourths
- B. two-halves
- C. one-half



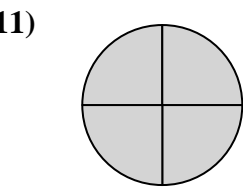
- A. two-fourths
- B. one-third
- C. three-fourths



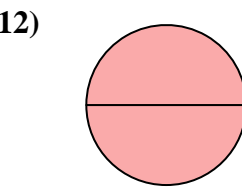
- A. three-thirds
- B. one-half
- C. three-quarters



- A. three-fourths
- B. two-thirds
- C. three-fourths



- A. one-fourth
- B. four-quarters
- C. one-half

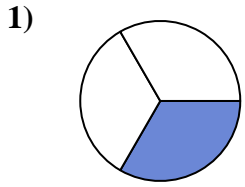


- A. two-halves
- B. two-fourths
- C. three-fourths

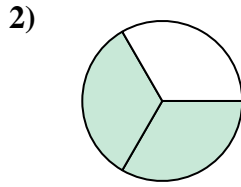
- 1. _____
- 2. _____
- 3. _____
- 4. _____
- 5. _____
- 6. _____
- 7. _____
- 8. _____
- 9. _____
- 10. _____
- 11. _____
- 12. _____



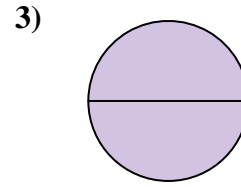
Stelle fest, welcher Buchstabe die schattierte Fläche darstellt.

Antworten

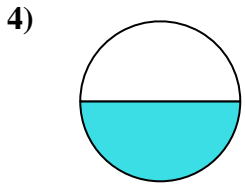
- A. four-quarters
B. one-quarter
C. one-third



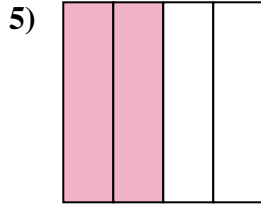
- A. two-thirds
B. one-half
C. one-quarter



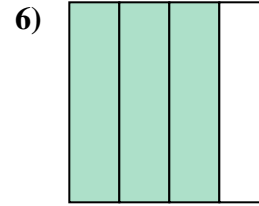
- A. one-fourth
B. two-quarters
C. two-halves



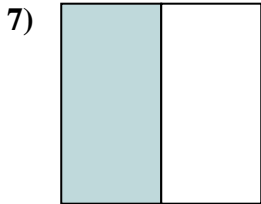
- A. one-half
B. four-quarters
C. three-fourths



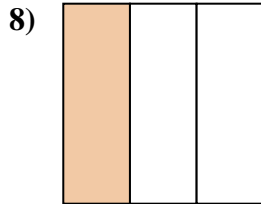
- A. four-quarters
B. two-halves
C. two-fourths



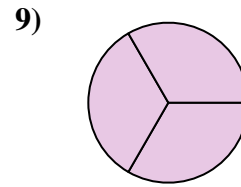
- A. one-fourth
B. four-quarters
C. three-quarters



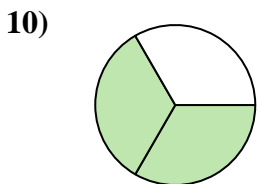
- A. two-fourths
B. two-halves
C. one-half



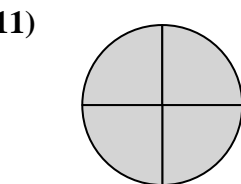
- A. two-fourths
B. one-third
C. three-fourths



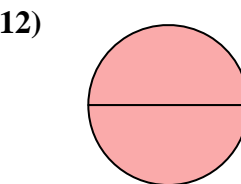
- A. three-thirds
B. one-half
C. three-quarters



- A. three-fourths
B. two-thirds
C. three-fourths



- A. one-fourth
B. four-quarters
C. one-half



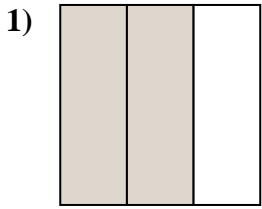
- A. two-halves
B. two-fourths
C. three-fourths

1. **C**
2. **A**
3. **C**
4. **A**
5. **C**
6. **C**
7. **C**
8. **B**
9. **A**
10. **B**
11. **B**
12. **A**

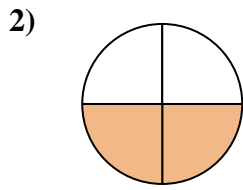


Stelle fest, welcher Buchstabe die schattierte Fläche darstellt.

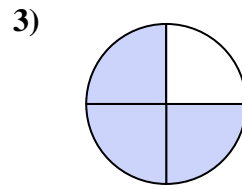
Antworten



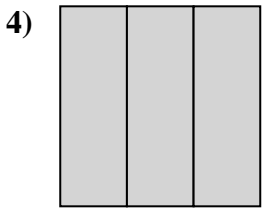
- A. two-thirds
- B. two-fourths
- C. two-halves



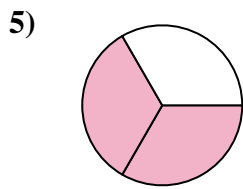
- A. three-fourths
- B. two-fourths
- C. one-half



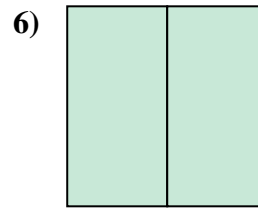
- A. three-fourths
- B. four-quarters
- C. two-halves



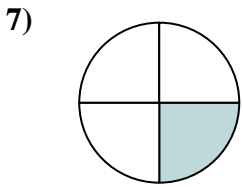
- A. three-thirds
- B. one-fourth
- C. two-halves



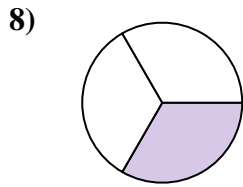
- A. two-halves
- B. two-fourths
- C. two-thirds



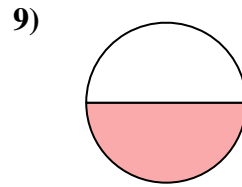
- A. one-fourth
- B. two-fourths
- C. two-halves



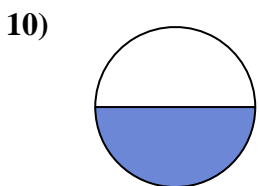
- A. two-halves
- B. three-fourths
- C. one-fourth



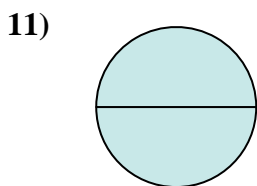
- A. two-halves
- B. two-fourths
- C. one-third



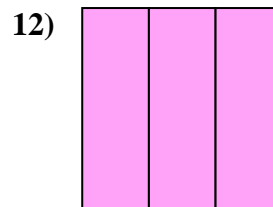
- A. two-halves
- B. three-fourths
- C. one-half



- A. two-fourths
- B. one-fourth
- C. one-half



- A. two-halves
- B. three-fourths
- C. four-quarters

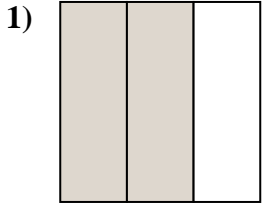


- A. three-thirds
- B. one-fourth
- C. three-quarters

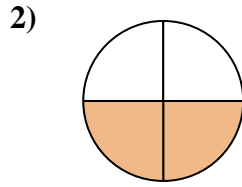
- 1. _____
- 2. _____
- 3. _____
- 4. _____
- 5. _____
- 6. _____
- 7. _____
- 8. _____
- 9. _____
- 10. _____
- 11. _____
- 12. _____



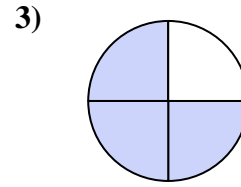
Stelle fest, welcher Buchstabe die schattierte Fläche darstellt.

Antworten

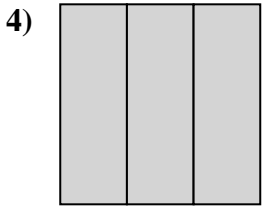
- A. two-thirds
B. two-fourths
C. two-halves



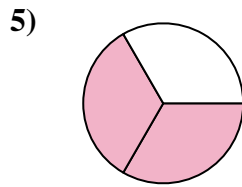
- A. three-fourths
B. two-fourths
C. one-half



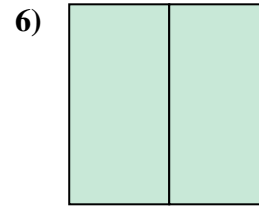
- A. three-fourths
B. four-quarters
C. two-halves



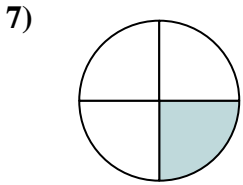
- A. three-thirds
B. one-fourth
C. two-halves



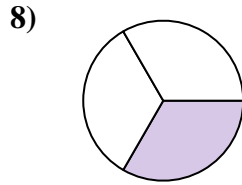
- A. two-halves
B. two-fourths
C. two-thirds



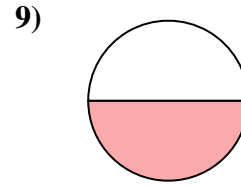
- A. one-fourth
B. two-fourths
C. two-halves



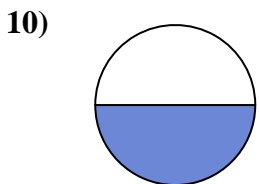
- A. two-halves
B. three-fourths
C. one-fourth



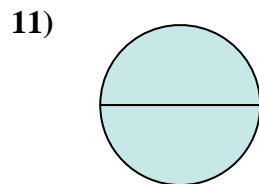
- A. two-halves
B. two-fourths
C. one-third



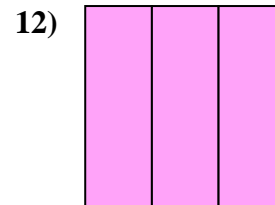
- A. two-halves
B. three-fourths
C. one-half



- A. two-fourths
B. one-fourth
C. one-half



- A. two-halves
B. three-fourths
C. four-quarters



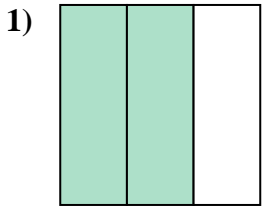
- A. three-thirds
B. one-fourth
C. three-quarters

1. **A**
2. **B**
3. **A**
4. **A**
5. **C**
6. **C**
7. **C**
8. **C**
9. **C**
10. **C**
11. **A**
12. **A**

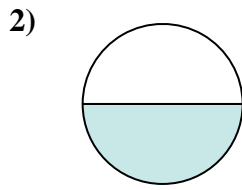


Stelle fest, welcher Buchstabe die schattierte Fläche darstellt.

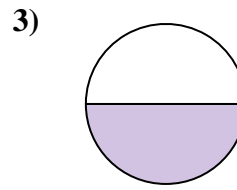
Antworten



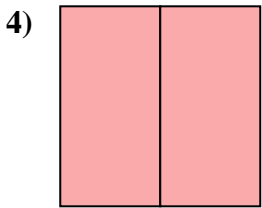
- A. two-halves
- B. two-thirds
- C. one-quarter



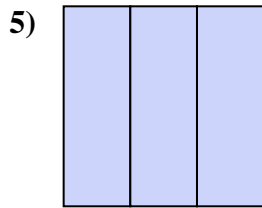
- A. one-fourth
- B. two-quarters
- C. one-half



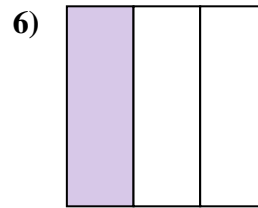
- A. two-fourths
- B. one-half
- C. two-halves



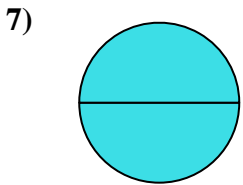
- A. two-halves
- B. two-quarters
- C. one-half



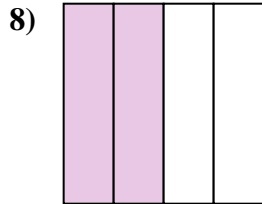
- A. three-fourths
- B. three-thirds
- C. one-fourth



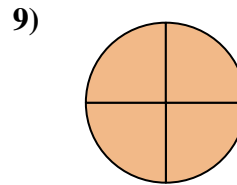
- A. two-halves
- B. one-third
- C. one-quarter



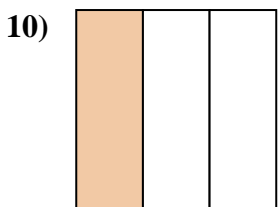
- A. three-fourths
- B. one-half
- C. two-halves



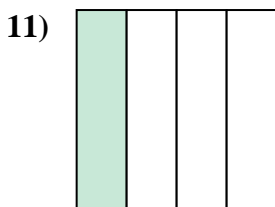
- A. three-quarters
- B. two-quarters
- C. two-halves



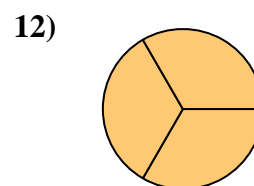
- A. one-half
- B. three-fourths
- C. two-fourths



- A. one-third
- B. one-half
- C. two-halves



- A. three-quarters
- B. two-halves
- C. one-quarter



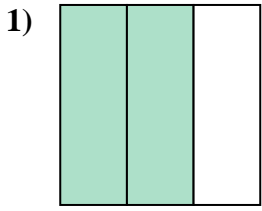
- A. three-thirds
- B. two-halves
- C. one-half

- 1. _____
- 2. _____
- 3. _____
- 4. _____
- 5. _____
- 6. _____
- 7. _____
- 8. _____
- 9. _____
- 10. _____
- 11. _____
- 12. _____

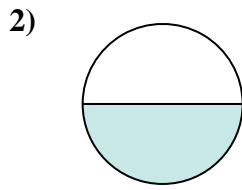


Stelle fest, welcher Buchstabe die schattierte Fläche darstellt.

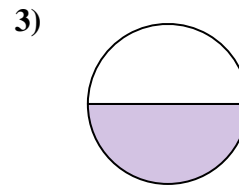
Antworten



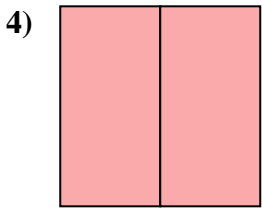
- A. two-halves
- B. two-thirds
- C. one-quarter



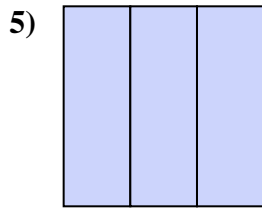
- A. one-fourth
- B. two-quarters
- C. one-half



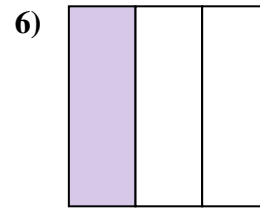
- A. two-fourths
- B. one-half
- C. two-halves



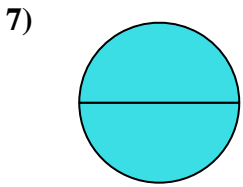
- A. two-halves
- B. two-quarters
- C. one-half



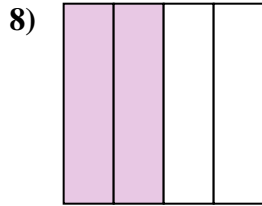
- A. three-fourths
- B. three-thirds
- C. one-fourth



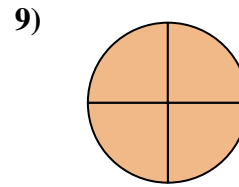
- A. two-halves
- B. one-third
- C. one-quarter



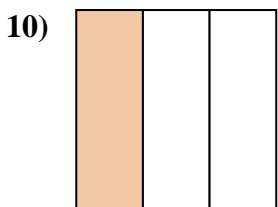
- A. three-fourths
- B. one-half
- C. two-halves



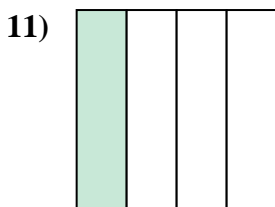
- A. three-quarters
- B. two-quarters
- C. two-halves



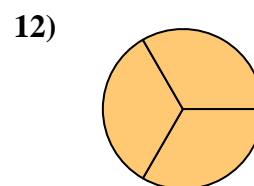
- A. one-half
- B. three-fourths
- C. two-fourths



- A. one-third
- B. one-half
- C. two-halves



- A. three-quarters
- B. two-halves
- C. one-quarter



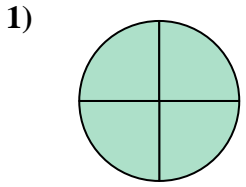
- A. three-thirds
- B. two-halves
- C. one-half

- 1. **B**
- 2. **C**
- 3. **B**
- 4. **A**
- 5. **B**
- 6. **B**
- 7. **C**
- 8. **B**
- 9. **B**
- 10. **A**
- 11. **C**
- 12. **A**

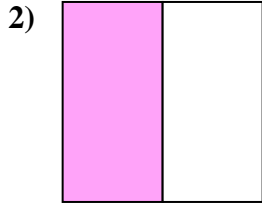


Stelle fest, welcher Buchstabe die schattierte Fläche darstellt.

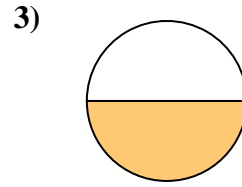
Antworten



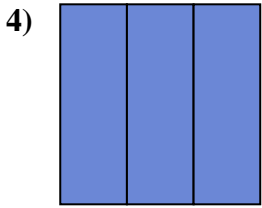
- A. one-fourth
- B. three-fourths
- C. three-fourths



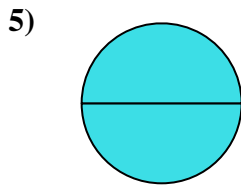
- A. three-quarters
- B. one-quarter
- C. one-half



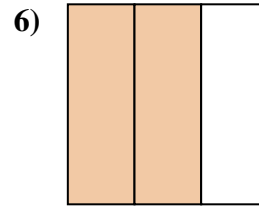
- A. two-quarters
- B. three-quarters
- C. one-half



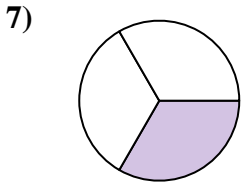
- A. two-halves
- B. one-half
- C. three-thirds



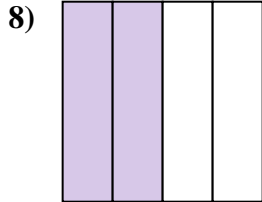
- A. two-halves
- B. one-quarter
- C. two-fourths



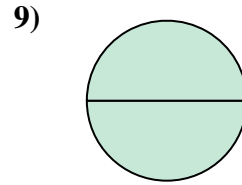
- A. two-thirds
- B. two-halves
- C. one-fourth



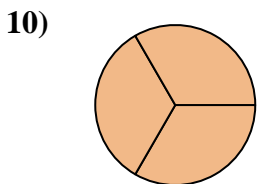
- A. three-fourths
- B. two-halves
- C. one-third



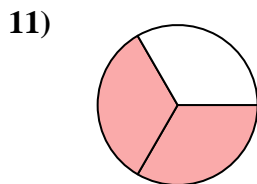
- A. one-half
- B. two-quarters
- C. three-quarters



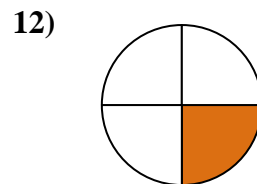
- A. two-quarters
- B. three-fourths
- C. two-halves



- A. three-thirds
- B. one-fourth
- C. two-halves



- A. one-quarter
- B. two-thirds
- C. four-quarters

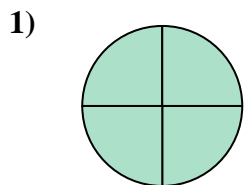


- A. one-fourth
- B. three-quarters
- C. two-halves

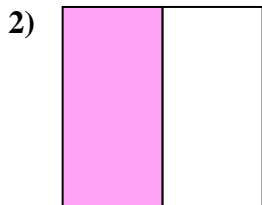
- 1. _____
- 2. _____
- 3. _____
- 4. _____
- 5. _____
- 6. _____
- 7. _____
- 8. _____
- 9. _____
- 10. _____
- 11. _____
- 12. _____



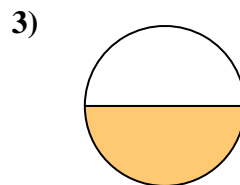
Stelle fest, welcher Buchstabe die schattierte Fläche darstellt.

Antworten

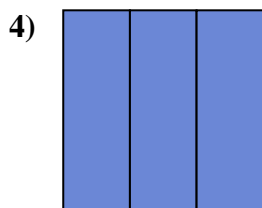
- A. one-fourth
B. three-fourths
C. three-fourths



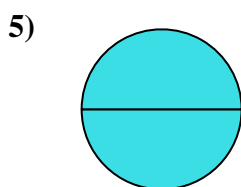
- A. three-quarters
B. one-quarter
C. one-half



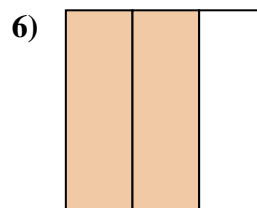
- A. two-quarters
B. three-quarters
C. one-half



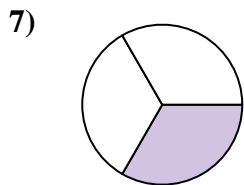
- A. two-halves
B. one-half
C. three-thirds



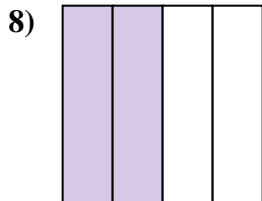
- A. two-halves
B. one-quarter
C. two-fourths



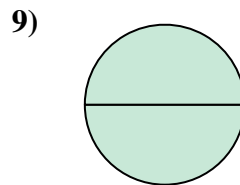
- A. two-thirds
B. two-halves
C. one-fourth



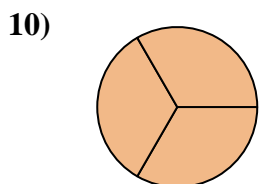
- A. three-fourths
B. two-halves
C. one-third



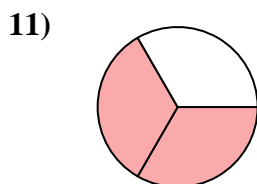
- A. one-half
B. two-quarters
C. three-quarters



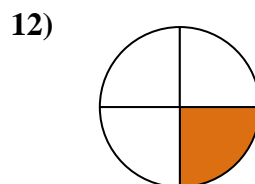
- A. two-quarters
B. three-fourths
C. two-halves



- A. three-thirds
B. one-fourth
C. two-halves



- A. one-quarter
B. two-thirds
C. four-quarters



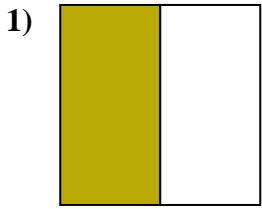
- A. one-fourth
B. three-quarters
C. two-halves

1. **C** 2. **C** 3. **C** 4. **C** 5. **A** 6. **A** 7. **C** 8. **B** 9. **C** 10. **A** 11. **B** 12. **A**

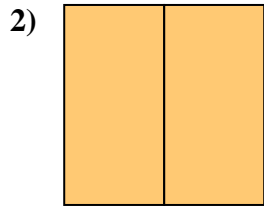


Stelle fest, welcher Buchstabe die schattierte Fläche darstellt.

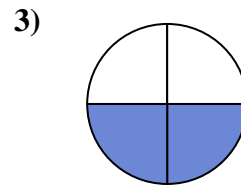
Antworten



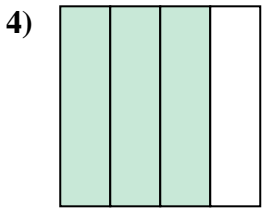
- A. two-fourths
- B. one-half
- C. two-halves



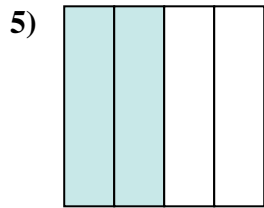
- A. two-halves
- B. three-fourths
- C. three-quarters



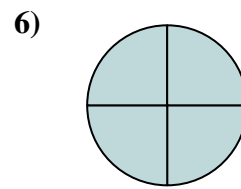
- A. one-quarter
- B. three-fourths
- C. two-quarters



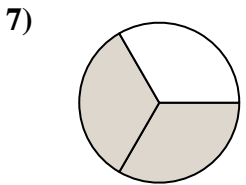
- A. one-fourth
- B. three-quarters
- C. two-fourths



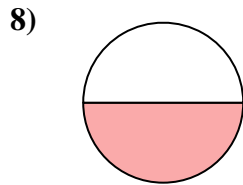
- A. two-quarters
- B. three-fourths
- C. two-halves



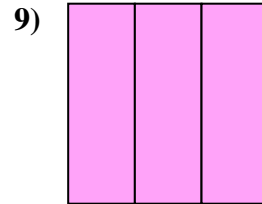
- A. four-quarters
- B. two-halves
- C. two-fourths



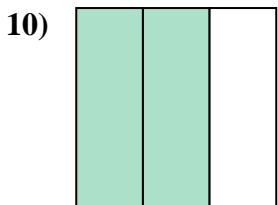
- A. one-quarter
- B. two-halves
- C. two-thirds



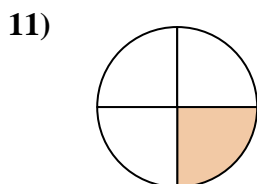
- A. three-fourths
- B. two-halves
- C. one-half



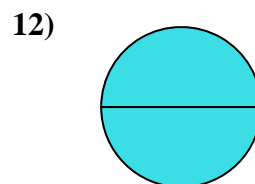
- A. one-half
- B. three-thirds
- C. four-quarters



- A. two-halves
- B. two-thirds
- C. three-fourths



- A. four-quarters
- B. three-fourths
- C. one-quarter

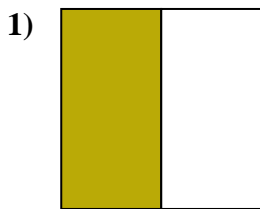


- A. two-halves
- B. one-quarter
- C. one-half

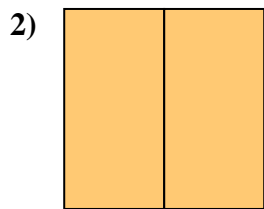
- 1. _____
- 2. _____
- 3. _____
- 4. _____
- 5. _____
- 6. _____
- 7. _____
- 8. _____
- 9. _____
- 10. _____
- 11. _____
- 12. _____



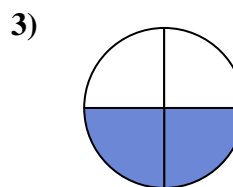
Stelle fest, welcher Buchstabe die schattierte Fläche darstellt.

Antworten

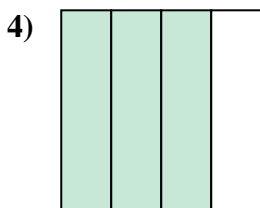
- A. two-fourths
B. one-half
C. two-halves



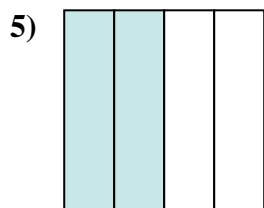
- A. two-halves
B. three-fourths
C. three-quarters



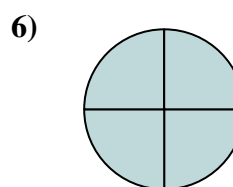
- A. one-quarter
B. three-fourths
C. two-quarters



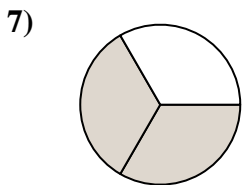
- A. one-fourth
B. three-quarters
C. two-fourths



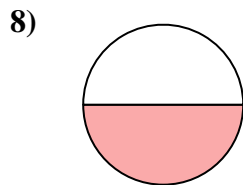
- A. two-quarters
B. three-fourths
C. two-halves



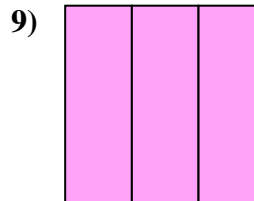
- A. four-quarters
B. two-halves
C. two-fourths



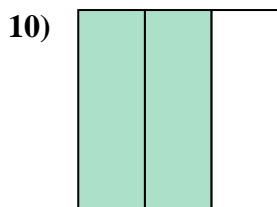
- A. one-quarter
B. two-halves
C. two-thirds



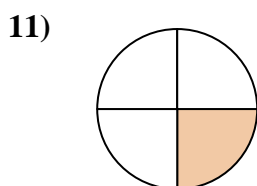
- A. three-fourths
B. two-halves
C. one-half



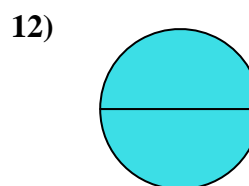
- A. one-half
B. three-thirds
C. four-quarters



- A. two-halves
B. two-thirds
C. three-fourths



- A. four-quarters
B. three-fourths
C. one-quarter



- A. two-halves
B. one-quarter
C. one-half

1. **B**2. **A**3. **C**4. **B**5. **A**6. **A**7. **C**8. **C**9. **B**10. **B**11. **C**12. **A**