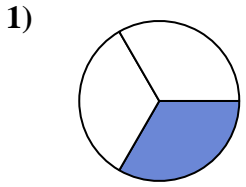


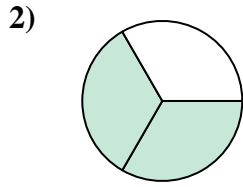


Stelle fest, welcher Buchstabe die schattierte Fläche darstellt.

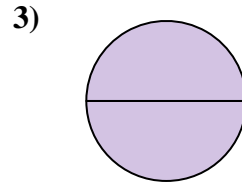
Antworten



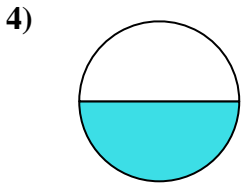
- A. four-quarters
- B. one-quarter
- C. one-third



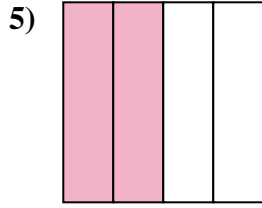
- A. two-thirds
- B. one-half
- C. one-quarter



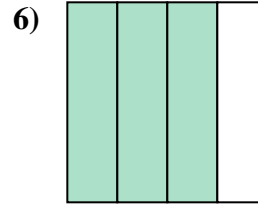
- A. one-fourth
- B. two-quarters
- C. two-halves



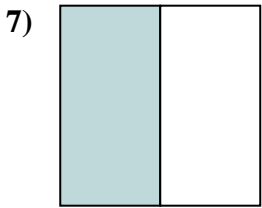
- A. one-half
- B. four-quarters
- C. three-fourths



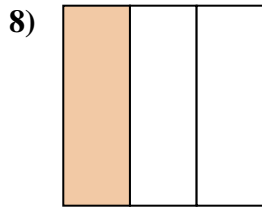
- A. four-quarters
- B. two-halves
- C. two-fourths



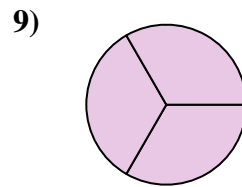
- A. one-fourth
- B. four-quarters
- C. three-quarters



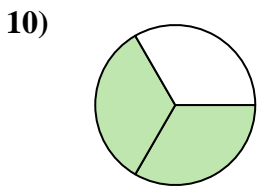
- A. two-fourths
- B. two-halves
- C. one-half



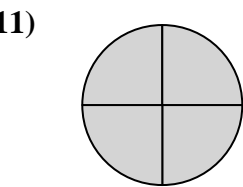
- A. two-fourths
- B. one-third
- C. three-fourths



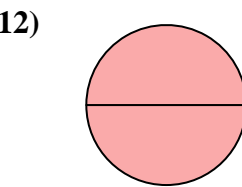
- A. three-thirds
- B. one-half
- C. three-quarters



- A. three-fourths
- B. two-thirds
- C. three-fourths



- A. one-fourth
- B. four-quarters
- C. one-half

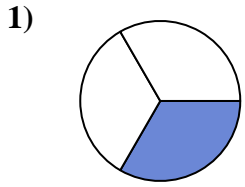


- A. two-halves
- B. two-fourths
- C. three-fourths

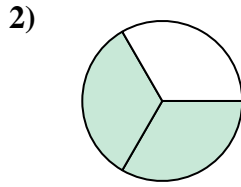
- 1. _____
- 2. _____
- 3. _____
- 4. _____
- 5. _____
- 6. _____
- 7. _____
- 8. _____
- 9. _____
- 10. _____
- 11. _____
- 12. _____



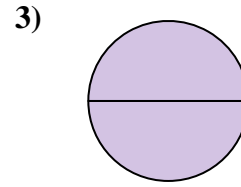
Stelle fest, welcher Buchstabe die schattierte Fläche darstellt.

Antworten

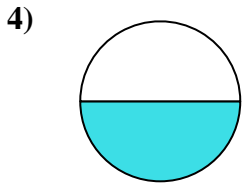
- A. four-quarters
B. one-quarter
C. one-third



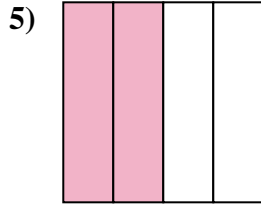
- A. two-thirds
B. one-half
C. one-quarter



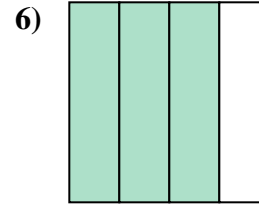
- A. one-fourth
B. two-quarters
C. two-halves



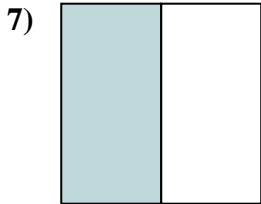
- A. one-half
B. four-quarters
C. three-fourths



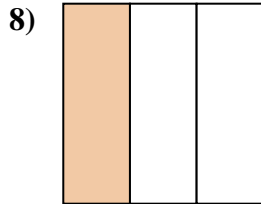
- A. four-quarters
B. two-halves
C. two-fourths



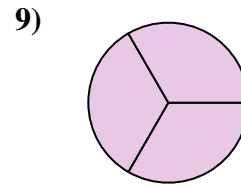
- A. one-fourth
B. four-quarters
C. three-quarters



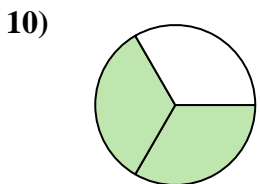
- A. two-fourths
B. two-halves
C. one-half



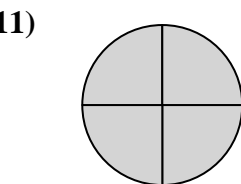
- A. two-fourths
B. one-third
C. three-fourths



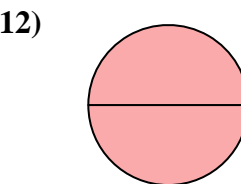
- A. three-thirds
B. one-half
C. three-quarters



- A. three-fourths
B. two-thirds
C. three-fourths



- A. one-fourth
B. four-quarters
C. one-half



- A. two-halves
B. two-fourths
C. three-fourths

1. **C**
2. **A**
3. **C**
4. **A**
5. **C**
6. **C**
7. **C**
8. **B**
9. **A**
10. **B**
11. **B**
12. **A**