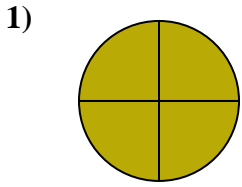


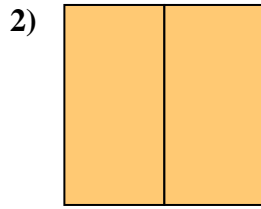


Stelle fest, welcher Buchstabe die schattierte Fläche darstellt.

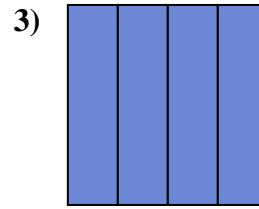
Antworten



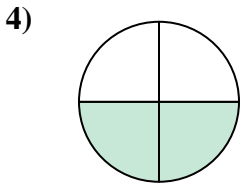
- A. two-halves
- B. three-fourths
- C. one-half



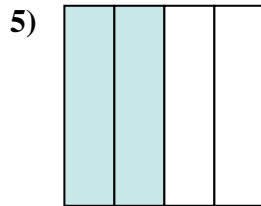
- A. one-quarter
- B. two-fourths
- C. two-halves



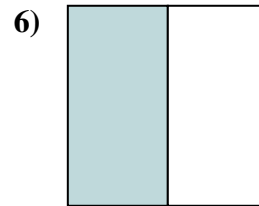
- A. two-halves
- B. two-quarters
- C. three-fourths



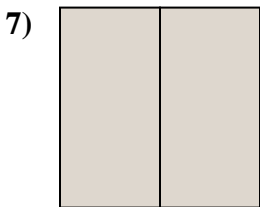
- A. two-fourths
- B. one-fourth
- C. one-half



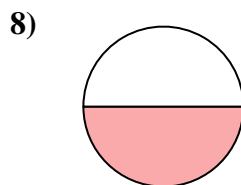
- A. four-quarters
- B. three-quarters
- C. two-fourths



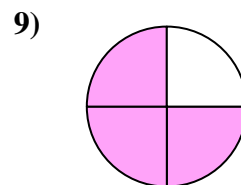
- A. one-half
- B. two-halves
- C. three-fourths



- A. one-half
- B. one-quarter
- C. two-halves



- A. one-half
- B. one-quarter
- C. two-fourths



- A. three-quarters
- B. one-quarter
- C. four-quarters

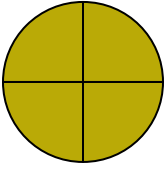
- 1. _____
- 2. _____
- 3. _____
- 4. _____
- 5. _____
- 6. _____
- 7. _____
- 8. _____
- 9. _____



Stelle fest, welcher Buchstabe die schattierte Fläche darstellt.

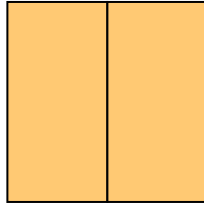
Antworten

1)



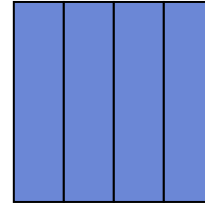
- A. two-halves
 B. three-fourths
 C. one-half

2)



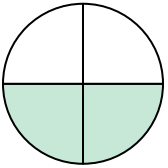
- A. one-quarter
 B. two-fourths
 C. two-halves

3)



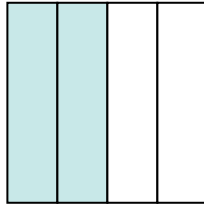
- A. two-halves
 B. two-quarters
 C. three-fourths

4)



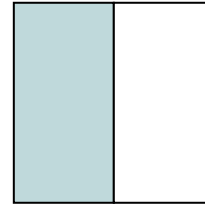
- A. two-fourths
 B. one-fourth
 C. one-half

5)




- A. four-quarters
 B. three-quarters
 C. two-fourths

6)



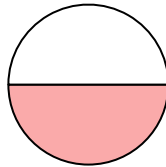
- A. one-half
 B. two-halves
 C. three-fourths

7)



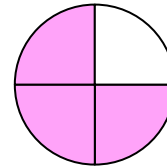
- A. one-half
 B. one-quarter
 C. two-halves

8)



- A. one-half
 B. one-quarter
 C. two-fourths

9)



- A. three-quarters
 B. one-quarter
 C. four-quarters

1. **B**2. **C**3. **C**4. **A**5. **C**6. **A**7. **C**8. **A**9. **A**