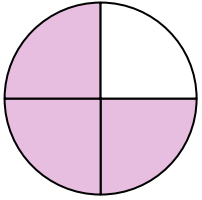


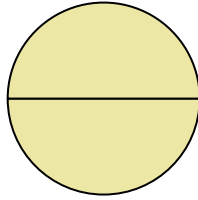
**Stelle fest, welcher Buchstabe die schattierte Fläche darstellt.****Antworten**

1)



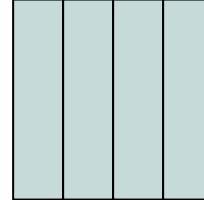
- A. one-quarter
B. three-fourths
C. two-quarters

2)




- A. two-halves
B. three-fourths
C. three-fourths

3)



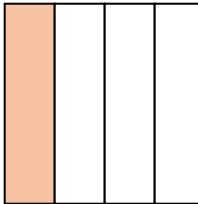
- A. one-quarter
B. three-fourths
C. two-fourths

4)



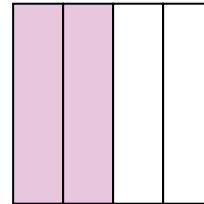
- A. three-fourths
B. one-fourth
C. one-half

5)




- A. three-quarters
B. three-fourths
C. one-fourth

6)



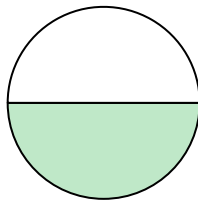
- A. two-fourths
B. one-half
C. four-quarters

7)



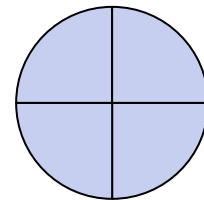
- A. one-fourth
B. two-halves
C. two-fourths

8)



- A. three-fourths
B. one-half
C. one-quarter

9)



- A. four-quarters
B. two-halves
C. three-fourths

1. _____

2. _____

3. _____

4. _____

5. _____

6. _____

7. _____

8. _____

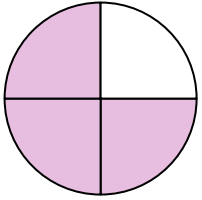
9. _____



Stelle fest, welcher Buchstabe die schattierte Fläche darstellt.

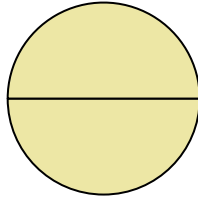
Antworten

1)



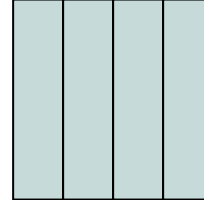
- A. one-quarter
B. three-fourths
C. two-quarters

2)




- A. two-halves
B. three-fourths
C. three-fourths

3)



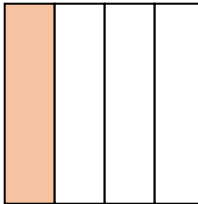
- A. one-quarter
B. three-fourths
C. two-fourths

4)



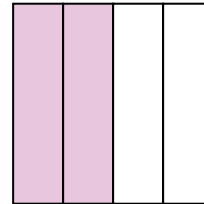
- A. three-fourths
B. one-fourth
C. one-half

5)




- A. three-quarters
B. three-fourths
C. one-fourth

6)



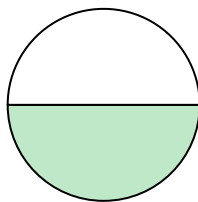
- A. two-fourths
B. one-half
C. four-quarters

7)



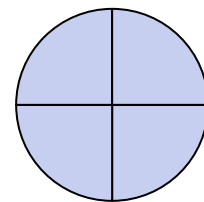
- A. one-fourth
B. two-halves
C. two-fourths

8)



- A. three-fourths
B. one-half
C. one-quarter

9)



- A. four-quarters
B. two-halves
C. three-fourths

1. **B**
2. **A**
3. **B**
4. **C**
5. **C**
6. **A**
7. **B**
8. **B**
9. **A**