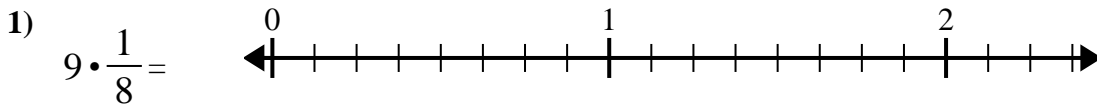
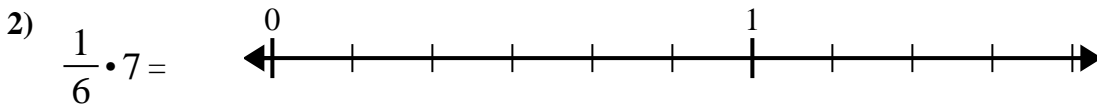




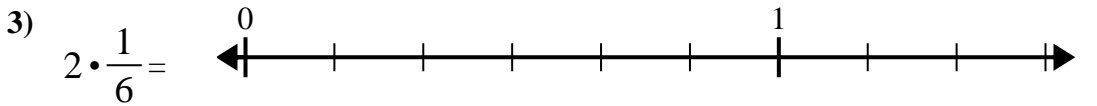
Verwenden Sie den Zahlenstrahl, um zu lösen.

**Antworten**

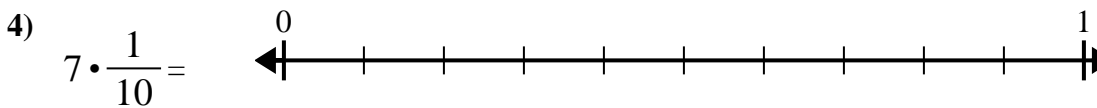
1. \_\_\_\_\_



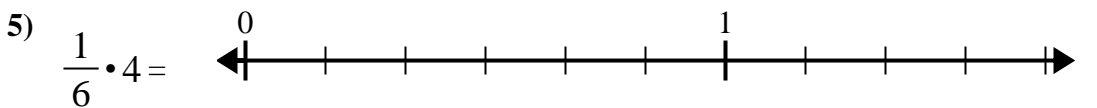
2. \_\_\_\_\_



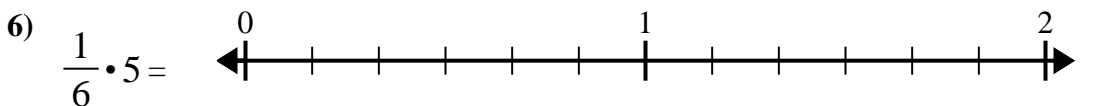
3. \_\_\_\_\_



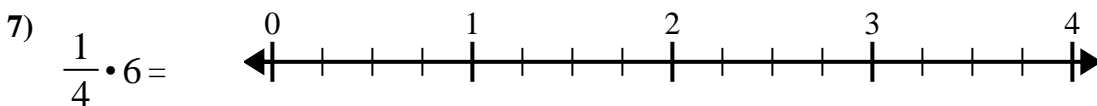
4. \_\_\_\_\_



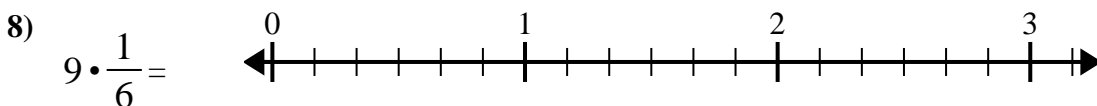
5. \_\_\_\_\_



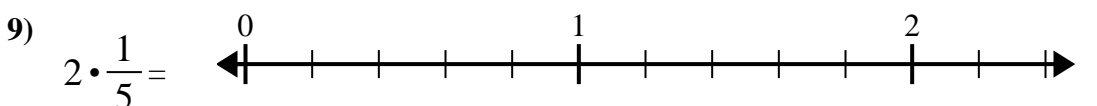
6. \_\_\_\_\_



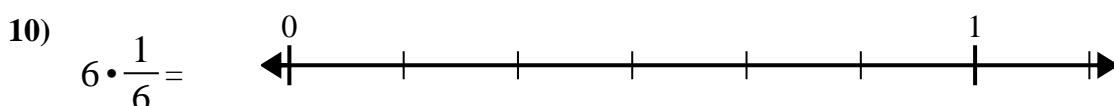
7. \_\_\_\_\_



8. \_\_\_\_\_



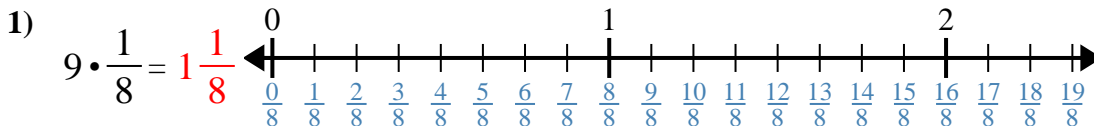
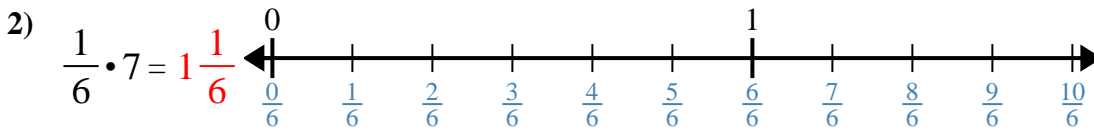
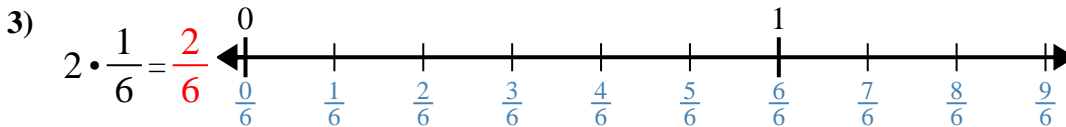
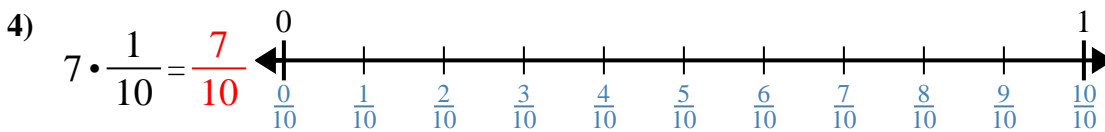
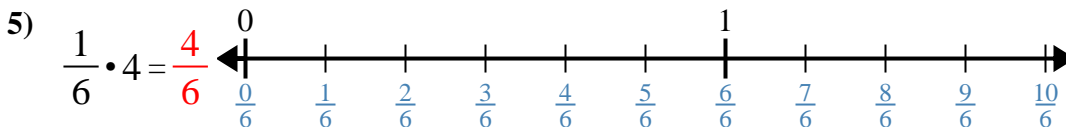
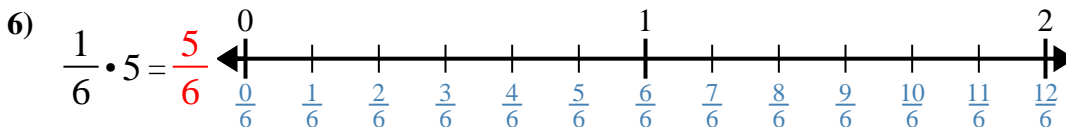
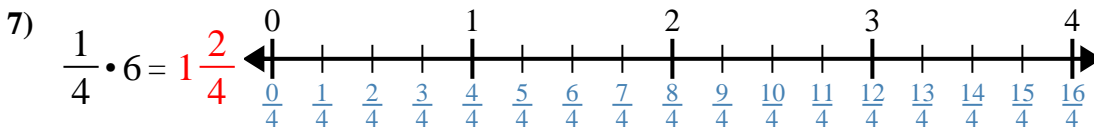
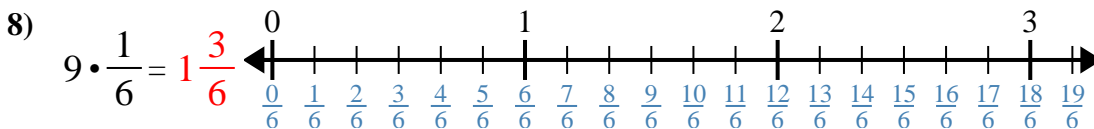
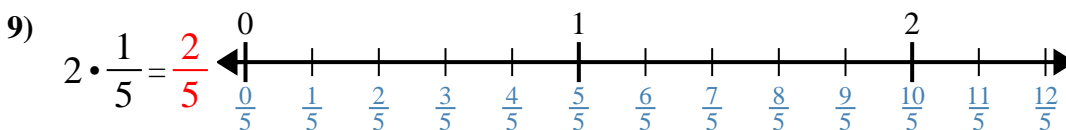
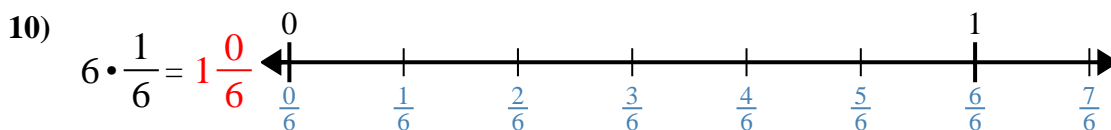
9. \_\_\_\_\_



10. \_\_\_\_\_



Verwenden Sie den Zahlenstrahl, um zu lösen.

**Antworten**1.  $1 \frac{1}{8}$ 2.  $1 \frac{1}{6}$ 3.  $\frac{2}{6}$ 4.  $\frac{7}{10}$ 5.  $\frac{4}{6}$ 6.  $\frac{5}{6}$ 7.  $1 \frac{2}{4}$ 8.  $1 \frac{3}{6}$ 9.  $\frac{2}{5}$ 10.  $1 \frac{0}{6}$



Verwenden Sie den Zahlenstrahl, um zu lösen.

$1\frac{2}{4}$

$1\frac{3}{6}$

$\frac{4}{6}$

$1\frac{1}{8}$

$\frac{7}{10}$

$\frac{2}{5}$

$\frac{5}{6}$

$1\frac{1}{6}$

$1\frac{0}{6}$

$\frac{2}{6}$

**Antworten**

1. \_\_\_\_\_

2. \_\_\_\_\_

3. \_\_\_\_\_

4. \_\_\_\_\_

5. \_\_\_\_\_

6. \_\_\_\_\_

7. \_\_\_\_\_

8. \_\_\_\_\_

9. \_\_\_\_\_

10. \_\_\_\_\_

1)  $9 \cdot \frac{1}{8} =$

2)  $\frac{1}{6} \cdot 7 =$

3)  $2 \cdot \frac{1}{6} =$

4)  $7 \cdot \frac{1}{10} =$

5)  $\frac{1}{6} \cdot 4 =$

6)  $\frac{1}{6} \cdot 5 =$

7)  $\frac{1}{4} \cdot 6 =$

8)  $9 \cdot \frac{1}{6} =$

9)  $2 \cdot \frac{1}{5} =$

10)  $6 \cdot \frac{1}{6} =$