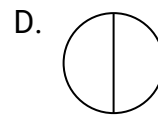
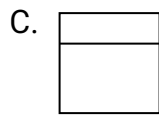
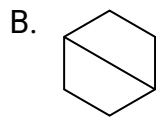
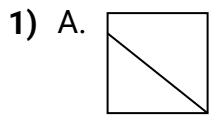


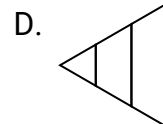
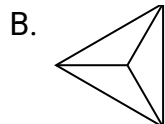
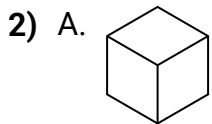


Stelle fest, welche Auswahlen die gleichen sind, damit die gezeigten geteilten Formen den gleichen Anteil haben. Wenn es keine gibt, schreibe 'keine'.

Antworten

1. _____

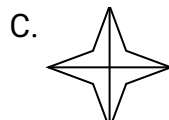
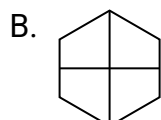
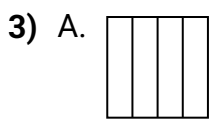
2. _____



3. _____

4. _____

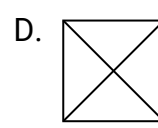
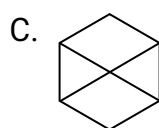
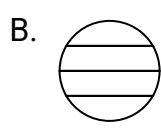
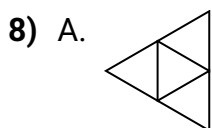
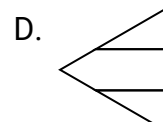
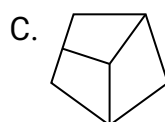
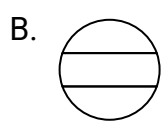
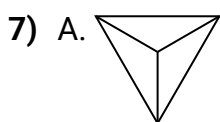
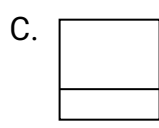
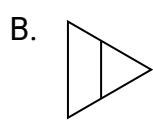
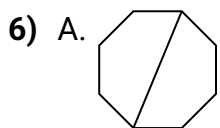
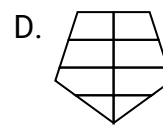
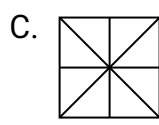
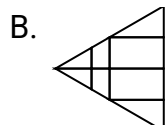
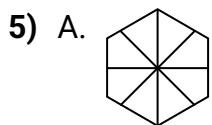
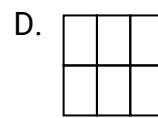
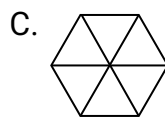
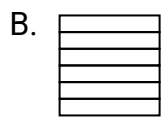
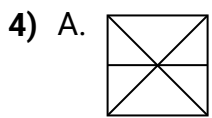
5. _____



6. _____

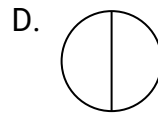
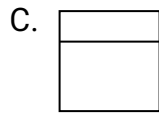
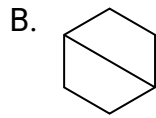
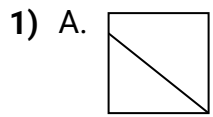
7. _____

8. _____

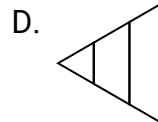
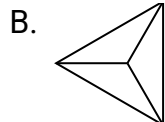
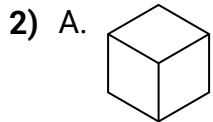




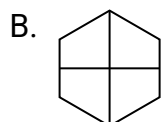
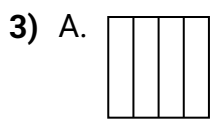
Stelle fest, welche Auswahlen die gleichen sind, damit die gezeigten geteilten Formen den gleichen Anteil haben. Wenn es keine gibt, schreibe 'keine'.

Antworten

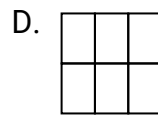
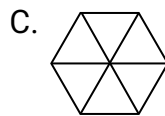
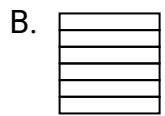
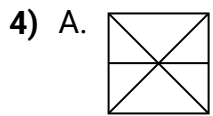
1. **B,D**



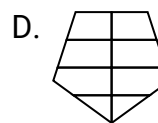
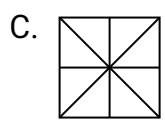
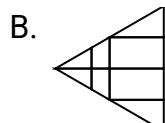
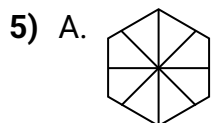
2. **A,B**



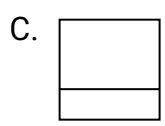
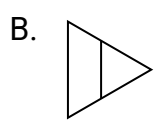
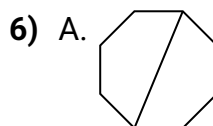
3. **A,B,C**



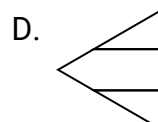
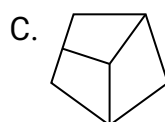
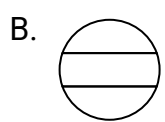
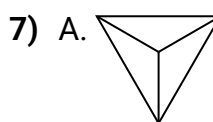
4. **B,C,D**



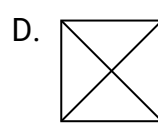
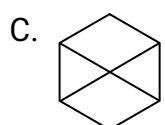
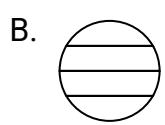
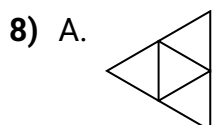
5. **C**



6. **A,D**



7. **A**



8. **A,D**