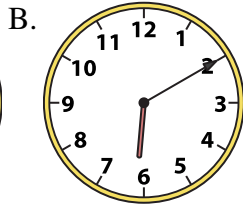
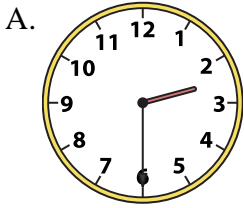
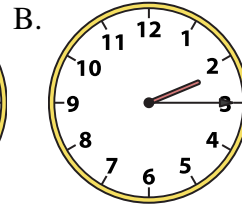
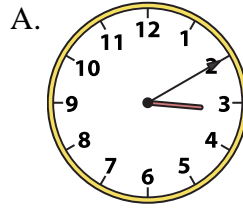


**Löse jede Aufgabe.****Antworten**


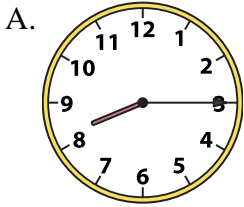
1) 2:30



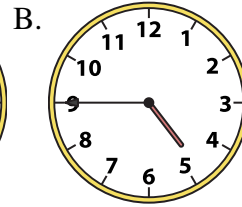
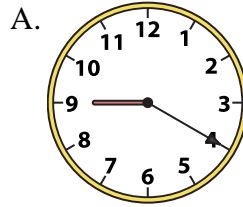
2) 2:15




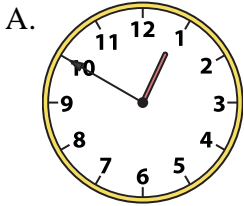
3) 8:15



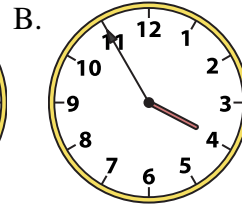
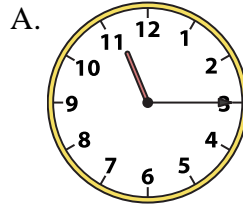
4) 4:45



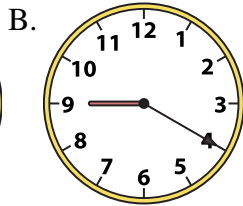
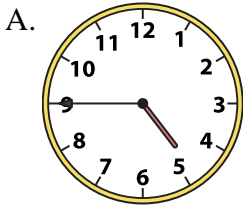
5) 10:00



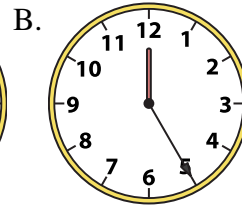
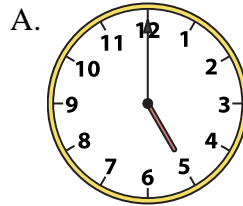
6) 11:15




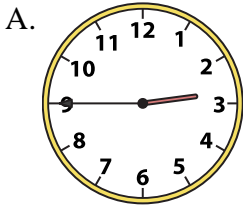
7) 4:45



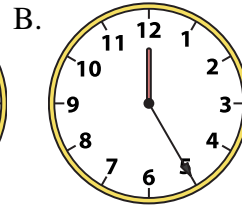
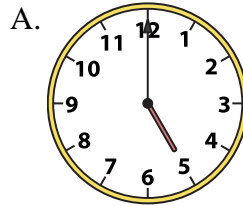
8) 5:00




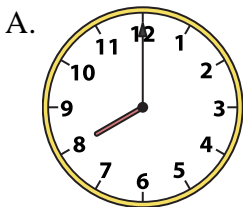
9) 2:45



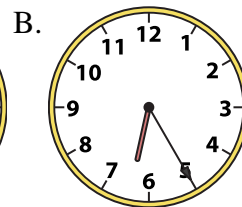
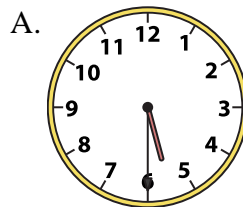
10) 5:00



11) 8:00



12) 5:30



1. _____
2. _____
3. _____
4. _____
5. _____
6. _____
7. _____
8. _____
9. _____
10. _____
11. _____
12. _____




Löse jede Aufgabe.

Antworten

1) 2:30

A.




B.




2) 2:15

A.




B.



3) 8:15

A.



B.




4) 4:45

A.




B.




5) 10:00

A.




B.




6) 11:15

A.




B.




7) 4:45

A.




B.




8) 5:00

A.




B.




9) 2:45

A.




B.




10) 5:00

A.




B.



11) 8:00

A.




B.




12) 5:30

A.



B.

1. **A** 2. **B** 3. **A** 4. **B** 5. **B** 6. **A** 7. **A** 8. **A** 9. **A** 10. **A** 11. **A** 12. **A**