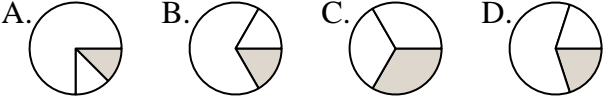

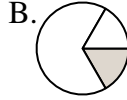
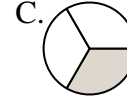
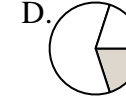
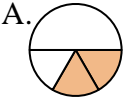
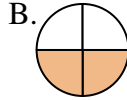

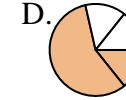
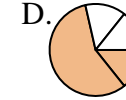

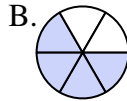
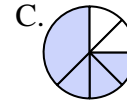
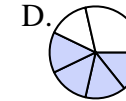
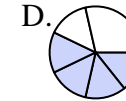


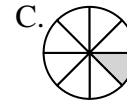
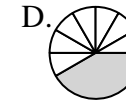
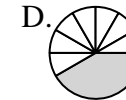
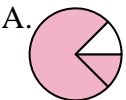

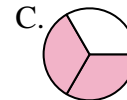
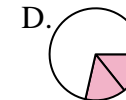
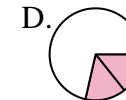
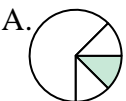
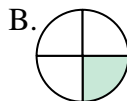
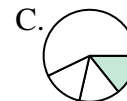
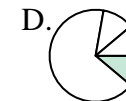
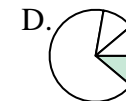


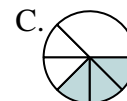



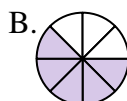
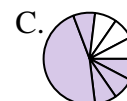



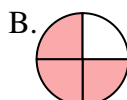
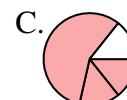
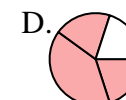
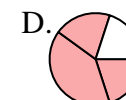


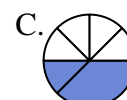




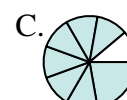
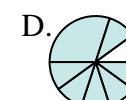
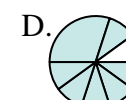



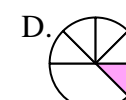
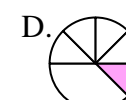




Stelle fest, welcher Buchstabe jeden Bruch darstellt.

**Antworten**


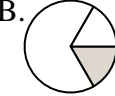


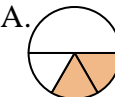
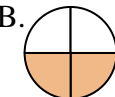


























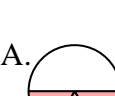
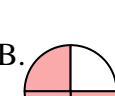











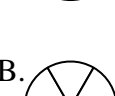


- 1) Durch welche Möglichkeit wird  $\frac{1}{3}$  dargestellt?  A.  B.  C.  D. 
- 2) Durch welche Möglichkeit wird  $\frac{2}{4}$  dargestellt?  A.  B.  C.  D. 
- 3) Durch welche Möglichkeit wird  $\frac{4}{6}$  dargestellt?  A.  B.  C.  D. 
- 4) Durch welche Möglichkeit wird  $\frac{1}{8}$  dargestellt?  A.  B.  C.  D. 
- 5) Durch welche Möglichkeit wird  $\frac{2}{3}$  dargestellt?  A.  B.  C.  D. 
- 6) Durch welche Möglichkeit wird  $\frac{1}{4}$  dargestellt?  A.  B.  C.  D. 
- 7) Durch welche Möglichkeit wird  $\frac{3}{6}$  dargestellt?  A.  B.  C.  D. 
- 8) Durch welche Möglichkeit wird  $\frac{5}{8}$  dargestellt?  A.  B.  C.  D. 
- 9) Durch welche Möglichkeit wird  $\frac{3}{4}$  dargestellt?  A.  B.  C.  D. 
- 10) Durch welche Möglichkeit wird  $\frac{2}{6}$  dargestellt?  A.  B.  C.  D. 
- 11) Durch welche Möglichkeit wird  $\frac{7}{8}$  dargestellt?  A.  B.  C.  D. 
- 12) Durch welche Möglichkeit wird  $\frac{1}{6}$  dargestellt?  A.  B.  C.  D. 

1. \_\_\_\_\_
2. \_\_\_\_\_
3. \_\_\_\_\_
4. \_\_\_\_\_
5. \_\_\_\_\_
6. \_\_\_\_\_
7. \_\_\_\_\_
8. \_\_\_\_\_
9. \_\_\_\_\_
10. \_\_\_\_\_
11. \_\_\_\_\_
12. \_\_\_\_\_



Stelle fest, welcher Buchstabe jeden Bruch darstellt.

**Antworten**

- 1) Durch welche Möglichkeit wird  $\frac{1}{3}$  dargestellt? A.  B.  C.  D. 
- 2) Durch welche Möglichkeit wird  $\frac{2}{4}$  dargestellt? A.  B.  C.  D. 
- 3) Durch welche Möglichkeit wird  $\frac{4}{6}$  dargestellt? A.  B.  C.  D. 
- 4) Durch welche Möglichkeit wird  $\frac{1}{8}$  dargestellt? A.  B.  C.  D. 
- 5) Durch welche Möglichkeit wird  $\frac{2}{3}$  dargestellt? A.  B.  C.  D. 
- 6) Durch welche Möglichkeit wird  $\frac{1}{4}$  dargestellt? A.  B.  C.  D. 
- 7) Durch welche Möglichkeit wird  $\frac{3}{6}$  dargestellt? A.  B.  C.  D. 
- 8) Durch welche Möglichkeit wird  $\frac{5}{8}$  dargestellt? A.  B.  C.  D. 
- 9) Durch welche Möglichkeit wird  $\frac{3}{4}$  dargestellt? A.  B.  C.  D. 
- 10) Durch welche Möglichkeit wird  $\frac{2}{6}$  dargestellt? A.  B.  C.  D. 
- 11) Durch welche Möglichkeit wird  $\frac{7}{8}$  dargestellt? A.  B.  C.  D. 
- 12) Durch welche Möglichkeit wird  $\frac{1}{6}$  dargestellt? A.  B.  C.  D. 

1.     **C**
2.     **B**
3.     **B**
4.     **C**
5.     **C**
6.     **B**
7.     **A**
8.     **B**
9.     **B**
10.     **A**
11.     **B**
12.     **B**