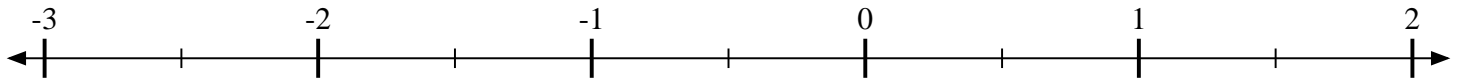
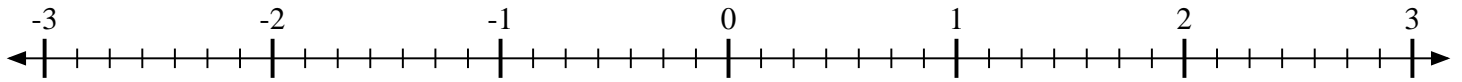


**Markiere jede beschriebene Lage, positiv oder negativ.**

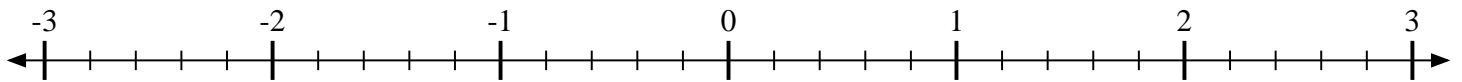
- 1) Markiere die Lage von
- $1\frac{1}{2}$



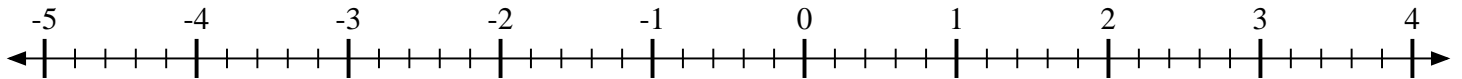
- 2) Markiere die Lage von
- $-1\frac{4}{7}$



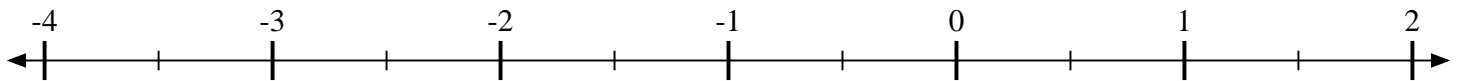
- 3) Markiere die Lage von
- $-2\frac{4}{5}$



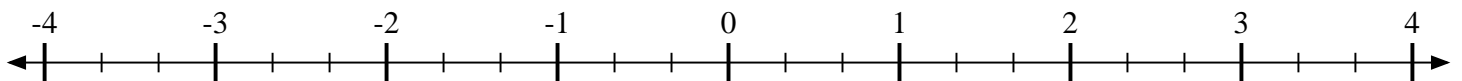
- 4) Markiere die Lage von
- $1\frac{1}{5}$



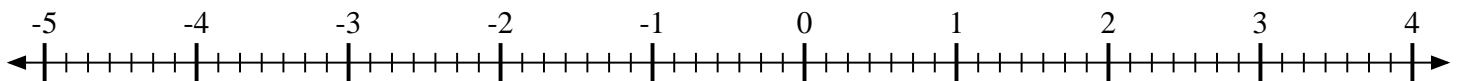
- 5) Markiere die Lage von
- $-3\frac{1}{2}$



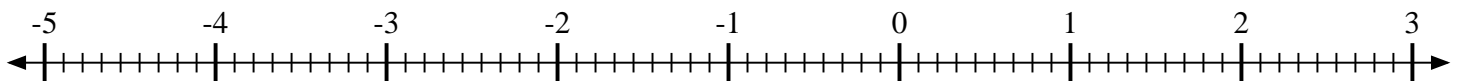
- 6) Markiere die Lage von
- $-2\frac{2}{3}$



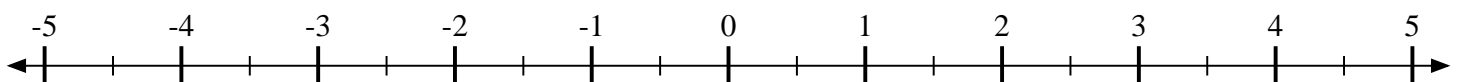
- 7) Markiere die Lage von
- $-1\frac{3}{7}$



- 8) Markiere die Lage von
- $-2\frac{6}{9}$



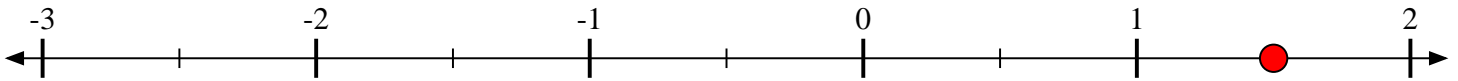
- 9) Markiere die Lage von
- $2\frac{1}{2}$



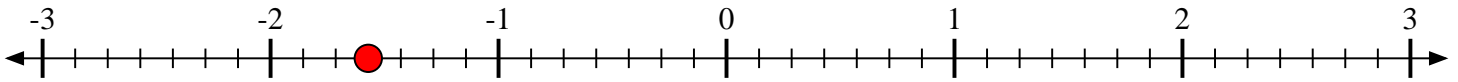


Markiere jede beschriebene Lage, positiv oder negativ.

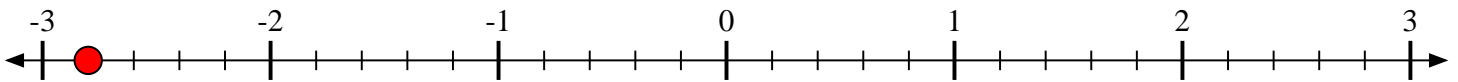
- 1) Markiere die Lage von
- $1\frac{1}{2}$



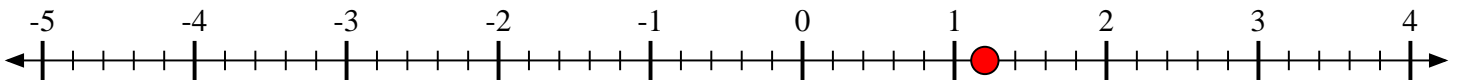
- 2) Markiere die Lage von
- $-1\frac{4}{7}$



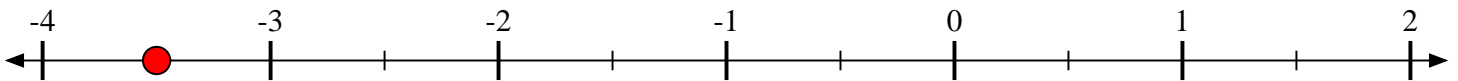
- 3) Markiere die Lage von
- $-2\frac{4}{5}$



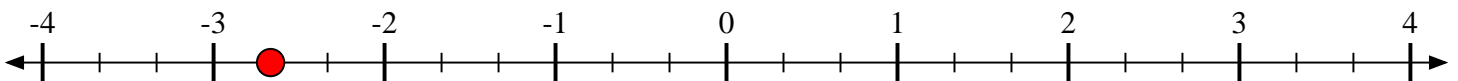
- 4) Markiere die Lage von
- $1\frac{1}{5}$



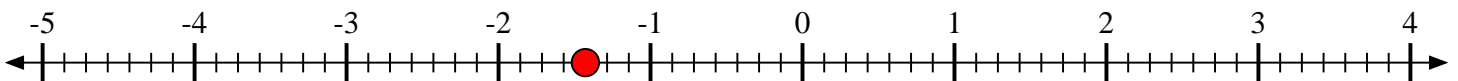
- 5) Markiere die Lage von
- $-3\frac{1}{2}$



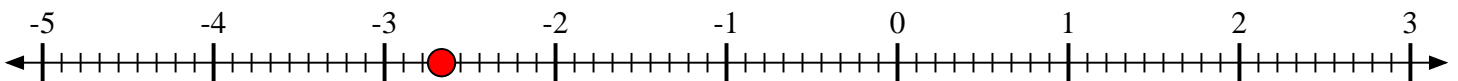
- 6) Markiere die Lage von
- $-2\frac{2}{3}$



- 7) Markiere die Lage von
- $-1\frac{3}{7}$



- 8) Markiere die Lage von
- $-2\frac{6}{9}$



- 9) Markiere die Lage von
- $2\frac{1}{2}$

