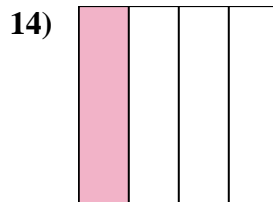
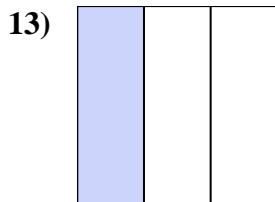
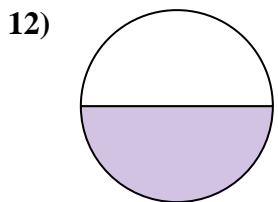
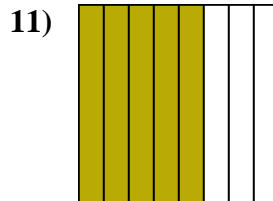
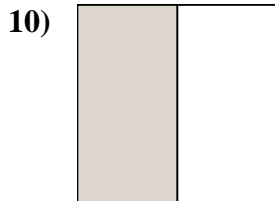
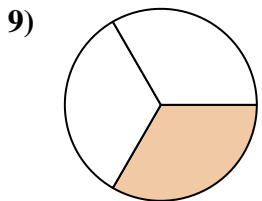
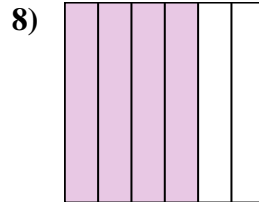
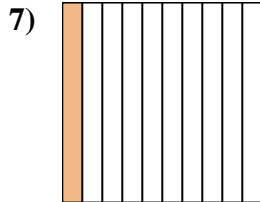
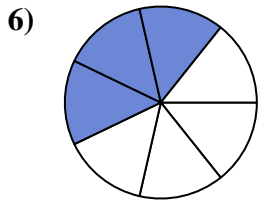
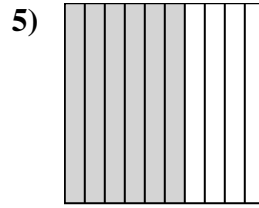
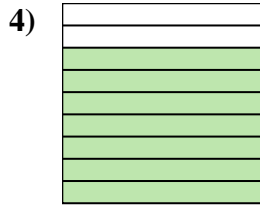
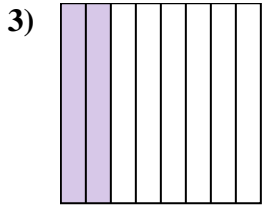
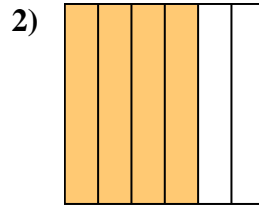
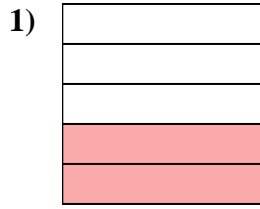
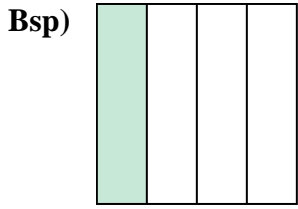




Schreiben Sie den schattierten Betrag in Wortform.



**Antworten**

Bsp. ein Viertel

1. \_\_\_\_\_

2. \_\_\_\_\_

3. \_\_\_\_\_

4. \_\_\_\_\_

5. \_\_\_\_\_

6. \_\_\_\_\_

7. \_\_\_\_\_

8. \_\_\_\_\_

9. \_\_\_\_\_

10. \_\_\_\_\_

11. \_\_\_\_\_

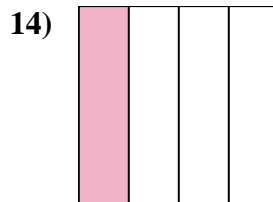
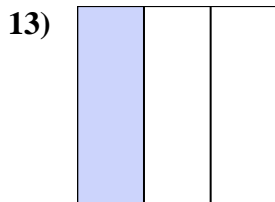
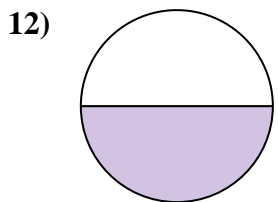
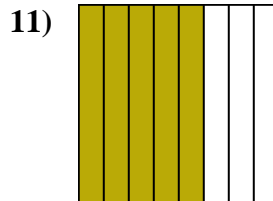
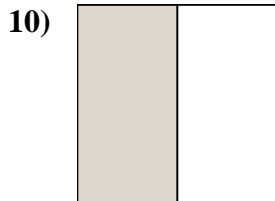
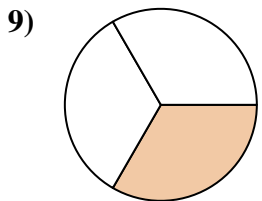
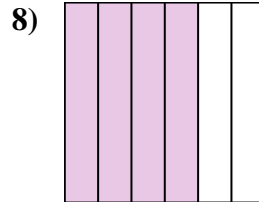
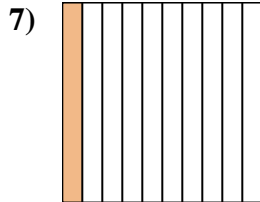
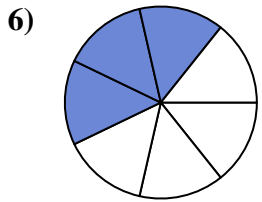
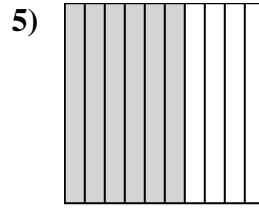
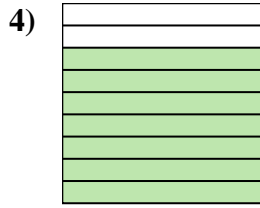
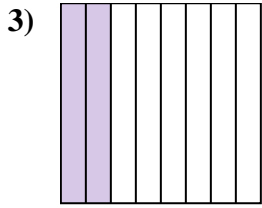
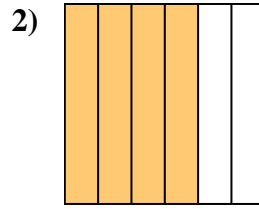
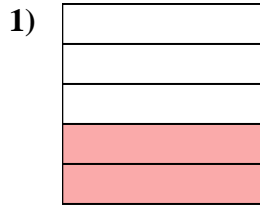
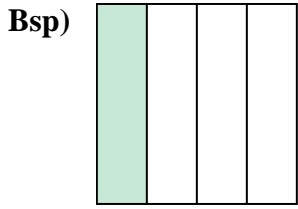
12. \_\_\_\_\_

13. \_\_\_\_\_

14. \_\_\_\_\_



Schreiben Sie den schattierten Betrag in Wortform.



**Antworten**

Bsp. ein Viertel

1. zwei Fünftel

2. vier-sechstel

3. zwei Achtel

4. sieben Neuntel

5. sechs Zehntel

6. drei Siebtel

7. ein Zehntel

8. vier-sechstel

9. ein Drittel

10. eine Hälfte

11. fünf Achtel

12. eine Hälfte

13. ein Drittel

14. ein Viertel