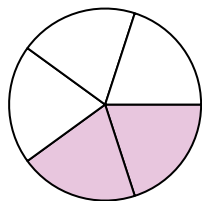





Schreiben Sie den schattierten Betrag in Wortform.

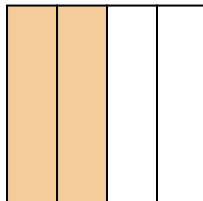
Bsp)



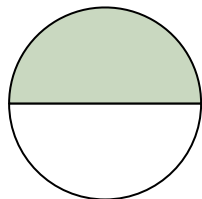
1)



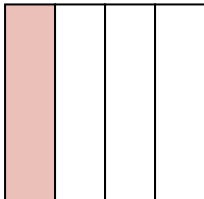
2)



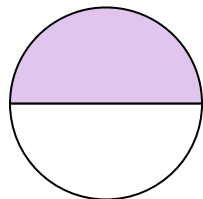
3)



4)




5)



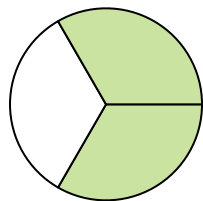
6)



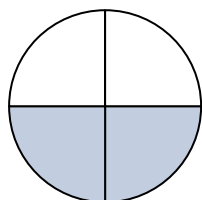
7)



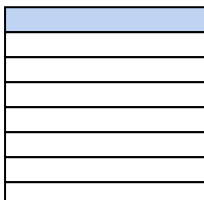
8)




9)



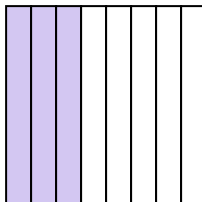
10)



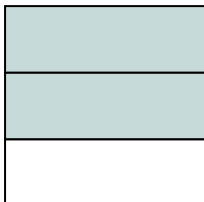
11)



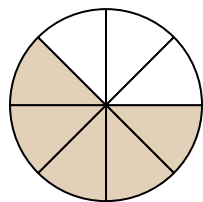
12)



13)



14)

**Antworten**Bsp. zwei Fünftel

1. _____

2. _____

3. _____

4. _____

5. _____

6. _____

7. _____

8. _____

9. _____

10. _____

11. _____

12. _____

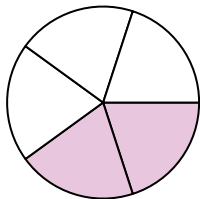
13. _____

14. _____




Schreiben Sie den schattierten Betrag in Wortform.

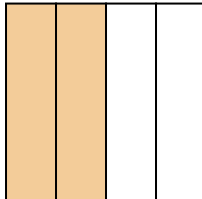
Bsp)



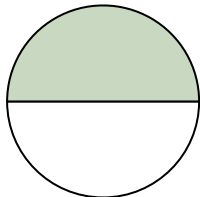
1)



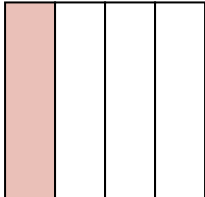
2)



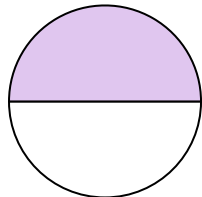
3)



4)



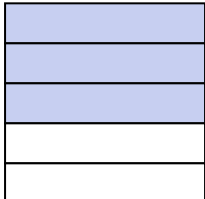
5)



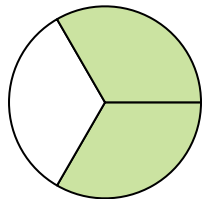
6)



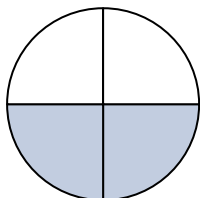
7)



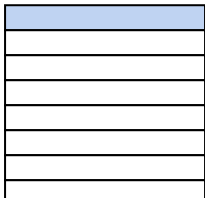
8)




9)



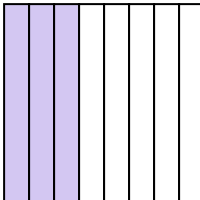
10)




11)



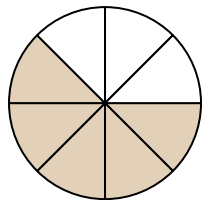
12)



13)



14)

**Antworten**Bsp. zwei Fünftel1. drei Fünftel2. zwei Viertel3. ein Halb4. ein Viertel5. ein Halb6. ein Halb7. drei Fünftel8. zwei Drittel9. zwei Viertel10. ein Achtel11. zwei Drittel12. drei Achtel13. zwei Drittel14. fünf Achtel