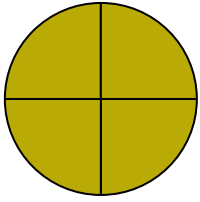


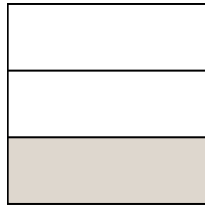


Schreiben Sie den schattierten Betrag als Bruch.

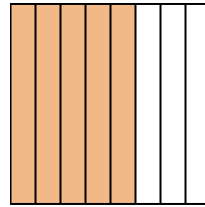
Bsp)



1)



2)



**Antworten**

Bsp.  $\frac{4}{4}$

1. \_\_\_\_\_

2. \_\_\_\_\_

3. \_\_\_\_\_

4. \_\_\_\_\_

5. \_\_\_\_\_

6. \_\_\_\_\_

7. \_\_\_\_\_

8. \_\_\_\_\_

9. \_\_\_\_\_

10. \_\_\_\_\_

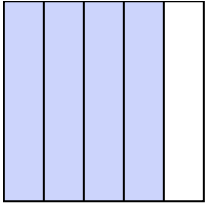
11. \_\_\_\_\_

12. \_\_\_\_\_

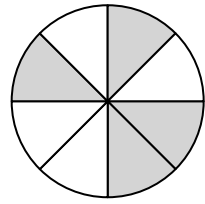
13. \_\_\_\_\_

14. \_\_\_\_\_

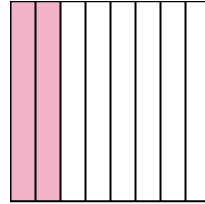
3)




4)



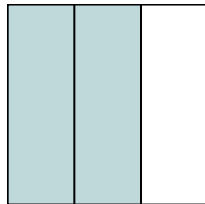
5)



6)




7)




8)



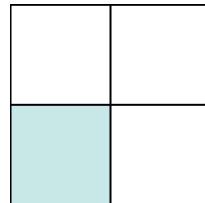
9)




10)



11)



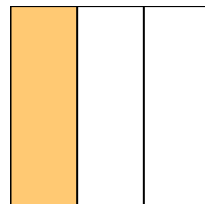
12)



13)



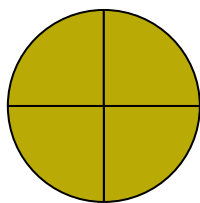
14)






Schreiben Sie den schattierten Betrag als Bruch.

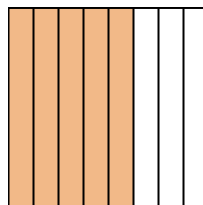
Bsp)



1)



2)



**Antworten**

Bsp.  $\frac{4}{4}$

1.  $\frac{1}{3}$

2.  $\frac{5}{8}$

3.  $\frac{4}{5}$

4.  $\frac{4}{8}$

5.  $\frac{2}{8}$

6.  $\frac{1}{2}$

7.  $\frac{2}{3}$

8.  $\frac{5}{5}$

9.  $\frac{2}{4}$

10.  $\frac{1}{2}$

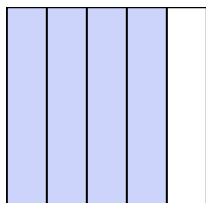
11.  $\frac{1}{4}$

12.  $\frac{2}{2}$

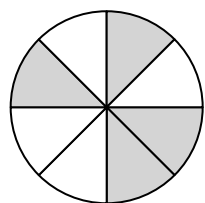
13.  $\frac{1}{5}$

14.  $\frac{1}{3}$

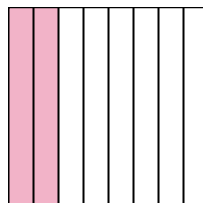
3)




4)



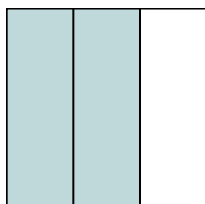
5)



6)




7)




8)



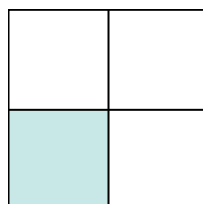
9)




10)



11)



12)



13)



14)

