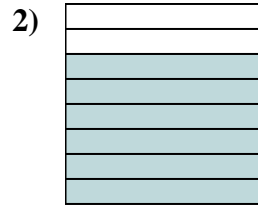
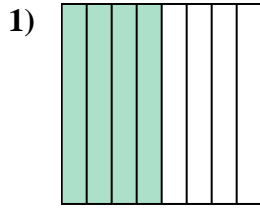
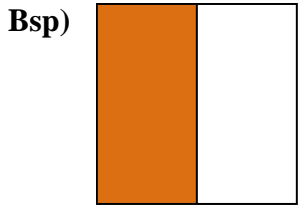




Schreiben Sie den schattierten Betrag als Bruch.

Antworten



Bsp. $\frac{1}{2}$

1. _____

2. _____

3. _____

4. _____

5. _____

6. _____

7. _____

8. _____

9. _____

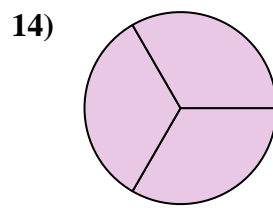
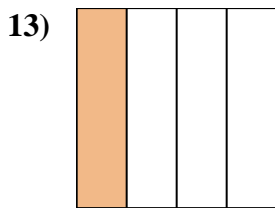
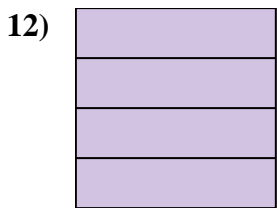
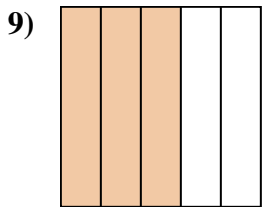
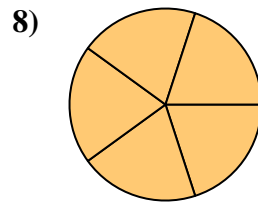
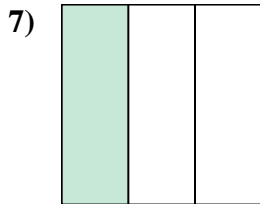
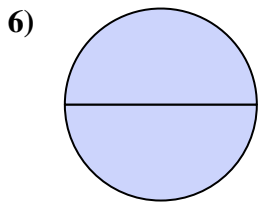
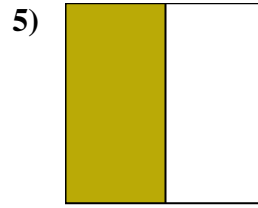
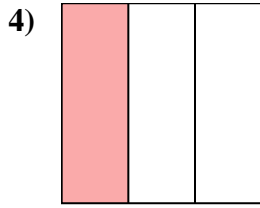
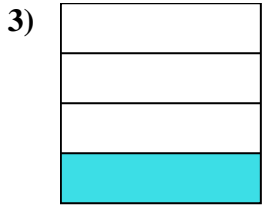
10. _____

11. _____

12. _____

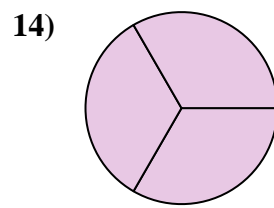
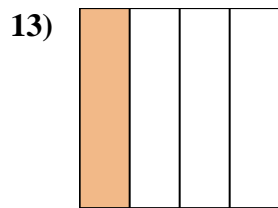
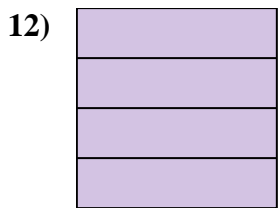
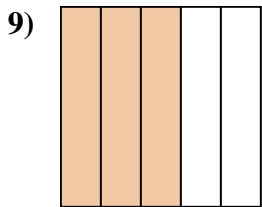
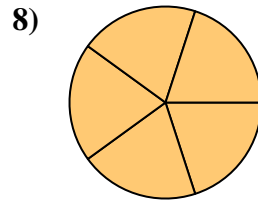
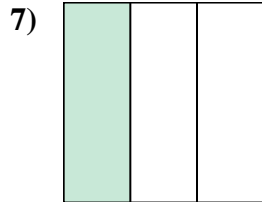
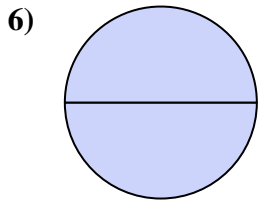
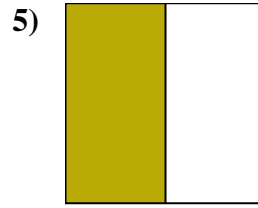
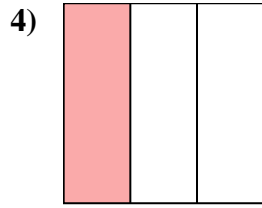
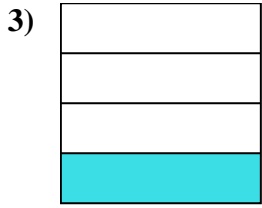
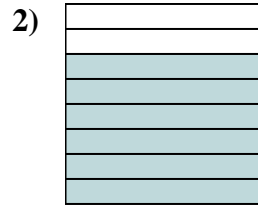
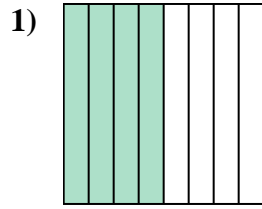
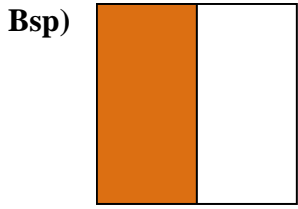
13. _____

14. _____





Schreiben Sie den schattierten Betrag als Bruch.

**Antworten**Bsp. $\frac{1}{2}$ 1. $\frac{4}{8}$ 2. $\frac{6}{8}$ 3. $\frac{1}{4}$ 4. $\frac{1}{3}$ 5. $\frac{1}{2}$ 6. $\frac{2}{2}$ 7. $\frac{1}{3}$ 8. $\frac{5}{5}$ 9. $\frac{3}{5}$ 10. $\frac{3}{5}$ 11. $\frac{7}{8}$ 12. $\frac{4}{4}$ 13. $\frac{1}{4}$ 14. $\frac{3}{3}$