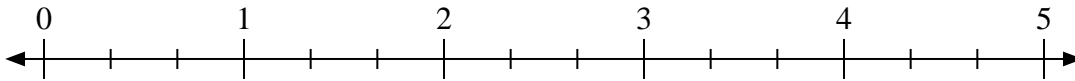




Benutze den Zahlenstrahl um die Aufgabe zu lösen.


**Antworten**

1)  $2 : \frac{2}{3}$



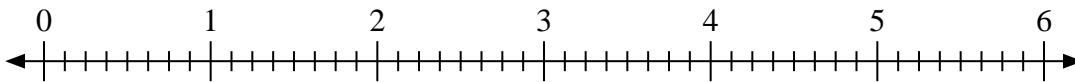
1. \_\_\_\_\_

2)  $2 : \frac{1}{3}$



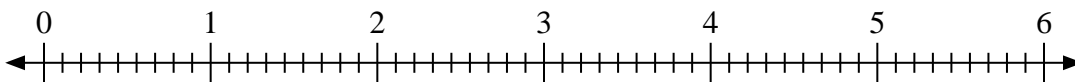
2. \_\_\_\_\_

3)  $4 : \frac{3}{8}$



3. \_\_\_\_\_

4)  $6 : \frac{8}{9}$



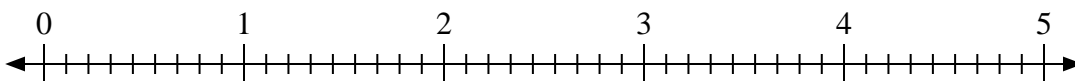
4. \_\_\_\_\_

5)  $2 : \frac{1}{2}$



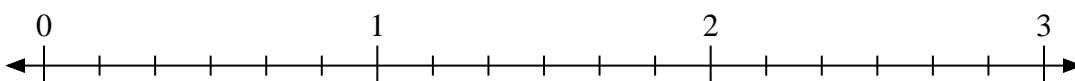
5. \_\_\_\_\_

6)  $3 : \frac{8}{9}$



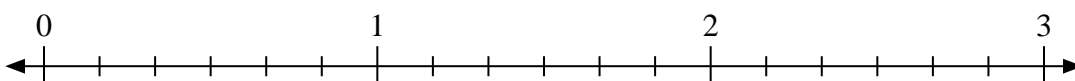
6. \_\_\_\_\_

7)  $2 : \frac{3}{6}$



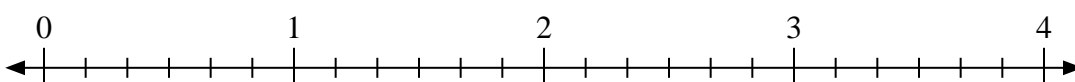
7. \_\_\_\_\_

8)  $2 : \frac{4}{6}$



8. \_\_\_\_\_

9)  $3 : \frac{5}{6}$



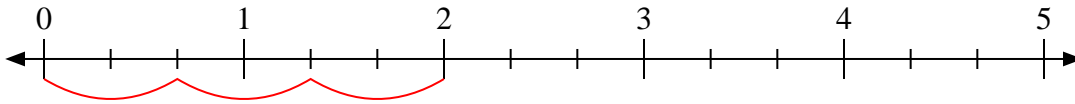
9. \_\_\_\_\_



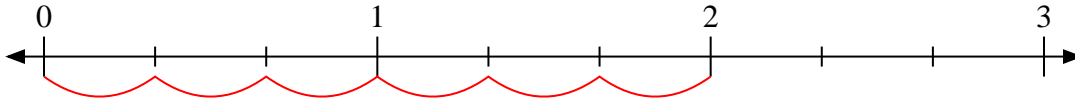
Benutze den Zahlenstrahl um die Aufgabe zu lösen.

**Antworten**

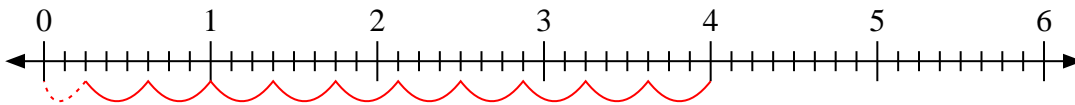
1)  $2:\frac{2}{3}$

1. 3

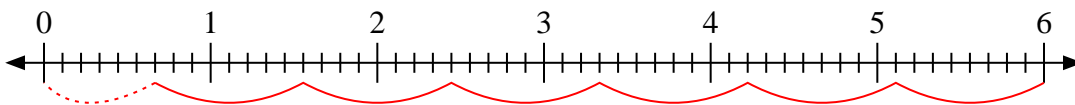
2)  $2:\frac{1}{3}$

2. 6

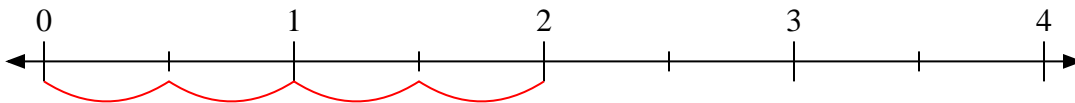
3)  $4:\frac{3}{8}$

3.  $10\frac{2}{3}$ 

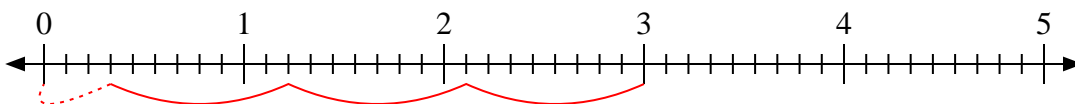
4)  $6:\frac{8}{9}$

4.  $6\frac{6}{8}$ 

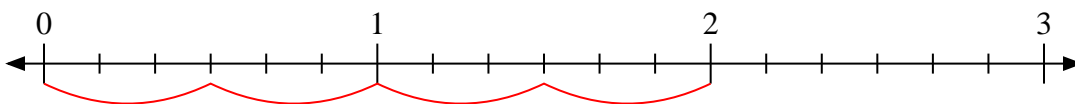
5)  $2:\frac{1}{2}$

5. 4

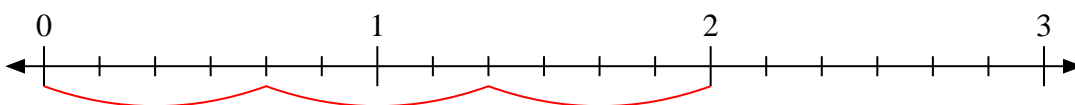
6)  $3:\frac{8}{9}$

6.  $3\frac{3}{8}$ 

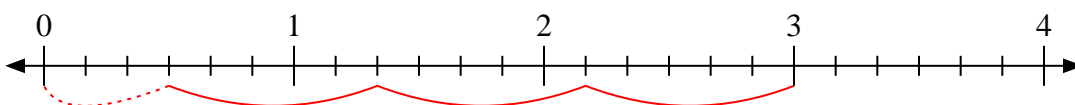
7)  $2:\frac{3}{6}$

7. 4

8)  $2:\frac{4}{6}$

8. 3

9)  $3:\frac{5}{6}$

9.  $3\frac{3}{5}$