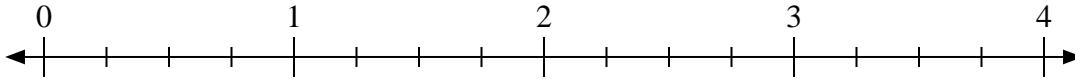




Benutze den Zahlenstrahl um die Aufgabe zu lösen.

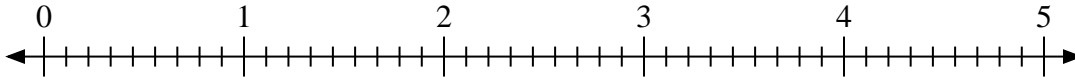
**Antworten**

1)  $4:\frac{3}{4}$



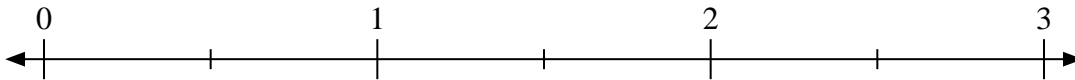
1. \_\_\_\_\_

2)  $2:\frac{2}{9}$



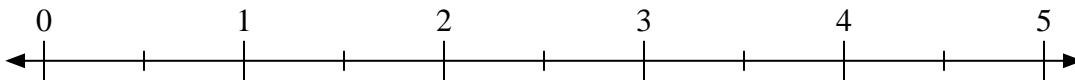
2. \_\_\_\_\_

3)  $3:\frac{1}{2}$



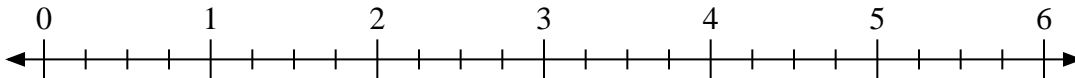
3. \_\_\_\_\_

4)  $5:\frac{1}{2}$



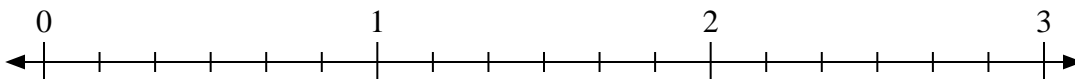
4. \_\_\_\_\_

5)  $4:\frac{2}{4}$



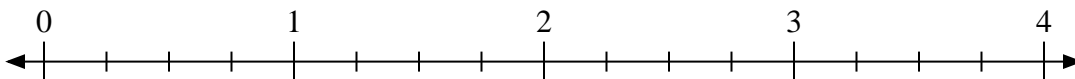
5. \_\_\_\_\_

6)  $2:\frac{1}{6}$



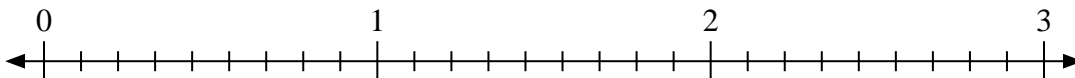
6. \_\_\_\_\_

7)  $3:\frac{3}{4}$



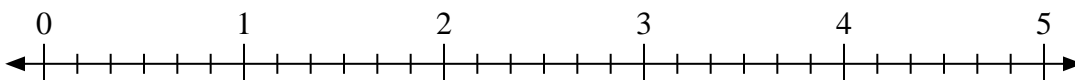
7. \_\_\_\_\_

8)  $2:\frac{7}{9}$



8. \_\_\_\_\_

9)  $3:\frac{2}{6}$

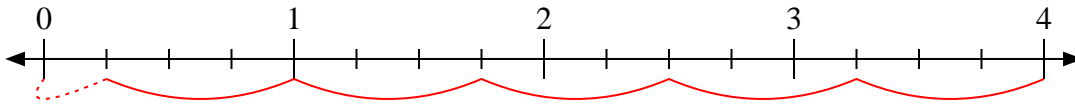


9. \_\_\_\_\_

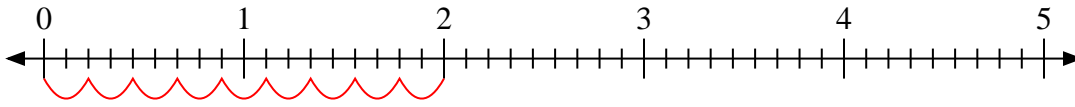


Benutze den Zahlenstrahl um die Aufgabe zu lösen.

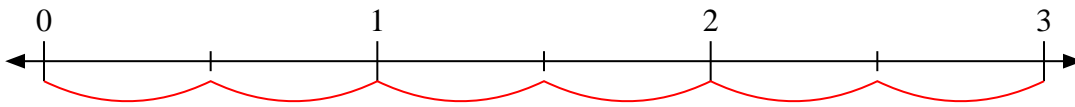
1)  $4:\frac{3}{4}$



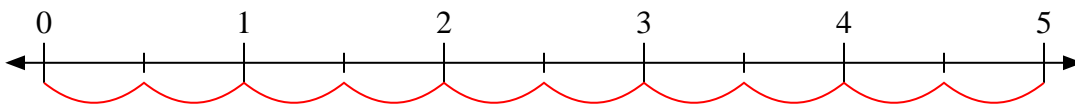
2)  $2:\frac{2}{9}$



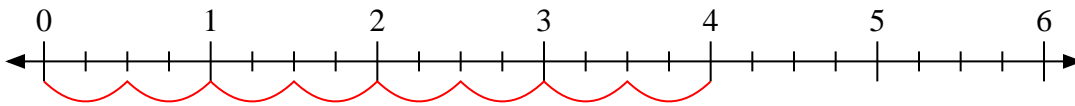
3)  $3:\frac{1}{2}$



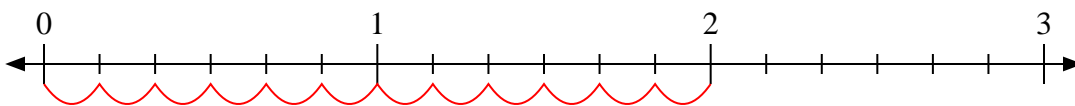
4)  $5:\frac{1}{2}$



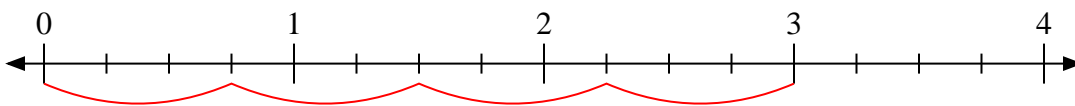
5)  $4:\frac{2}{4}$



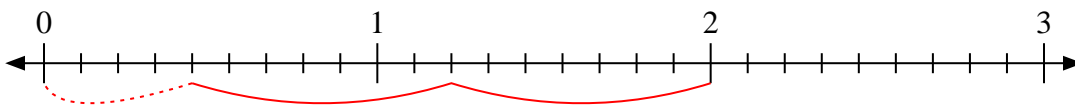
6)  $2:\frac{1}{6}$



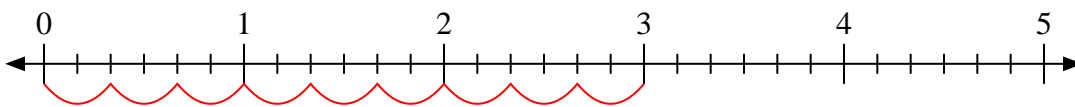
7)  $3:\frac{3}{4}$



8)  $2:\frac{7}{9}$



9)  $3:\frac{2}{6}$

**Antworten**

1.  $5\frac{1}{3}$

2.  $9$

3.  $6$

4.  $10$

5.  $8$

6.  $12$

7.  $4$

8.  $2\frac{4}{7}$

9.  $9$