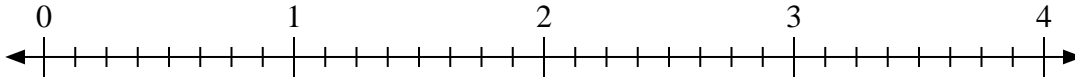




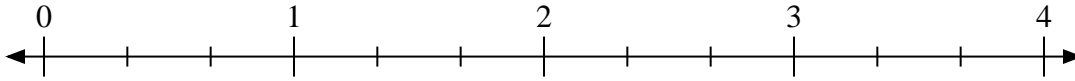
Benutze den Zahlenstrahl um die Aufgabe zu lösen.

**Antworten**

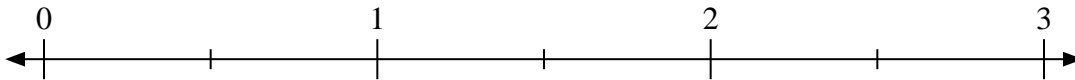
1)  $2:\frac{1}{8}$



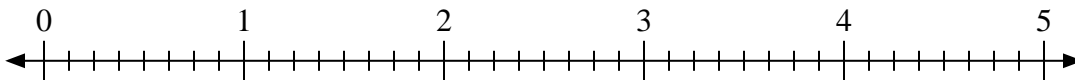
2)  $2:\frac{2}{3}$



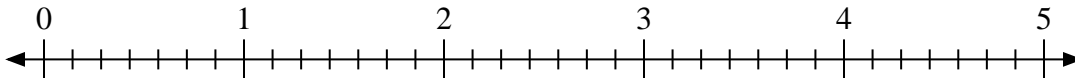
3)  $2:\frac{1}{2}$



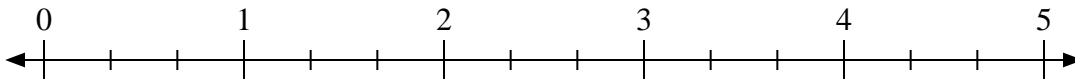
4)  $3:\frac{5}{8}$



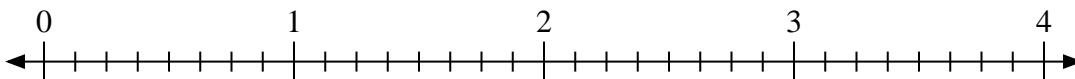
5)  $2:\frac{6}{7}$



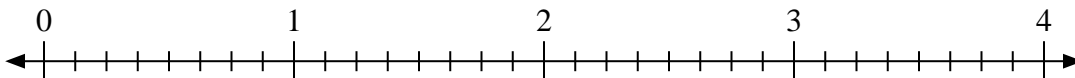
6)  $4:\frac{1}{3}$



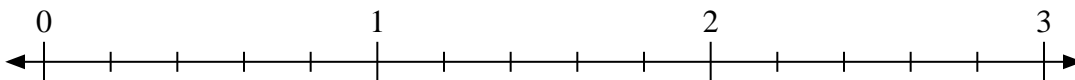
7)  $2:\frac{3}{8}$



8)  $2:\frac{2}{8}$



9)  $2:\frac{3}{5}$



1. \_\_\_\_\_

2. \_\_\_\_\_

3. \_\_\_\_\_

4. \_\_\_\_\_

5. \_\_\_\_\_

6. \_\_\_\_\_

7. \_\_\_\_\_

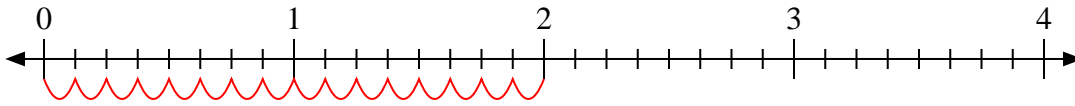
8. \_\_\_\_\_

9. \_\_\_\_\_

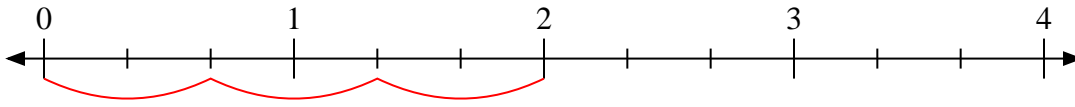


Benutze den Zahlenstrahl um die Aufgabe zu lösen.

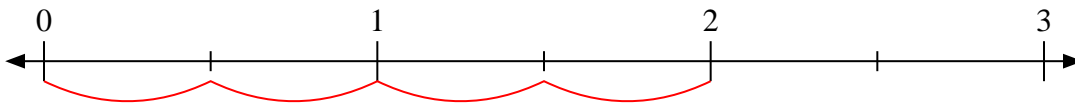
1)  $2:\frac{1}{8}$



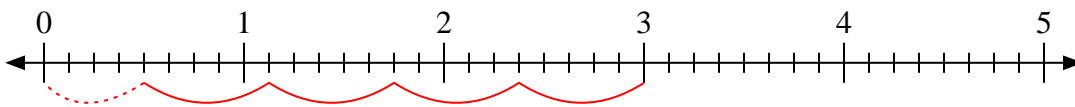
2)  $2:\frac{2}{3}$



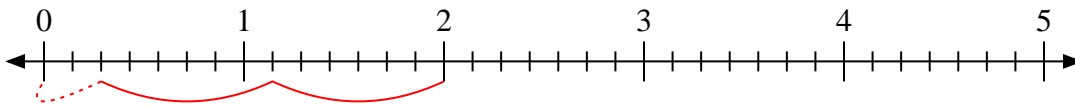
3)  $2:\frac{1}{2}$



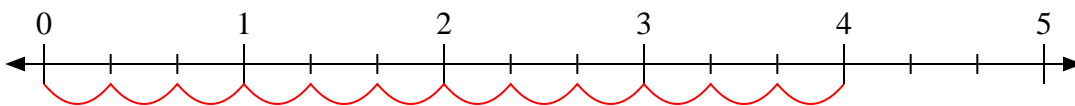
4)  $3:\frac{5}{8}$



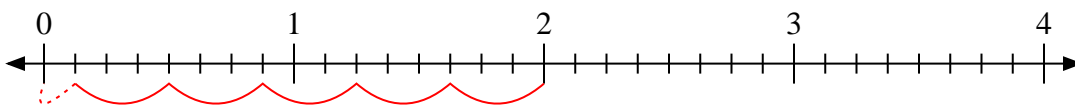
5)  $2:\frac{6}{7}$



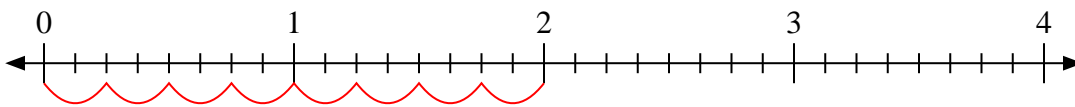
6)  $4:\frac{1}{3}$



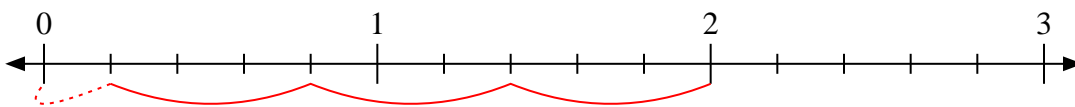
7)  $2:\frac{3}{8}$



8)  $2:\frac{2}{8}$



9)  $2:\frac{3}{5}$

**Antworten**1. **16**2. **3**3. **4**4.  **$4\frac{4}{5}$** 5.  **$2\frac{2}{6}$** 6. **12**7.  **$5\frac{1}{3}$** 8. **8**9.  **$3\frac{1}{3}$**