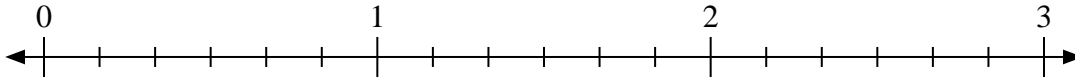




Benutze den Zahlenstrahl um die Aufgabe zu lösen.

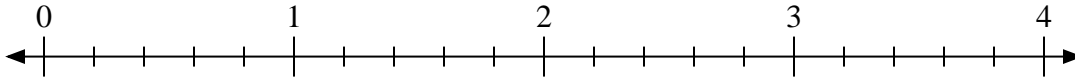
Antworten

1) $3:\frac{3}{6}$



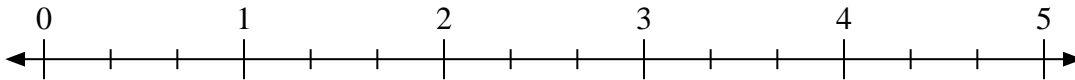
1. _____

2) $2:\frac{4}{5}$



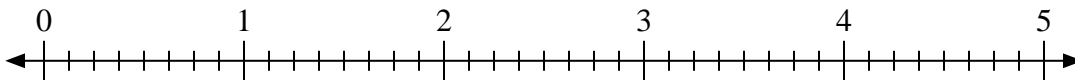
2. _____

3) $5:\frac{1}{3}$



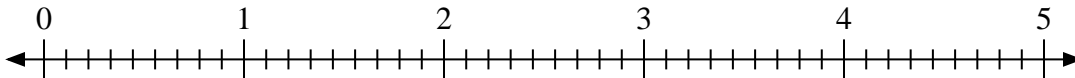
3. _____

4) $3:\frac{5}{8}$



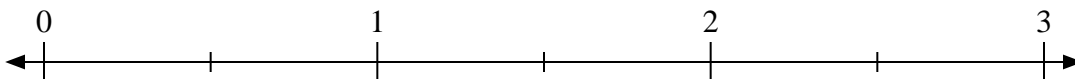
4. _____

5) $3:\frac{7}{9}$



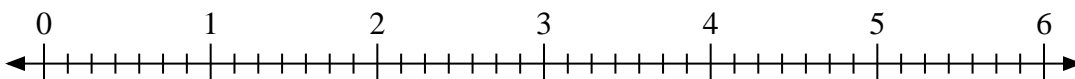
5. _____

6) $3:\frac{1}{2}$



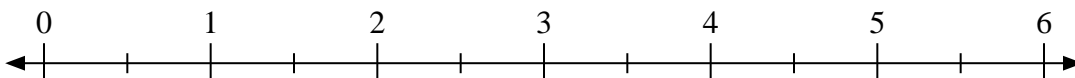
6. _____

7) $5:\frac{3}{7}$



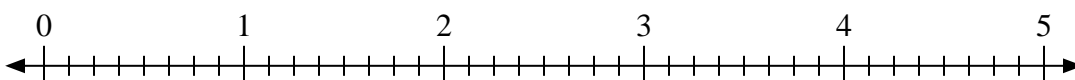
7. _____

8) $5:\frac{1}{2}$



8. _____

9) $4:\frac{4}{8}$

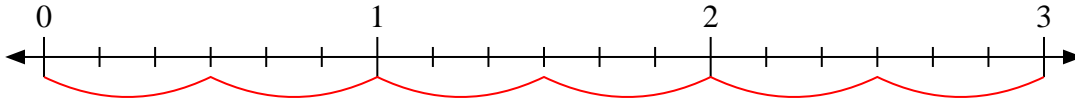


9. _____

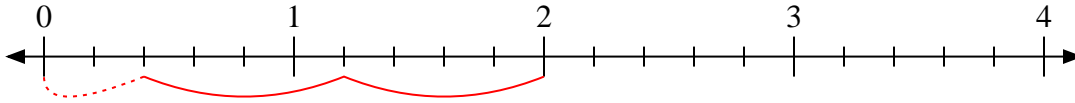


Benutze den Zahlenstrahl um die Aufgabe zu lösen.

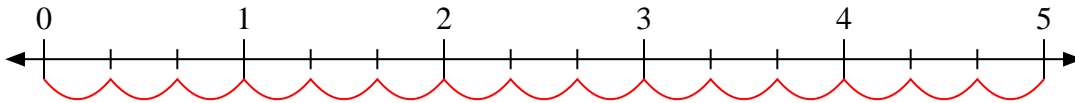
1) $3:\frac{3}{6}$



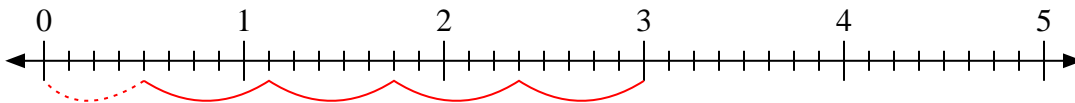
2) $2:\frac{4}{5}$



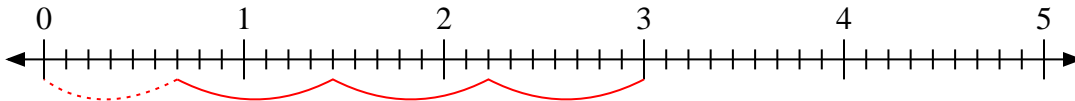
3) $5:\frac{1}{3}$



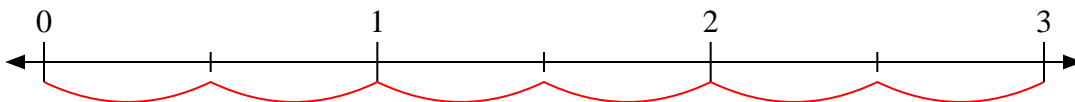
4) $3:\frac{5}{8}$



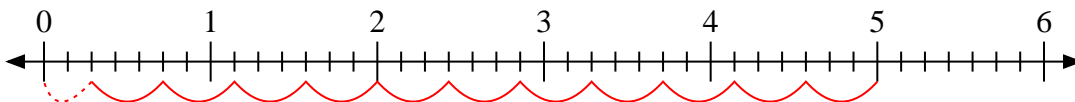
5) $3:\frac{7}{9}$



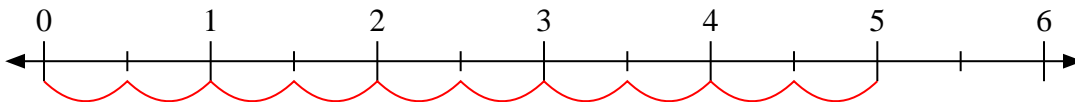
6) $3:\frac{1}{2}$



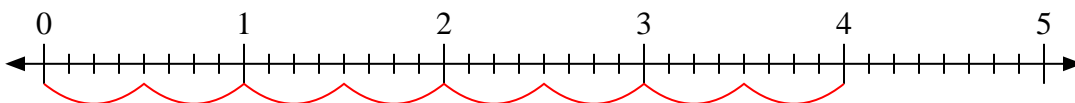
7) $5:\frac{3}{7}$



8) $5:\frac{1}{2}$



9) $4:\frac{4}{8}$

**Antworten**1. 62. $2\frac{2}{4}$ 3. 154. $4\frac{4}{5}$ 5. $3\frac{6}{7}$ 6. 67. $11\frac{2}{3}$ 8. 109. 8