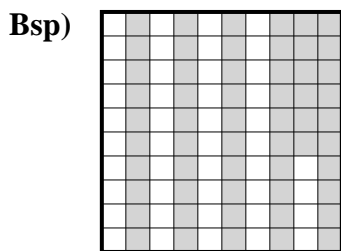
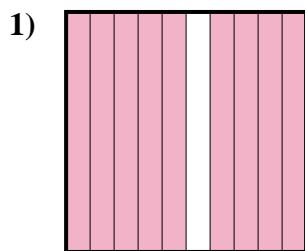




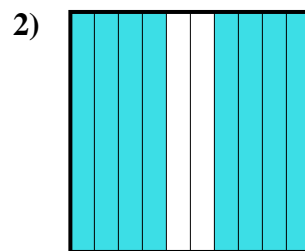
Stelle die schraffierte Fläche als Bruch, Dezimale und als Prozentangabe dar.



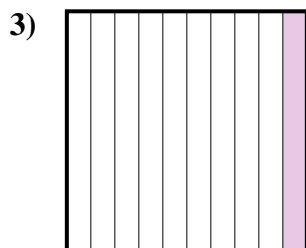
Bruch $\frac{56}{100}$
 Dezimale $0,56$
 Prozentangabe 56



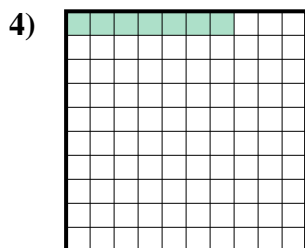
Bruch $\frac{9}{10}$
 Dezimale $0,9$
 Prozentangabe 90



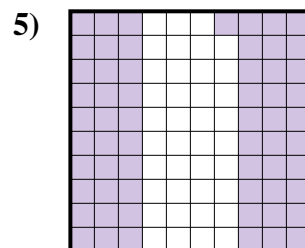
Bruch $\frac{8}{10}$
 Dezimale $0,8$
 Prozentangabe 80




Bruch $\frac{1}{10}$
 Dezimale $0,1$
 Prozentangabe 10



Bruch $\frac{7}{100}$
 Dezimale $0,07$
 Prozentangabe 7




Bruch $\frac{61}{100}$
 Dezimale $0,61$
 Prozentangabe 61




Bruch $\frac{5}{10}$
 Dezimale $0,5$
 Prozentangabe 50



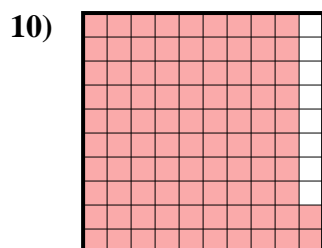
Bruch $\frac{2}{10}$
 Dezimale $0,2$
 Prozentangabe 20



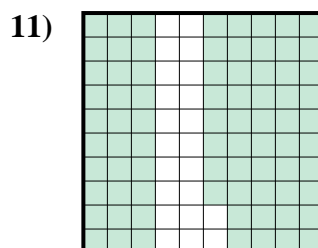
Bruch $\frac{3}{10}$
 Dezimale $0,3$
 Prozentangabe 30



Bruch $\frac{6}{10}$
 Dezimale $0,6$
 Prozentangabe 60



Bruch $\frac{92}{100}$
 Dezimale $0,92$
 Prozentangabe 92



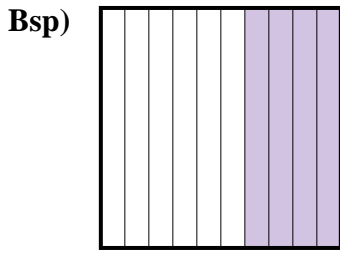
Bruch $\frac{78}{100}$
 Dezimale $0,78$
 Prozentangabe 78

Antworten

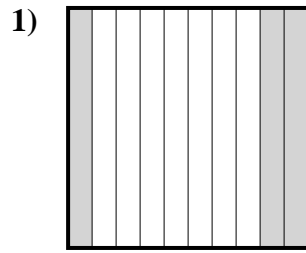
Bsp.	$\frac{56}{100}$	0,56	56%
1.	$\frac{9}{10}$	0,9	90%
2.	$\frac{8}{10}$	0,8	80%
3.	$\frac{1}{10}$	0,1	10%
4.	$\frac{7}{100}$	0,07	7%
5.	$\frac{61}{100}$	0,61	61%
6.	$\frac{5}{10}$	0,5	50%
7.	$\frac{2}{10}$	0,2	20%
8.	$\frac{3}{10}$	0,3	30%
9.	$\frac{6}{10}$	0,6	60%
10.	$\frac{92}{100}$	0,92	92%
11.	$\frac{78}{100}$	0,78	78%



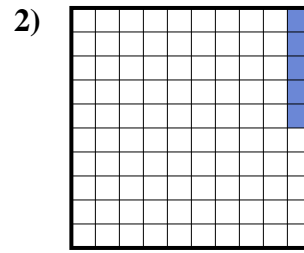
Stelle die schraffierte Fläche als Bruch, Dezimale und als Prozentangabe dar.



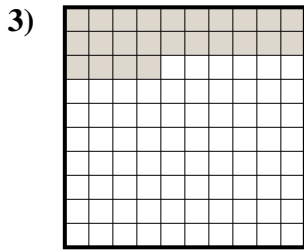
Bruch $\frac{4}{10}$
 Dezimale $0,4$
 Prozentangabe 40



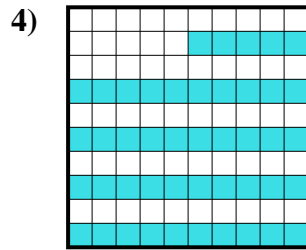
Bruch $\frac{3}{10}$
 Dezimale $0,3$
 Prozentangabe 30



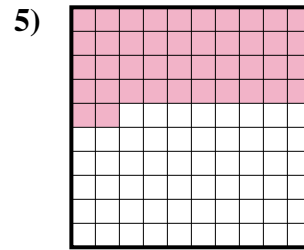
Bruch $\frac{5}{100}$
 Dezimale $0,05$
 Prozentangabe 5



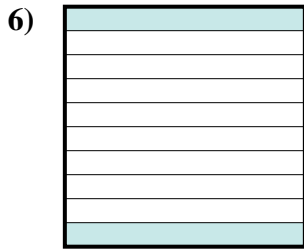
Bruch $\frac{24}{100}$
 Dezimale $0,24$
 Prozentangabe 24



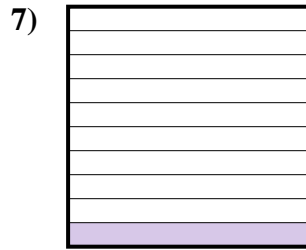
Bruch $\frac{45}{100}$
 Dezimale $0,45$
 Prozentangabe 45



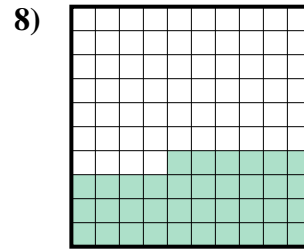
Bruch $\frac{42}{100}$
 Dezimale $0,42$
 Prozentangabe 42



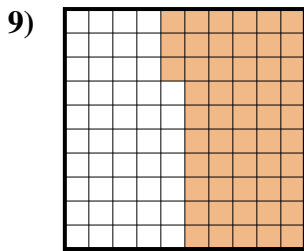
Bruch $\frac{2}{10}$
 Dezimale $0,2$
 Prozentangabe 20



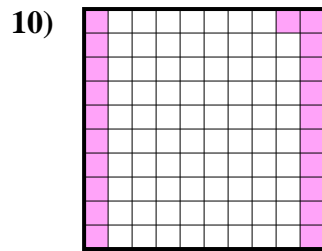
Bruch $\frac{1}{10}$
 Dezimale $0,1$
 Prozentangabe 10



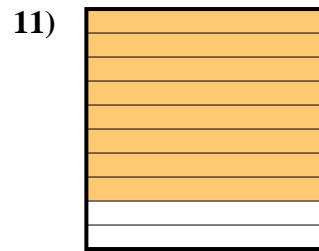
Bruch $\frac{36}{100}$
 Dezimale $0,36$
 Prozentangabe 36



Bruch $\frac{53}{100}$
 Dezimale $0,53$
 Prozentangabe 53



Bruch $\frac{21}{100}$
 Dezimale $0,21$
 Prozentangabe 21



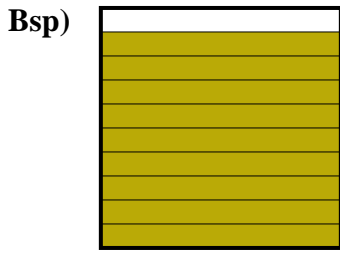
Bruch $\frac{8}{10}$
 Dezimale $0,8$
 Prozentangabe 80

Antworten

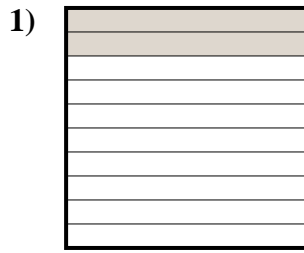
Bsp.	$\frac{4}{10}$	0,4	40%
1.	$\frac{3}{10}$	0,3	30%
2.	$\frac{5}{100}$	0,05	5%
3.	$\frac{24}{100}$	0,24	24%
4.	$\frac{45}{100}$	0,45	45%
5.	$\frac{42}{100}$	0,42	42%
6.	$\frac{2}{10}$	0,2	20%
7.	$\frac{1}{10}$	0,1	10%
8.	$\frac{36}{100}$	0,36	36%
9.	$\frac{53}{100}$	0,53	53%
10.	$\frac{21}{100}$	0,21	21%
11.	$\frac{8}{10}$	0,8	80%



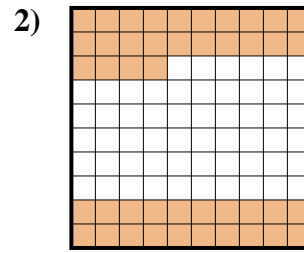
Stelle die schraffierte Fläche als Bruch, Dezimale und als Prozentangabe dar.



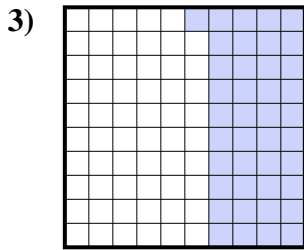
Bruch $\frac{9}{10}$
 Dezimale 0,9
 Prozentangabe 90



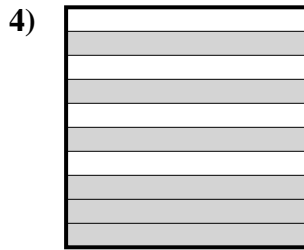
Bruch _____
 Dezimale _____
 Prozentangabe _____



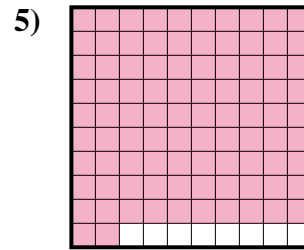
Bruch _____
 Dezimale _____
 Prozentangabe _____



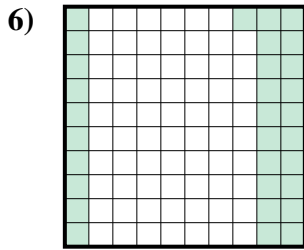
Bruch _____
 Dezimale _____
 Prozentangabe _____



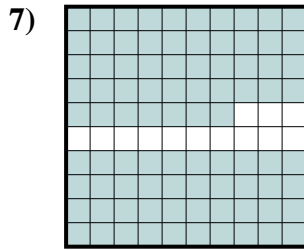
Bruch _____
 Dezimale _____
 Prozentangabe _____



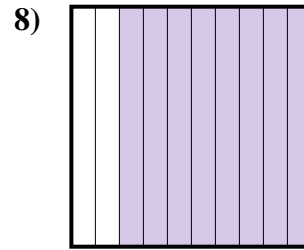
Bruch _____
 Dezimale _____
 Prozentangabe _____



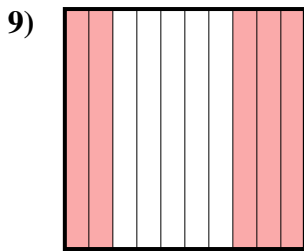
Bruch _____
 Dezimale _____
 Prozentangabe _____



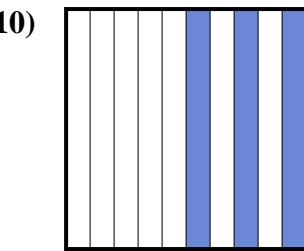
Bruch _____
 Dezimale _____
 Prozentangabe _____



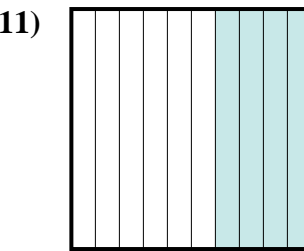
Bruch _____
 Dezimale _____
 Prozentangabe _____



Bruch _____
 Dezimale _____
 Prozentangabe _____



Bruch _____
 Dezimale _____
 Prozentangabe _____



Bruch _____
 Dezimale _____
 Prozentangabe _____

Antworten

Bsp. $\frac{9}{10}$ 0,9 90%

1. _____
2. _____
3. _____
4. _____
5. _____
6. _____
7. _____
8. _____
9. _____
10. _____
11. _____

