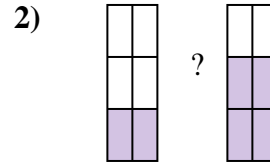
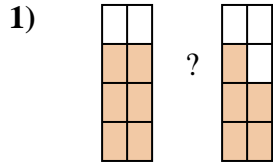
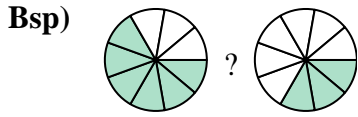


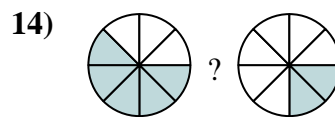
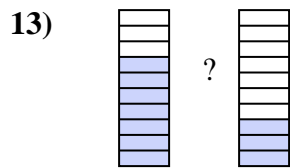
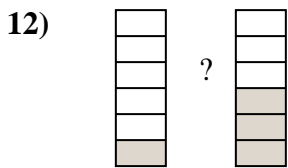
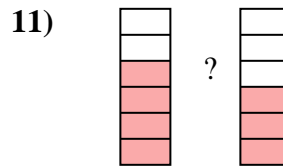
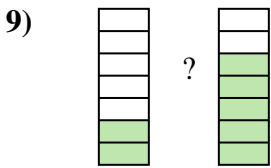
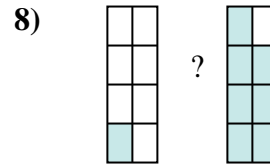
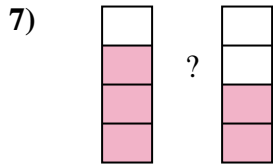
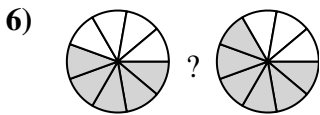
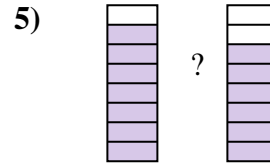
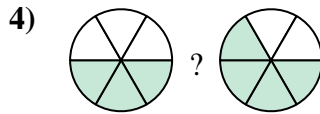
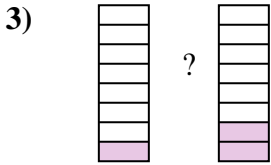


Benutze '<', '>' oder '=' um die Brüche miteinander zu vergleichen.



**Antworten**  
 Bsp.  $\frac{6}{9}$   $>$   $\frac{3}{9}$

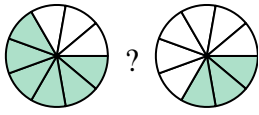
1. \_\_\_\_\_
2. \_\_\_\_\_
3. \_\_\_\_\_
4. \_\_\_\_\_
5. \_\_\_\_\_
6. \_\_\_\_\_
7. \_\_\_\_\_
8. \_\_\_\_\_
9. \_\_\_\_\_
10. \_\_\_\_\_
11. \_\_\_\_\_
12. \_\_\_\_\_
13. \_\_\_\_\_
14. \_\_\_\_\_



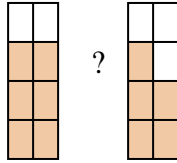


Benutze '<', '>' oder '=' um die Brüche miteinander zu vergleichen.

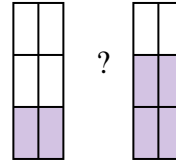
Bsp)



1)



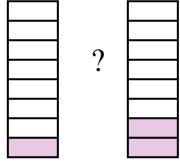
2)



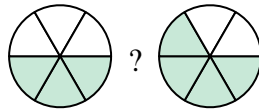
**Antworten**

Bsp.	$\frac{6}{9}$	>	$\frac{3}{9}$
1.	$\frac{6}{8}$	>	$\frac{5}{8}$
2.	$\frac{2}{6}$	<	$\frac{4}{6}$
3.	$\frac{1}{8}$	<	$\frac{2}{8}$
4.	$\frac{3}{6}$	<	$\frac{4}{6}$
5.	$\frac{7}{8}$	>	$\frac{6}{8}$
6.	$\frac{5}{9}$	<	$\frac{6}{9}$
7.	$\frac{3}{4}$	>	$\frac{2}{4}$
8.	$\frac{1}{8}$	<	$\frac{7}{8}$
9.	$\frac{2}{7}$	<	$\frac{5}{7}$
10.	$\frac{2}{5}$	<	$\frac{4}{5}$
11.	$\frac{4}{6}$	>	$\frac{3}{6}$
12.	$\frac{1}{6}$	<	$\frac{3}{6}$
13.	$\frac{7}{10}$	>	$\frac{3}{10}$
14.	$\frac{5}{8}$	>	$\frac{2}{8}$

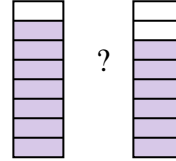
3)



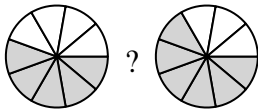
4)



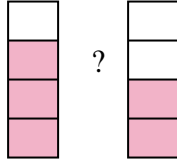
5)



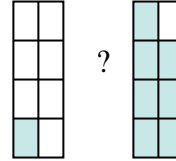
6)



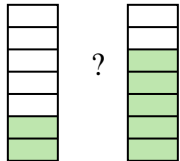
7)



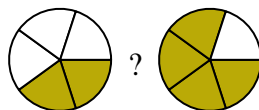
8)



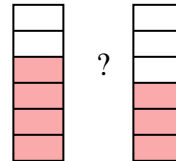
9)



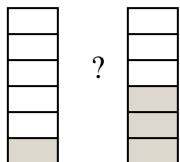
10)



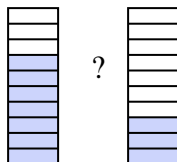
11)



12)



13)



14)

